




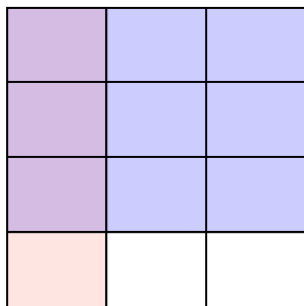
Dùng hộp được cho để cho thấy một ví dụ bằng hình về nhân hai phân số.

Câu trả lời

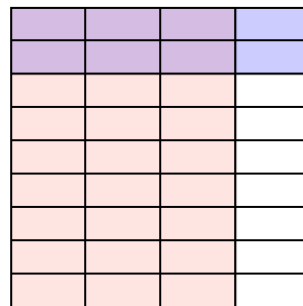
Vd) $\frac{8}{9} \times \frac{5}{8} =$



1) $\frac{1}{3} \times \frac{3}{4} =$



2) $\frac{3}{4} \times \frac{2}{9} =$



Vd. $\frac{40}{72}$


1. $\frac{3}{12}$

2. $\frac{6}{36}$

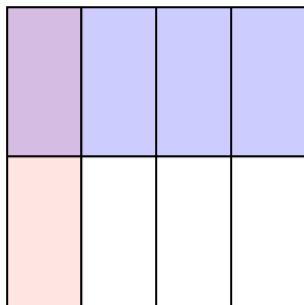
3. $\frac{1}{4}$

4. $\frac{1}{8}$

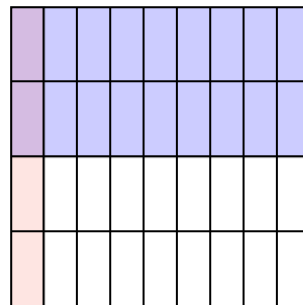
3) $\frac{1}{2} \times \frac{1}{2} =$



4) $\frac{1}{4} \times \frac{1}{2} =$



5) $\frac{1}{9} \times \frac{2}{4} =$



5. $\frac{2}{36}$

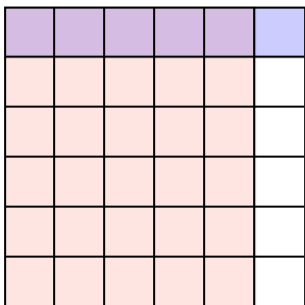
6. $\frac{5}{36}$

7. $\frac{12}{27}$

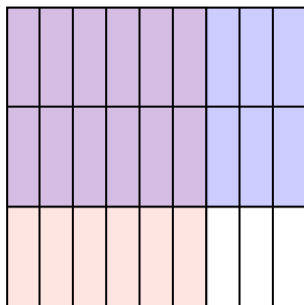
8. $\frac{35}{54}$

9. $\frac{4}{24}$

6) $\frac{5}{6} \times \frac{1}{6} =$




7) $\frac{6}{9} \times \frac{2}{3} =$




10. $\frac{1}{12}$

11. $\frac{20}{42}$

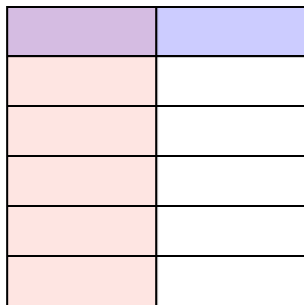
8) $\frac{5}{6} \times \frac{7}{9} =$



9) $\frac{2}{4} \times \frac{2}{6} =$



10) $\frac{1}{2} \times \frac{1}{6} =$



11) $\frac{5}{7} \times \frac{4}{6} =$

