


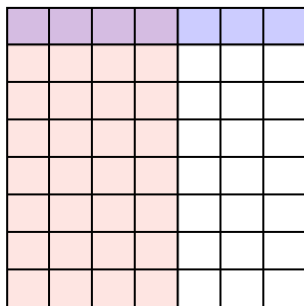


Dùng hộp được cho để cho thấy một ví dụ bằng hình về nhân hai phân số.

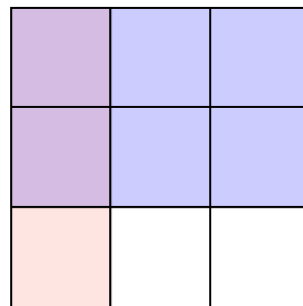
Vd) $\frac{1}{2} \times \frac{6}{7} =$



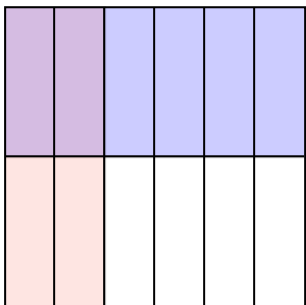
1) $\frac{4}{7} \times \frac{1}{8} =$



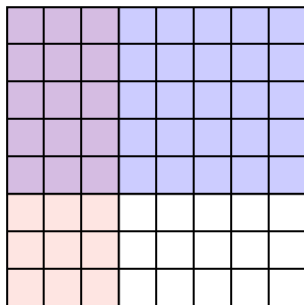
2) $\frac{1}{3} \times \frac{2}{3} =$



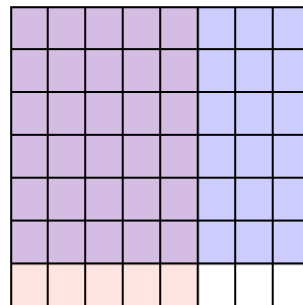
3) $\frac{2}{6} \times \frac{1}{2} =$




4) $\frac{3}{8} \times \frac{5}{8} =$



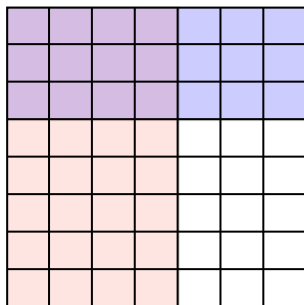
5) $\frac{5}{8} \times \frac{6}{7} =$



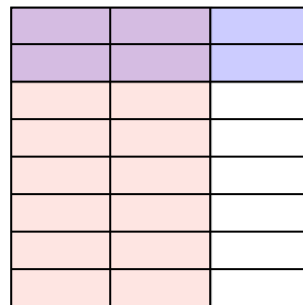
6) $\frac{3}{4} \times \frac{1}{3} =$




7) $\frac{4}{7} \times \frac{3}{8} =$



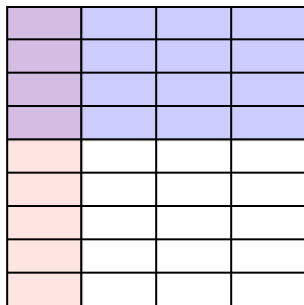
8) $\frac{2}{3} \times \frac{2}{8} =$



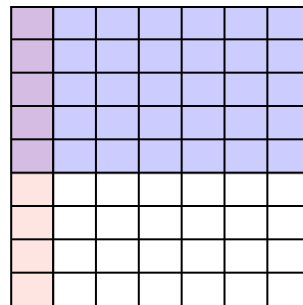
9) $\frac{1}{2} \times \frac{3}{5} =$



10) $\frac{1}{4} \times \frac{4}{9} =$



11) $\frac{1}{7} \times \frac{5}{9} =$



Câu trả lời

Vd. $\frac{6}{14}$

1. $\frac{4}{56}$

2. $\frac{2}{9}$

3. $\frac{2}{12}$

4. $\frac{15}{64}$

5. $\frac{30}{56}$

6. $\frac{3}{12}$

7. $\frac{12}{56}$

8. $\frac{4}{24}$

9. $\frac{3}{10}$

10. $\frac{4}{36}$

11. $\frac{5}{63}$