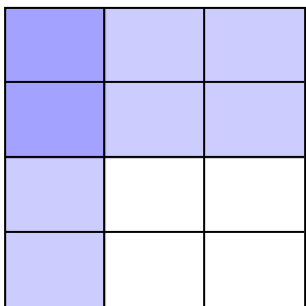




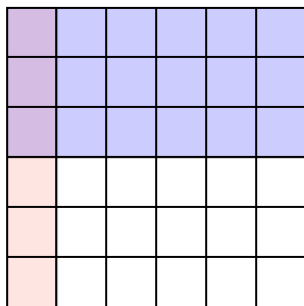


Dùng hộp được cho để cho thấy một ví dụ bằng hình về nhân hai phân số.

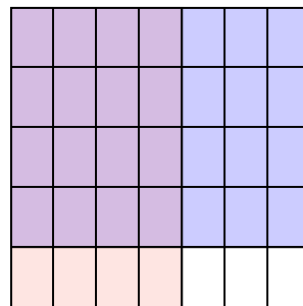
Vd)  $\frac{1}{3} \times \frac{2}{4} =$




1)  $\frac{1}{6} \times \frac{3}{6} =$



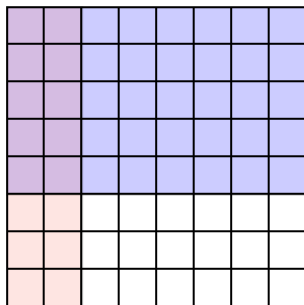
2)  $\frac{4}{7} \times \frac{4}{5} =$




3)  $\frac{1}{4} \times \frac{1}{3} =$



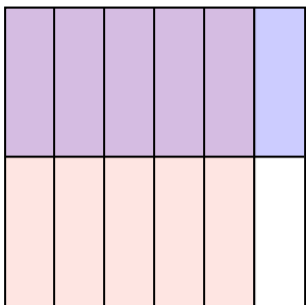
4)  $\frac{2}{8} \times \frac{5}{8} =$



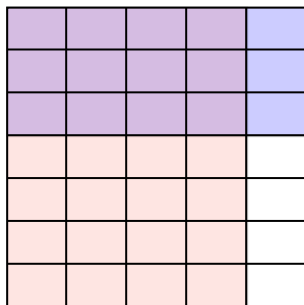
5)  $\frac{3}{4} \times \frac{7}{9} =$



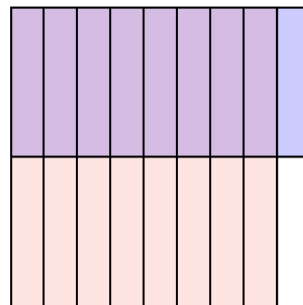
6)  $\frac{5}{6} \times \frac{1}{2} =$




7)  $\frac{4}{5} \times \frac{3}{7} =$



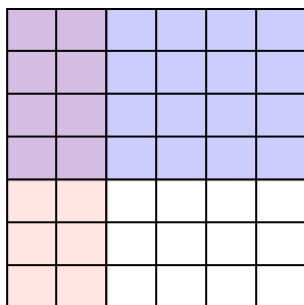
8)  $\frac{8}{9} \times \frac{1}{2} =$




9)  $\frac{7}{8} \times \frac{4}{8} =$



10)  $\frac{2}{6} \times \frac{4}{7} =$



11)  $\frac{1}{2} \times \frac{1}{2} =$



Câu trả lời

Vd.  $\frac{2}{12}$

1.  $\frac{3}{36}$

2.  $\frac{16}{35}$

3.  $\frac{1}{12}$

4.  $\frac{10}{64}$

5.  $\frac{21}{36}$

6.  $\frac{5}{12}$

7.  $\frac{12}{35}$

8.  $\frac{8}{18}$

9.  $\frac{28}{64}$

10.  $\frac{8}{42}$

11.  $\frac{1}{4}$