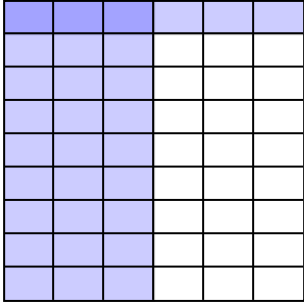




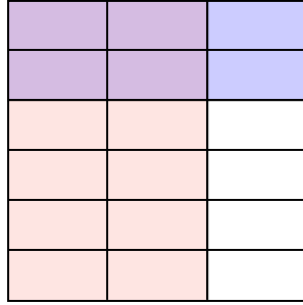
Dùng hộp được cho để cho thấy một ví dụ bằng hình về nhân hai phân số.

Câu trả lời

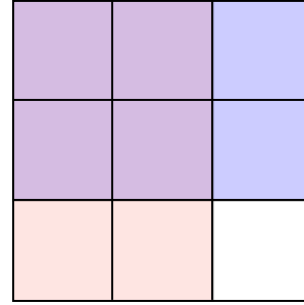
Vd) $\frac{3}{6} \times \frac{1}{9} =$



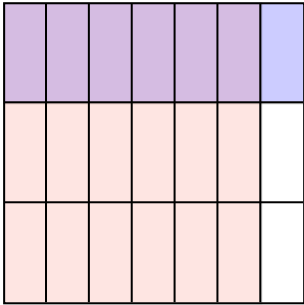
1) $\frac{2}{3} \times \frac{2}{6} =$



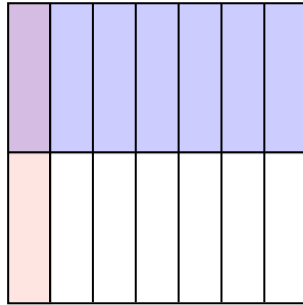
2) $\frac{2}{3} \times \frac{2}{3} =$



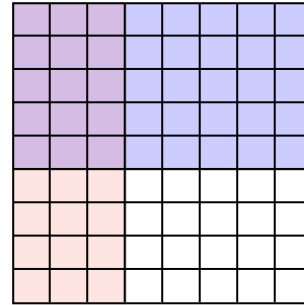
3) $\frac{6}{7} \times \frac{1}{3} =$



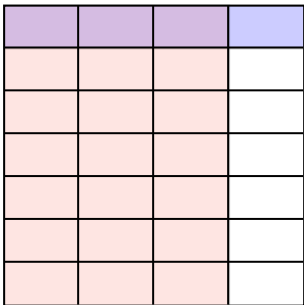
4) $\frac{1}{7} \times \frac{1}{2} =$



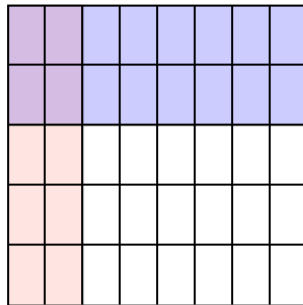
5) $\frac{3}{8} \times \frac{5}{9} =$



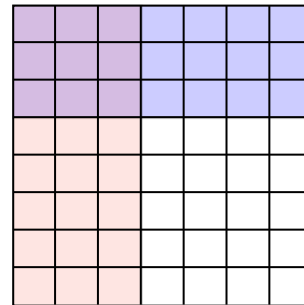
6) $\frac{3}{4} \times \frac{1}{7} =$



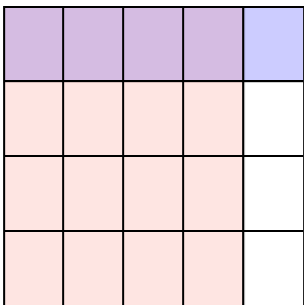
7) $\frac{2}{8} \times \frac{2}{5} =$



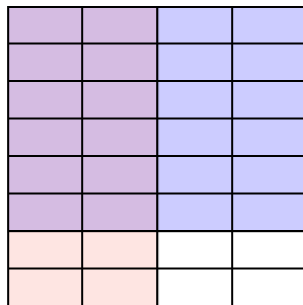
8) $\frac{3}{7} \times \frac{3}{8} =$



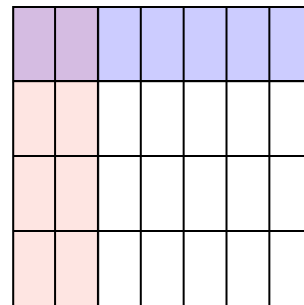
9) $\frac{4}{5} \times \frac{1}{4} =$



10) $\frac{2}{4} \times \frac{6}{8} =$



11) $\frac{2}{7} \times \frac{1}{4} =$



- Vd. $\frac{3}{54}$
1. $\frac{4}{18}$
2. $\frac{4}{9}$
3. $\frac{6}{21}$
4. $\frac{1}{14}$
5. $\frac{15}{72}$
6. $\frac{3}{28}$
7. $\frac{4}{40}$
8. $\frac{9}{56}$
9. $\frac{4}{20}$
10. $\frac{12}{32}$
11. $\frac{2}{28}$