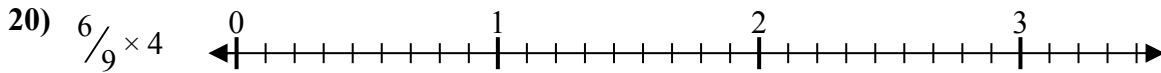
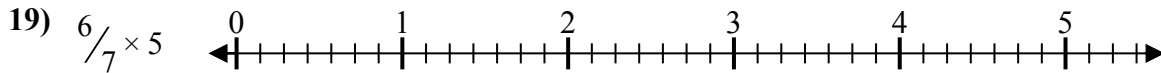
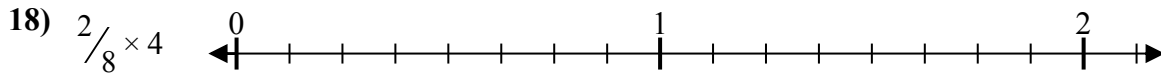
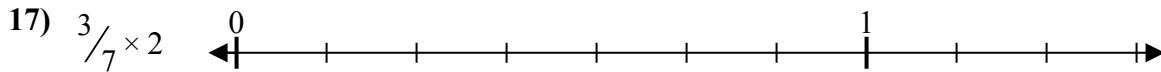
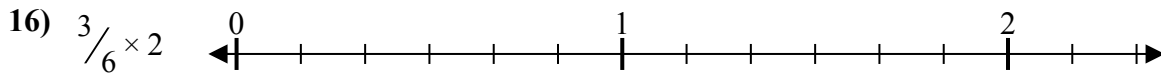
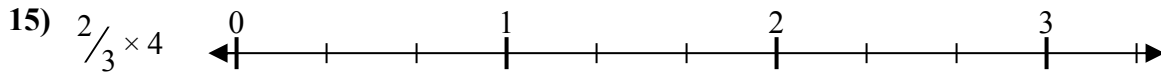
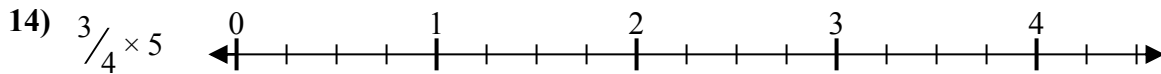
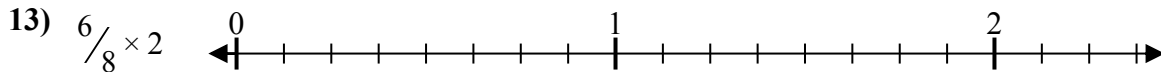
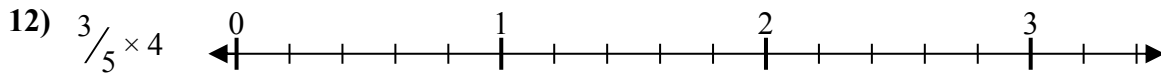
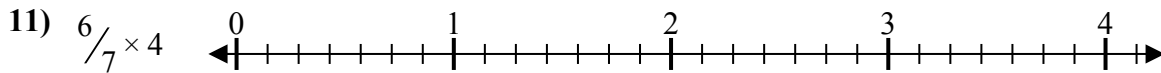
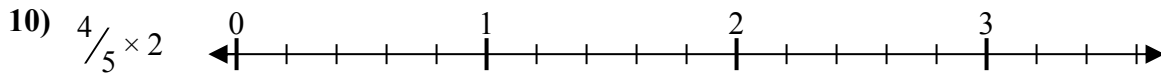
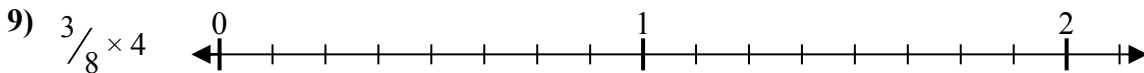
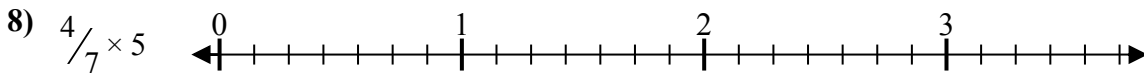
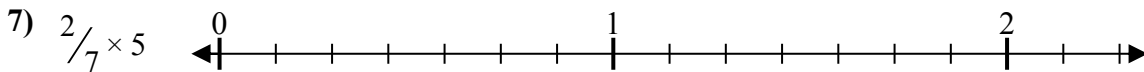
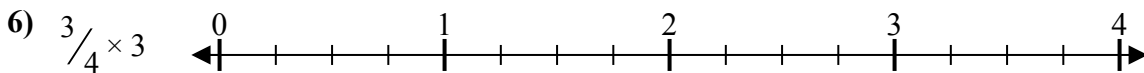
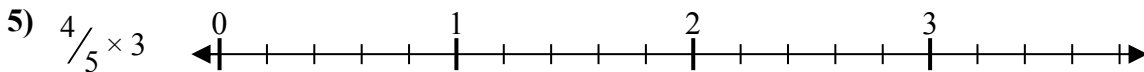
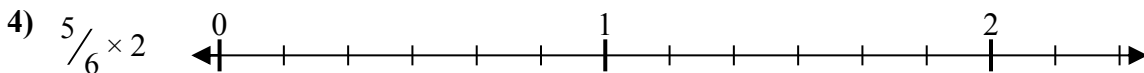
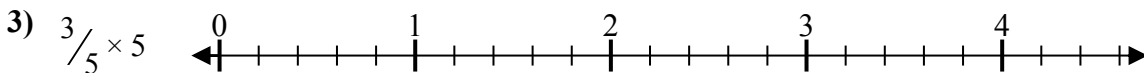
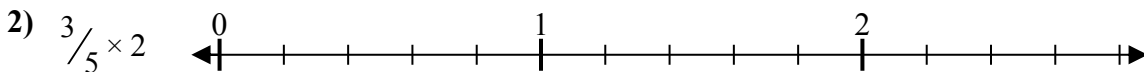
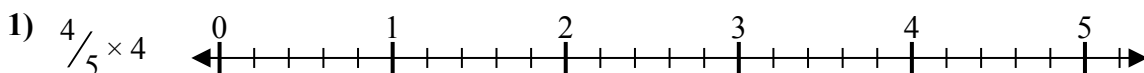




Giải các câu hỏi.

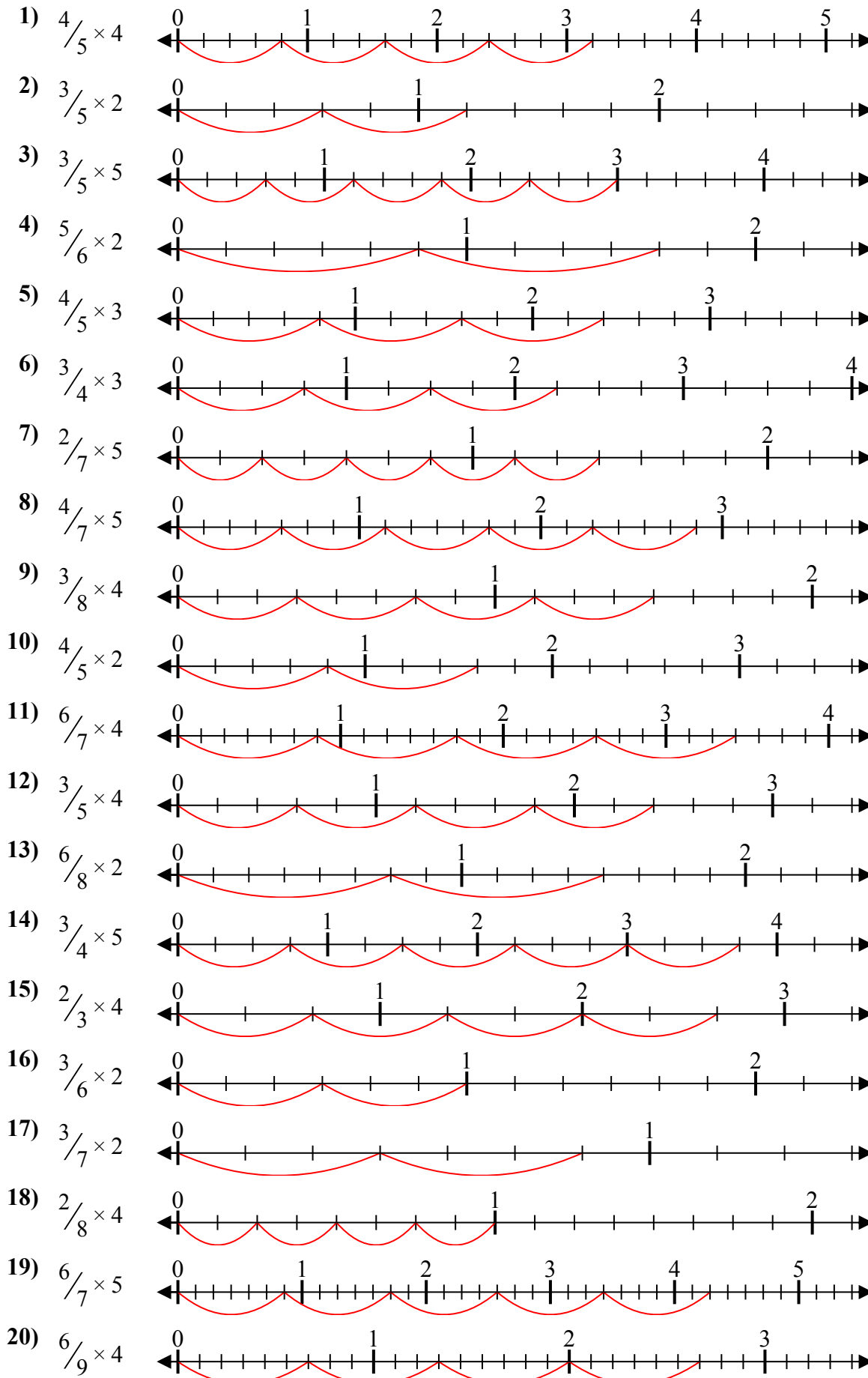
Câu trả lời



1. _____
2. _____
3. _____
4. _____
5. _____
6. _____
7. _____
8. _____
9. _____
10. _____
11. _____
12. _____
13. _____
14. _____
15. _____
16. _____
17. _____
18. _____
19. _____
20. _____



Giải các câu hỏi.



Câu trả lời

1. $\frac{16}{5} = 3\frac{1}{5}$
2. $\frac{6}{5} = 1\frac{1}{5}$
3. $\frac{15}{5} = 3$
4. $\frac{10}{6} = 1\frac{2}{3}$
5. $\frac{12}{5} = 2\frac{2}{5}$
6. $\frac{9}{4} = 2\frac{1}{4}$
7. $\frac{10}{7} = 1\frac{3}{7}$
8. $\frac{20}{7} = 2\frac{6}{7}$
9. $\frac{12}{8} = 1\frac{1}{2}$
10. $\frac{8}{5} = 1\frac{3}{5}$
11. $\frac{24}{7} = 3\frac{3}{7}$
12. $\frac{12}{5} = 2\frac{2}{5}$
13. $\frac{12}{8} = 1\frac{1}{2}$
14. $\frac{15}{4} = 3\frac{3}{4}$
15. $\frac{8}{3} = 2\frac{2}{3}$
16. $\frac{6}{6} = 1$
17. $\frac{6}{7} = \frac{6}{7}$
18. $\frac{8}{8} = 1$
19. $\frac{30}{7} = 4\frac{2}{7}$
20. $\frac{24}{9} = 2\frac{2}{3}$