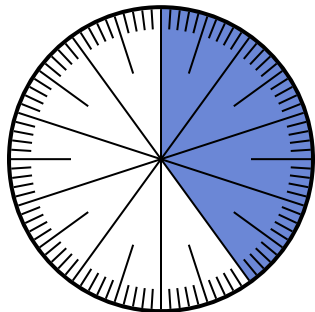




Giải các câu hỏi.

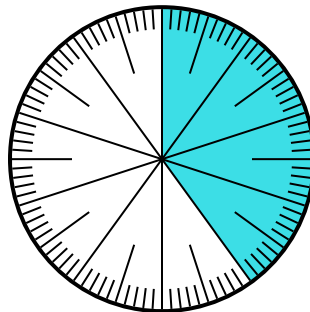
Câu trả lời

- 1) Which choice represents the un-shaded portion of the number wheel?



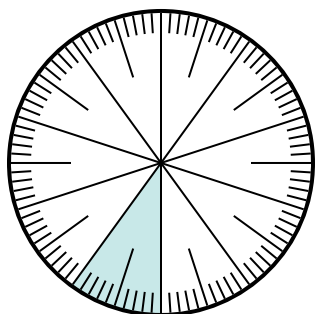
- A. $\frac{40}{60}$ B. $\frac{60}{100}$
C. 0,0060 D. 60

- 2) Which choice represents the un-shaded portion of the number wheel?



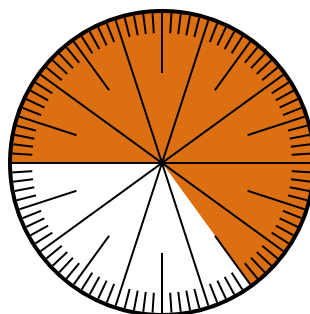
- A. 60 B. 0,60
C. $\frac{0.6}{100}$ D. 6,00

- 3) Lựa chọn nào thể hiện phần bóng mờ của bánh xe số?



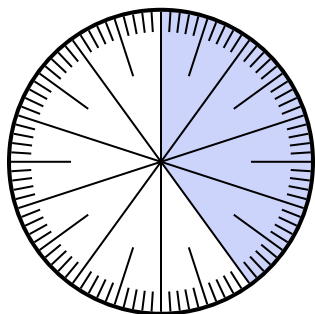
- A. 0,10 B. 1,00
C. $\frac{90}{10}$ D. 1

- 4) Which choice represents the un-shaded portion of the number wheel?



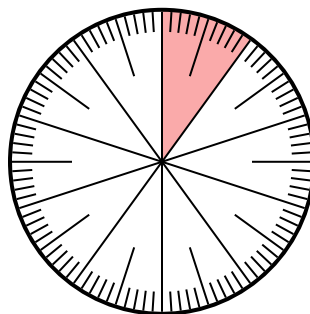
- A. $\frac{65}{35}$ B. $\frac{3.50}{100}$
C. 3,50 D. 0,35

- 5) Which choice represents the un-shaded portion of the number wheel?



- A. $\frac{60}{40}$ B. $\frac{40}{60}$
C. 6 D. $\frac{60}{100}$

- 6) Lựa chọn nào thể hiện phần bóng mờ của bánh xe số?



- A. 1,0 B. $\frac{0.10}{100}$
C. $\frac{10}{100}$ D. 10,0

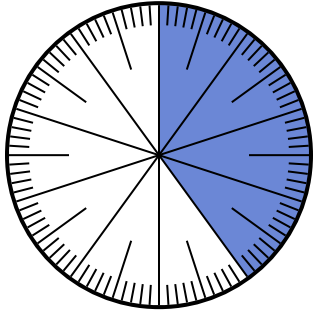
1. _____
2. _____
3. _____
4. _____
5. _____
6. _____



Giải các câu hỏi.

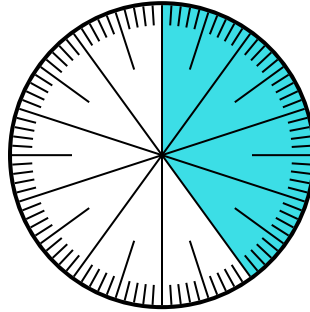
Câu trả lời

1) Which choice represents the un-shaded portion of the number wheel?



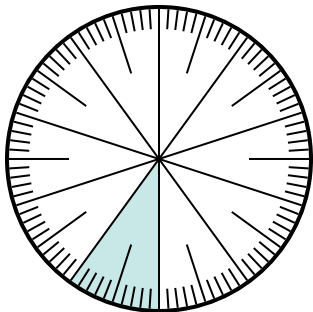
- A. $\frac{40}{60}$ B. $\frac{60}{100}$
 C. 0,0060 D. 60

2) Which choice represents the un-shaded portion of the number wheel?



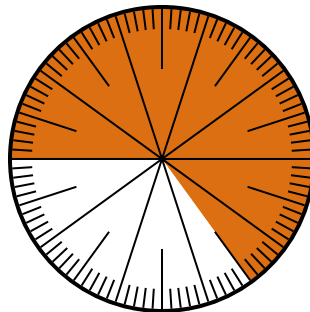
- A. 60 B. 0,60
 C. $\frac{0.6}{100}$ D. 6,00

3) Lựa chọn nào thể hiện phần bóng mờ của bánh xe số?



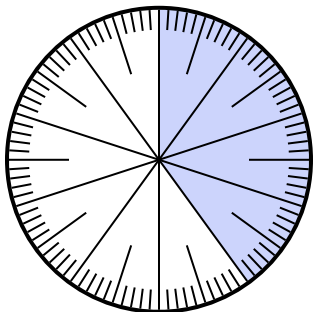
- A. 0,10 B. 1,00
 C. $\frac{90}{10}$ D. 1

4) Which choice represents the un-shaded portion of the number wheel?



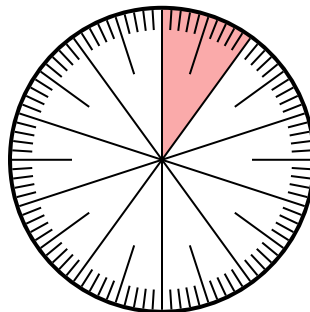
- A. $\frac{65}{35}$ B. $\frac{3.50}{100}$
 C. 3,50 D. 0,35

5) Which choice represents the un-shaded portion of the number wheel?



- A. $\frac{60}{40}$ B. $\frac{40}{60}$
 C. 6 D. $\frac{60}{100}$

6) Lựa chọn nào thể hiện phần bóng mờ của bánh xe số?



- A. 1,0 B. $\frac{0.10}{100}$
 C. $\frac{10}{100}$ D. 10,0

1. **B**
 2. **B**
 3. **A**
 4. **D**
 5. **D**
 6. **C**