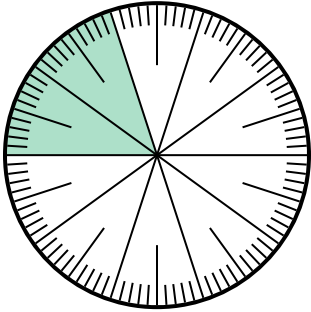




Giải các câu hỏi.

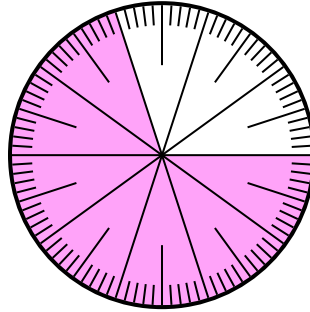
Câu trả lời

1) Which choice represents the un-shaded portion of the number wheel?



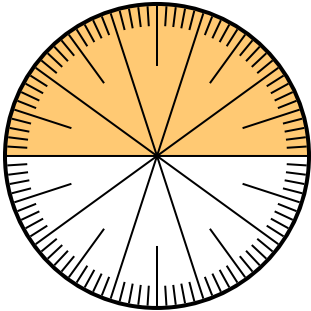
- A. $\frac{0.8}{100}$ B. 0,8
C. 8 D. $\frac{80}{20}$

2) Which choice represents the un-shaded portion of the number wheel?



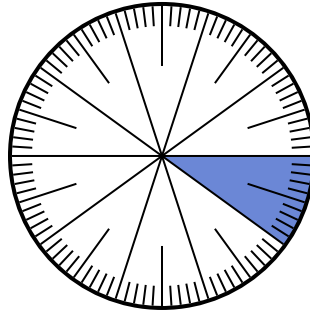
- A. 0,30 B. 70
C. 0,070 D. $\frac{70}{30}$

3) Which choice represents the un-shaded portion of the number wheel?



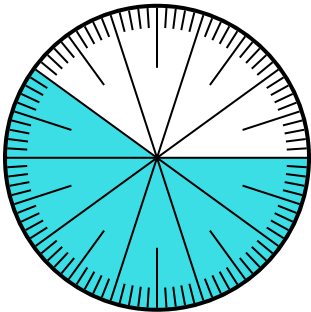
- A. 5,00 B. $\frac{5}{100}$
C. $\frac{5}{100}$ D. 0,5

4) Lựa chọn nào thể hiện phần bóng mờ của bánh xe số?



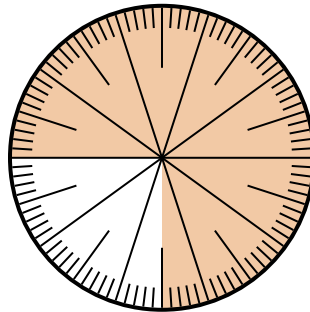
- A. 0,10 B. 1
C. $\frac{1}{100}$ D. $\frac{0.9}{100}$

5) Which choice represents the un-shaded portion of the number wheel?



- A. 4,00 B. 0,40
C. $\frac{40}{60}$ D. $\frac{4,00}{100}$

6) Lựa chọn nào thể hiện phần bóng mờ của bánh xe số?



- A. $\frac{75}{25}$ B. 0,075
C. $\frac{75}{100}$ D. 7,50

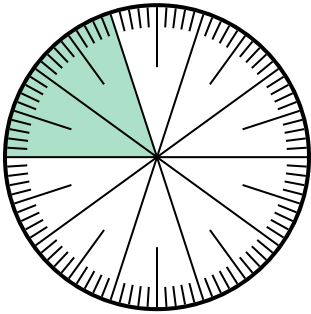
1. _____
2. _____
3. _____
4. _____
5. _____
6. _____



Giải các câu hỏi.

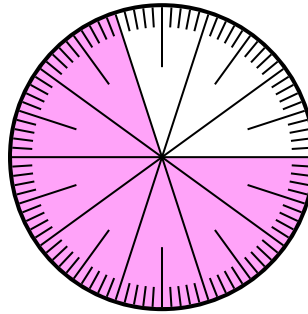
Câu trả lời

1) Which choice represents the un-shaded portion of the number wheel?



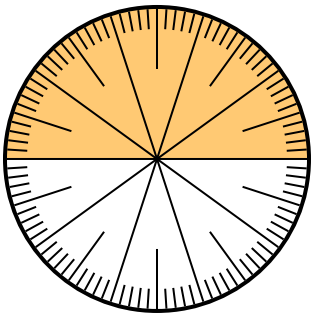
- A. $\frac{0.8}{100}$ B. 0,8
C. 8 D. $\frac{80}{20}$

2) Which choice represents the un-shaded portion of the number wheel?



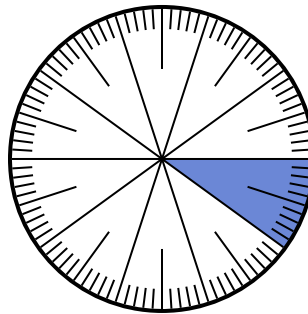
- A. 0,30 B. 70
C. 0,070 D. $\frac{70}{30}$

3) Which choice represents the un-shaded portion of the number wheel?



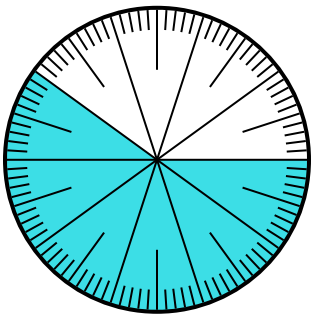
- A. 5,00 B. $\frac{5}{100}$
C. $\frac{5}{100}$ D. 0,5

4) Lựa chọn nào thể hiện phần bóng mờ của bánh xe số?



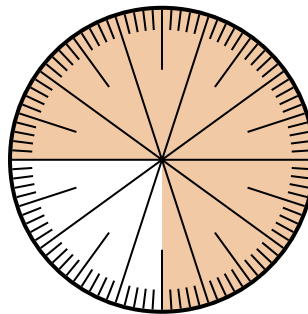
- A. 0,10 B. 1
C. $\frac{1}{100}$ D. $\frac{0.9}{100}$

5) Which choice represents the un-shaded portion of the number wheel?



- A. 4,00 B. 0,40
C. $\frac{40}{60}$ D. $\frac{4,00}{100}$

6) Lựa chọn nào thể hiện phần bóng mờ của bánh xe số?



- A. $\frac{75}{25}$ B. 0,075
C. $\frac{75}{100}$ D. 7,50

1. **B**
2. **A**
3. **D**
4. **A**
5. **B**
6. **C**