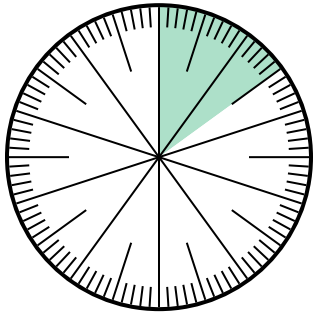




Giải các câu hỏi.

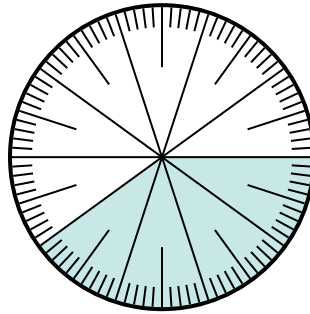
Câu trả lời

- 1) Lựa chọn nào thể hiện phần bóng mờ của bánh xe số?



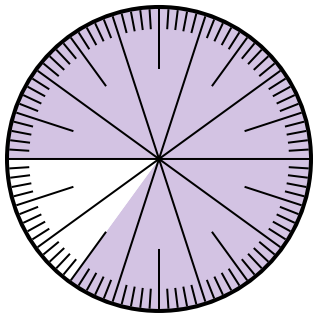
- A. $\frac{1,50}{100}$ B. $\frac{15}{100}$
C. $\frac{1,5}{100}$ D. 1,50

- 2) Which choice represents the un-shaded portion of the number wheel?



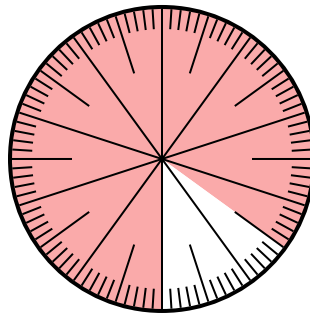
- A. $\frac{6,00}{100}$ B. 0,6
C. 6 D. 6,00

- 3) Which choice represents the un-shaded portion of the number wheel?



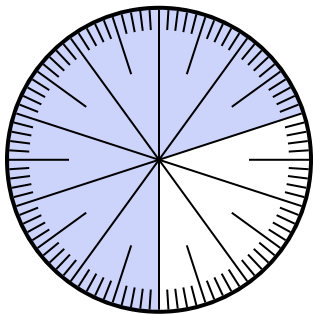
- A. 1.5 B. 0,15
C. $\frac{15}{85}$ D. $\frac{0,15}{100}$

- 4) Which choice represents the un-shaded portion of the number wheel?



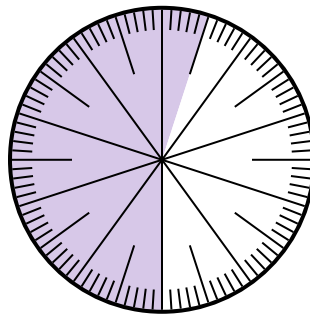
- A. 15 B. 0,15
C. $\frac{0,85}{100}$ D. $\frac{8,5}{100}$

- 5) Which choice represents the un-shaded portion of the number wheel?



- A. 0,030 B. 30
C. $\frac{3,00}{100}$ D. $\frac{30}{100}$

- 6) Which choice represents the un-shaded portion of the number wheel?



- A. $\frac{4,5}{100}$ B. 0,45
C. 45 D. $\frac{4,50}{100}$

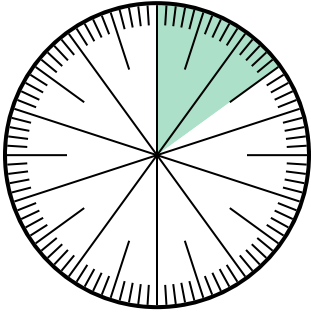
1. _____
2. _____
3. _____
4. _____
5. _____
6. _____



Giải các câu hỏi.

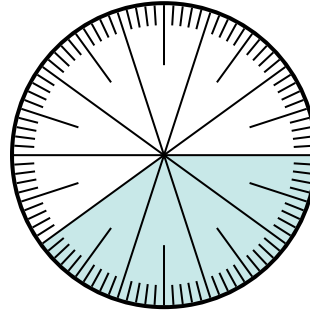
Câu trả lời

1) Lựa chọn nào thể hiện phần bóng mờ của bánh xe số?



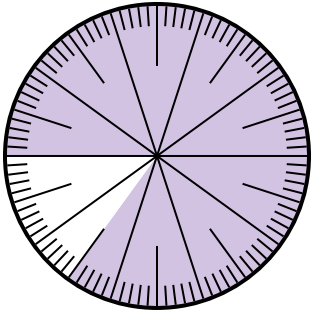
- A. $\frac{1,50}{100}$
- B. $\frac{15}{100}$
- C. $\frac{1,5}{100}$
- D. 1,50

2) Which choice represents the un-shaded portion of the number wheel?



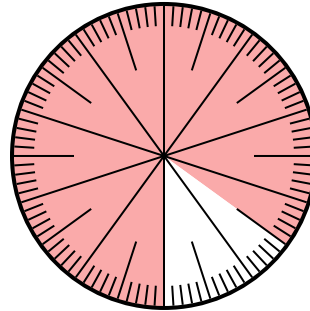
- A. $\frac{6,00}{100}$
- B. 0,6
- C. 6
- D. 6,00

3) Which choice represents the un-shaded portion of the number wheel?



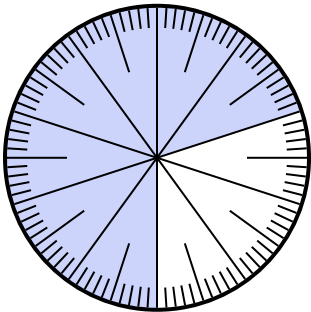
- A. 1.5
- B. 0,15
- C. $\frac{15}{85}$
- D. $\frac{0,15}{100}$

4) Which choice represents the un-shaded portion of the number wheel?



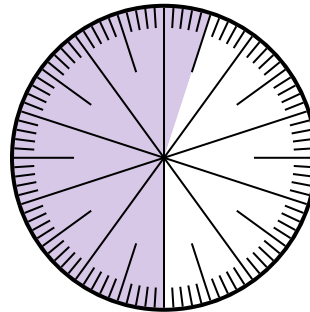
- A. 15
- B. 0,15
- C. $\frac{0,85}{100}$
- D. $\frac{8,5}{100}$

5) Which choice represents the un-shaded portion of the number wheel?



- A. 0,030
- B. 30
- C. $\frac{3,00}{100}$
- D. $\frac{30}{100}$

6) Which choice represents the un-shaded portion of the number wheel?



- A. $\frac{4,5}{100}$
- B. 0,45
- C. 45
- D. $\frac{4,50}{100}$

- 1. **B**
- 2. **B**
- 3. **B**
- 4. **B**
- 5. **D**
- 6. **B**