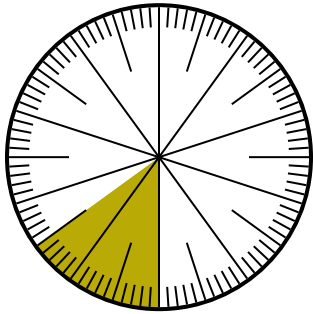




Giải các câu hỏi.

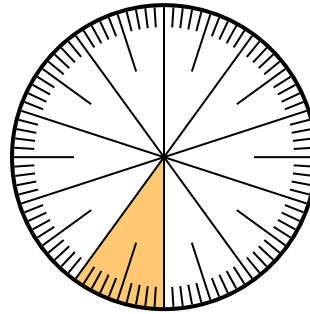
Câu trả lời

1) Which choice represents the un-shaded portion of the number wheel?



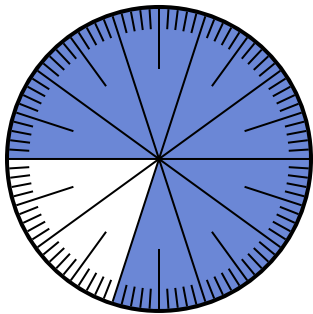
- A. $\frac{85}{100}$ B. $\frac{8.5}{100}$
 C. $\frac{0.85}{100}$ D. $\frac{85}{15}$

2) Which choice represents the un-shaded portion of the number wheel?



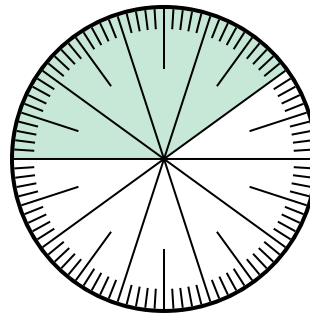
- A. 0,9 B. 90
 C. $\frac{1}{100}$ D. 9

3) Which choice represents the un-shaded portion of the number wheel?



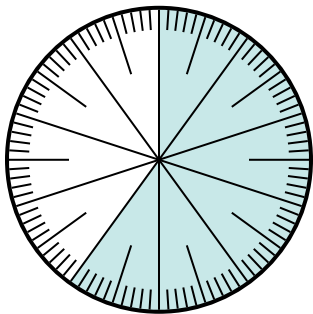
- A. 20 B. $\frac{20}{80}$
 C. 0,2 D. $\frac{20}{10}$

4) Which choice represents the un-shaded portion of the number wheel?



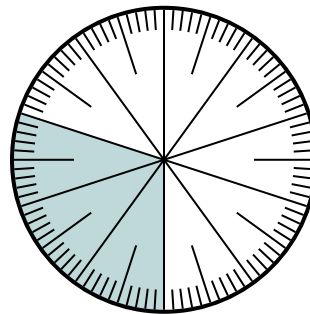
- A. 0,0060 B. 0,6
 C. 60 D. $\frac{40}{60}$

5) Which choice represents the un-shaded portion of the number wheel?



- A. $\frac{60}{40}$ B. $\frac{40}{100}$
 C. $\frac{0.4}{100}$ D. 40

6) Which choice represents the un-shaded portion of the number wheel?



- A. $\frac{70}{100}$ B. $\frac{70}{30}$
 C. 7 D. $\frac{30}{70}$

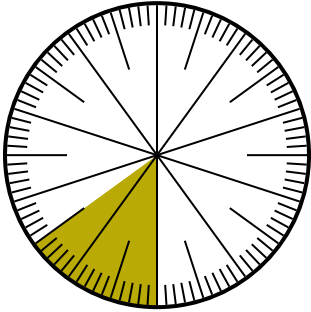
1. _____
 2. _____
 3. _____
 4. _____
 5. _____
 6. _____



Giải các câu hỏi.

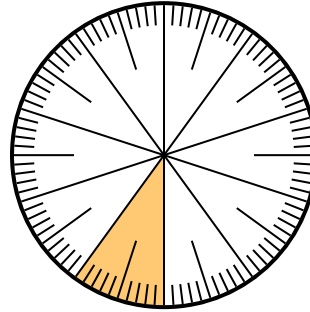
Câu trả lời

1) Which choice represents the un-shaded portion of the number wheel?



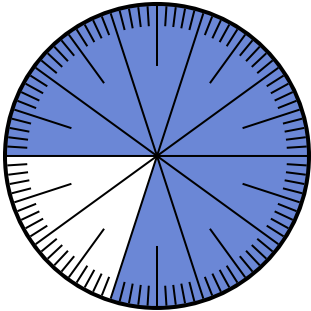
- A. $\frac{85}{100}$ B. $\frac{8.5}{100}$
 C. $\frac{0.85}{100}$ D. $\frac{85}{15}$

2) Which choice represents the un-shaded portion of the number wheel?



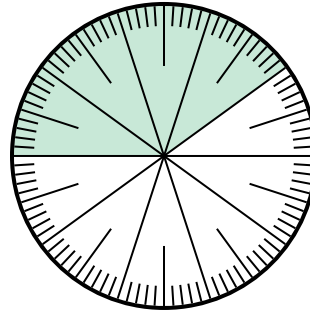
- A. 0,9 B. 90
 C. $\frac{1}{100}$ D. 9

3) Which choice represents the un-shaded portion of the number wheel?




- A. 20 B. $\frac{20}{80}$
 C. 0,2 D. $\frac{20}{10}$

4) Which choice represents the un-shaded portion of the number wheel?



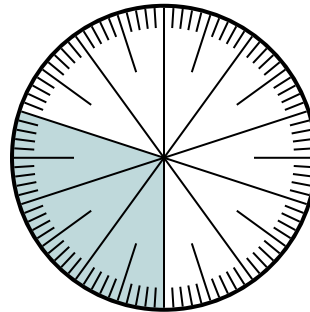
- A. 0,0060 B. 0,6
 C. 60 D. $\frac{40}{60}$

5) Which choice represents the un-shaded portion of the number wheel?



- A. $\frac{60}{40}$ B. $\frac{40}{100}$
 C. $\frac{0.4}{100}$ D. 40

6) Which choice represents the un-shaded portion of the number wheel?



- A. $\frac{70}{100}$ B. $\frac{70}{30}$
 C. 7 D. $\frac{30}{70}$

1. **A**
 2. **A**
 3. **C**
 4. **B**
 5. **B**
 6. **A**