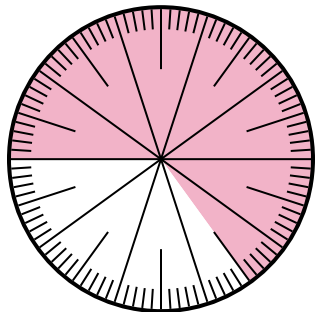




Giải các câu hỏi.

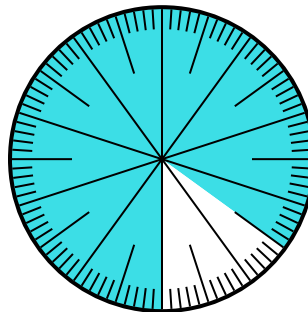
Câu trả lời

1) Which choice represents the un-shaded portion of the number wheel?



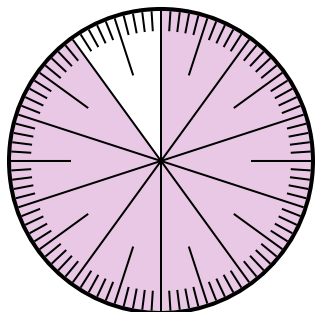
- A. 0,35 B. $\frac{0.35}{100}$
 C. 0,035 D. 3,50

2) Which choice represents the un-shaded portion of the number wheel?



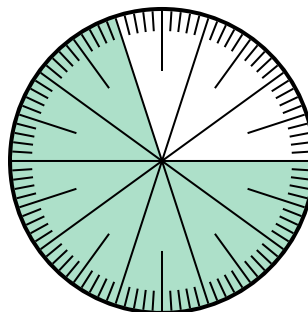
- A. $\frac{15}{100}$ B. 1,50
 C. $\frac{85}{15}$ D. 15

3) Which choice represents the un-shaded portion of the number wheel?



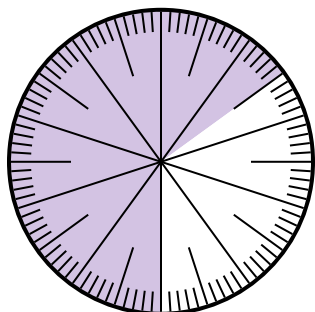
- A. $\frac{1}{100}$ B. 0,1
 C. 1 D. 10

4) Lựa chọn nào thể hiện phần bóng mờ của bánh xe số?



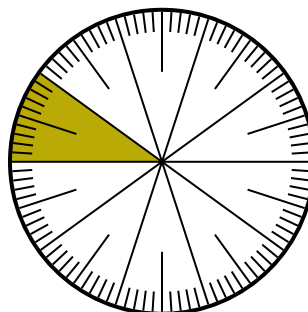
- A. $\frac{70}{100}$ B. $\frac{70}{30}$
 C. $\frac{30}{70}$ D. $\frac{7,00}{100}$

5) Which choice represents the un-shaded portion of the number wheel?



- A. $\frac{65}{35}$ B. $\frac{35}{100}$
 C. 0,035 D. $\frac{3.5}{100}$

6) Lựa chọn nào thể hiện phần bóng mờ của bánh xe số?



- A. $\frac{1,00}{100}$ B. $\frac{90}{10}$
 C. 10 D. $\frac{10}{100}$

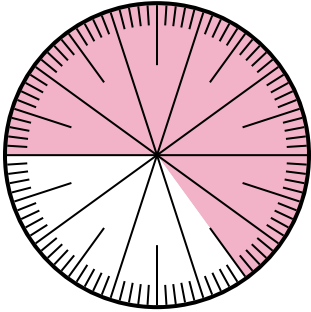
1. _____
 2. _____
 3. _____
 4. _____
 5. _____
 6. _____



Giải các câu hỏi.

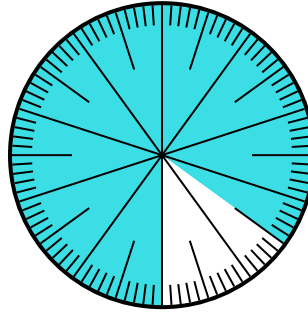
Câu trả lời

1) Which choice represents the un-shaded portion of the number wheel?



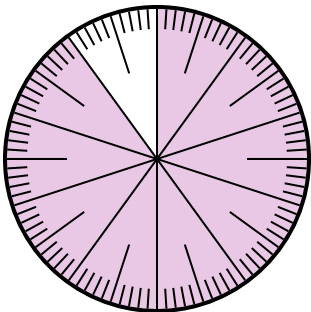
- A. 0,35 B. $\frac{0.35}{100}$
C. 0,035 D. 3,50

2) Which choice represents the un-shaded portion of the number wheel?



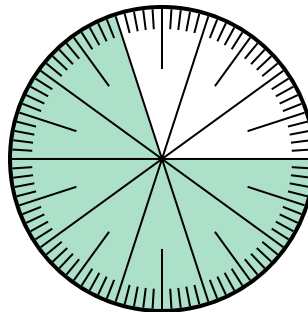
- A. $\frac{15}{100}$ B. 1,50
C. $\frac{85}{15}$ D. 15

3) Which choice represents the un-shaded portion of the number wheel?



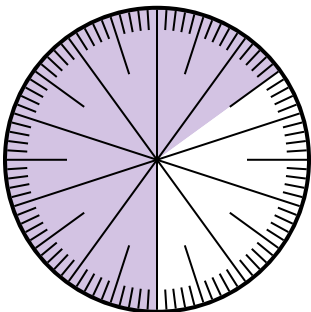
- A. $\frac{1}{100}$ B. 0,1
C. 1 D. 10

4) Lựa chọn nào thể hiện phần bóng mờ của bánh xe số?



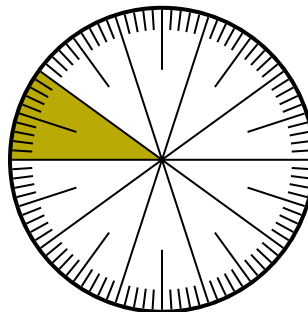
- A. $\frac{70}{100}$ B. $\frac{70}{30}$
C. $\frac{30}{70}$ D. $\frac{7,00}{100}$

5) Which choice represents the un-shaded portion of the number wheel?



- A. $\frac{65}{35}$ B. $\frac{35}{100}$
C. 0,035 D. $\frac{3.5}{100}$

6) Lựa chọn nào thể hiện phần bóng mờ của bánh xe số?



- A. $\frac{1,00}{100}$ B. $\frac{90}{10}$
C. 10 D. $\frac{10}{100}$

1. **A**
2. **A**
3. **B**
4. **A**
5. **B**
6. **D**