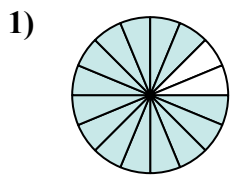


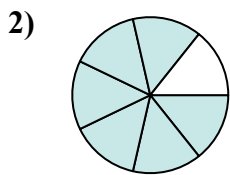


Xác định đáp án nào phù hợp nhất với nhau.

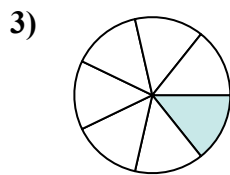
Câu trả lời



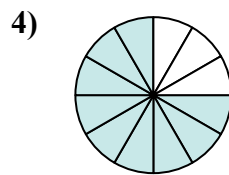
$$\frac{14}{16}$$



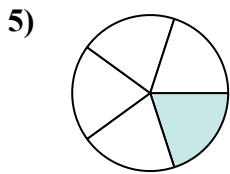
$$\frac{6}{7}$$



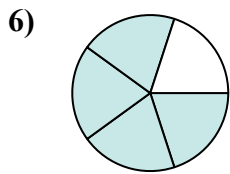
$$\frac{1}{7}$$



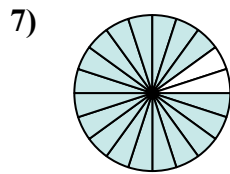
$$\frac{9}{12}$$



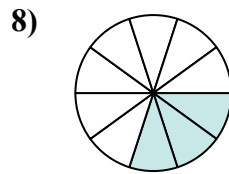
$$\frac{1}{5}$$



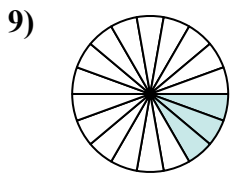
$$\frac{4}{5}$$



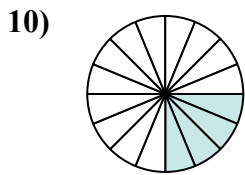
$$\frac{18}{20}$$



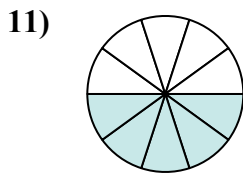
$$\frac{3}{10}$$



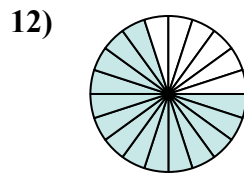
$$\frac{3}{18}$$



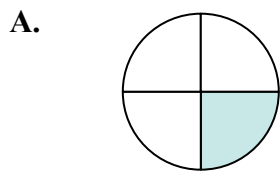
$$\frac{4}{16}$$



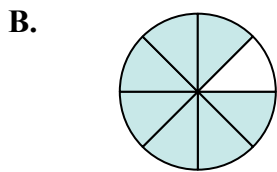
$$\frac{5}{10}$$



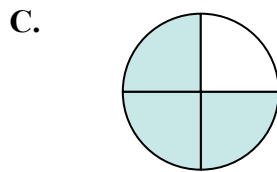
$$\frac{14}{20}$$



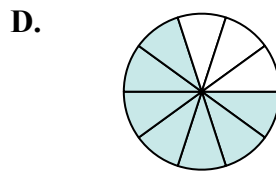
$$\frac{1}{4}$$



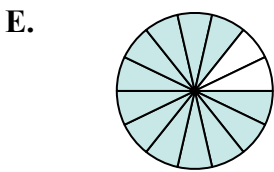
$$\frac{7}{8}$$



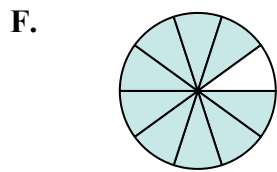
$$\frac{3}{4}$$



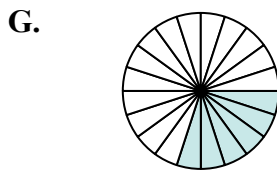
$$\frac{7}{10}$$



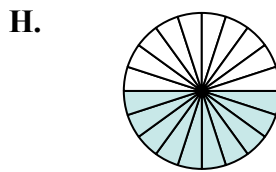
$$\frac{12}{14}$$



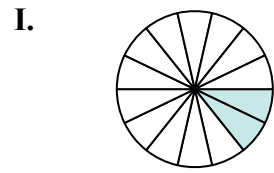
$$\frac{9}{10}$$



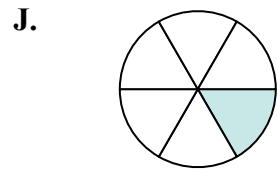
$$\frac{6}{20}$$



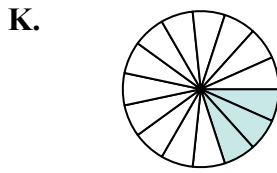
$$\frac{10}{20}$$



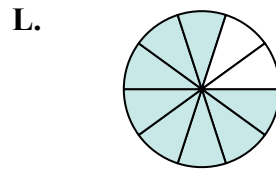
$$\frac{2}{14}$$



$$\frac{1}{6}$$



$$\frac{3}{15}$$



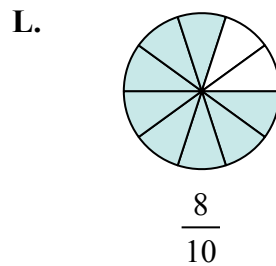
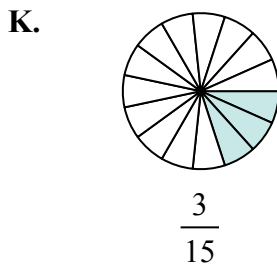
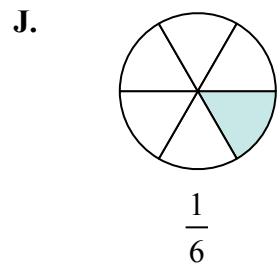
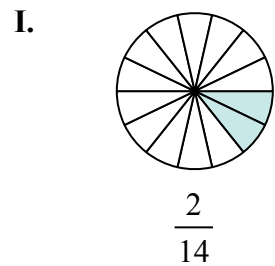
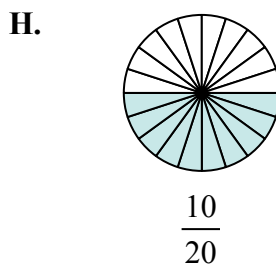
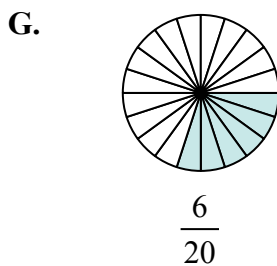
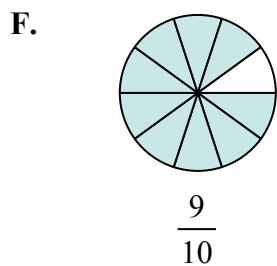
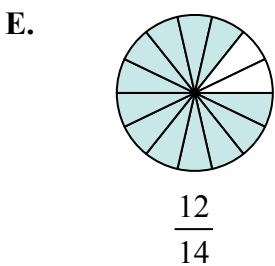
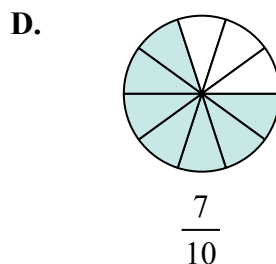
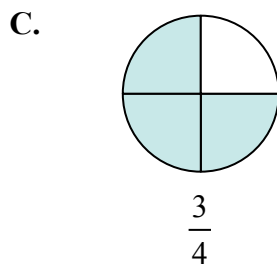
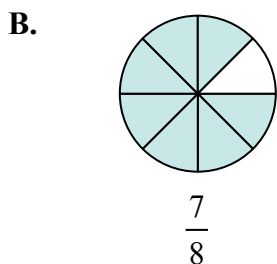
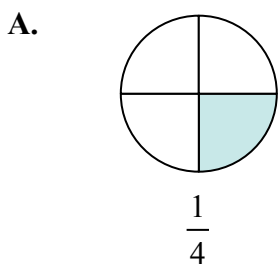
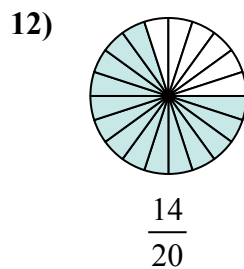
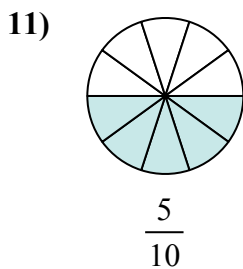
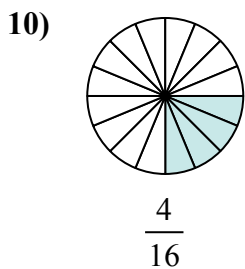
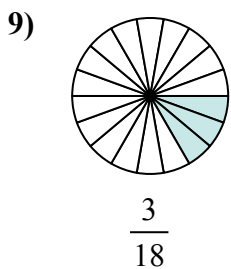
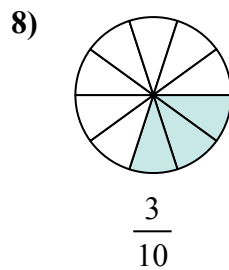
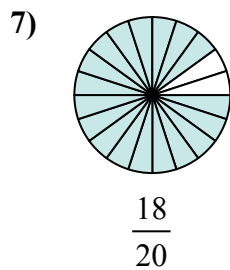
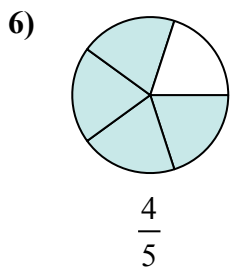
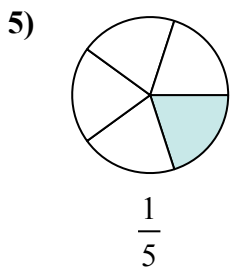
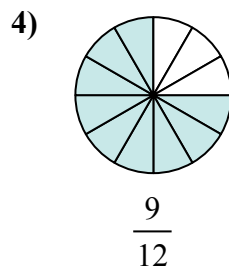
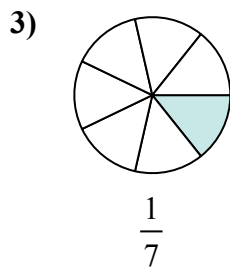
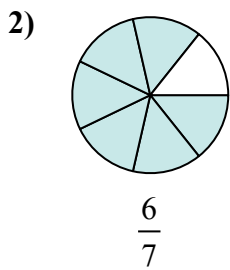
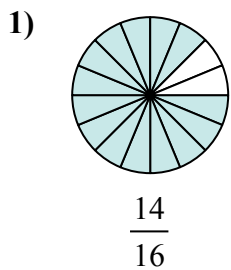
$$\frac{8}{10}$$

1. _____
2. _____
3. _____
4. _____
5. _____
6. _____
7. _____
8. _____
9. _____
10. _____
11. _____
12. _____



Xác định đáp án nào phù hợp nhất với nhau.

Câu trả lời



1. **B**

2. **E**

3. **I**

4. **C**

5. **K**

6. **L**

7. **F**

8. **G**

9. **J**

10. **A**

11. **H**

12. **D**