

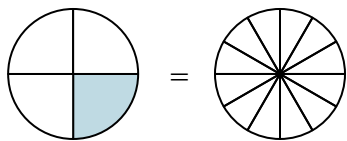


Nhìn phân được tô màu trong hình để tìm ra phân số tương đương.

Câu trả lời

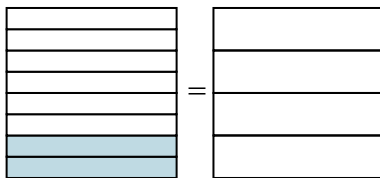
Vd)

$$\frac{1}{4} = \frac{3}{12}$$



1)

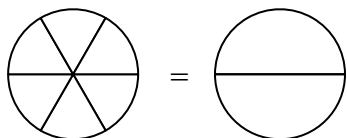
$$\frac{2}{8} =$$



Vd. $\frac{3}{12}$

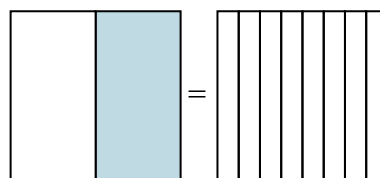
2)

$$\frac{0}{6} =$$



3)

$$\frac{1}{2} =$$



1. _____

2. _____

3. _____

4. _____

5. _____

6. _____

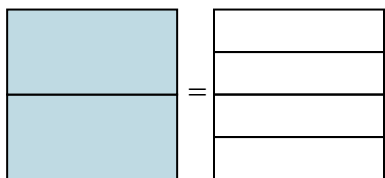
7. _____

8. _____

9. _____

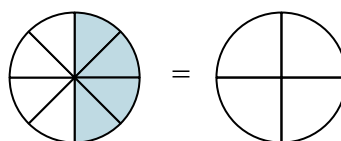
4)

$$\frac{2}{2} =$$



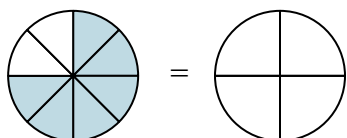
5)

$$\frac{4}{8} =$$



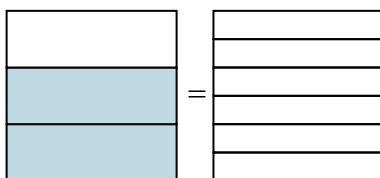
6)

$$\frac{6}{8} =$$



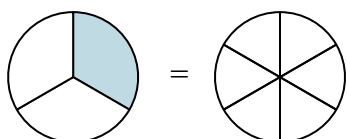
7)

$$\frac{2}{3} =$$



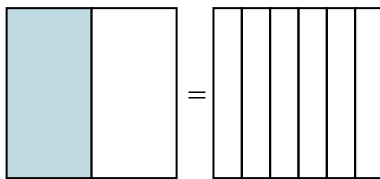
8)

$$\frac{1}{3} =$$



9)

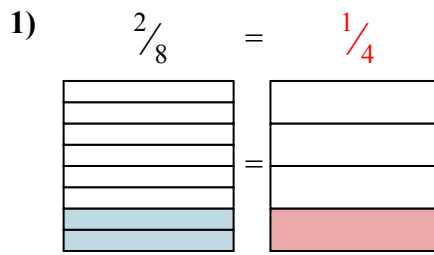
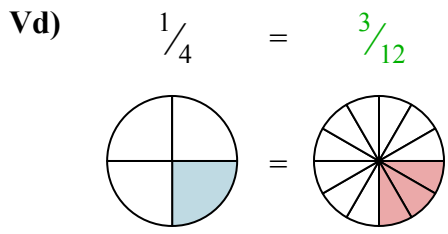
$$\frac{1}{2} =$$



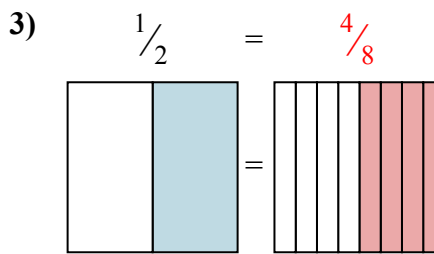
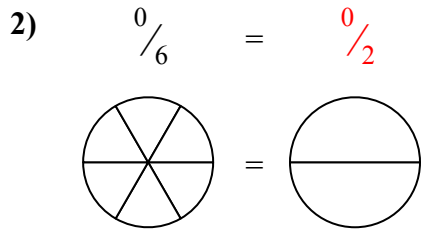


Nhìn phân được tô màu trong hình để tìm ra phân số tương đương.

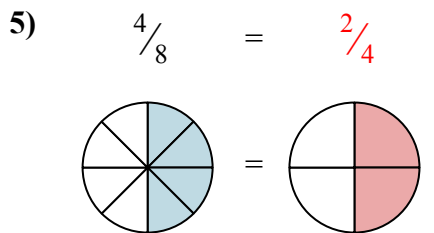
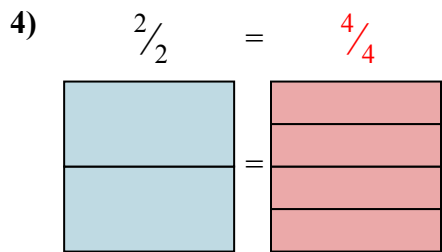
Câu trả lời



Vd. $\frac{3}{12}$

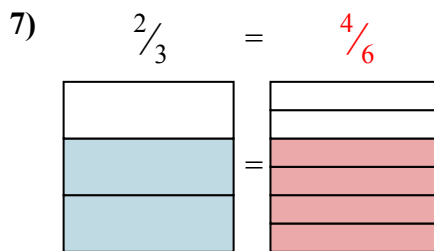
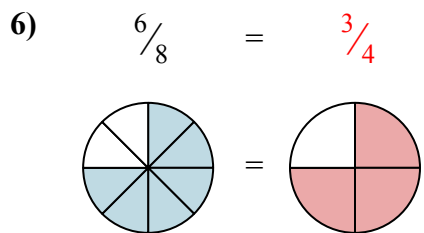


1. $\frac{1}{4}$



2. $\frac{0}{2}$

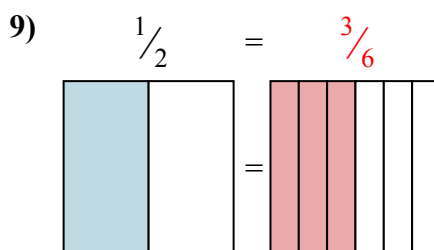
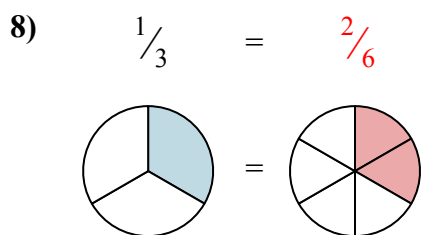
3. $\frac{4}{8}$



4. $\frac{4}{4}$

5. $\frac{2}{4}$

6. $\frac{3}{4}$



7. $\frac{4}{6}$

8. $\frac{2}{6}$

9. $\frac{3}{6}$