

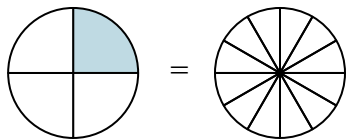


Nhìn phân được tô màu trong hình để tìm ra phân số tương đương.

Câu trả lời

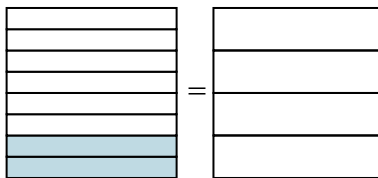
Vd)

$\frac{1}{4} = \frac{3}{12}$



1)

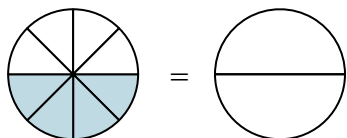
$\frac{2}{8} =$



Vd. $\frac{3}{12}$

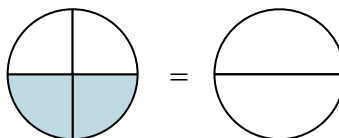
2)

$\frac{4}{8} =$



3)

$\frac{2}{4} =$



1. _____

2. _____

3. _____

4. _____

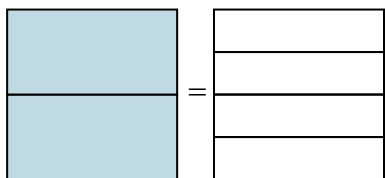
5. _____

6. _____

7. _____

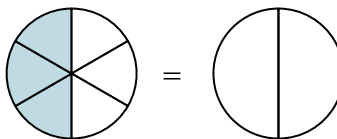
4)

$\frac{2}{2} =$



5)

$\frac{3}{6} =$

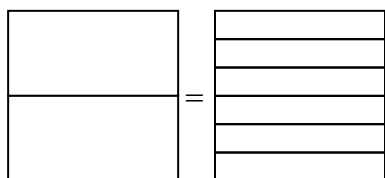


8. _____

9. _____

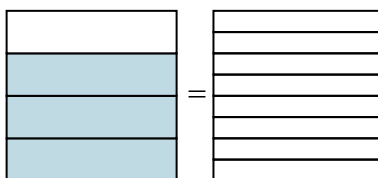
6)

$\frac{0}{2} =$



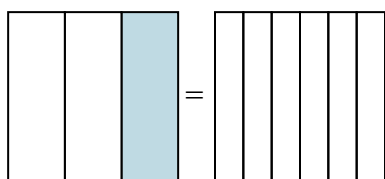
7)

$\frac{3}{4} =$



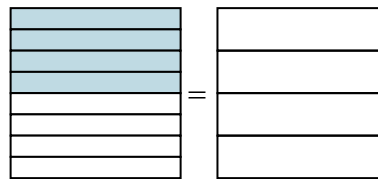
8)

$\frac{1}{3} =$



9)

$\frac{4}{8} =$



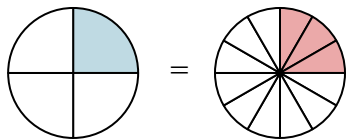


Nhìn phân được tô màu trong hình để tìm ra phân số tương đương.

Câu trả lời

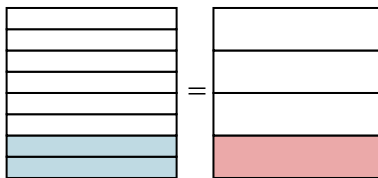
Vd)

$$\frac{1}{4} = \frac{3}{12}$$



1)

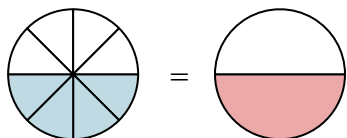
$$\frac{2}{8} = \frac{1}{4}$$



Vd. $\frac{3}{12}$

2)

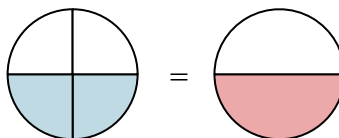
$$\frac{4}{8} = \frac{1}{2}$$



1. $\frac{1}{4}$

3)

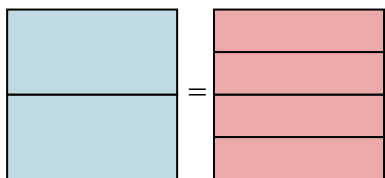
$$\frac{2}{4} = \frac{1}{2}$$



2. $\frac{1}{2}$

4)

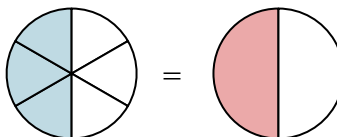
$$\frac{2}{2} = \frac{4}{4}$$



3. $\frac{1}{2}$

5)

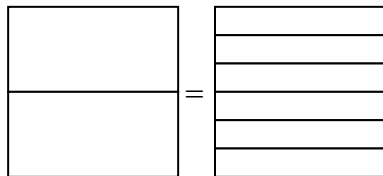
$$\frac{3}{6} = \frac{1}{2}$$



4. $\frac{4}{4}$

6)

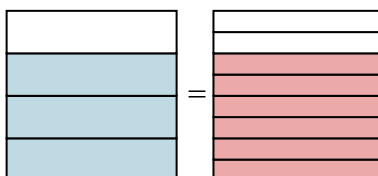
$$\frac{0}{2} = \frac{0}{6}$$



5. $\frac{1}{2}$

7)

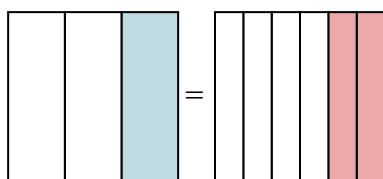
$$\frac{3}{4} = \frac{6}{8}$$



6. $\frac{0}{6}$

8)

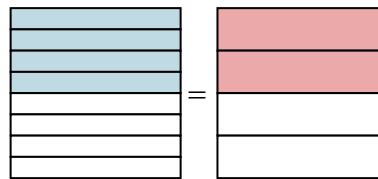
$$\frac{1}{3} = \frac{2}{6}$$



7. $\frac{6}{8}$

9)

$$\frac{4}{8} = \frac{2}{4}$$



8. $\frac{2}{6}$

9. $\frac{2}{4}$