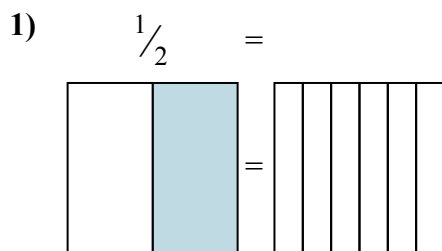
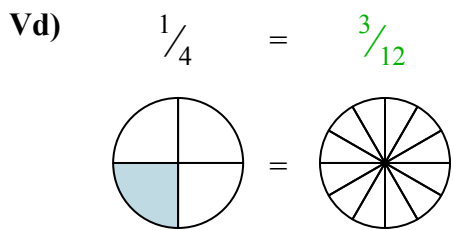




Nhìn phân được tô màu trong hình để tìm ra phân số tương đương.

**Câu trả lời**



Vd.  $\frac{3}{12}$

1. \_\_\_\_\_

2. \_\_\_\_\_

3. \_\_\_\_\_

4. \_\_\_\_\_

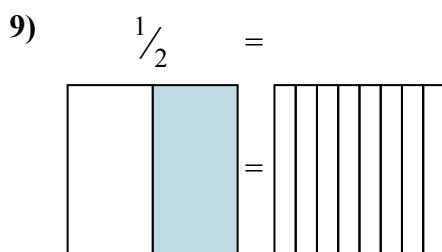
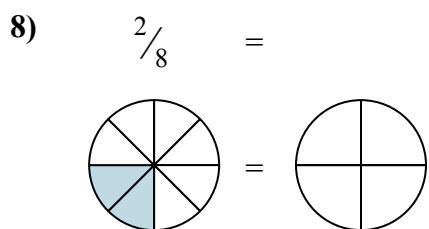
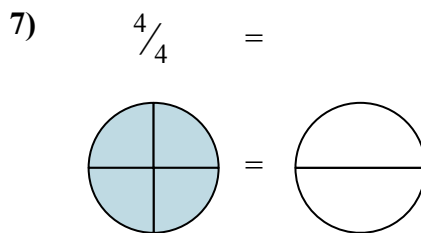
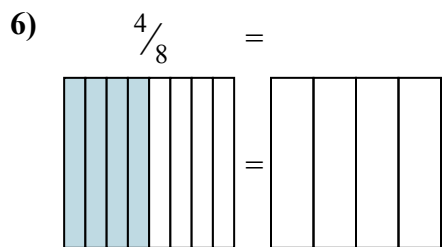
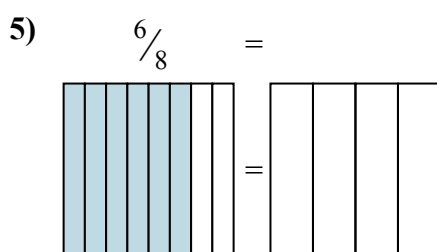
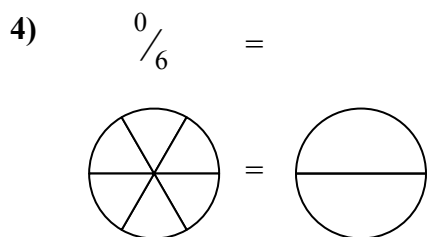
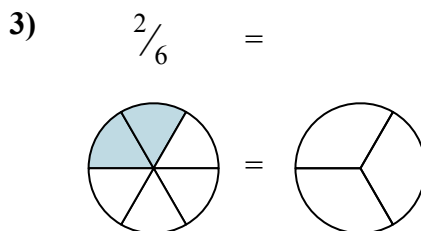
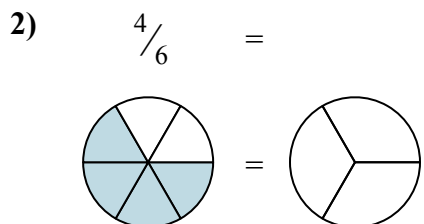
5. \_\_\_\_\_

6. \_\_\_\_\_

7. \_\_\_\_\_

8. \_\_\_\_\_

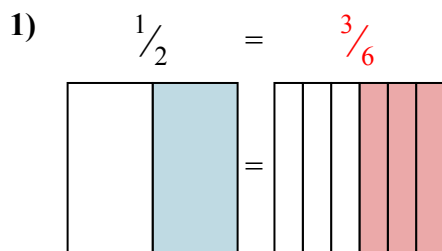
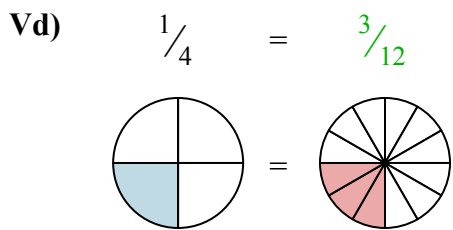
9. \_\_\_\_\_



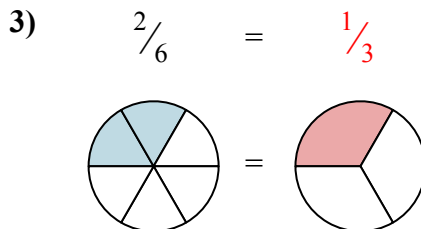
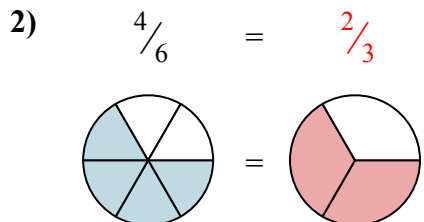


Nhìn phân được tô màu trong hình để tìm ra phân số tương đương.

**Câu trả lời**



Vd.  $\frac{3}{12}$

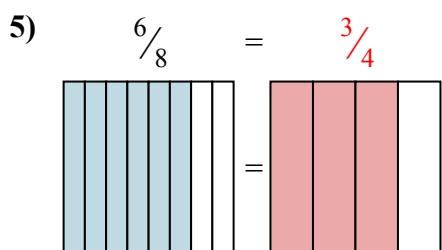
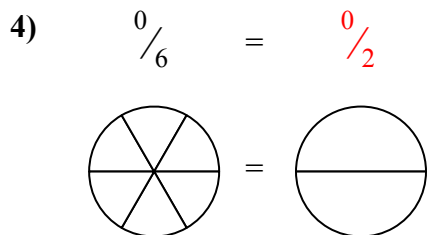


1.  $\frac{3}{6}$

2.  $\frac{2}{3}$

3.  $\frac{1}{3}$

4.  $\frac{0}{2}$



5.  $\frac{3}{4}$

6.  $\frac{2}{4}$

7.  $\frac{2}{2}$

8.  $\frac{1}{4}$

9.  $\frac{4}{8}$

