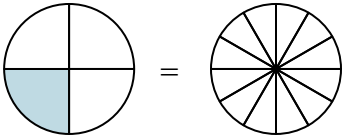




Nhìn phân được tô màu trong hình để tìm ra phân số tương đương.

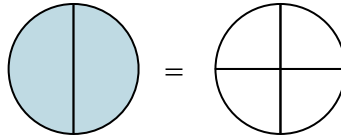
Vd)

$$\frac{1}{4} = \frac{3}{12}$$



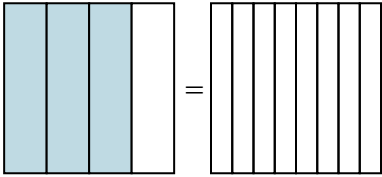
1)

$$\frac{2}{2} =$$



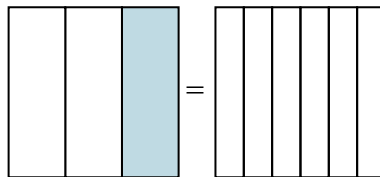
2)

$$\frac{3}{4} =$$



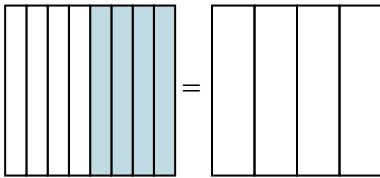
3)

$$\frac{1}{3} =$$



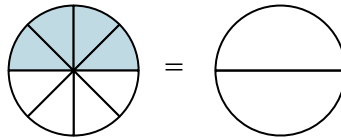
4)

$$\frac{4}{8} =$$



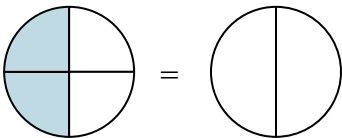
5)

$$\frac{4}{8} =$$



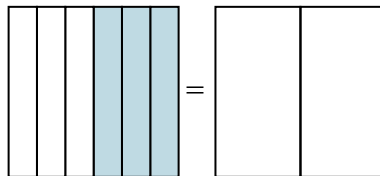
6)

$$\frac{2}{4} =$$



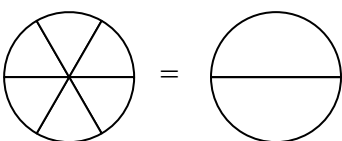
7)

$$\frac{3}{6} =$$



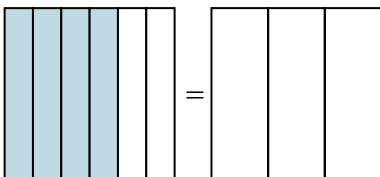
8)

$$\frac{0}{6} =$$



9)

$$\frac{4}{6} =$$

**Câu trả lời**Vd.  $\frac{3}{12}$ 

1. \_\_\_\_\_

2. \_\_\_\_\_

3. \_\_\_\_\_

4. \_\_\_\_\_

5. \_\_\_\_\_

6. \_\_\_\_\_

7. \_\_\_\_\_

8. \_\_\_\_\_

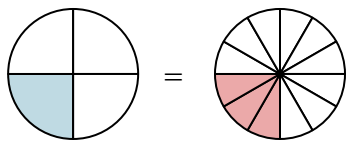
9. \_\_\_\_\_



Nhìn phân được tô màu trong hình để tìm ra phân số tương đương.

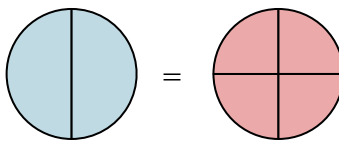
Vd)

$$\frac{1}{4} = \frac{3}{12}$$



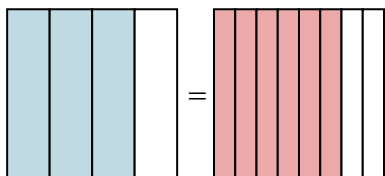
1)

$$\frac{2}{2} = \frac{4}{4}$$



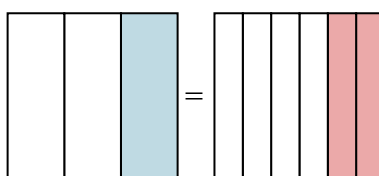
2)

$$\frac{3}{4} = \frac{6}{8}$$



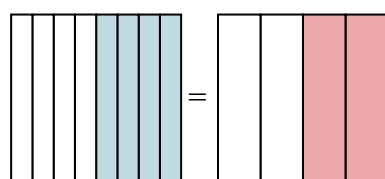
3)

$$\frac{1}{3} = \frac{2}{6}$$



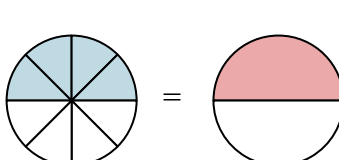
4)

$$\frac{4}{8} = \frac{2}{4}$$



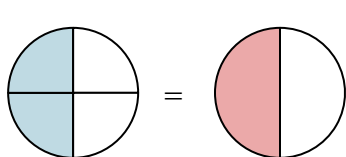
5)

$$\frac{4}{8} = \frac{1}{2}$$



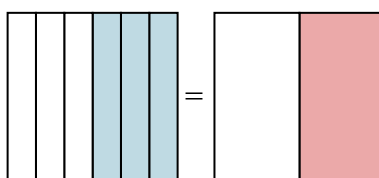
6)

$$\frac{2}{4} = \frac{1}{2}$$



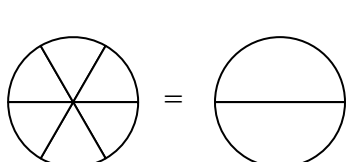
7)

$$\frac{3}{6} = \frac{1}{2}$$



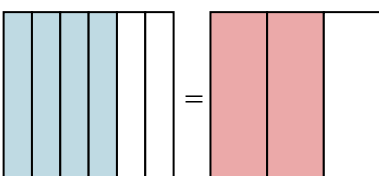
8)

$$\frac{0}{6} = \frac{0}{2}$$



9)

$$\frac{4}{6} = \frac{2}{3}$$

**Câu trả lời**Vd.  $\frac{3}{12}$ 1.  $\frac{4}{4}$ 2.  $\frac{6}{8}$ 3.  $\frac{2}{6}$ 4.  $\frac{2}{4}$ 5.  $\frac{1}{2}$ 6.  $\frac{1}{2}$ 7.  $\frac{1}{2}$ 8.  $\frac{0}{2}$ 9.  $\frac{2}{3}$