



Nhìn phân được tô màu trong hình để tìm ra phân số tương đương.

**Câu trả lời**

Vd)  $\frac{1}{4} = \frac{3}{12}$

1)  $\frac{3}{6} =$

Vd.  $\frac{3}{12}$

2)  $\frac{2}{4} =$

3)  $\frac{2}{2} =$

4)  $\frac{1}{4} =$

5)  $\frac{0}{2} =$

6)  $\frac{1}{2} =$

7)  $\frac{4}{8} =$

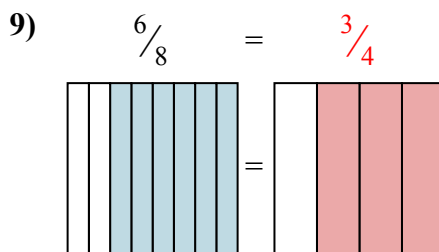
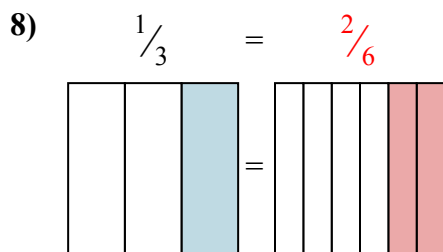
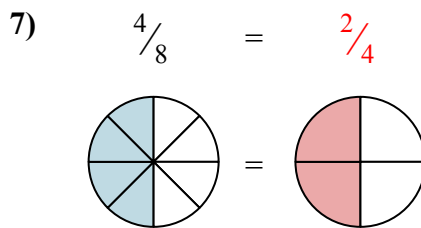
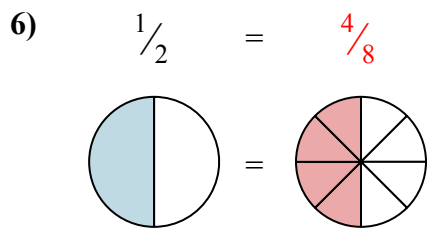
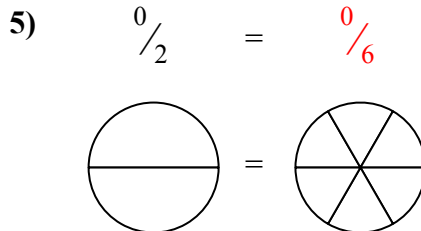
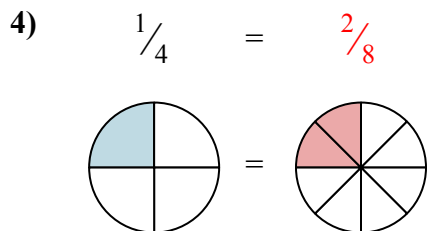
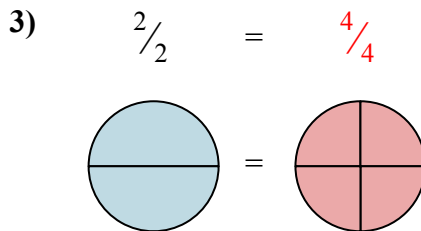
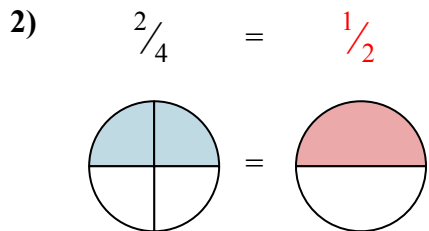
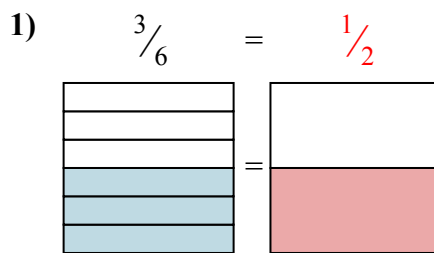
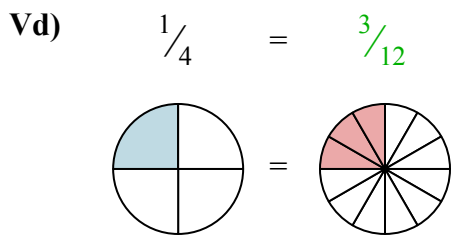
8)  $\frac{1}{3} =$

9)  $\frac{6}{8} =$

- 1. \_\_\_\_\_
- 2. \_\_\_\_\_
- 3. \_\_\_\_\_
- 4. \_\_\_\_\_
- 5. \_\_\_\_\_
- 6. \_\_\_\_\_
- 7. \_\_\_\_\_
- 8. \_\_\_\_\_
- 9. \_\_\_\_\_



Nhìn phân được tô màu trong hình để tìm ra phân số tương đương.



**Câu trả lời**

- Vd.  $\frac{3}{12}$
1.  $\frac{1}{2}$
2.  $\frac{1}{2}$
3.  $\frac{4}{4}$
4.  $\frac{2}{8}$
5.  $\frac{0}{6}$
6.  $\frac{4}{8}$
7.  $\frac{2}{4}$
8.  $\frac{2}{6}$
9.  $\frac{3}{4}$