

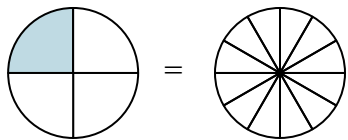


Nhìn phân được tô màu trong hình để tìm ra phân số tương đương.

Câu trả lời

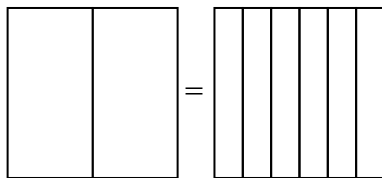
Vd)

$\frac{1}{4} = \frac{3}{12}$



1)

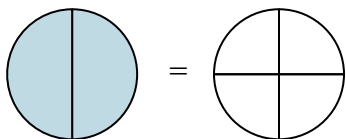
$\frac{0}{2} =$



Vd. $\frac{3}{12}$

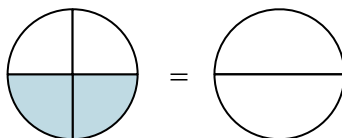
2)

$\frac{2}{2} =$



3)

$\frac{2}{4} =$



1. _____

2. _____

3. _____

4. _____

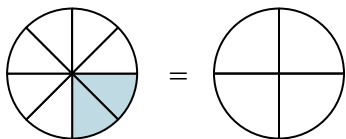
5. _____

6. _____

7. _____

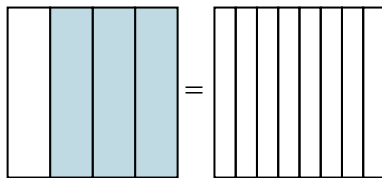
4)

$\frac{2}{8} =$



5)

$\frac{3}{4} =$

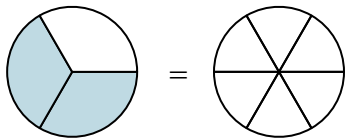


8. _____

9. _____

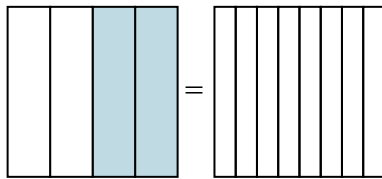
6)

$\frac{2}{3} =$



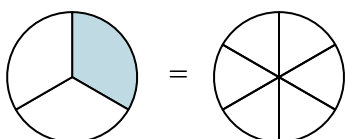
7)

$\frac{2}{4} =$



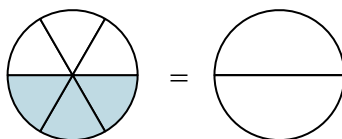
8)

$\frac{1}{3} =$



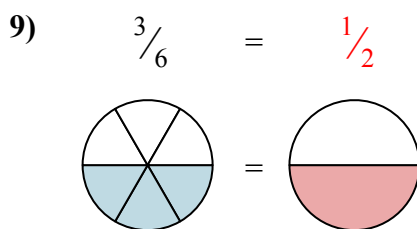
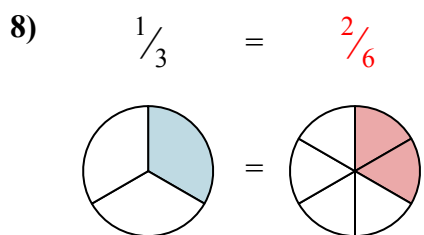
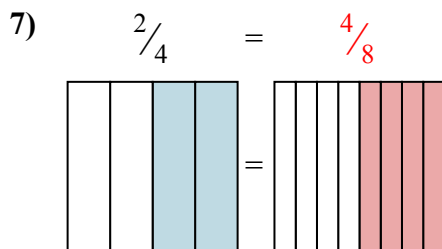
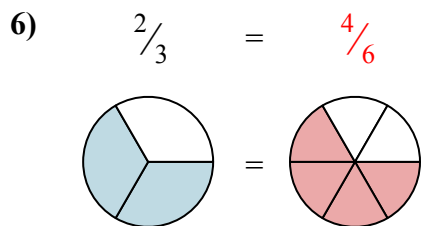
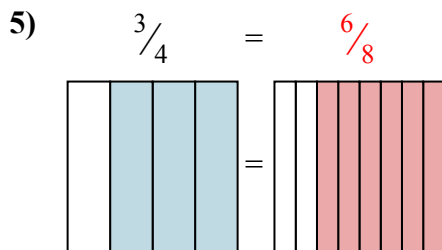
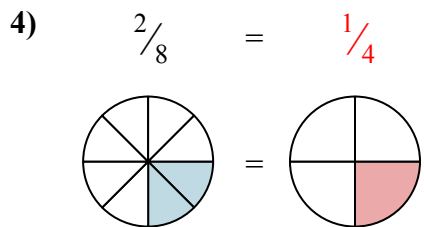
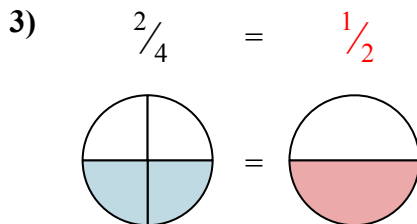
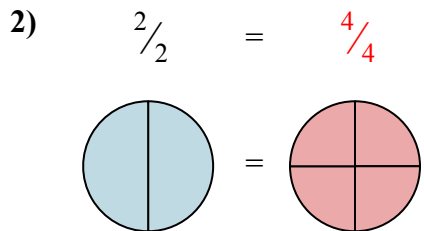
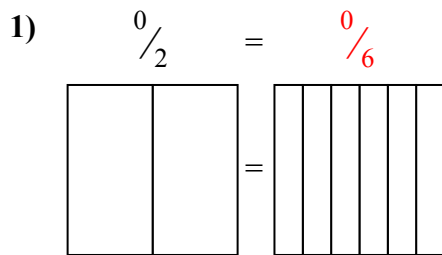
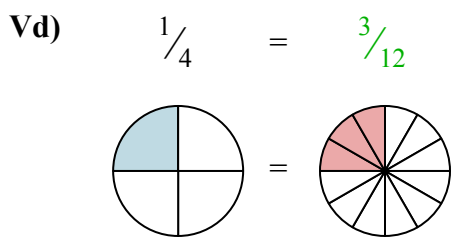
9)

$\frac{3}{6} =$





Nhìn phân được tô màu trong hình để tìm ra phân số tương đương.



Câu trả lời

- Vd. $\frac{3}{12}$
1. $\frac{0}{6}$
2. $\frac{4}{4}$
3. $\frac{1}{2}$
4. $\frac{1}{4}$
5. $\frac{6}{8}$
6. $\frac{4}{6}$
7. $\frac{4}{8}$
8. $\frac{2}{6}$
9. $\frac{1}{2}$