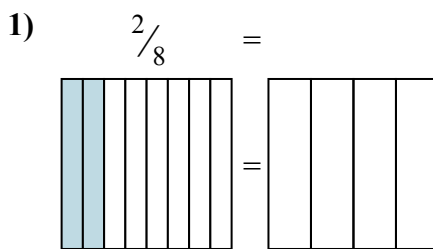
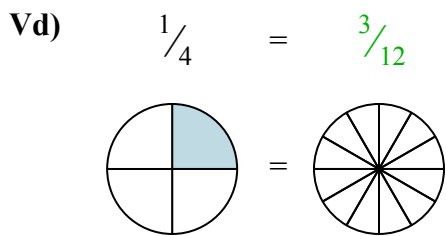


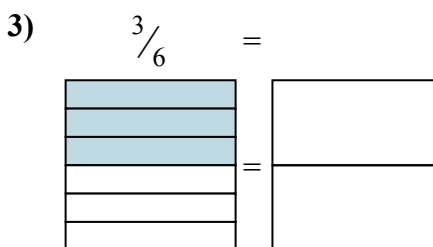
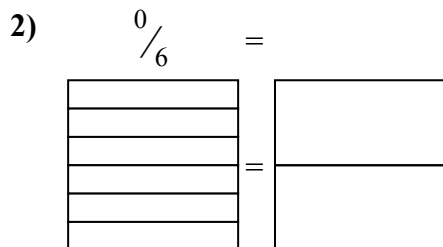


Nhìn phân được tô màu trong hình để tìm ra phân số tương đương.

Câu trả lời



Vd. $\frac{3}{12}$



1. _____

2. _____

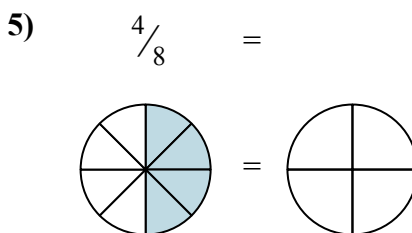
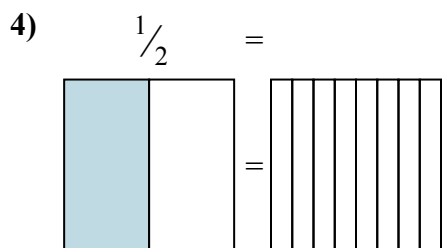
3. _____

4. _____

5. _____

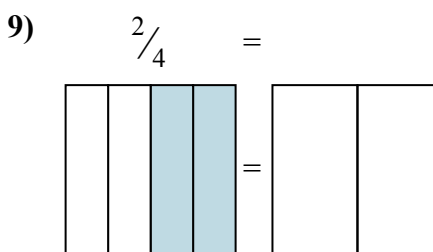
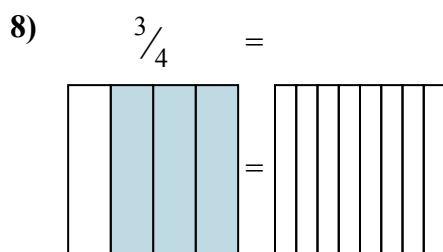
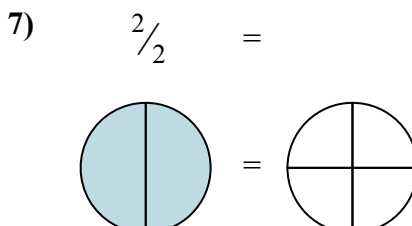
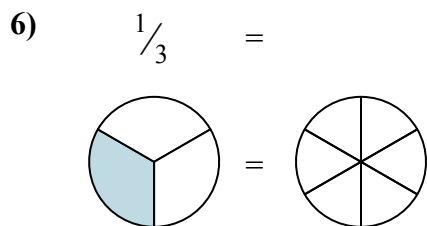
6. _____

7. _____



8. _____

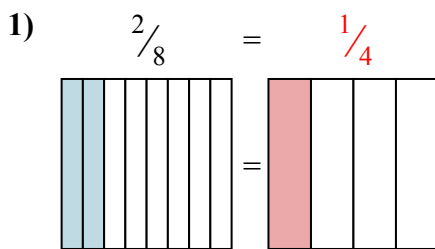
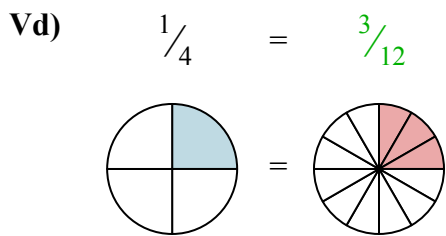
9. _____



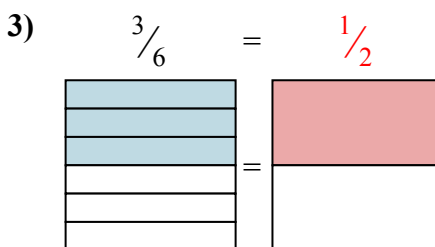
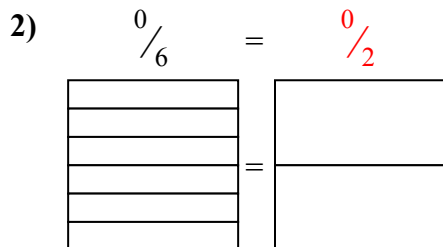


Nhìn phân được tô màu trong hình để tìm ra phân số tương đương.

Câu trả lời



Vd. $\frac{3}{12}$



1. $\frac{1}{4}$

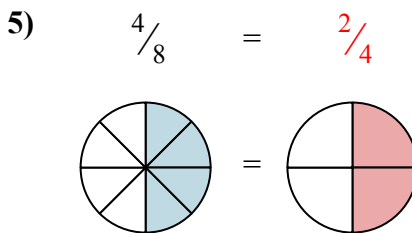
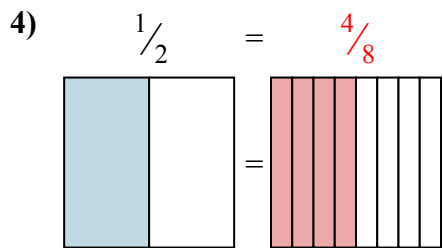
2. $\frac{0}{2}$

3. $\frac{1}{2}$

4. $\frac{4}{8}$

5. $\frac{2}{4}$

6. $\frac{2}{6}$



7. $\frac{4}{4}$

8. $\frac{6}{8}$

9. $\frac{1}{2}$

