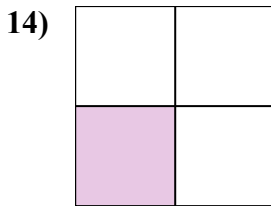
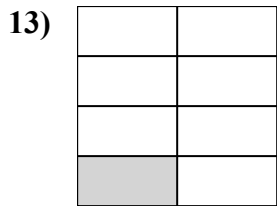
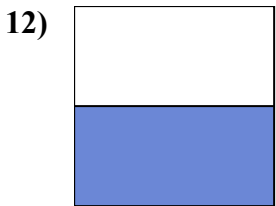
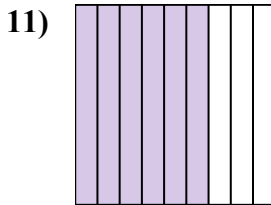
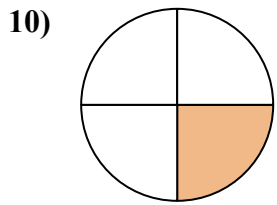
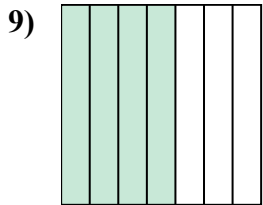
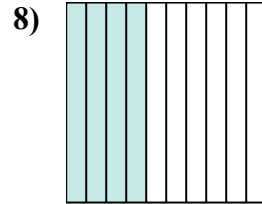
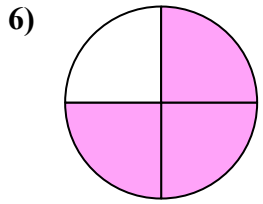
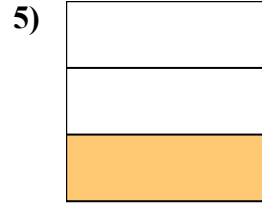
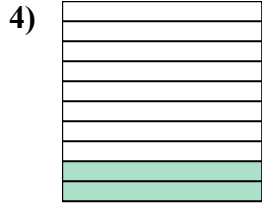
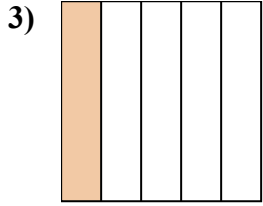
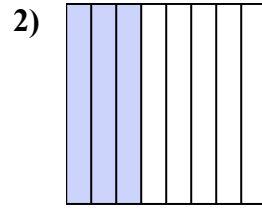
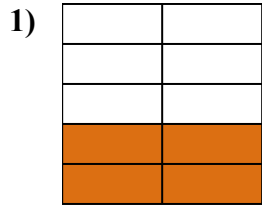
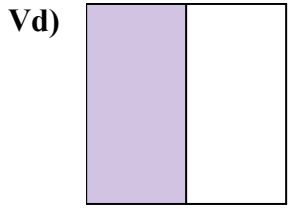




Viết số tiền được tô bóng dưới dạng word.



Câu trả lời

Vd. **một nửa**

1. _____

2. _____

3. _____

4. _____

5. _____

6. _____

7. _____

8. _____

9. _____

10. _____

11. _____

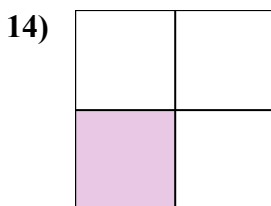
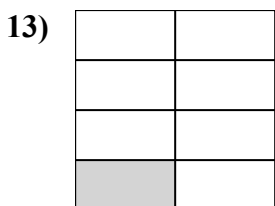
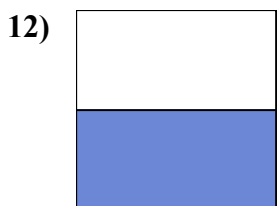
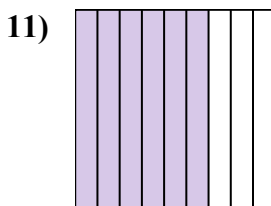
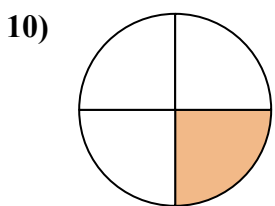
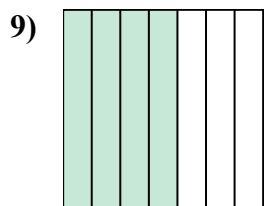
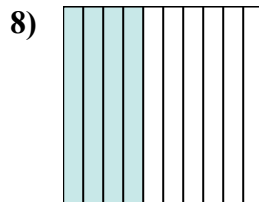
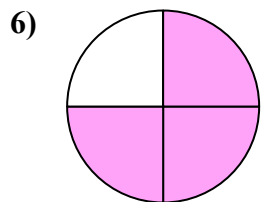
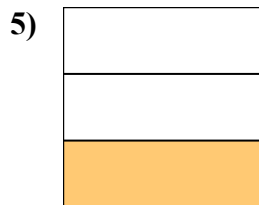
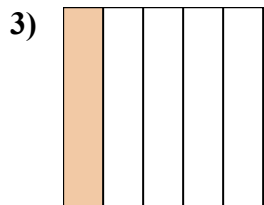
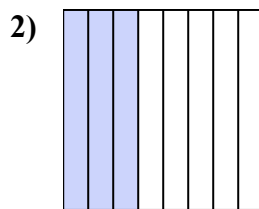
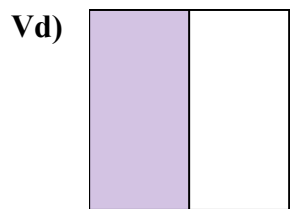
12. _____

13. _____

14. _____



Viết số tiền được tô bóng dưới dạng word.



Câu trả lời

Vd. một nửa

1. bốn phần chín

2. ba phần tám

3. một phần năm

4. hai phần mười

5. một phần ba

6. ba phần tư

7. hai phần sáu

8. bốn phần mười

9. bốn giờ bảy mươi

10. một phần tư

11. sáu phần chín

12. một nửa

13. một phần bảy

14. một phần ba