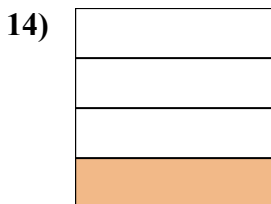
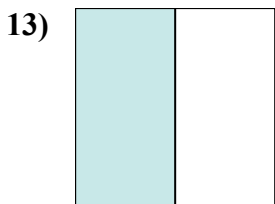
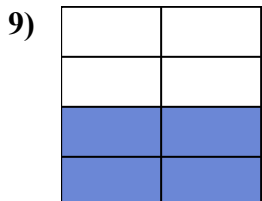
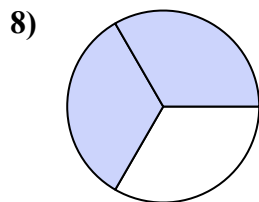
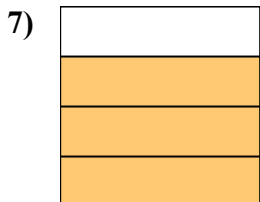
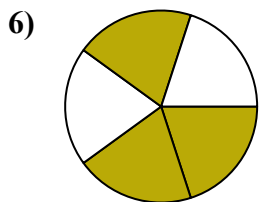
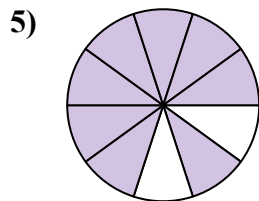
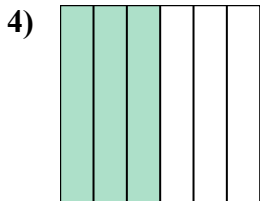
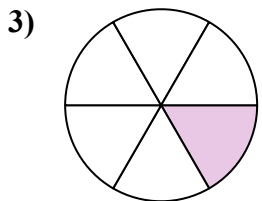

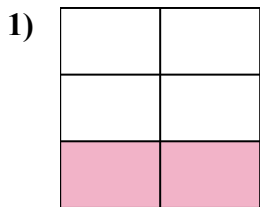




Viết số tiền được tô bóng dưới dạng word.



Câu trả lời

Vd. **một nửa**

1. _____

2. _____

3. _____

4. _____

5. _____

6. _____

7. _____

8. _____

9. _____

10. _____

11. _____

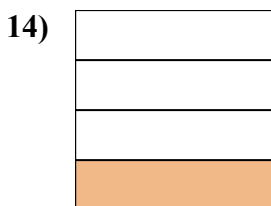
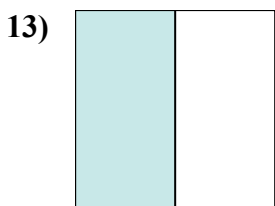
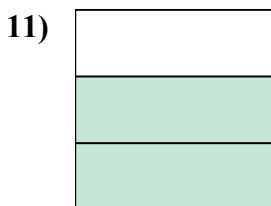

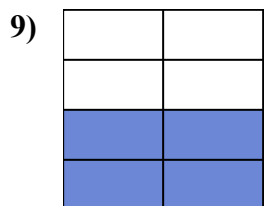
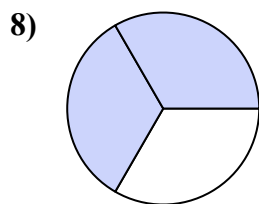
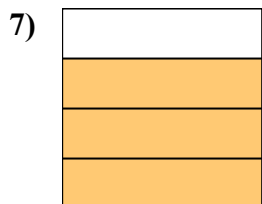
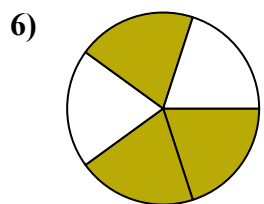
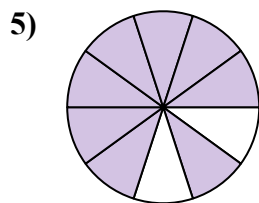
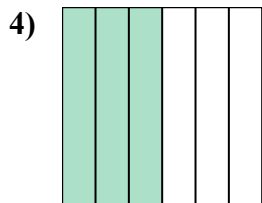
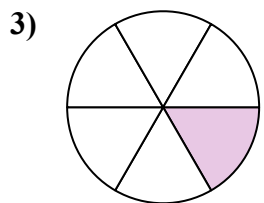

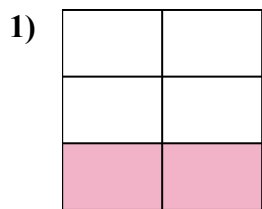
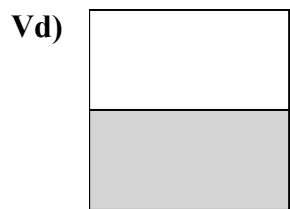
12. _____

13. _____

14. _____



Viết số tiền được tô bóng dưới dạng word.



Câu trả lời

Vd. một nửa

1. hai phần năm

2. hai phần chín

3. một phần sáu

4. ba phần sáu

5. tám phần mười

6. ba phần năm

7. ba phần tư

8. hai phần ba

9. bốn giờ bảy mươi

10. một phần mười

11. hai phần ba

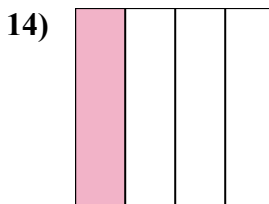
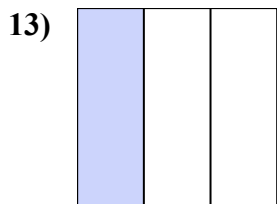
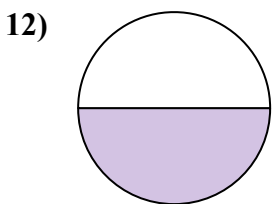
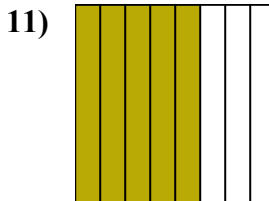
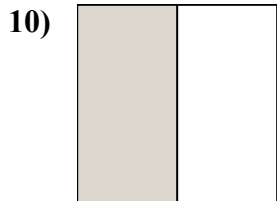
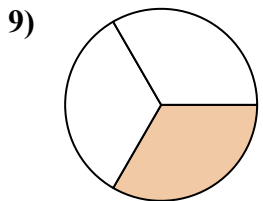
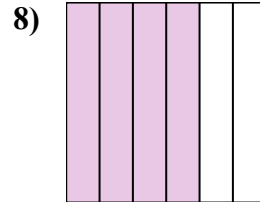
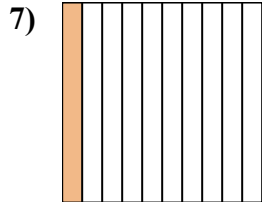
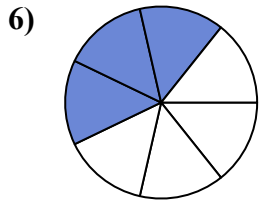
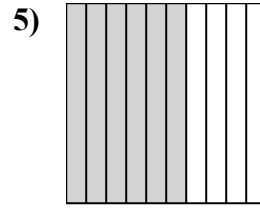
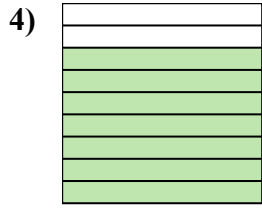
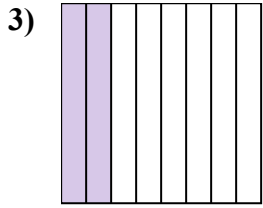
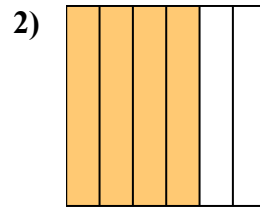
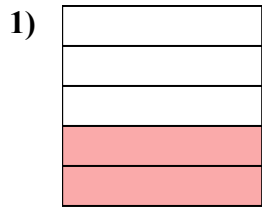
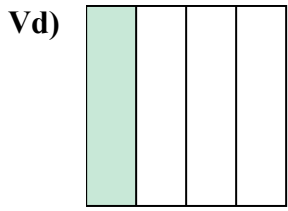
12. bốn phần tám

13. một nửa

14. một phần tư



Viết số tiền được tô bóng dưới dạng word.



Câu trả lời

Vd. **một phần tư**

1. _____

2. _____

3. _____

4. _____

5. _____

6. _____

7. _____

8. _____

9. _____

10. _____

11. _____

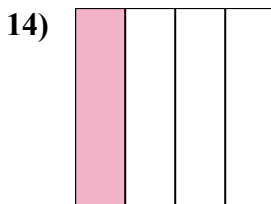
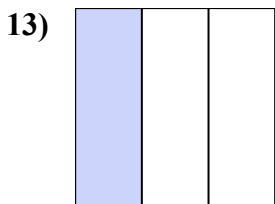
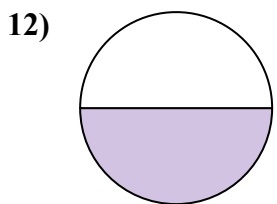
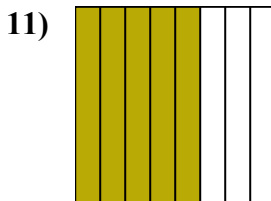
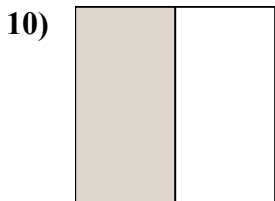
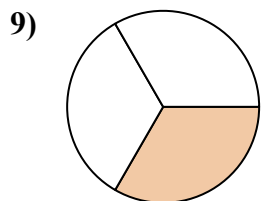
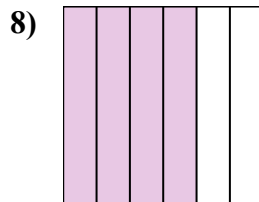
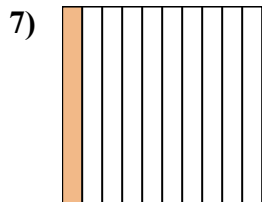
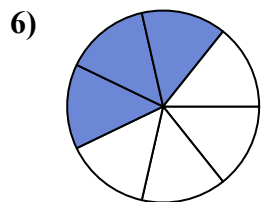
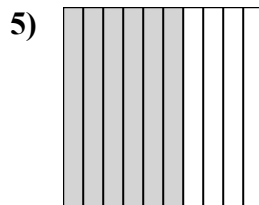
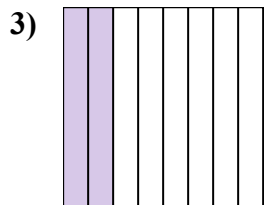
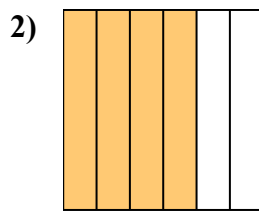
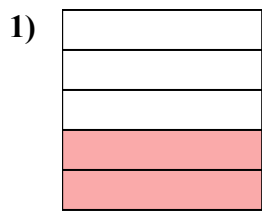
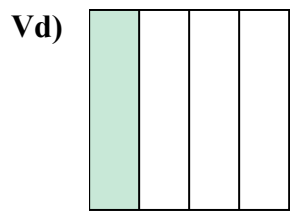
12. _____

13. _____

14. _____



Viết số tiền được tô bóng dưới dạng word.



Câu trả lời

Vd. một phần tư

1. hai phần năm

2. bốn phần sáu

3. hai phần tám

4. bảy chín

5. sáu phần mười

6. ba giờ bảy mươi

7. một phần mười

8. bốn phần sáu

9. một phần ba

10. một nửa

11. năm phần tám

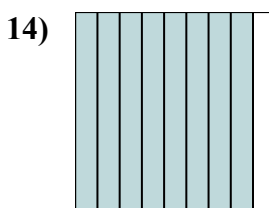
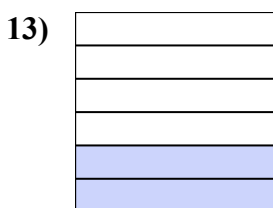

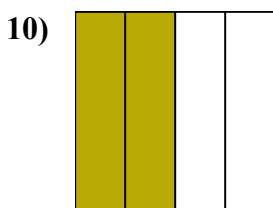

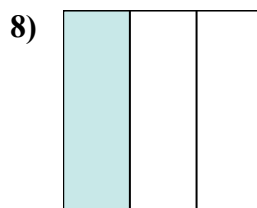
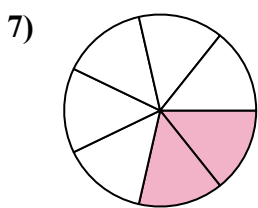
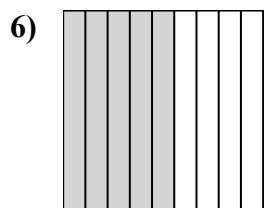
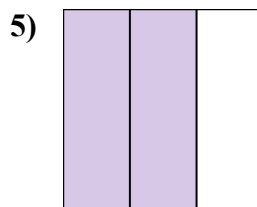
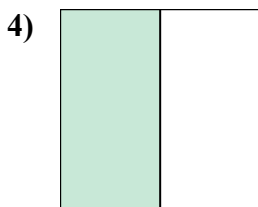
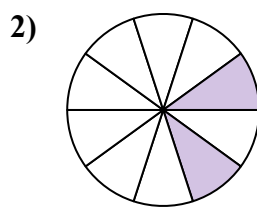
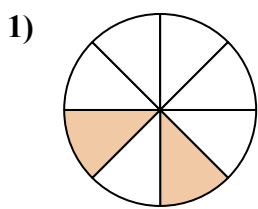
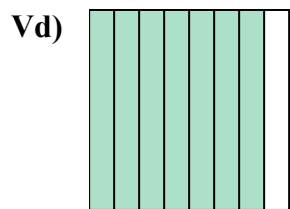
12. một nửa

13. một phần ba

14. một phần tư



Viết số tiền được tô bóng dưới dạng word.



Câu trả lời

Vd. bảy phần tám

1. _____

2. _____

3. _____

4. _____

5. _____

6. _____

7. _____

8. _____

9. _____

10. _____

11. _____

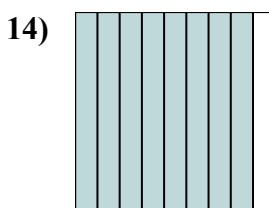
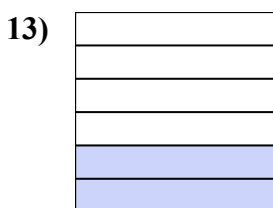

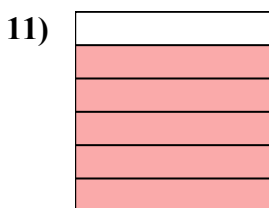
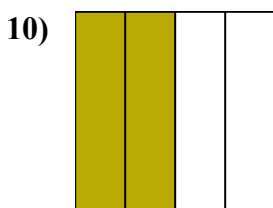

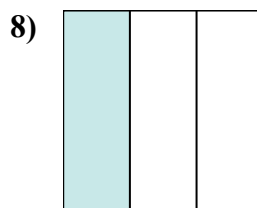
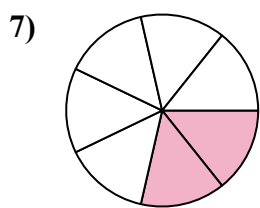
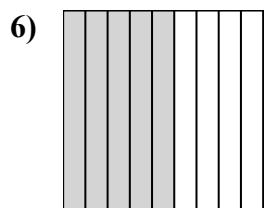
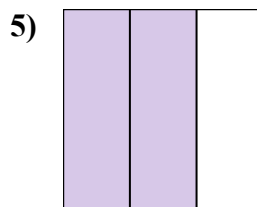
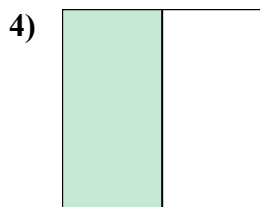
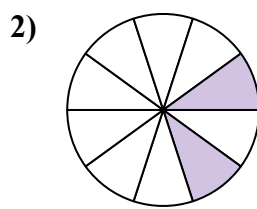
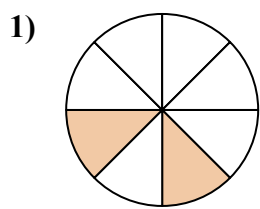
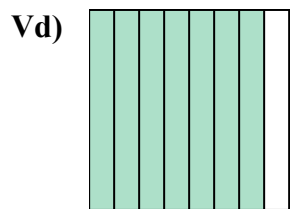
12. _____

13. _____

14. _____



Viết số tiền được tô bóng dưới dạng word.



Câu trả lời

Vd. bảy phần tám

1. hai phần tám

2. hai phần mười

3. một phần năm

4. một nửa

5. hai phần ba

6. năm chín

7. hai bảy giờ

8. một phần ba

9. ba phần năm

10. hai phần tư

11. năm phần sáu

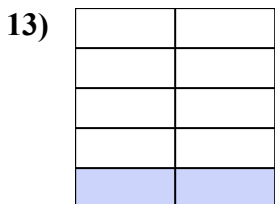
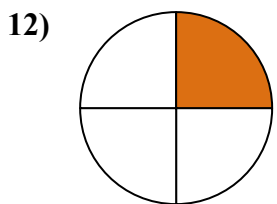
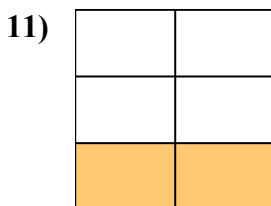
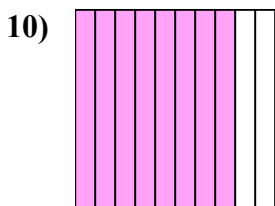

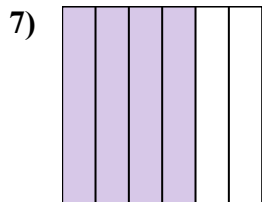
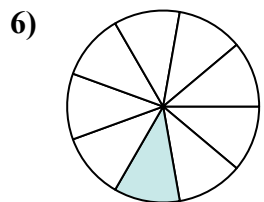
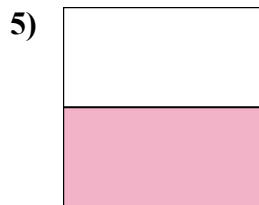
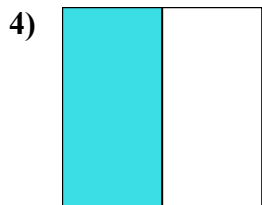
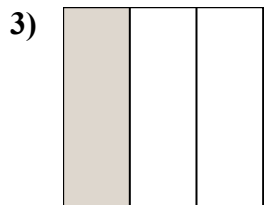


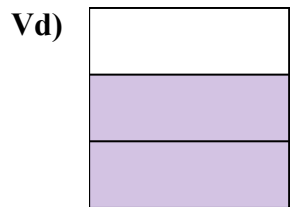
12. tám phần mười

13. hai phần sáu

14. phần tám chín



Viết số tiền được tô bóng dưới dạng word.



Câu trả lời

Vd. **hai phần ba**

1. _____

2. _____

3. _____

4. _____

5. _____

6. _____

7. _____

8. _____

9. _____

10. _____

11. _____

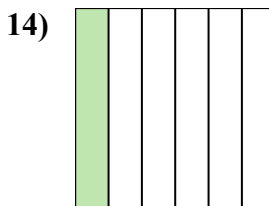
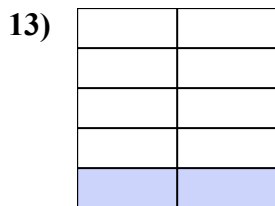
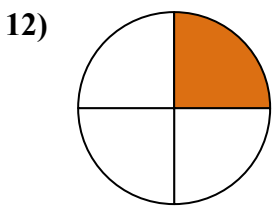
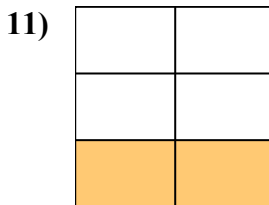
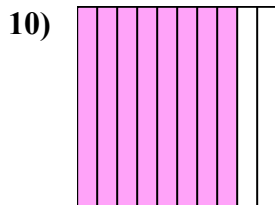

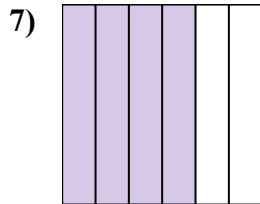
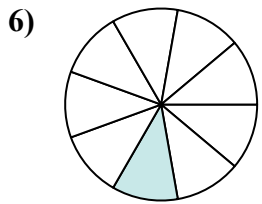
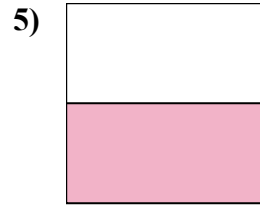
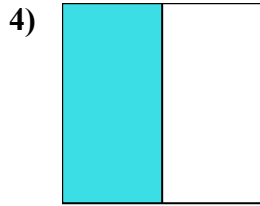
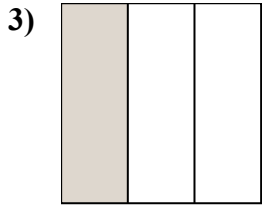
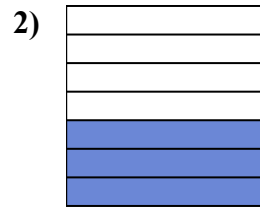
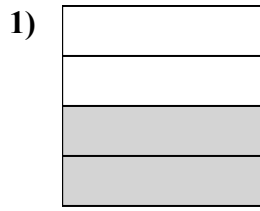
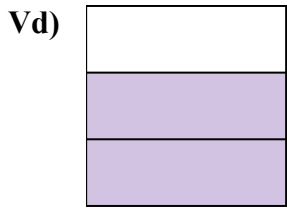
12. _____

13. _____

14. _____



Viết số tiền được tô bóng dưới dạng word.



Câu trả lời

Vd. **hai phần ba**

1. **hai phần tư**

2. **ba giờ bảy mươi**

3. **một phần ba**

4. **một nửa**

5. **một nửa**

6. **một phần chín**

7. **bốn phần sáu**

8. **bảy phần tám**

9. **bốn phần năm**

10. **tám phần mười**

11. **hai phần năm**

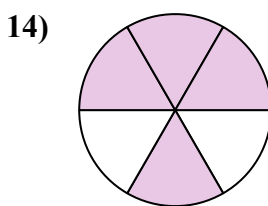
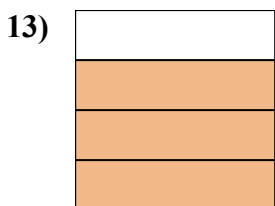
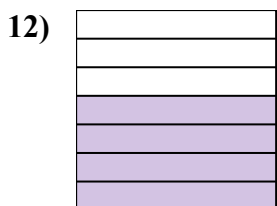

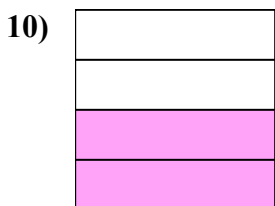
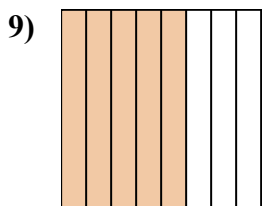
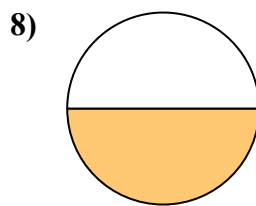
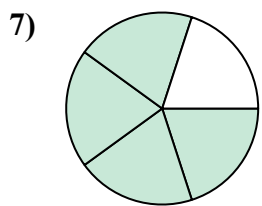
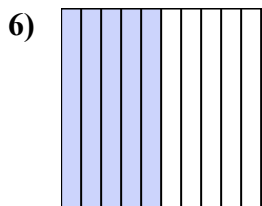
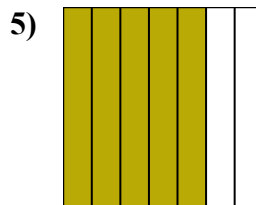
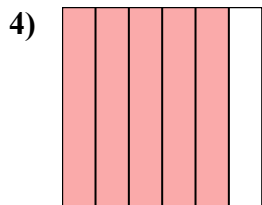
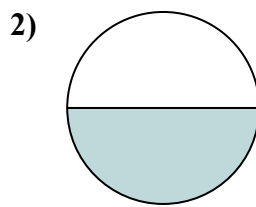
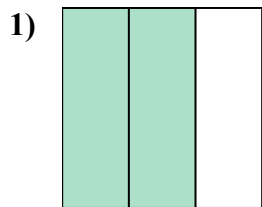
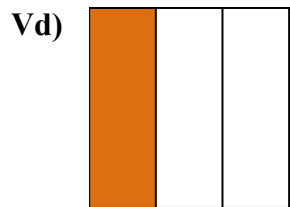
12. **một phần tư**

13. **hai phần chín**

14. **một phần sáu**



Viết số tiền được tô bóng dưới dạng word.



Câu trả lời

Vd. một phần ba

1. _____

2. _____

3. _____

4. _____

5. _____

6. _____

7. _____

8. _____

9. _____

10. _____

11. _____

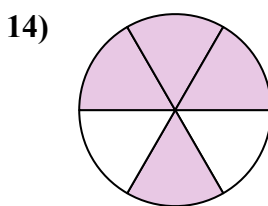
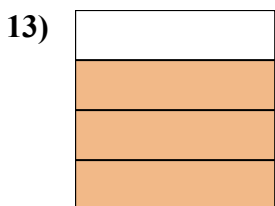
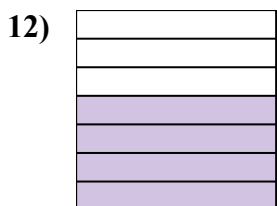

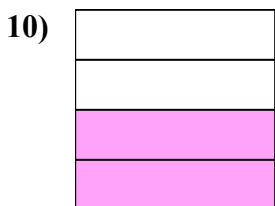
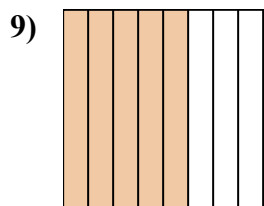
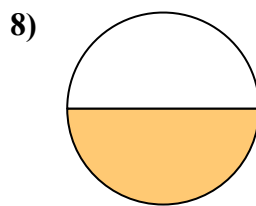
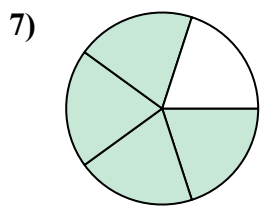
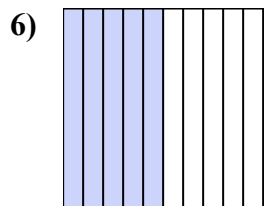
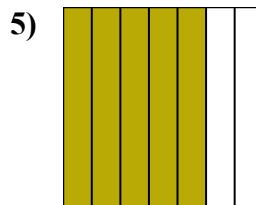
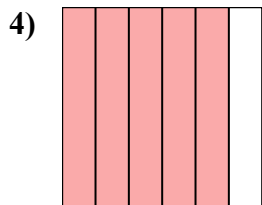
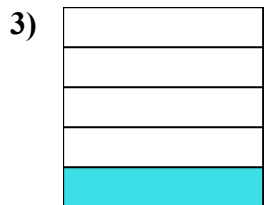
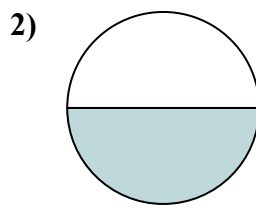
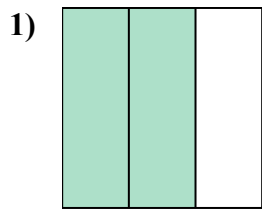
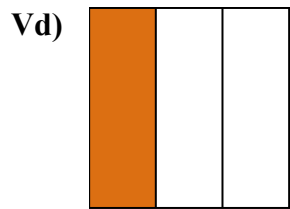
12. _____

13. _____

14. _____



Viết số tiền được tô bóng dưới dạng word.



Câu trả lời

Vd. **một phần ba**

1. **hai phần ba**

2. **một nửa**

3. **một phần năm**

4. **năm phần sáu**

5. **năm bảy giờ**

6. **năm phần mười**

7. **bốn phần năm**

8. **một nửa**

9. **năm phần tám**

10. **hai phần tư**

11. **một phần tám**

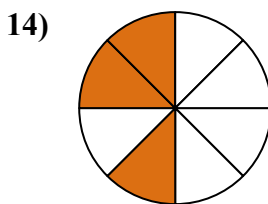
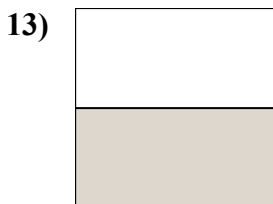
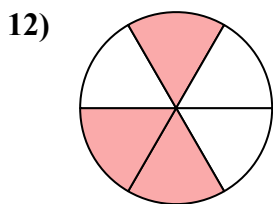

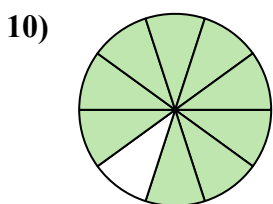
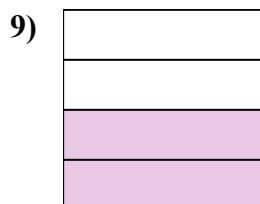
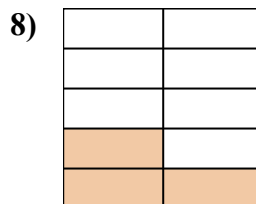
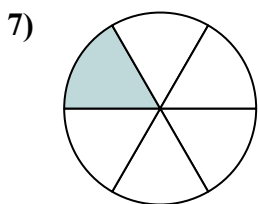
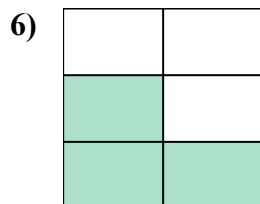
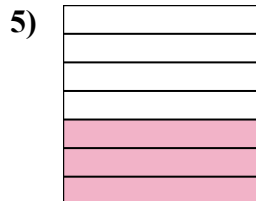

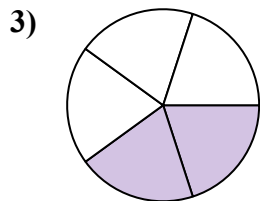
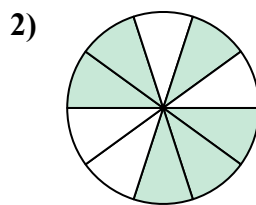
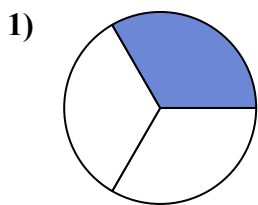
12. **bốn giờ bảy mươi**

13. **ba phần tư**

14. **bốn phần sáu**



Viết số tiền được tô bóng dưới dạng word.



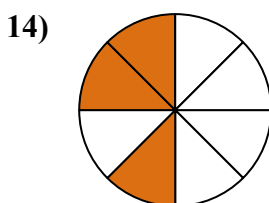
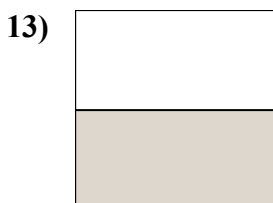
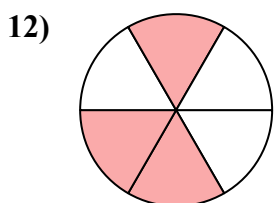
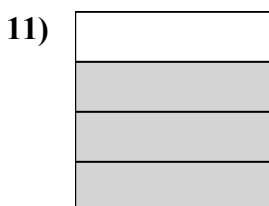
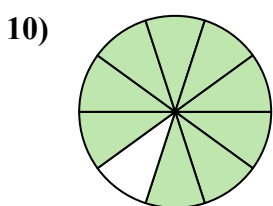
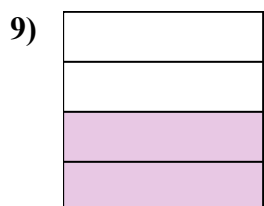
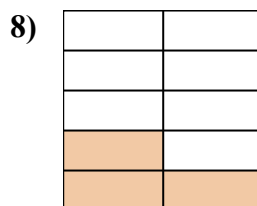
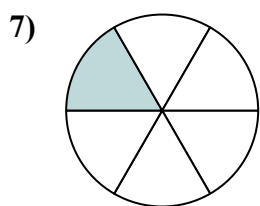
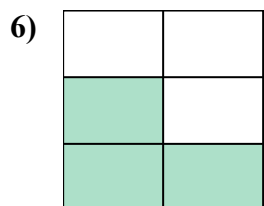
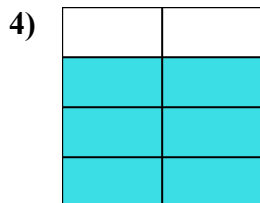
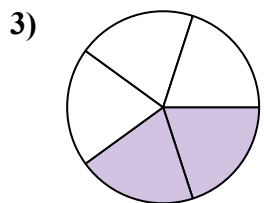
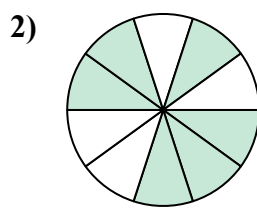
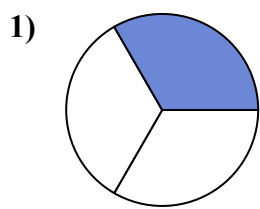
Câu trả lời

Vd. năm phần tám

1. _____
2. _____
3. _____
4. _____
5. _____
6. _____
7. _____
8. _____
9. _____
10. _____
11. _____
12. _____
13. _____
14. _____



Viết số tiền được tô bóng dưới dạng word.



Câu trả lời

Vd. **năm phần tám**

1. **một phần ba**

2. **sáu phần mười**

3. **hai phần năm**

4. **sáu bảy giờ**

5. **ba giờ bảy mươi**

6. **ba phần năm**

7. **một phần sáu**

8. **ba phần chín**

9. **hai phần tư**

10. **chín phần mười**

11. **ba phần tư**

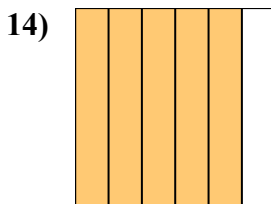
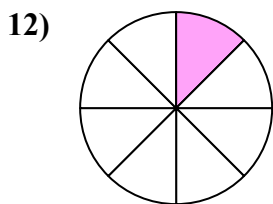
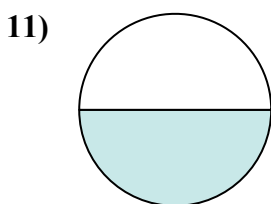
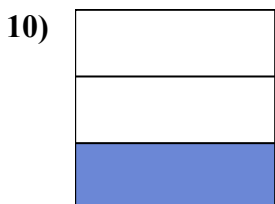
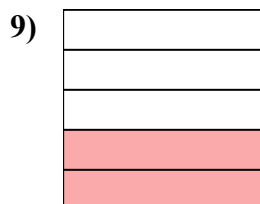
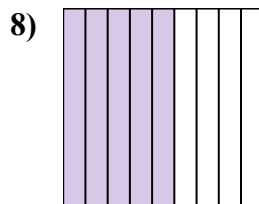

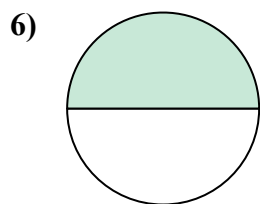
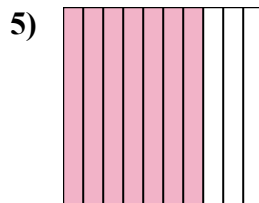
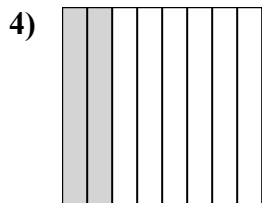
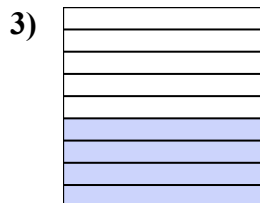
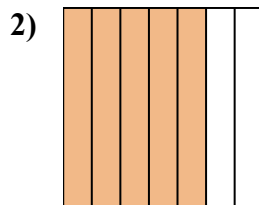

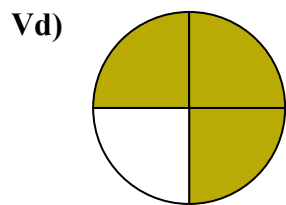
12. **ba phần sáu**

13. **một nửa**

14. **ba phần tám**



Viết số tiền được tô bóng dưới dạng word.



Câu trả lời

Vd. ba phần tư

1. _____

2. _____

3. _____

4. _____

5. _____

6. _____

7. _____

8. _____

9. _____

10. _____

11. _____

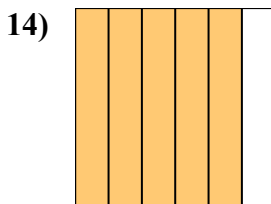
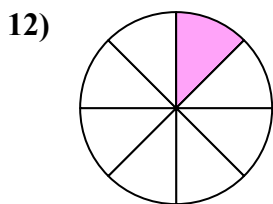
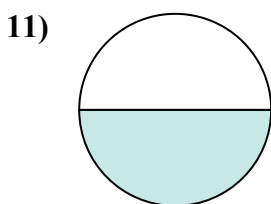
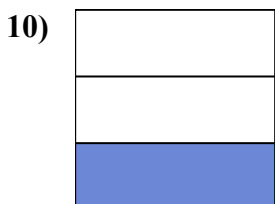
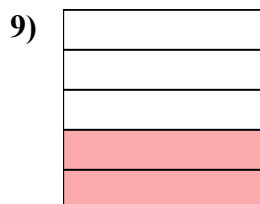
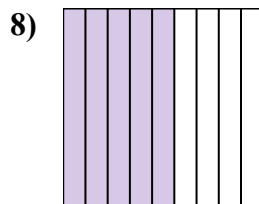

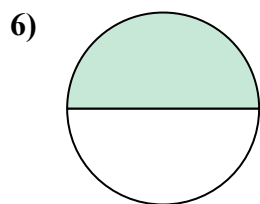
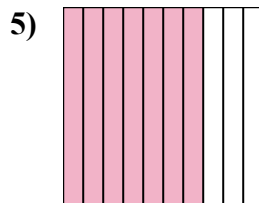
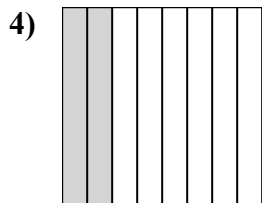
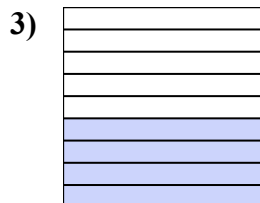
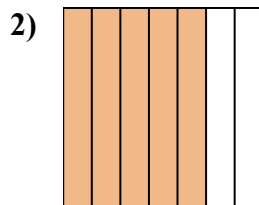

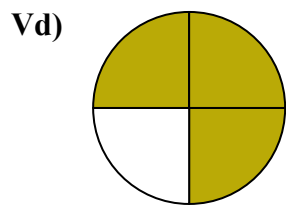
12. _____

13. _____

14. _____



Viết số tiền được tô bóng dưới dạng word.



Câu trả lời

Vd. ba phần tư

1. một phần tư

2. năm bảy giờ

3. bốn phần chín

4. hai phần tám

5. bảy phần mười

6. một nửa

7. một phần năm

8. năm chín

9. hai phần năm

10. một phần ba

11. một nửa


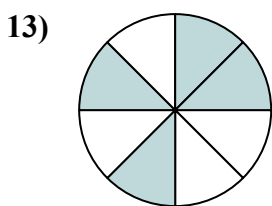
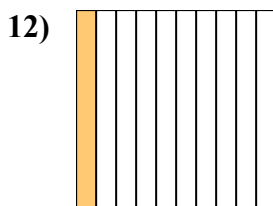
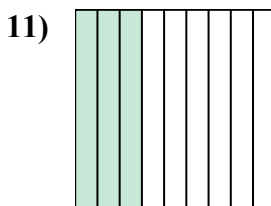
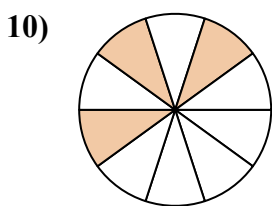
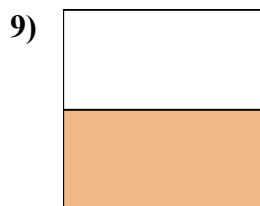
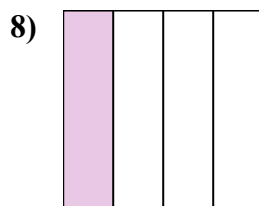
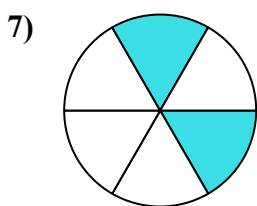
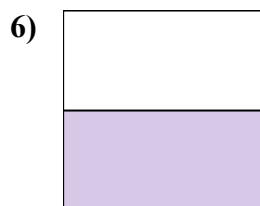
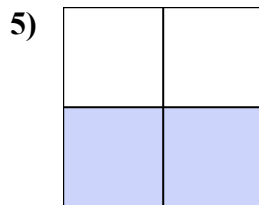
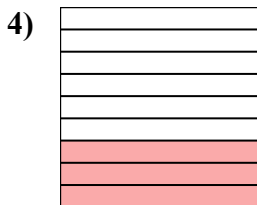
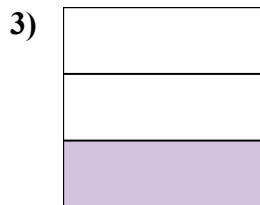
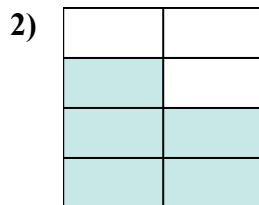
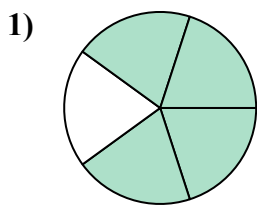
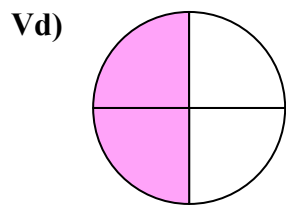
12. một phần tám

13. hai phần mười

14. năm phần sáu



Viết số tiền được tô bóng dưới dạng word.



Câu trả lời

Vd. hai phần tư

1. _____

2. _____

3. _____

4. _____

5. _____

6. _____

7. _____

8. _____

9. _____

10. _____

11. _____

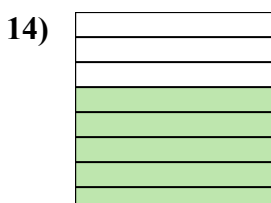
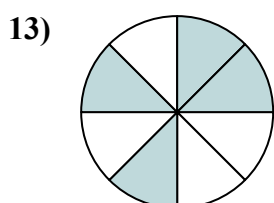
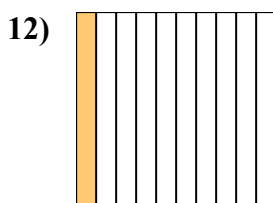
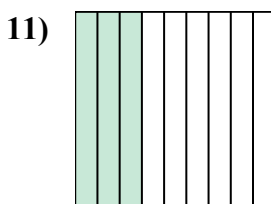
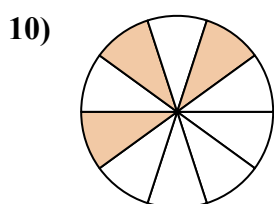
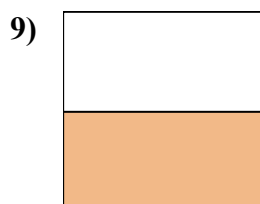
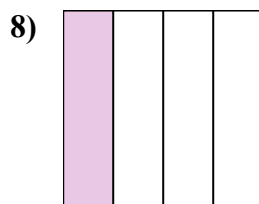
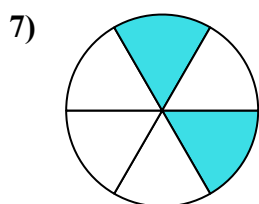
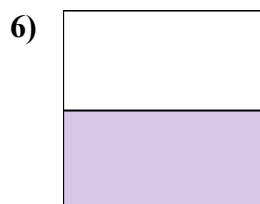
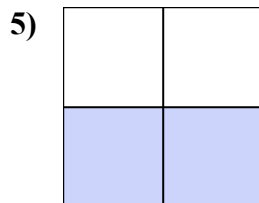
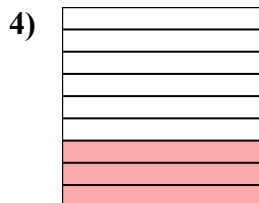
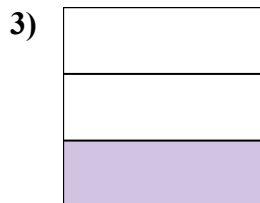
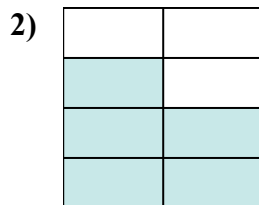
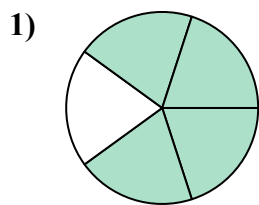
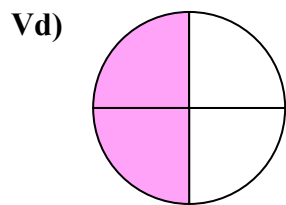
12. _____

13. _____

14. _____



Viết số tiền được tô bóng dưới dạng word.



Câu trả lời

Vd. hai phần tư

1. bốn phần năm

2. năm bảy giờ

3. một phần ba

4. ba phần chín

5. hai phần ba

6. một nửa

7. hai phần sáu

8. một phần tư

9. một nửa

10. ba phần mười

11. ba phần chín

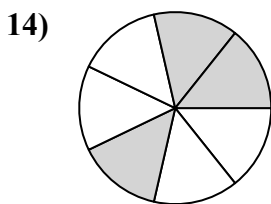
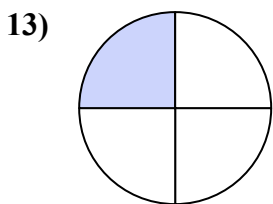
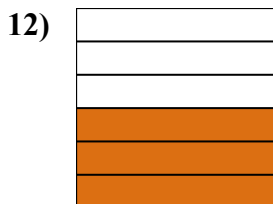
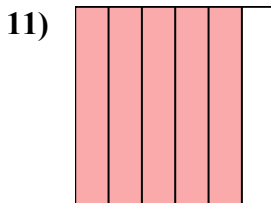
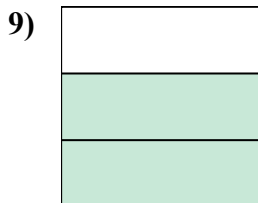
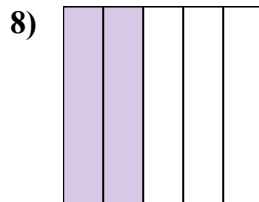
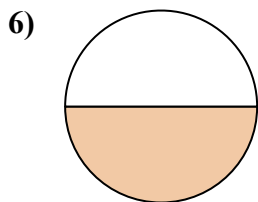
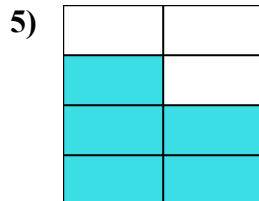
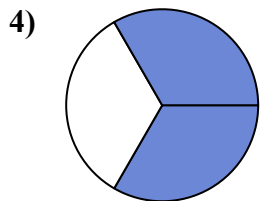
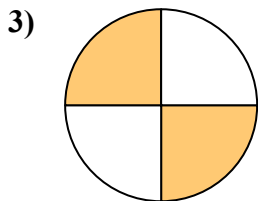

12. một phần mười

13. bốn phần tám

14. năm phần tám



Viết số tiền được tô bóng dưới dạng word.



Câu trả lời

Vd. một nửa

1. _____

2. _____

3. _____

4. _____

5. _____

6. _____

7. _____

8. _____

9. _____

10. _____

11. _____

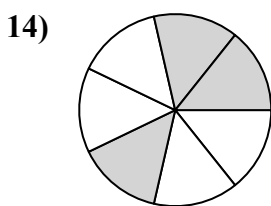
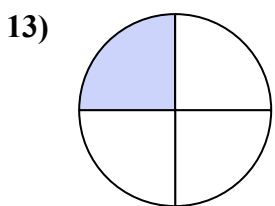
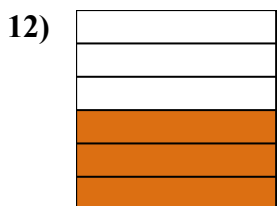
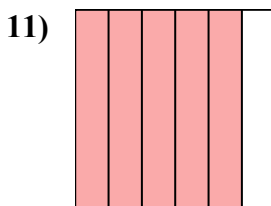

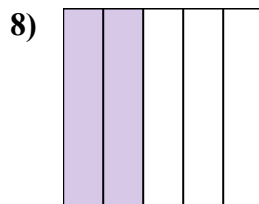
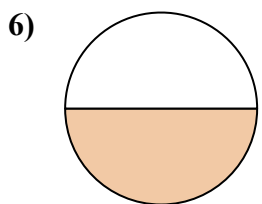
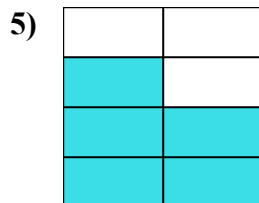
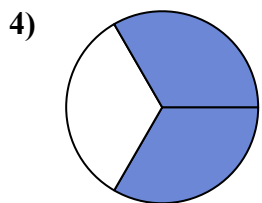
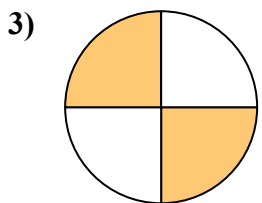

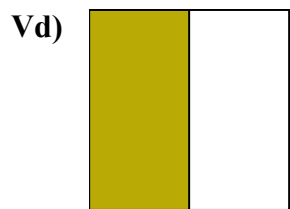
12. _____

13. _____

14. _____



Viết số tiền được tô bóng dưới dạng word.



Câu trả lời

Vd. một nửa

1. hai phần năm

2. năm phần mười

3. hai phần tư

4. hai phần ba

5. năm bảy giờ

6. một nửa

7. bốn phần tám

8. hai phần năm

9. hai phần ba

10. một phần chín

11. năm phần sáu

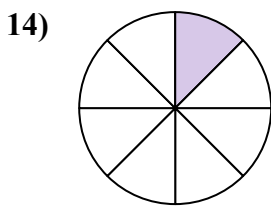
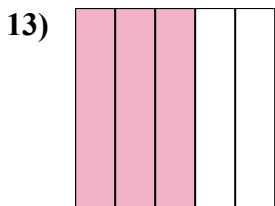
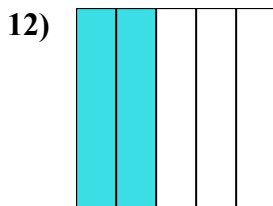
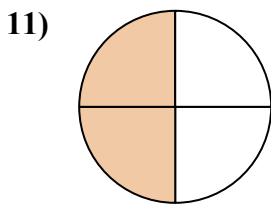
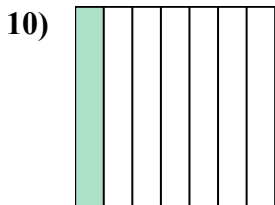
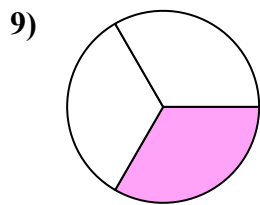
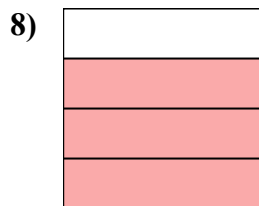
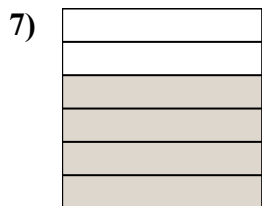
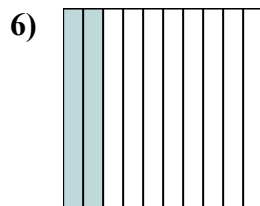
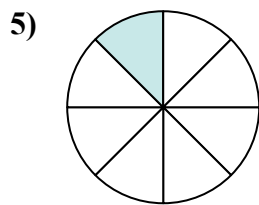
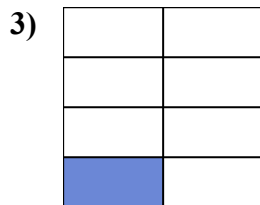
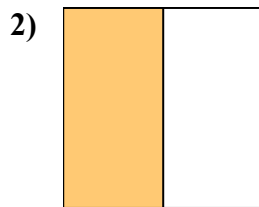

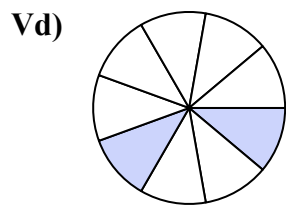
12. ba phần sáu

13. một phần tư

14. ba giờ bảy mươi



Viết số tiền được tô bóng dưới dạng word.



Câu trả lời

Vd. hai phần chín

1. _____

2. _____

3. _____

4. _____

5. _____

6. _____

7. _____

8. _____

9. _____

10. _____

11. _____

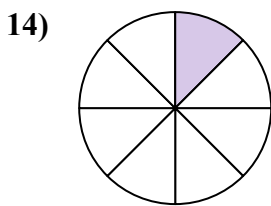
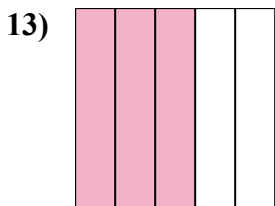
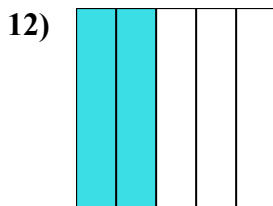
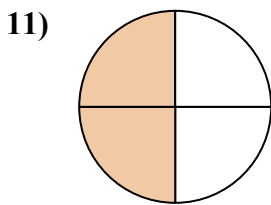
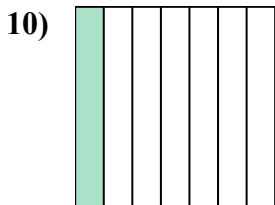
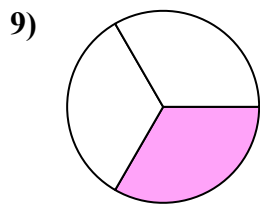
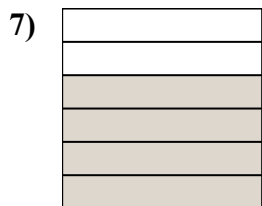
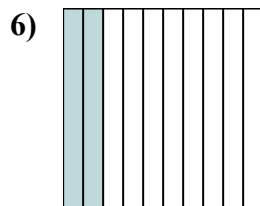
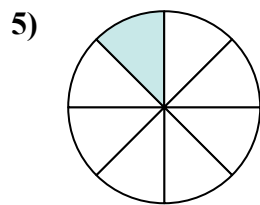
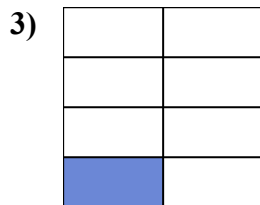
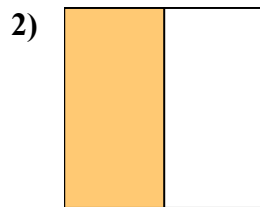

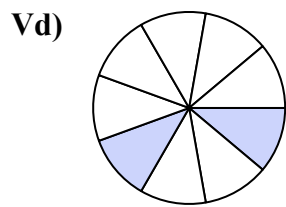
12. _____

13. _____

14. _____



Viết số tiền được tô bóng dưới dạng word.



Câu trả lời

Vd. **hai phần chín**

1. **chín phần mười**

2. **một nửa**

3. **một phần bảy**

4. **bảy chín**

5. **một phần tám**

6. **hai phần mười**

7. **bốn phần sáu**

8. **ba phần tư**

9. **một phần ba**

10. **một phần bảy**

11. **hai phần tư**

12. **hai phần năm**

13. **ba phần năm**

14. **một phần tám**