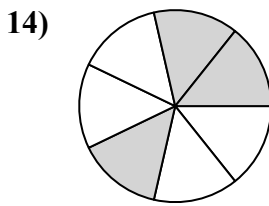
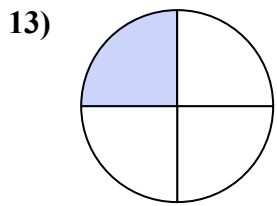
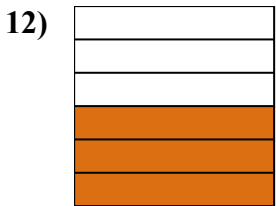
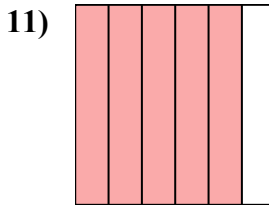
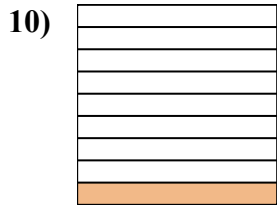
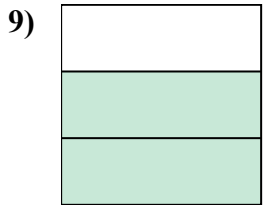
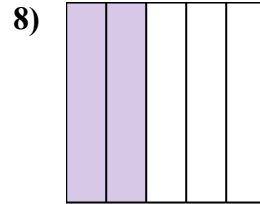
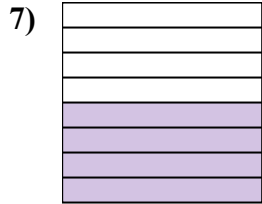
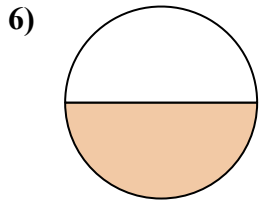
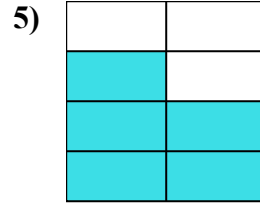
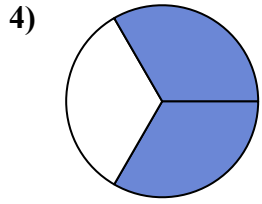
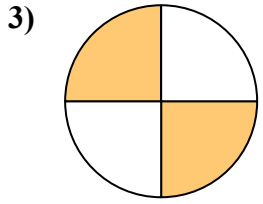
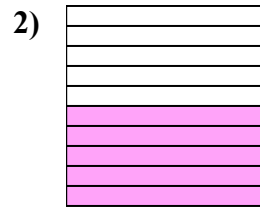
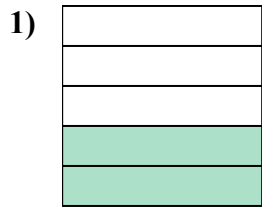
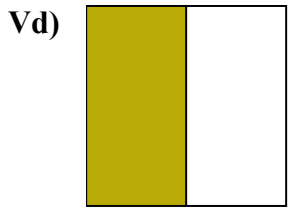




Viết số tiền được tô bóng dưới dạng word.



Câu trả lời

Vd. một nửa

1. _____

2. _____

3. _____

4. _____

5. _____

6. _____

7. _____

8. _____

9. _____

10. _____

11. _____

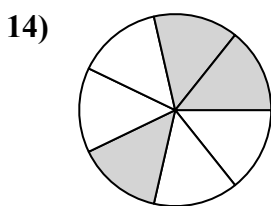
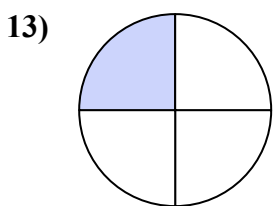
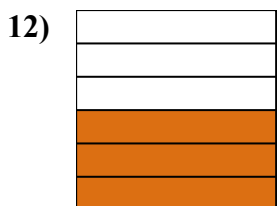
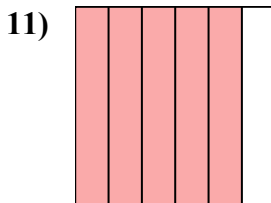

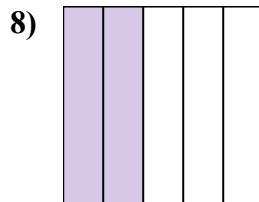
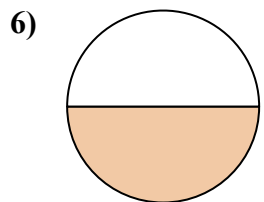
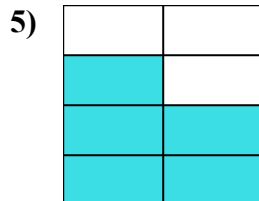
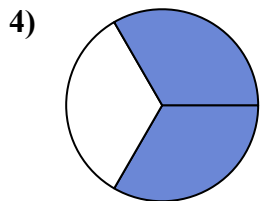
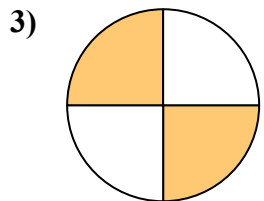
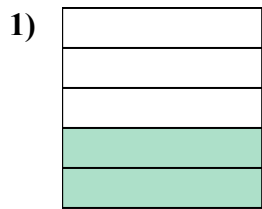
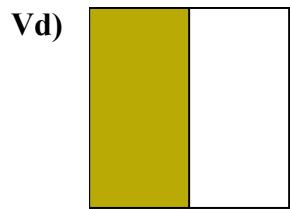
12. _____

13. _____

14. _____



Viết số tiền được tô bóng dưới dạng word.



Câu trả lời

Vd. một nửa

1. hai phần năm

2. năm phần mười

3. hai phần tư

4. hai phần ba

5. năm bảy giờ

6. một nửa

7. bốn phần tám

8. hai phần năm

9. hai phần ba

10. một phần chín

11. năm phần sáu

12. ba phần sáu

13. một phần tư

14. ba giờ bảy mươi