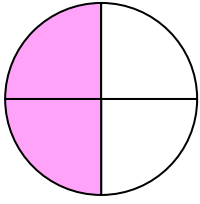


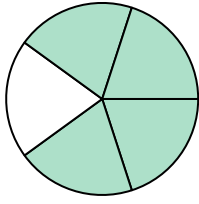


Viết số tiền được tô bóng dưới dạng word.

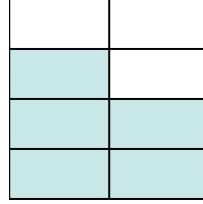
Vd)



1)



2)

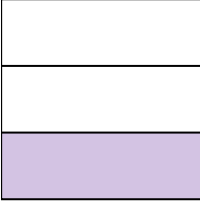


Câu trả lời


Vd.

hai phần tư

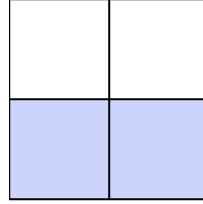
3)




4)



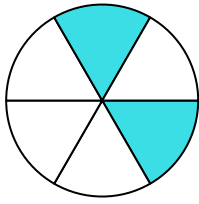
5)



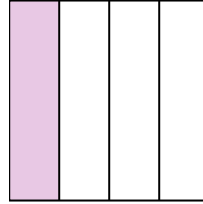
6)




7)



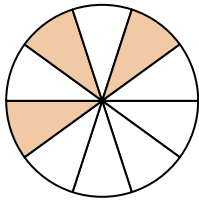
8)



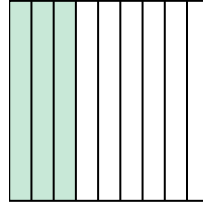
9)



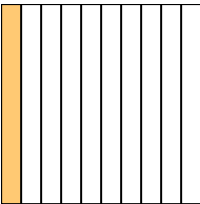
10)



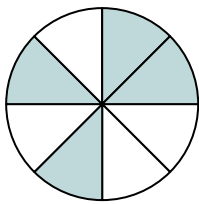
11)




12)



13)



14)



1.

2.

3.

4.

5.

6.

7.

8.

9.

10.

11.


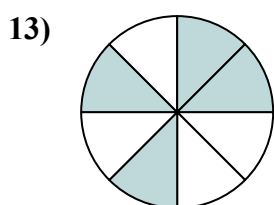
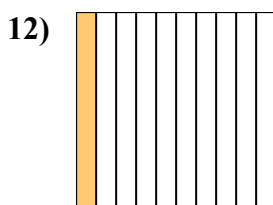
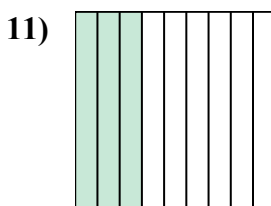
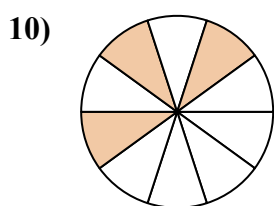
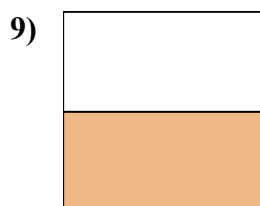
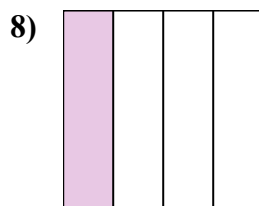
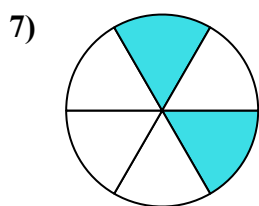
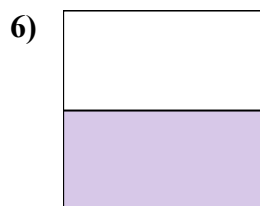
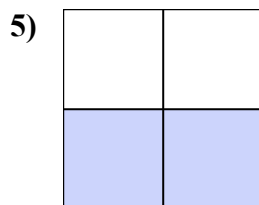
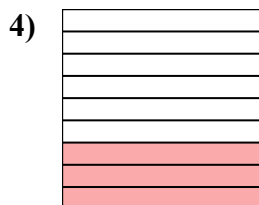
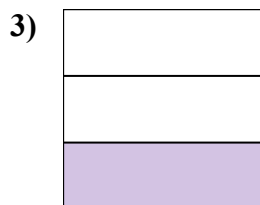
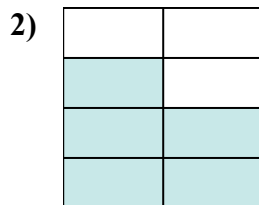
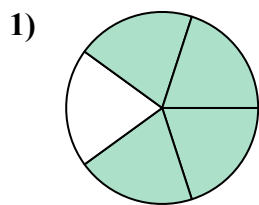
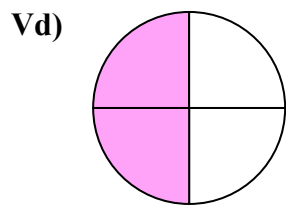
12.

13.

14.



Viết số tiền được tô bóng dưới dạng word.



Câu trả lời

Vd. hai phần tư

1. bốn phần năm

2. năm bảy giờ

3. một phần ba

4. ba phần chín

5. hai phần ba

6. một nửa

7. hai phần sáu

8. một phần tư

9. một nửa

10. ba phần mười

11. ba phần chín

12. một phần mười

13. bốn phần tám

14. năm phần tám