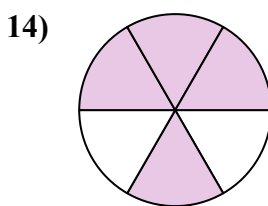
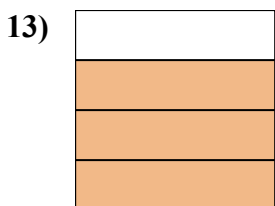
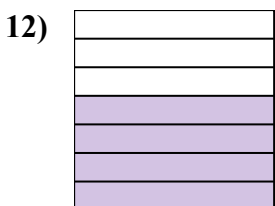

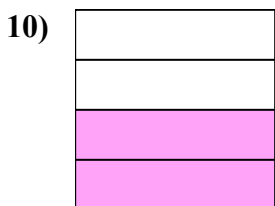
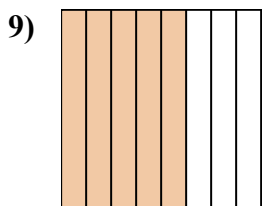
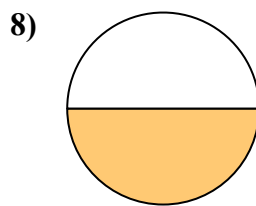
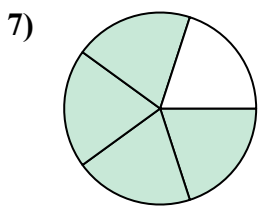
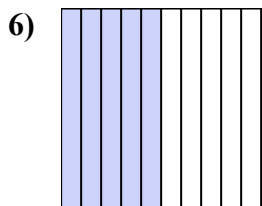
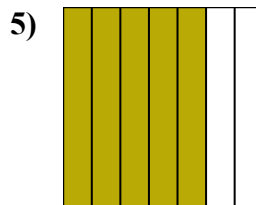
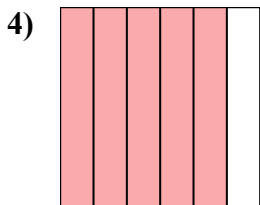
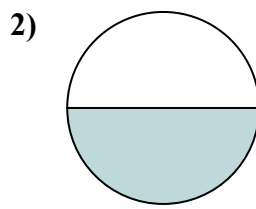
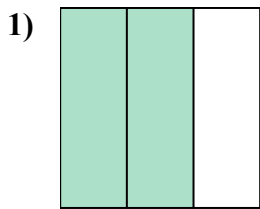
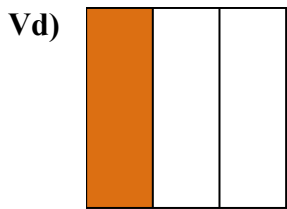




Viết số tiền được tô bóng dưới dạng word.



**Câu trả lời**

Vd. một phần ba

1. \_\_\_\_\_

2. \_\_\_\_\_

3. \_\_\_\_\_

4. \_\_\_\_\_

5. \_\_\_\_\_

6. \_\_\_\_\_

7. \_\_\_\_\_

8. \_\_\_\_\_

9. \_\_\_\_\_

10. \_\_\_\_\_

11. \_\_\_\_\_

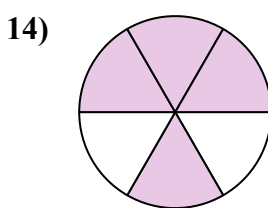
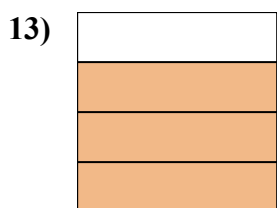
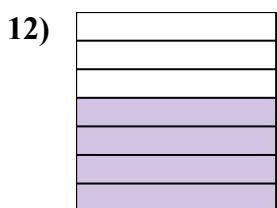

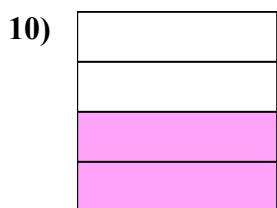
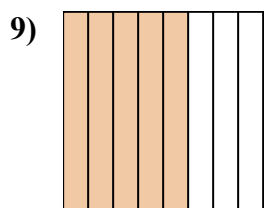
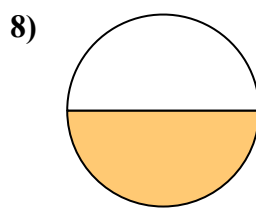
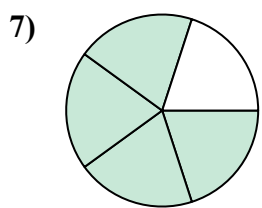
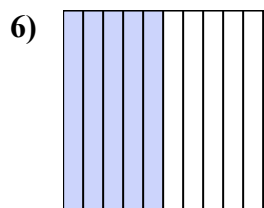
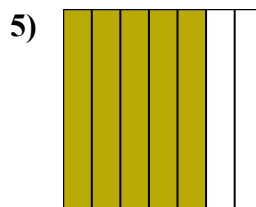
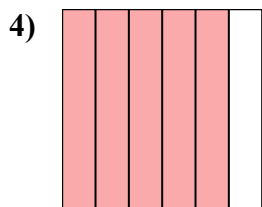
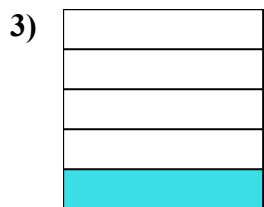
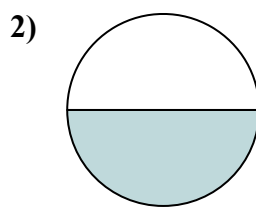
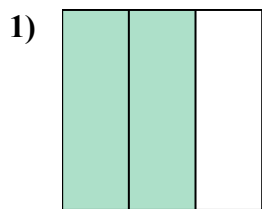
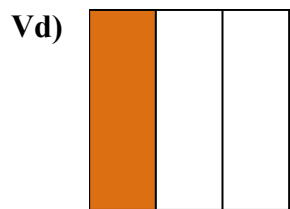
12. \_\_\_\_\_

13. \_\_\_\_\_

14. \_\_\_\_\_



Viết số tiền được tô bóng dưới dạng word.



**Câu trả lời**

Vd. **một phần ba**

1. **hai phần ba**

2. **một nửa**

3. **một phần năm**

4. **năm phần sáu**

5. **năm bảy giờ**

6. **năm phần mười**

7. **bốn phần năm**

8. **một nửa**

9. **năm phần tám**

10. **hai phần tư**

11. **một phần tám**

12. **bốn giờ bảy mươi**

13. **ba phần tư**

14. **bốn phần sáu**