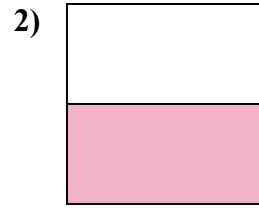
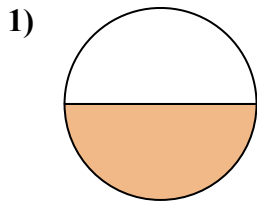
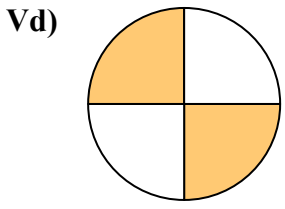




Viết số tiền được tô bóng dưới dạng phân số.

Câu trả lời

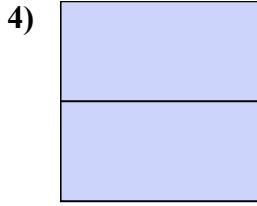
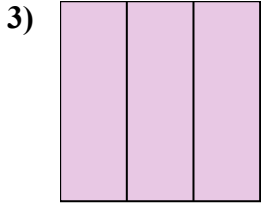


Vd. $\frac{2}{4}$

1. _____

2. _____

3. _____

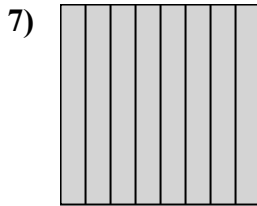


4. _____

5. _____

6. _____

7. _____

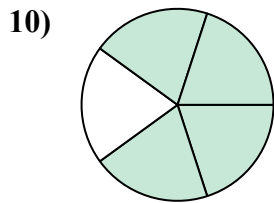
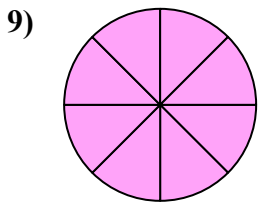


8. _____

9. _____

10. _____

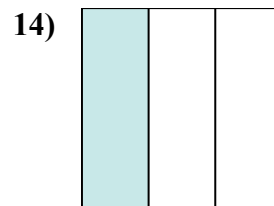
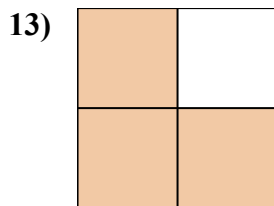
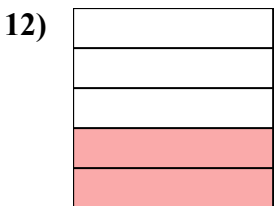
11. _____



12. _____

13. _____

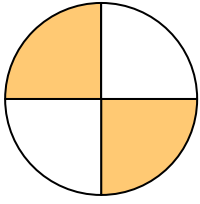
14. _____



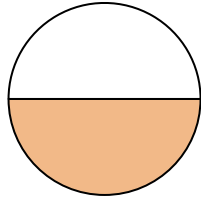


Viết số tiền được tô bóng dưới dạng phân số.

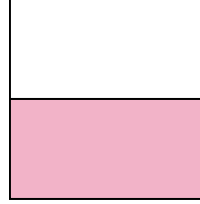
Vd)




1)



2)



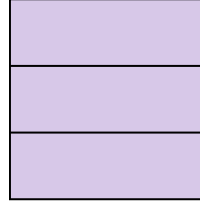
3)



4)




5)



6)



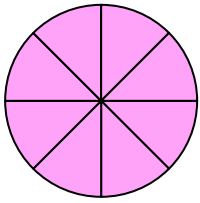
7)



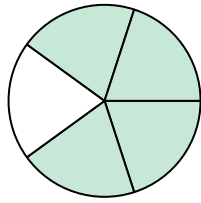
8)



9)



10)



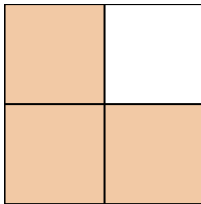
11)




12)



13)



14)



Câu trả lời

Vd. $\frac{2}{4}$

1. $\frac{1}{2}$

2. $\frac{1}{2}$

3. $\frac{3}{3}$

4. $\frac{2}{2}$

5. $\frac{3}{3}$

6. $\frac{2}{4}$

7. $\frac{8}{8}$

8. $\frac{2}{8}$

9. $\frac{8}{8}$

10. $\frac{4}{5}$

11. $\frac{5}{5}$

12. $\frac{2}{5}$

13. $\frac{3}{4}$

14. $\frac{1}{3}$