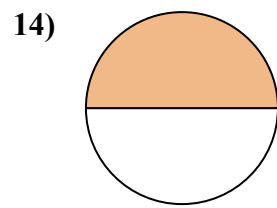
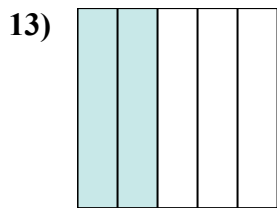
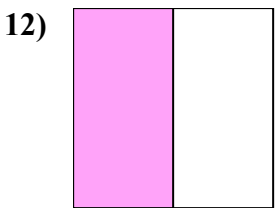
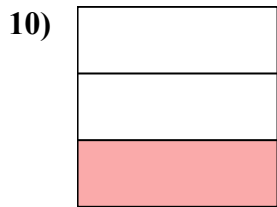
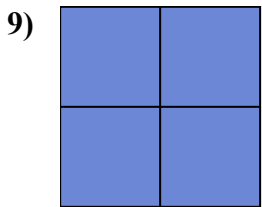
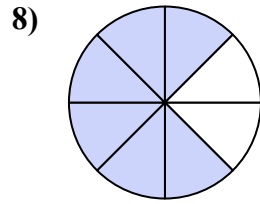
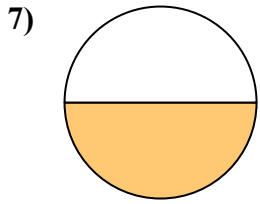
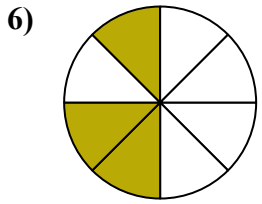
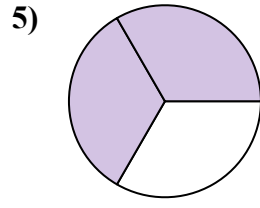
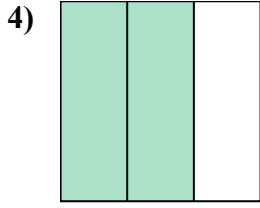
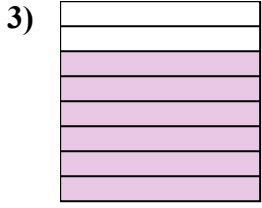
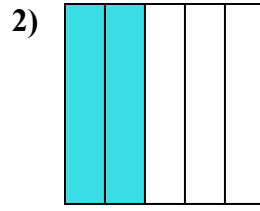
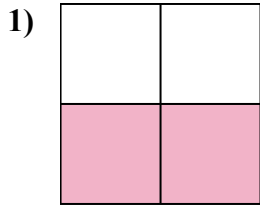
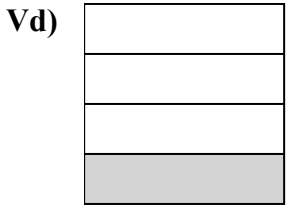




Viết số tiền được tô bóng dưới dạng phân số.



Câu trả lời

Vd. $\frac{1}{4}$

1. _____

2. _____

3. _____

4. _____

5. _____

6. _____

7. _____

8. _____

9. _____

10. _____

11. _____

12. _____

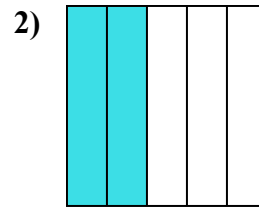
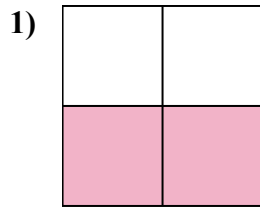
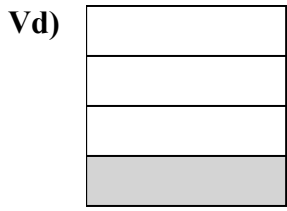
13. _____

14. _____

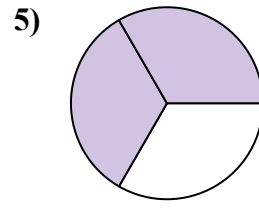
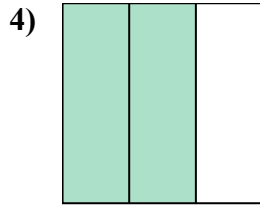
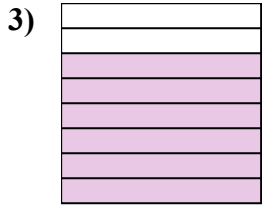


Viết số tiền được tô bóng dưới dạng phân số.

Câu trả lời



Vd. 1/4



1. 2/4

2. 2/5

3. 6/8

4. 2/3

5. 2/3

6. 3/8

7. 1/2

8. 6/8

9. 4/4

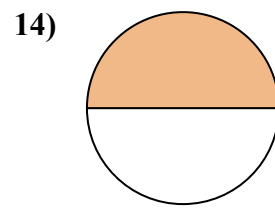
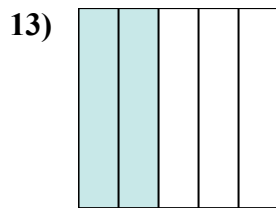
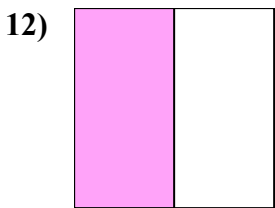

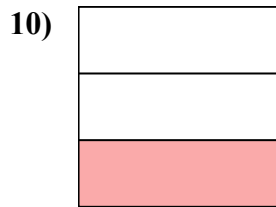
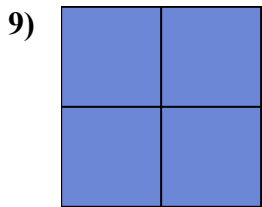
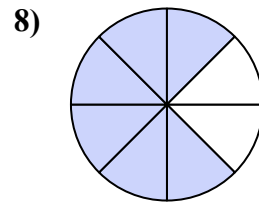
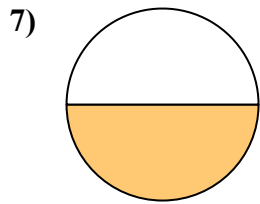
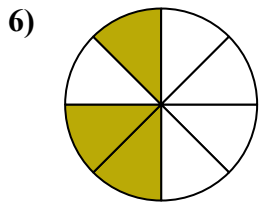
10. 1/3

11. 5/5

12. 1/2

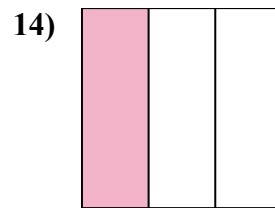
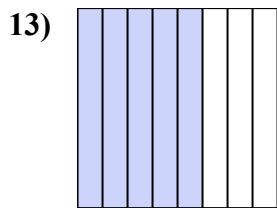
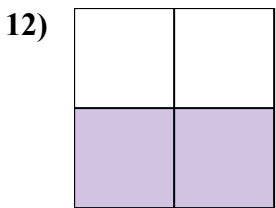
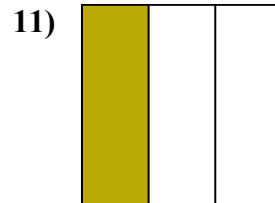
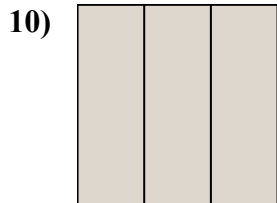
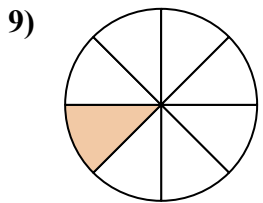
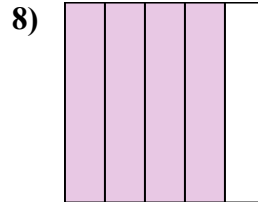
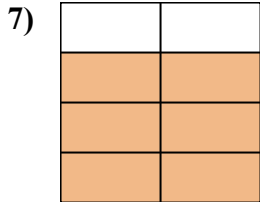
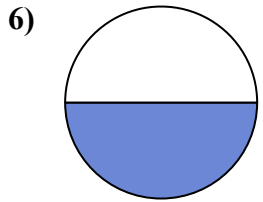
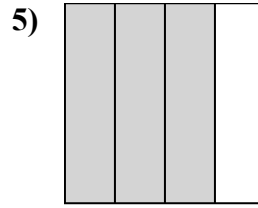
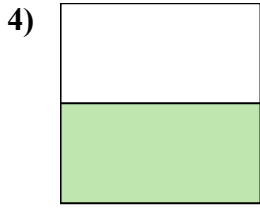
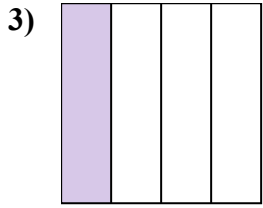
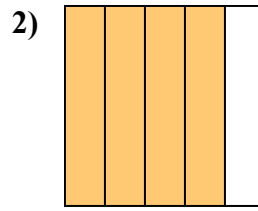
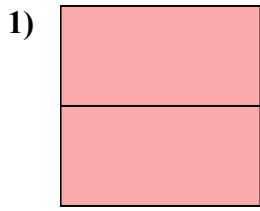
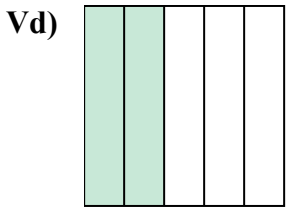
13. 2/5

14. 1/2





Viết số tiền được tô bóng dưới dạng phân số.



Câu trả lời

Vd. $\frac{2}{5}$

1. _____

2. _____

3. _____

4. _____

5. _____

6. _____

7. _____

8. _____

9. _____

10. _____

11. _____

12. _____

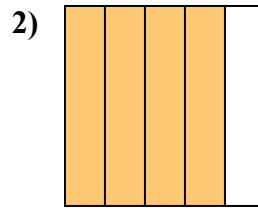
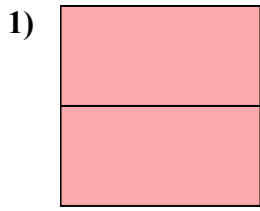
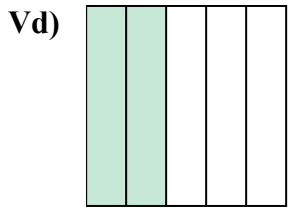
13. _____

14. _____

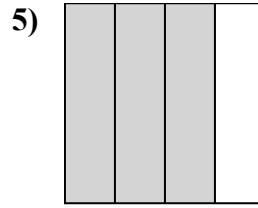
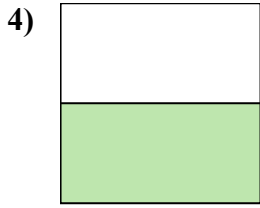
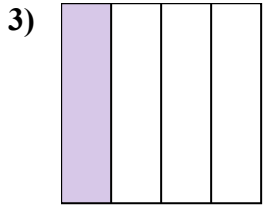


Viết số tiền được tô bóng dưới dạng phân số.

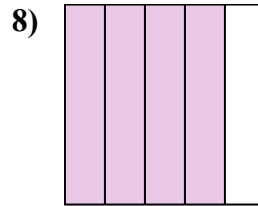
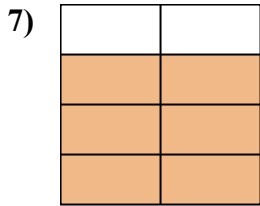
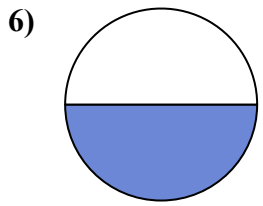
Câu trả lời




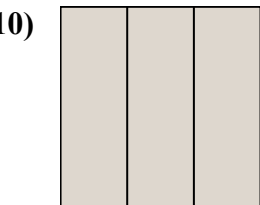
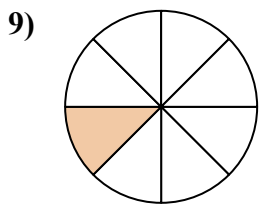
Vd. 2/5



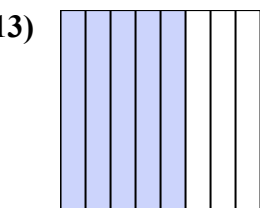
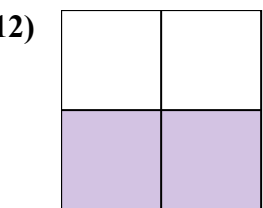
1. 2/2



2. 4/5



3. 1/4



4. 1/2

5. 3/4

6. 1/2

7. 6/8

8. 4/5

9. 1/8

10. 3/3

11. 1/3

12. 2/4

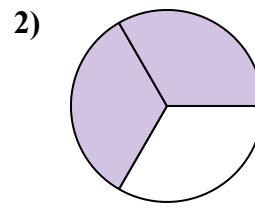
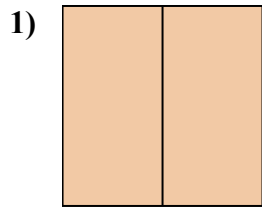
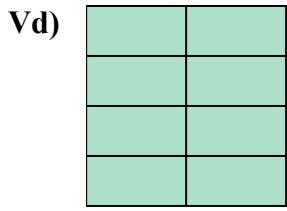
13. 5/8

14. 1/3

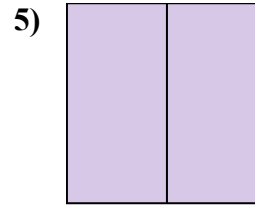
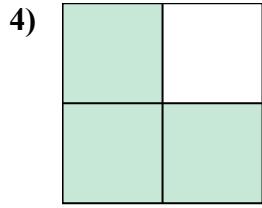


Viết số tiền được tô bóng dưới dạng phân số.

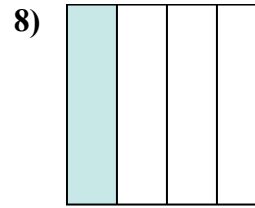
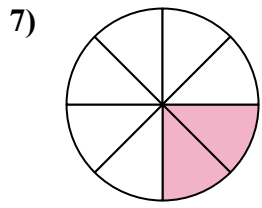
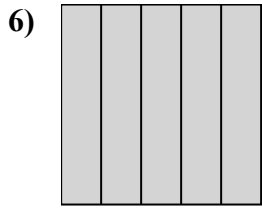
Câu trả lời



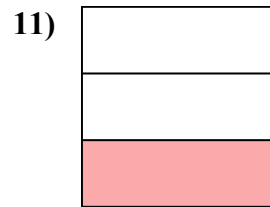
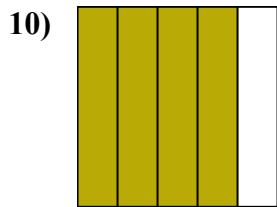
Vd. $\frac{8}{8}$



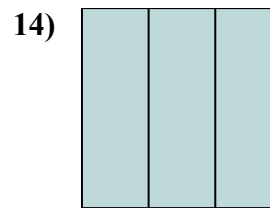
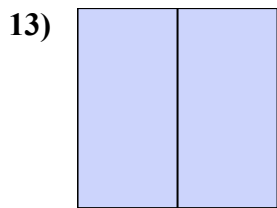
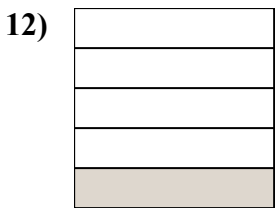
1. _____
2. _____



3. _____
4. _____



5. _____
6. _____

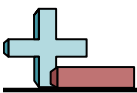


7. _____
8. _____

9. _____
10. _____

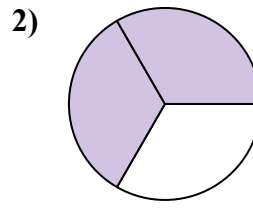
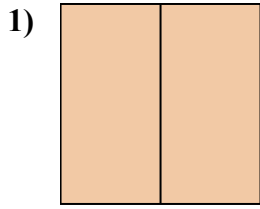
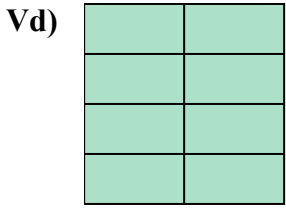
11. _____
12. _____

13. _____
14. _____

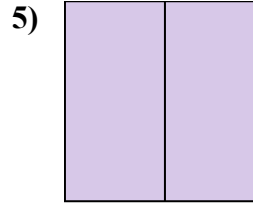
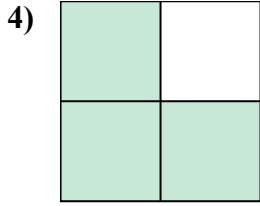
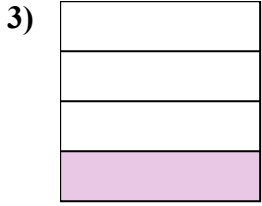


Viết số tiền được tô bóng dưới dạng phân số.

Câu trả lời



Vd. $\frac{8}{8}$



1. $\frac{2}{2}$

2. $\frac{2}{3}$

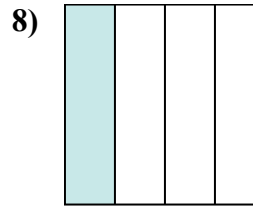
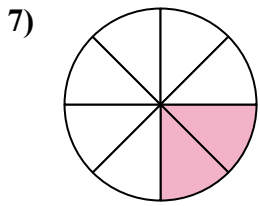
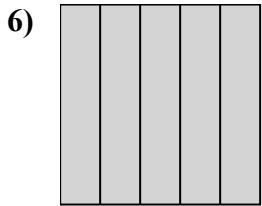
3. $\frac{1}{4}$

4. $\frac{3}{4}$

5. $\frac{2}{2}$

6. $\frac{5}{5}$

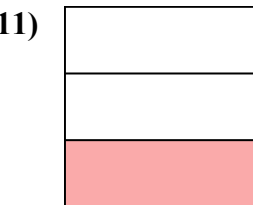
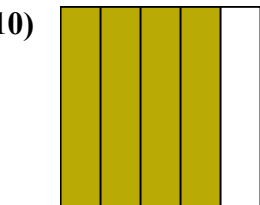
7. $\frac{2}{8}$



8. $\frac{1}{4}$

9. $\frac{3}{8}$

10. $\frac{4}{5}$

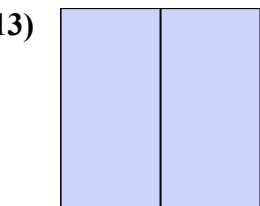


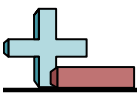
11. $\frac{1}{3}$

12. $\frac{1}{5}$

13. $\frac{2}{2}$

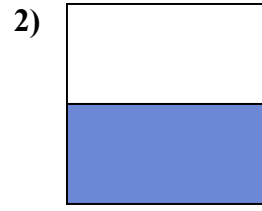
14. $\frac{3}{3}$





Viết số tiền được tô bóng dưới dạng phân số.

Câu trả lời



Vd. $\frac{4}{8}$

1. _____

2. _____

3. _____

4. _____

5. _____

6. _____

7. _____

8. _____

9. _____

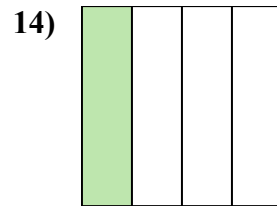
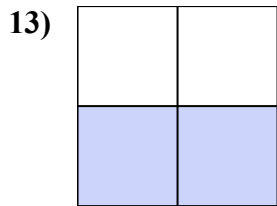
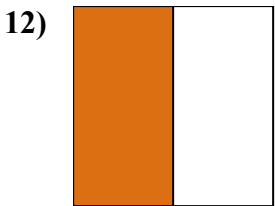
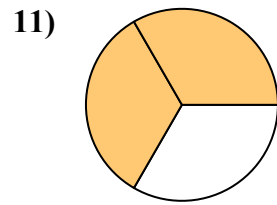
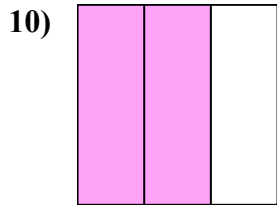
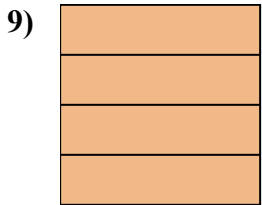
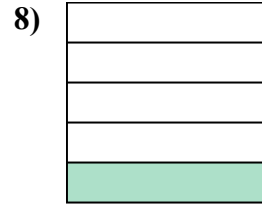
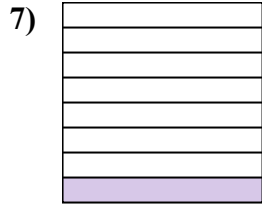
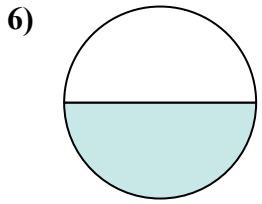
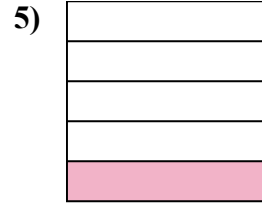
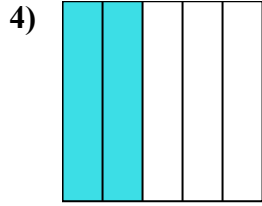
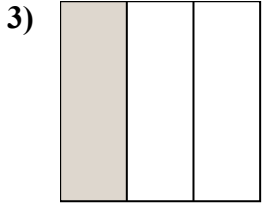
10. _____

11. _____

12. _____

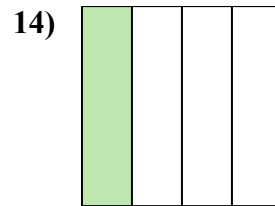
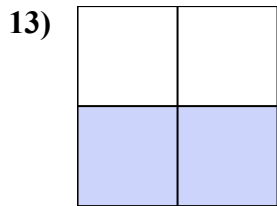
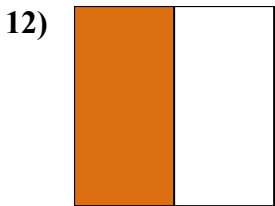
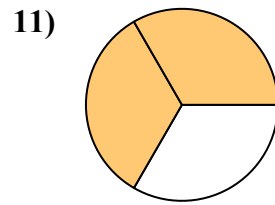
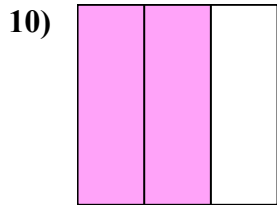
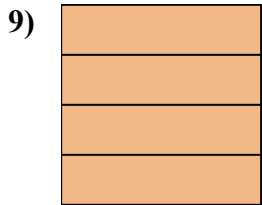
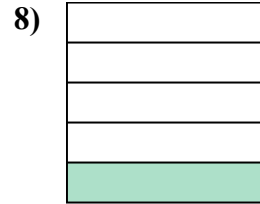
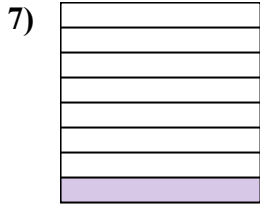
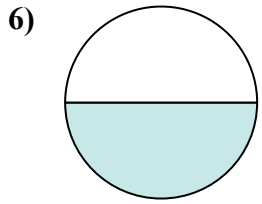
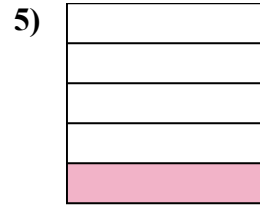
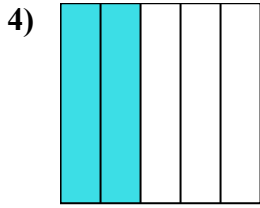
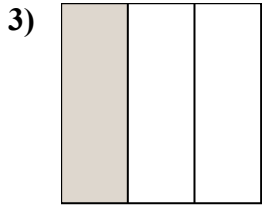
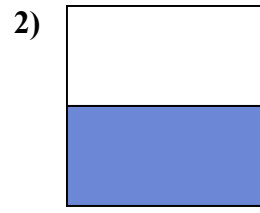
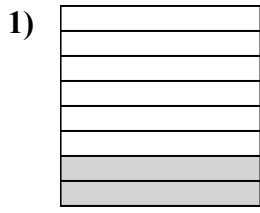

13. _____

14. _____





Viết số tiền được tô bóng dưới dạng phân số.



Câu trả lời

Vd. $\frac{4}{8}$

1. $\frac{2}{8}$

2. $\frac{1}{2}$

3. $\frac{1}{3}$

4. $\frac{2}{5}$

5. $\frac{1}{5}$

6. $\frac{1}{2}$

7. $\frac{1}{8}$

8. $\frac{1}{5}$

9. $\frac{4}{4}$

10. $\frac{2}{3}$

11. $\frac{2}{3}$

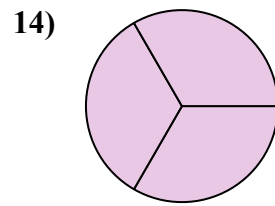
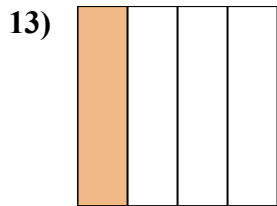
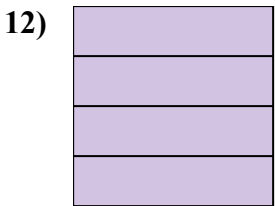
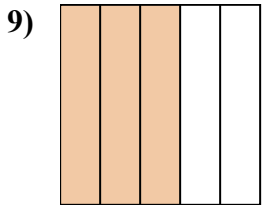
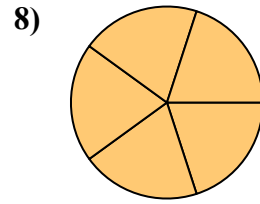
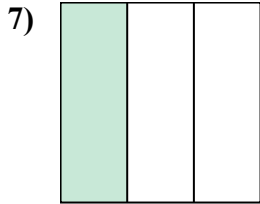
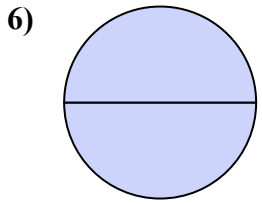
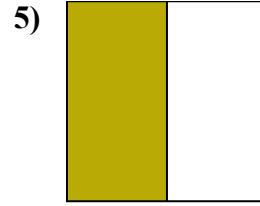
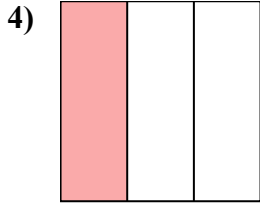
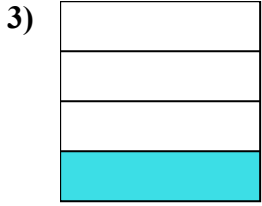
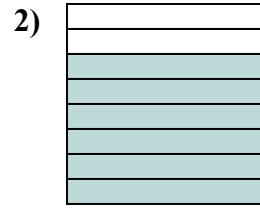
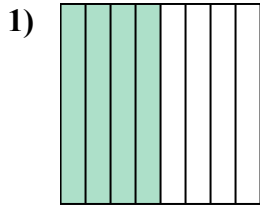
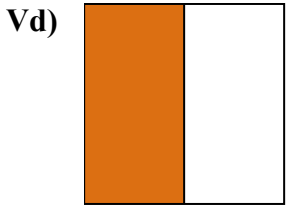
12. $\frac{1}{2}$

13. $\frac{2}{4}$

14. $\frac{1}{4}$



Viết số tiền được tô bóng dưới dạng phân số.



Câu trả lời

Vd. $\frac{1}{2}$

1. _____

2. _____

3. _____

4. _____

5. _____

6. _____

7. _____

8. _____

9. _____

10. _____

11. _____

12. _____

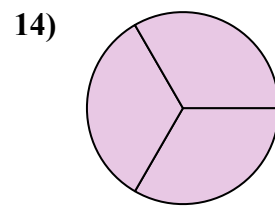
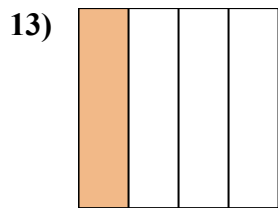
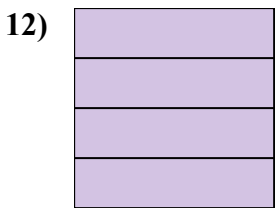

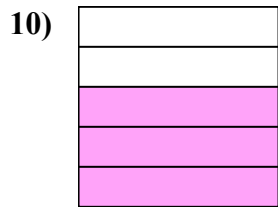
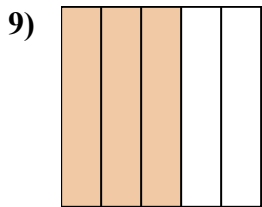
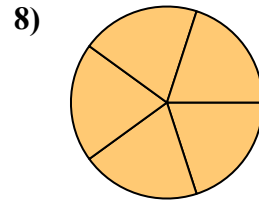
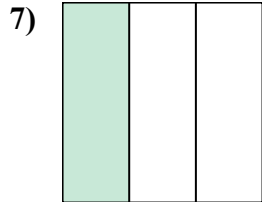
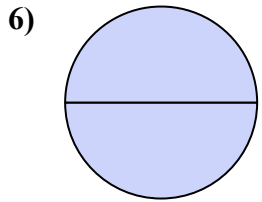
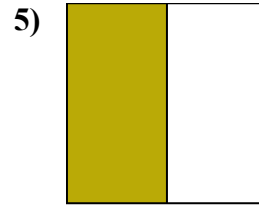
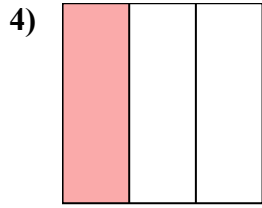
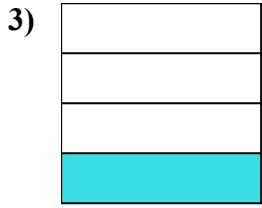
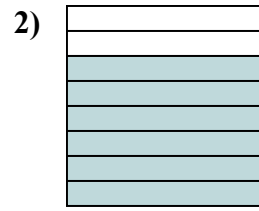
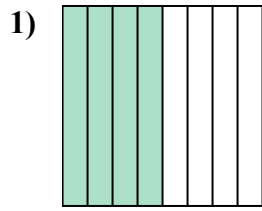
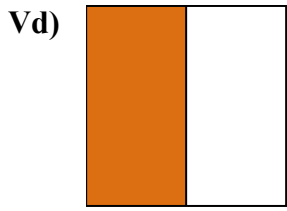
13. _____

14. _____



Viết số tiền được tô bóng dưới dạng phân số.

Câu trả lời



Vd. $\frac{1}{2}$

1. $\frac{4}{8}$

2. $\frac{6}{8}$

3. $\frac{1}{4}$

4. $\frac{1}{3}$

5. $\frac{1}{2}$

6. $\frac{2}{2}$

7. $\frac{1}{3}$

8. $\frac{5}{5}$

9. $\frac{3}{5}$

10. $\frac{3}{5}$

11. $\frac{7}{8}$

12. $\frac{4}{4}$

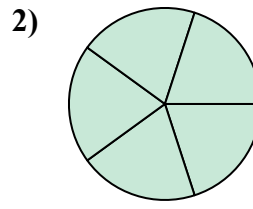
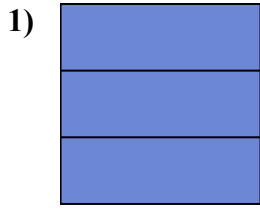
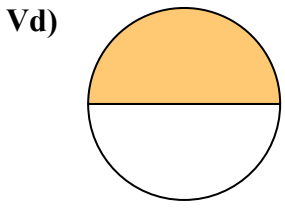
13. $\frac{1}{4}$

14. $\frac{3}{3}$



Viết số tiền được tô bóng dưới dạng phân số.

Câu trả lời



Vd. $\frac{1}{2}$

1. _____

2. _____

3. _____

4. _____

5. _____

6. _____

7. _____

8. _____

9. _____

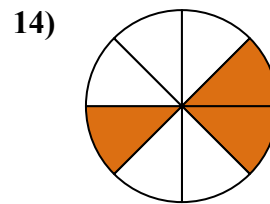
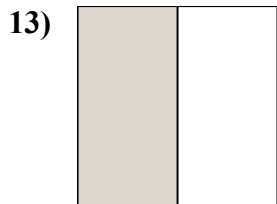
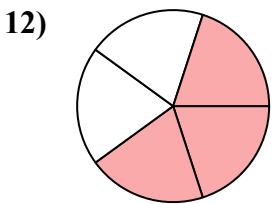
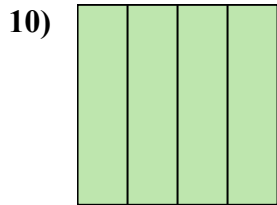
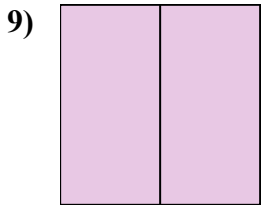
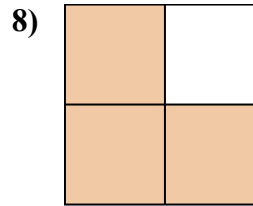
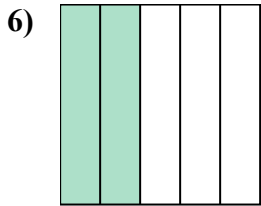
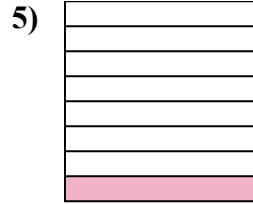
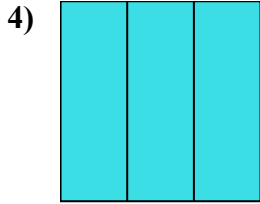
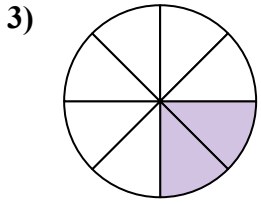
10. _____

11. _____

12. _____

13. _____

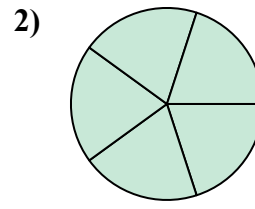
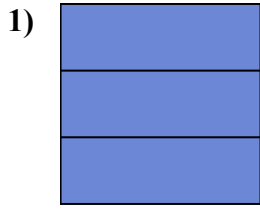
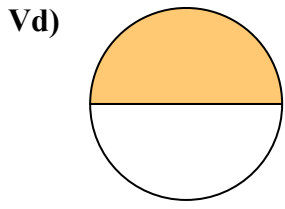
14. _____



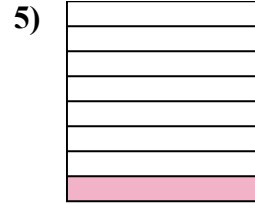
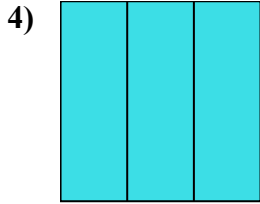
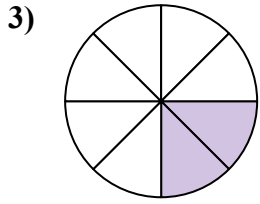


Viết số tiền được tô bóng dưới dạng phân số.

Câu trả lời



Vd. $\frac{1}{2}$



1. $\frac{3}{3}$

2. $\frac{5}{5}$

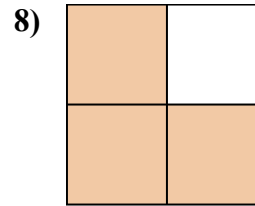
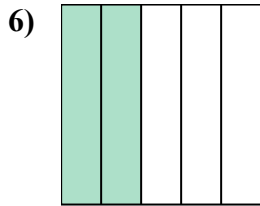
3. $\frac{2}{8}$

4. $\frac{3}{3}$

5. $\frac{1}{8}$

6. $\frac{2}{5}$

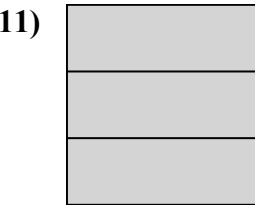
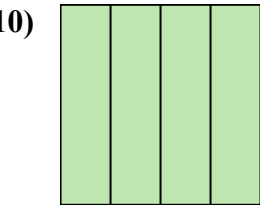
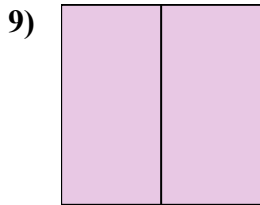
7. $\frac{4}{4}$



8. $\frac{3}{4}$

9. $\frac{2}{2}$

10. $\frac{4}{4}$

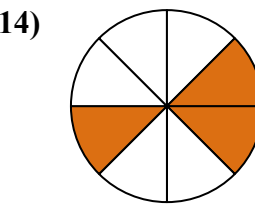
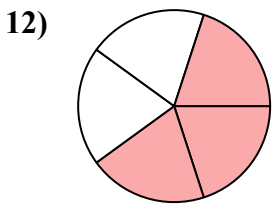


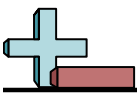
11. $\frac{3}{3}$

12. $\frac{3}{5}$

13. $\frac{1}{2}$

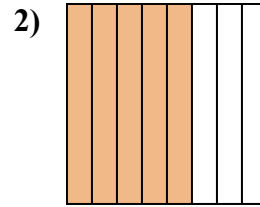
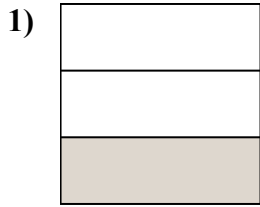
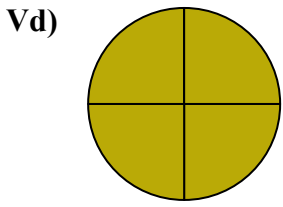
14. $\frac{3}{8}$





Viết số tiền được tô bóng dưới dạng phân số.

Câu trả lời



Vd. $\frac{4}{4}$

1. _____

2. _____

3. _____

4. _____

5. _____

6. _____

7. _____

8. _____

9. _____

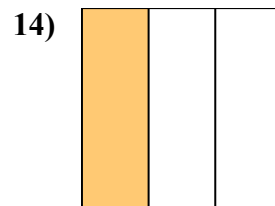
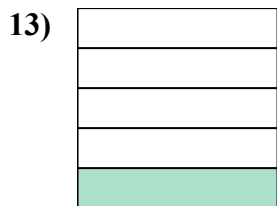
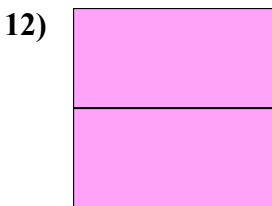
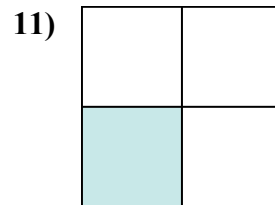
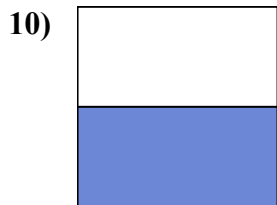
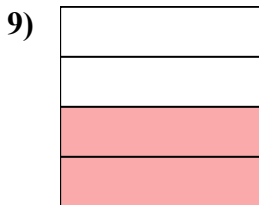
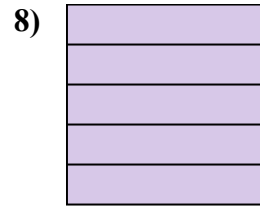
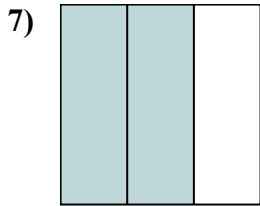
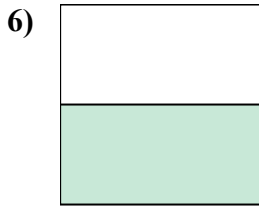
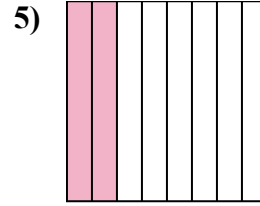
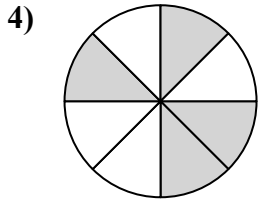
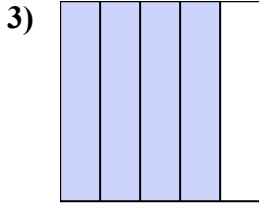
10. _____

11. _____

12. _____

13. _____

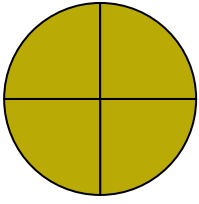
14. _____






Viết số tiền được tô bóng dưới dạng phân số.

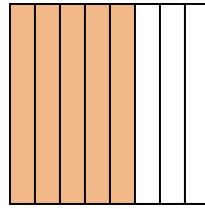
Vd)



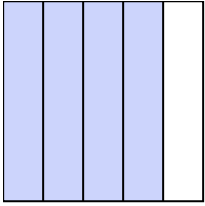
1)



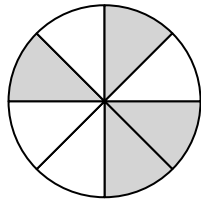
2)



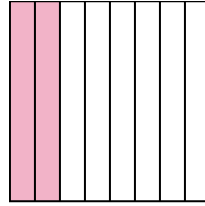
3)




4)



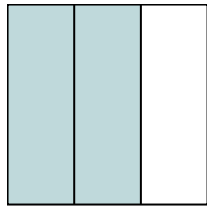
5)



6)



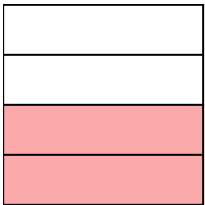
7)




8)



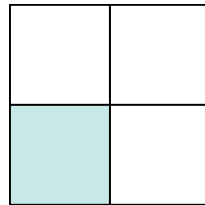
9)




10)



11)



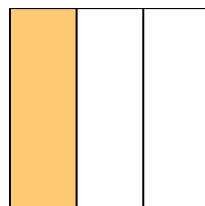
12)



13)



14)



Câu trả lời

Vd. $\frac{4}{4}$

1. $\frac{1}{3}$

2. $\frac{5}{8}$

3. $\frac{4}{5}$

4. $\frac{4}{8}$

5. $\frac{2}{8}$

6. $\frac{1}{2}$

7. $\frac{2}{3}$

8. $\frac{5}{5}$

9. $\frac{2}{4}$

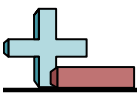
10. $\frac{1}{2}$

11. $\frac{1}{4}$

12. $\frac{2}{2}$

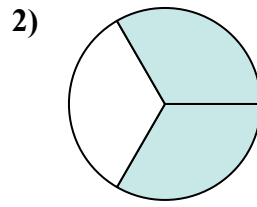
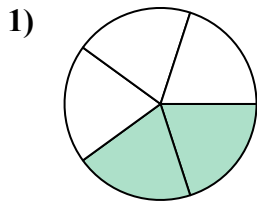
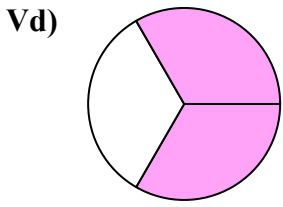
13. $\frac{1}{5}$

14. $\frac{1}{3}$

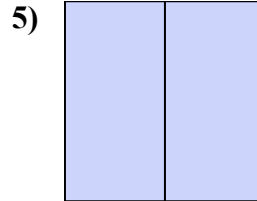
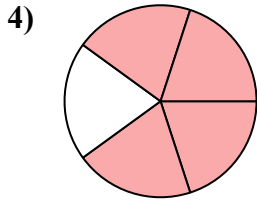
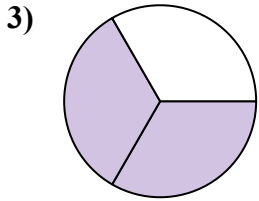


Viết số tiền được tô bóng dưới dạng phân số.

Câu trả lời

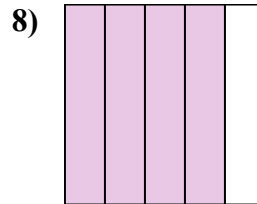
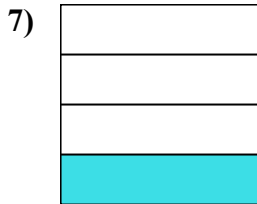
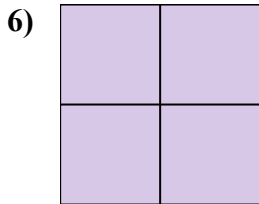


Vd. $\frac{2}{3}$



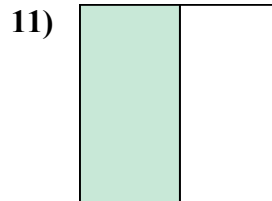
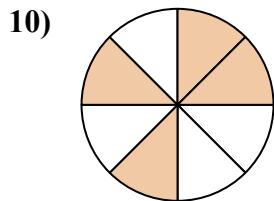
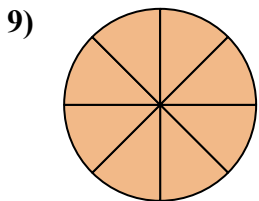
1. _____

2. _____



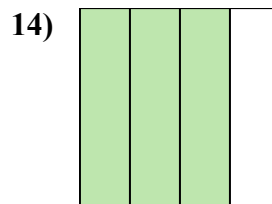
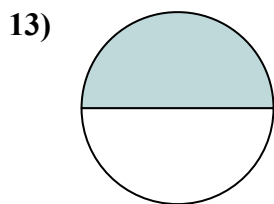
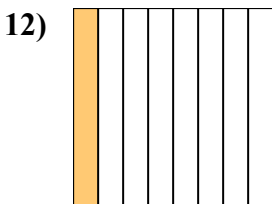
3. _____

4. _____



5. _____

6. _____



7. _____

8. _____

9. _____

10. _____

11. _____

12. _____

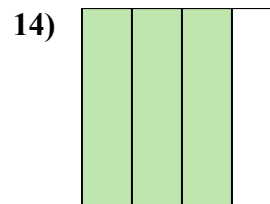
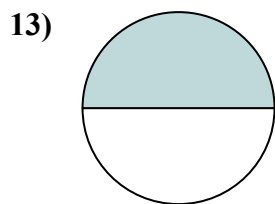
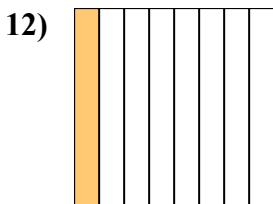
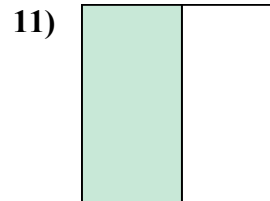
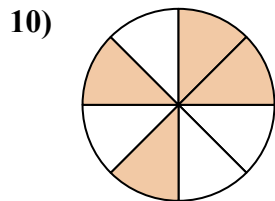
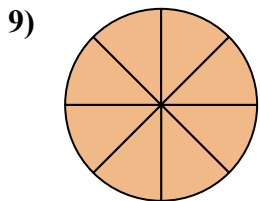
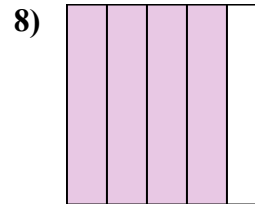
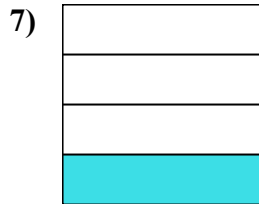
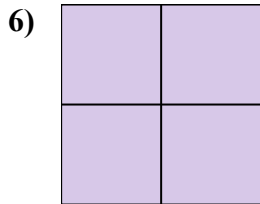
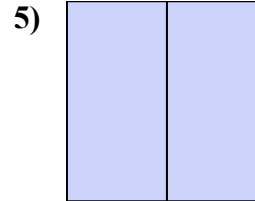
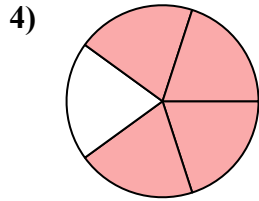
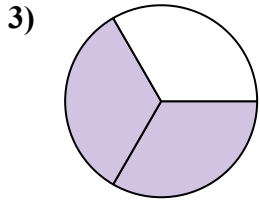
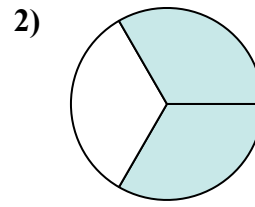
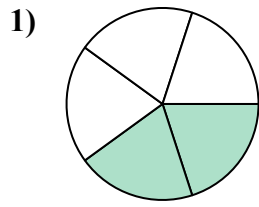
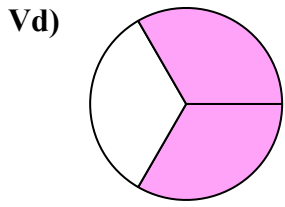
13. _____

14. _____



Viết số tiền được tô bóng dưới dạng phân số.

Câu trả lời



Vd. $\frac{2}{3}$

1. $\frac{2}{5}$

2. $\frac{2}{3}$

3. $\frac{2}{3}$

4. $\frac{4}{5}$

5. $\frac{2}{2}$

6. $\frac{4}{4}$

7. $\frac{1}{4}$

8. $\frac{4}{5}$

9. $\frac{8}{8}$

10. $\frac{4}{8}$

11. $\frac{1}{2}$

12. $\frac{1}{8}$

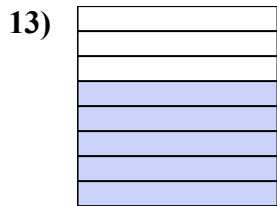
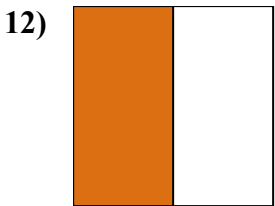
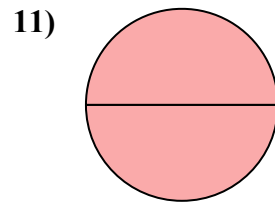
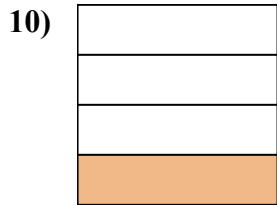

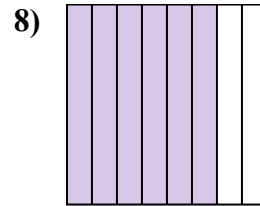
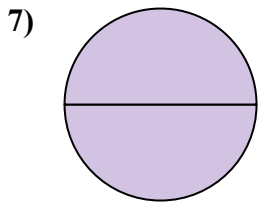
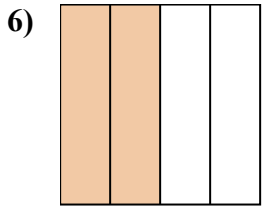
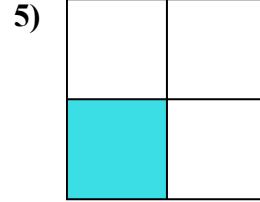

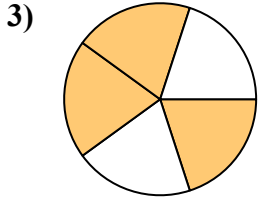
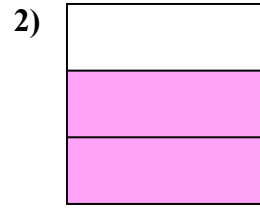
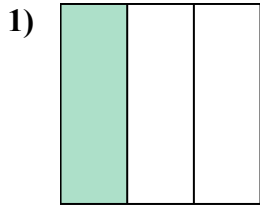
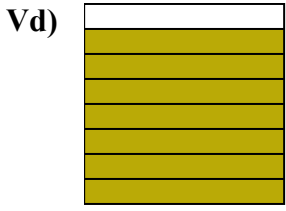
13. $\frac{1}{2}$

14. $\frac{3}{4}$



Viết số tiền được tô bóng dưới dạng phân số.

Câu trả lời



Vd. $\frac{7}{8}$

1. _____

2. _____

3. _____

4. _____

5. _____

6. _____

7. _____

8. _____

9. _____

10. _____

11. _____

12. _____

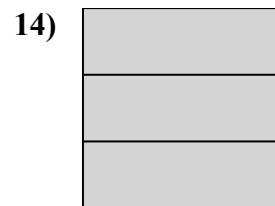

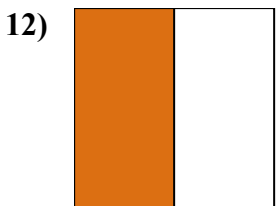
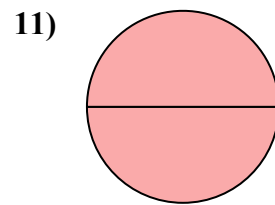
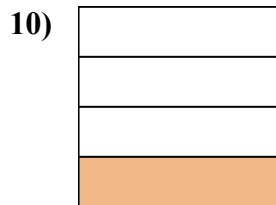

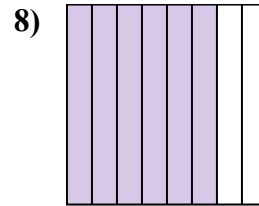
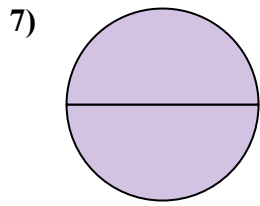
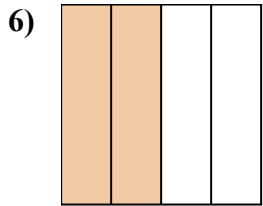
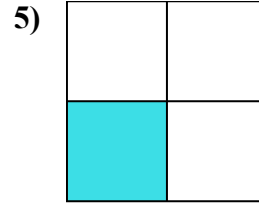
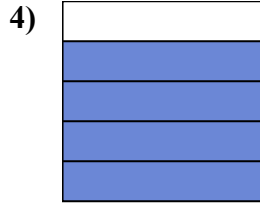
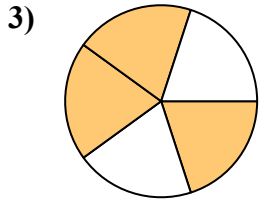
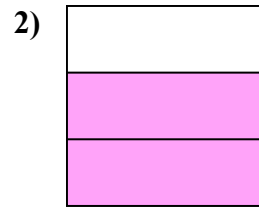
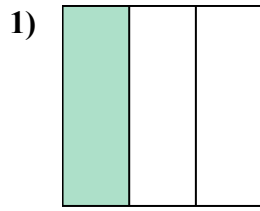
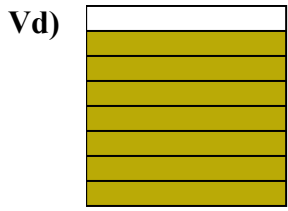
13. _____

14. _____



Viết số tiền được tô bóng dưới dạng phân số.

Câu trả lời



Vd. $\frac{7}{8}$

1. $\frac{1}{3}$

2. $\frac{2}{3}$

3. $\frac{3}{5}$

4. $\frac{4}{5}$

5. $\frac{1}{4}$

6. $\frac{2}{4}$

7. $\frac{2}{2}$

8. $\frac{6}{8}$

9. $\frac{4}{5}$

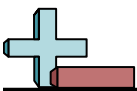
10. $\frac{1}{4}$

11. $\frac{2}{2}$

12. $\frac{1}{2}$

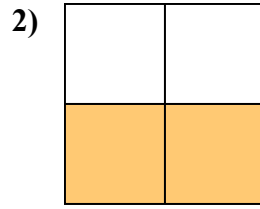
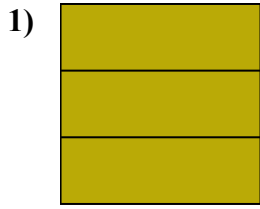
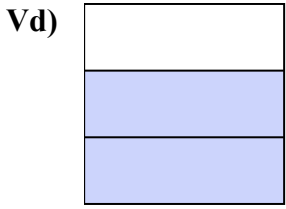
13. $\frac{5}{8}$

14. $\frac{3}{3}$

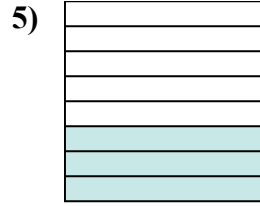
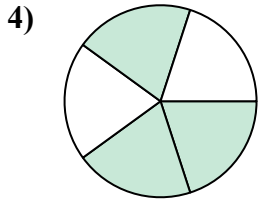
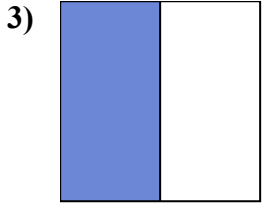


Viết số tiền được tô bóng dưới dạng phân số.

Câu trả lời



Vd. $\frac{2}{3}$



1. _____

2. _____

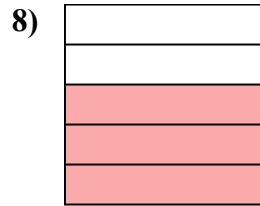
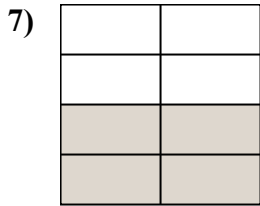
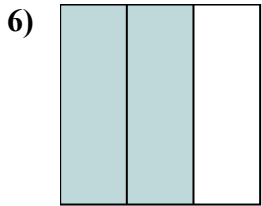
3. _____

4. _____

5. _____

6. _____

7. _____

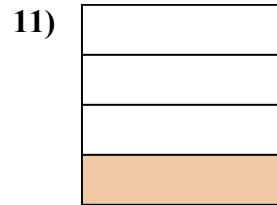
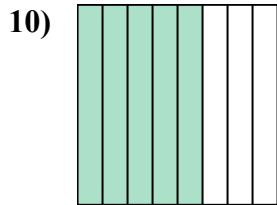
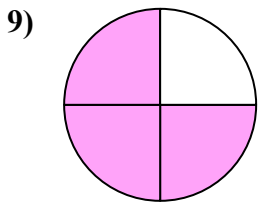


8. _____

9. _____

10. _____

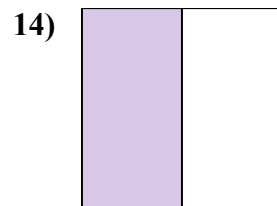
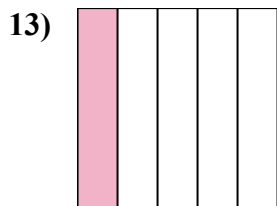

11. _____

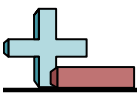


12. _____

13. _____

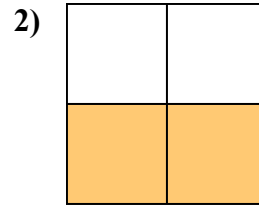
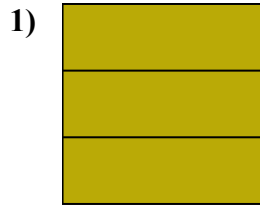
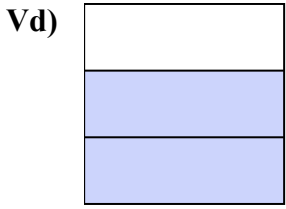
14. _____



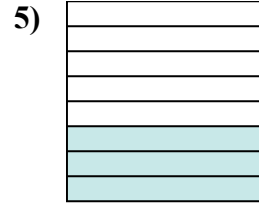
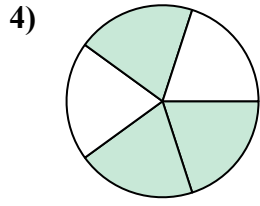
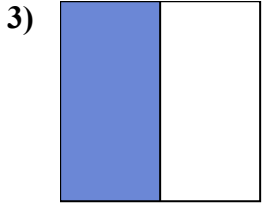


Viết số tiền được tô bóng dưới dạng phân số.

Câu trả lời



Vd. $\frac{2}{3}$



1. $\frac{3}{3}$

2. $\frac{2}{4}$

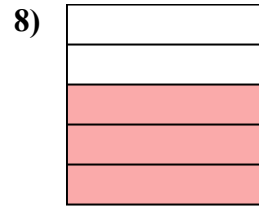
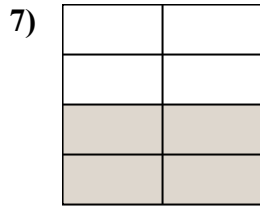
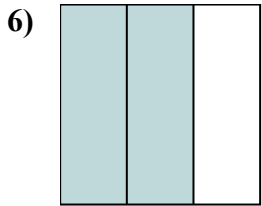
3. $\frac{1}{2}$

4. $\frac{3}{5}$

5. $\frac{3}{8}$

6. $\frac{2}{3}$

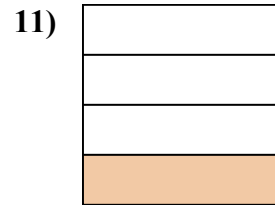
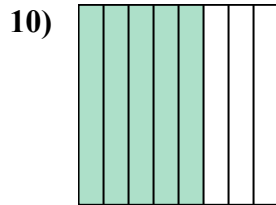
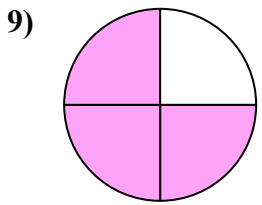
7. $\frac{4}{8}$



8. $\frac{3}{5}$

9. $\frac{3}{4}$

10. $\frac{5}{8}$



11. $\frac{1}{4}$

12. $\frac{2}{2}$

13. $\frac{1}{5}$

14. $\frac{1}{2}$

