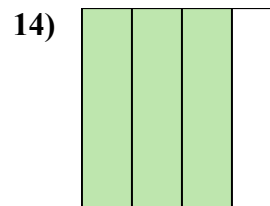
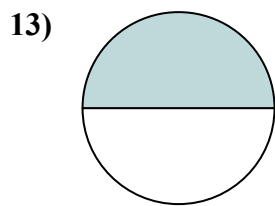
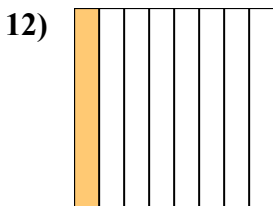
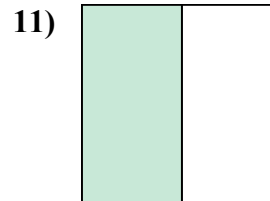
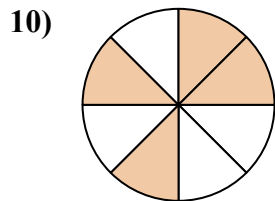
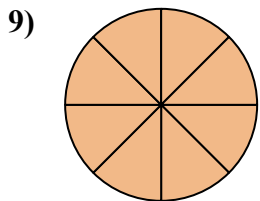
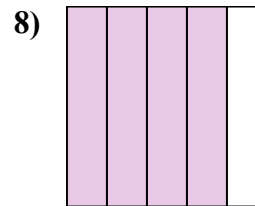
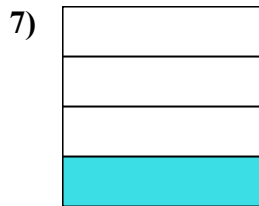
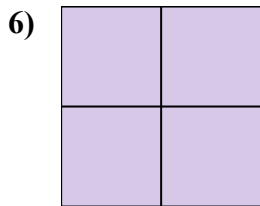
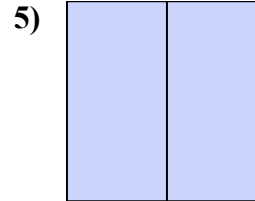
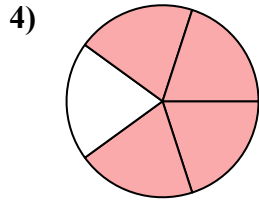
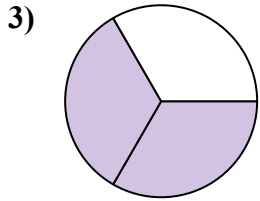
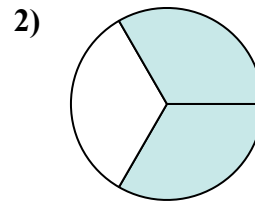
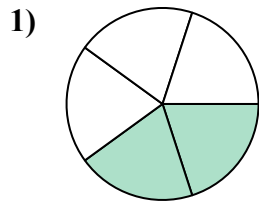
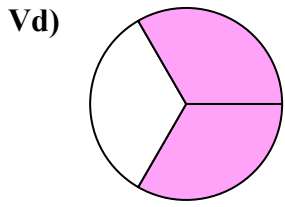




Viết số tiền được tô bóng dưới dạng phân số.



**Câu trả lời**

Vd.  $\frac{2}{3}$

1. \_\_\_\_\_

2. \_\_\_\_\_

3. \_\_\_\_\_

4. \_\_\_\_\_

5. \_\_\_\_\_

6. \_\_\_\_\_

7. \_\_\_\_\_

8. \_\_\_\_\_

9. \_\_\_\_\_

10. \_\_\_\_\_

11. \_\_\_\_\_

12. \_\_\_\_\_

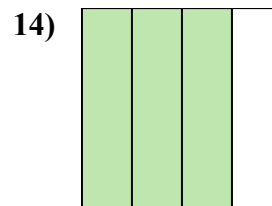
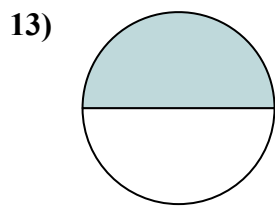
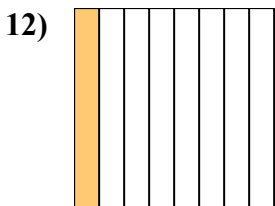
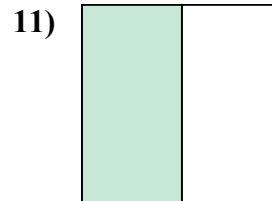
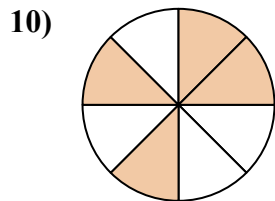
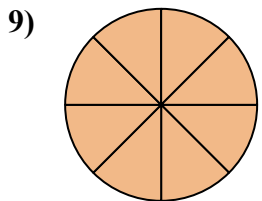
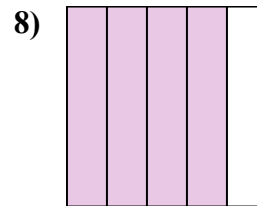
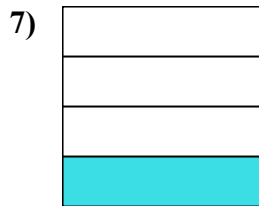
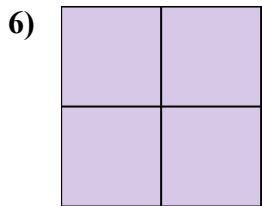
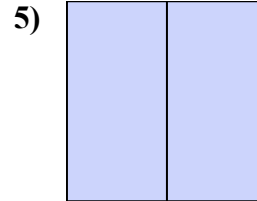
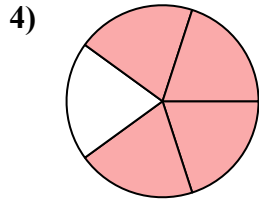
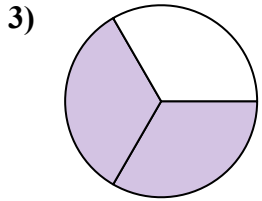
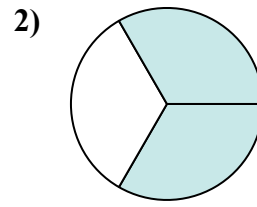
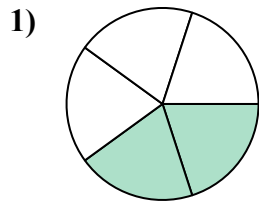
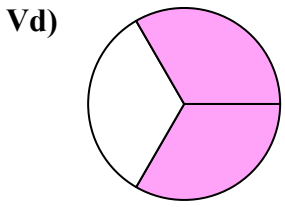
13. \_\_\_\_\_

14. \_\_\_\_\_



Viết số tiền được tô bóng dưới dạng phân số.

**Câu trả lời**



Vd. 2/3

1. 2/5

2. 2/3

3. 2/3

4. 4/5

5. 2/2

6. 4/4

7. 1/4

8. 4/5

9. 8/8

10. 4/8

11. 1/2

12. 1/8

13. 1/2

14. 3/4