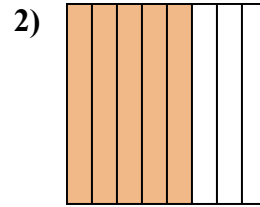
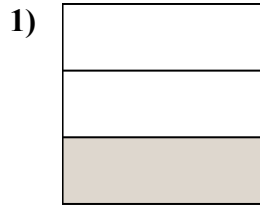
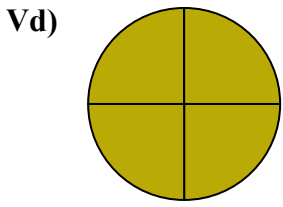


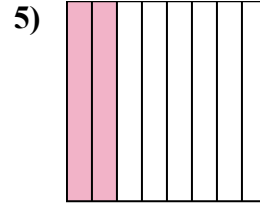
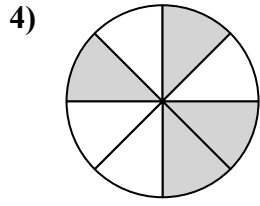
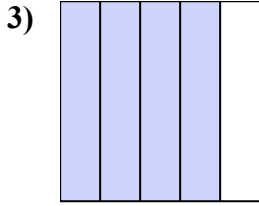


Viết số tiền được tô bóng dưới dạng phân số.

**Câu trả lời**



Vd.  $\frac{4}{4}$



1. \_\_\_\_\_

2. \_\_\_\_\_

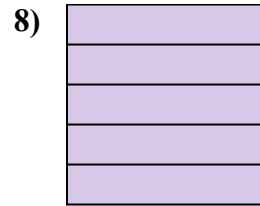
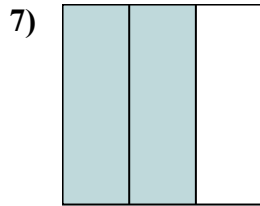
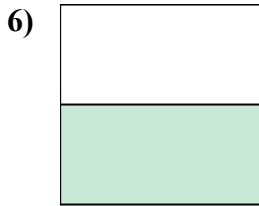
3. \_\_\_\_\_

4. \_\_\_\_\_

5. \_\_\_\_\_

6. \_\_\_\_\_

7. \_\_\_\_\_

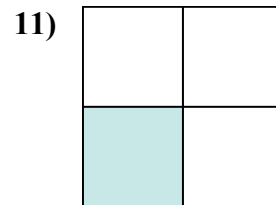
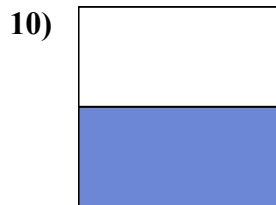
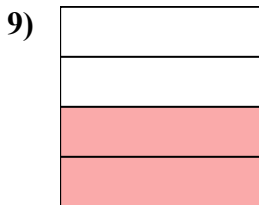


8. \_\_\_\_\_

9. \_\_\_\_\_

10. \_\_\_\_\_

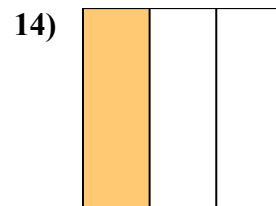
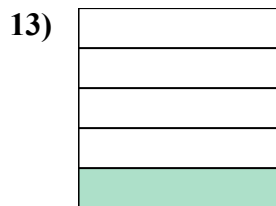
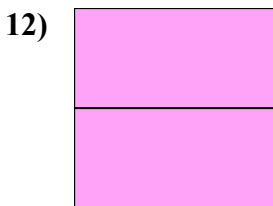
11. \_\_\_\_\_



12. \_\_\_\_\_

13. \_\_\_\_\_

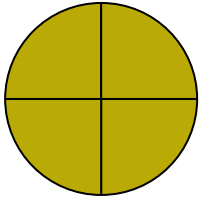
14. \_\_\_\_\_






Viết số tiền được tô bóng dưới dạng phân số.

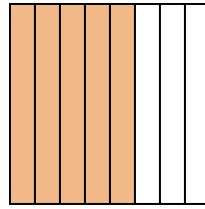
Vd)



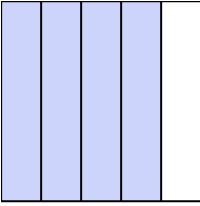
1)



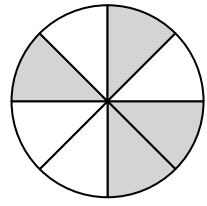
2)



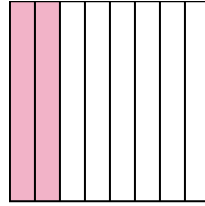
3)



4)



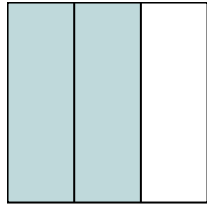
5)



6)




7)




8)



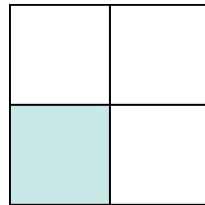
9)




10)



11)



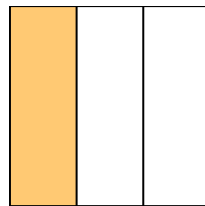
12)



13)



14)



**Câu trả lời**

Vd.  $\frac{4}{4}$

1.  $\frac{1}{3}$

2.  $\frac{5}{8}$

3.  $\frac{4}{5}$

4.  $\frac{4}{8}$

5.  $\frac{2}{8}$

6.  $\frac{1}{2}$

7.  $\frac{2}{3}$

8.  $\frac{5}{5}$

9.  $\frac{2}{4}$

10.  $\frac{1}{2}$

11.  $\frac{1}{4}$

12.  $\frac{2}{2}$

13.  $\frac{1}{5}$

14.  $\frac{1}{3}$