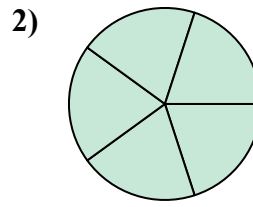
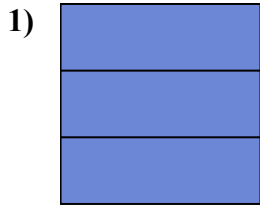
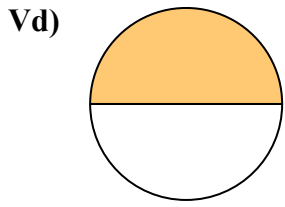


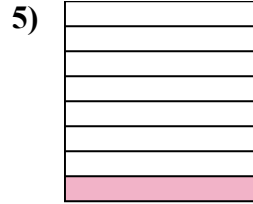
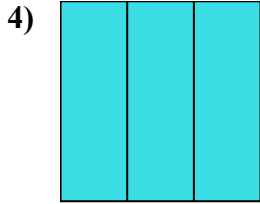
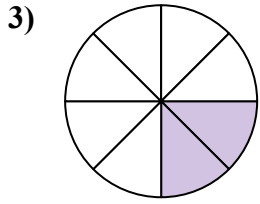


Viết số tiền được tô bóng dưới dạng phân số.

Câu trả lời



Vd. $\frac{1}{2}$



1. _____

2. _____

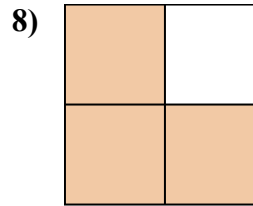
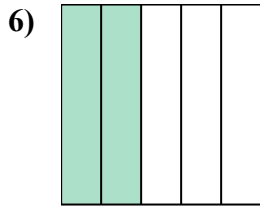
3. _____

4. _____

5. _____

6. _____

7. _____

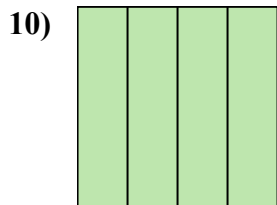
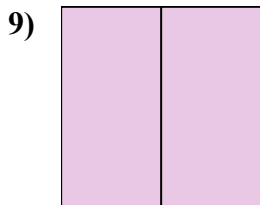


8. _____

9. _____

10. _____

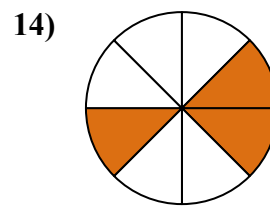
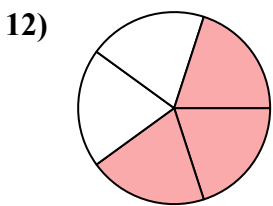
11. _____



12. _____

13. _____

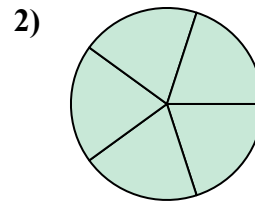
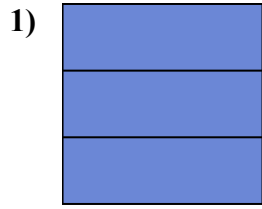
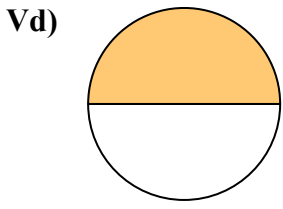
14. _____





Viết số tiền được tô bóng dưới dạng phân số.

Câu trả lời

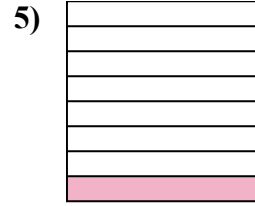
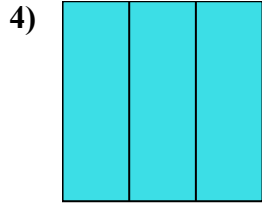
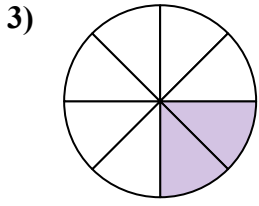


Vd. $\frac{1}{2}$

1. $\frac{3}{3}$

2. $\frac{5}{5}$

3. $\frac{2}{8}$

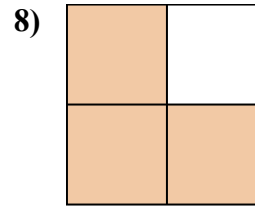
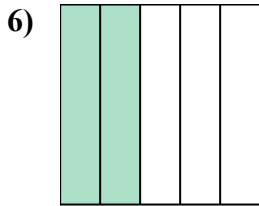


4. $\frac{3}{3}$

5. $\frac{1}{8}$

6. $\frac{2}{5}$

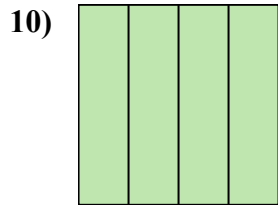
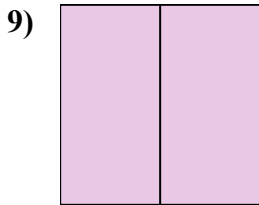
7. $\frac{4}{4}$



8. $\frac{3}{4}$

9. $\frac{2}{2}$

10. $\frac{4}{4}$



11. $\frac{3}{3}$

12. $\frac{3}{5}$

13. $\frac{1}{2}$

14. $\frac{3}{8}$

