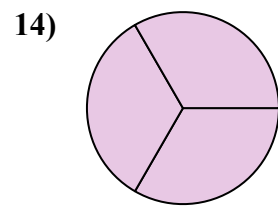
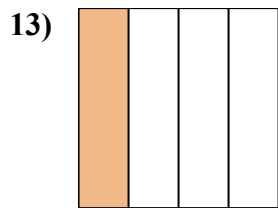
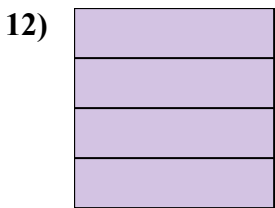
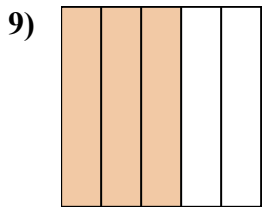
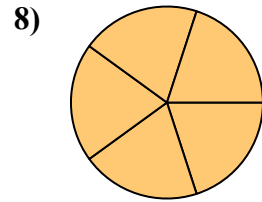
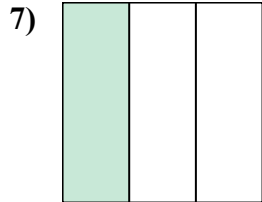
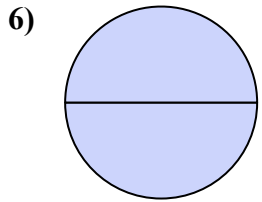
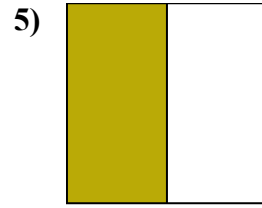
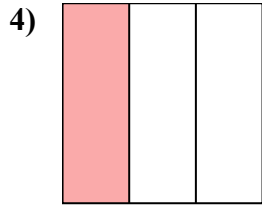
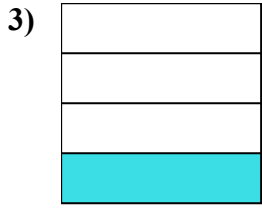
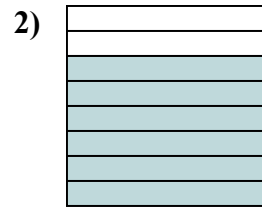
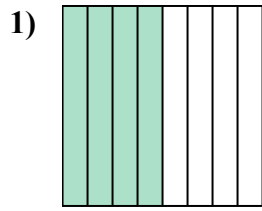
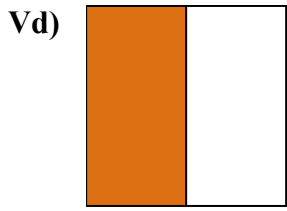




Viết số tiền được tô bóng dưới dạng phân số.



Câu trả lời

Vd. $\frac{1}{2}$

1. _____

2. _____

3. _____

4. _____

5. _____

6. _____

7. _____

8. _____

9. _____

10. _____

11. _____

12. _____

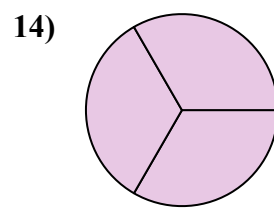
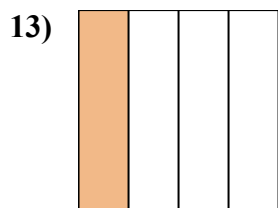
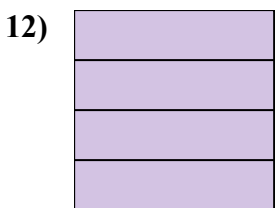
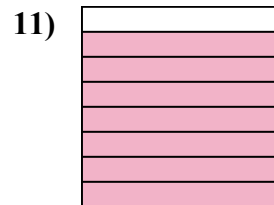
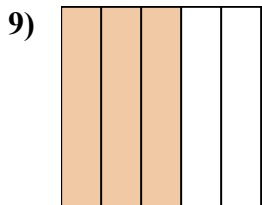
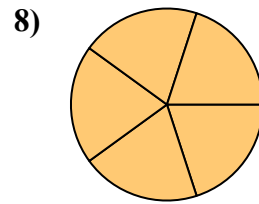
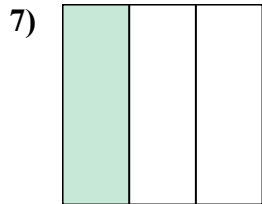
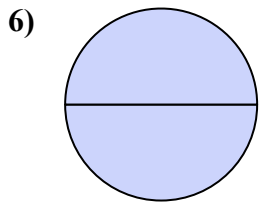
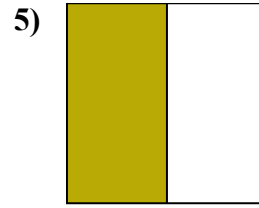
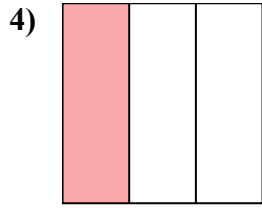
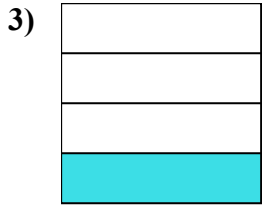
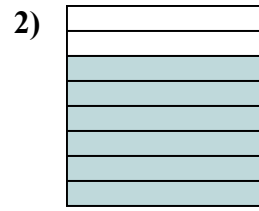
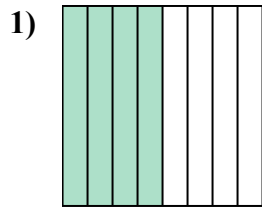
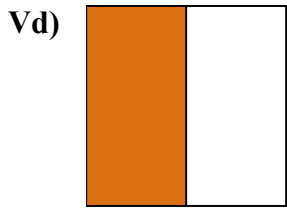
13. _____

14. _____



Viết số tiền được tô bóng dưới dạng phân số.

Câu trả lời



Vd. $\frac{1}{2}$

1. $\frac{4}{8}$

2. $\frac{6}{8}$

3. $\frac{1}{4}$

4. $\frac{1}{3}$

5. $\frac{1}{2}$

6. $\frac{2}{2}$

7. $\frac{1}{3}$

8. $\frac{5}{5}$

9. $\frac{3}{5}$

10. $\frac{3}{5}$

11. $\frac{7}{8}$

12. $\frac{4}{4}$

13. $\frac{1}{4}$

14. $\frac{3}{3}$