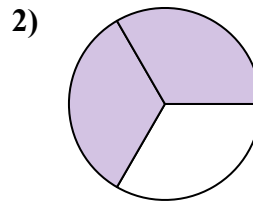
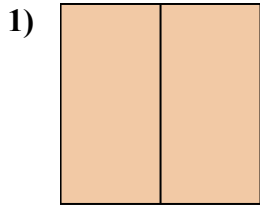
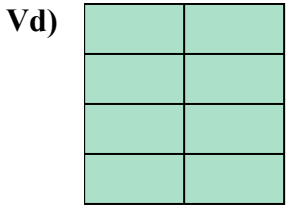


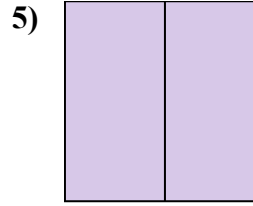
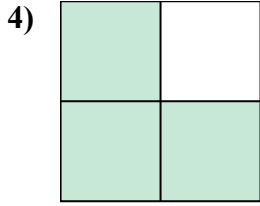
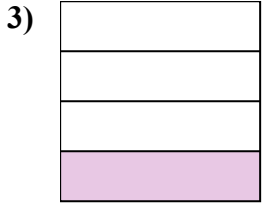


Viết số tiền được tô bóng dưới dạng phân số.

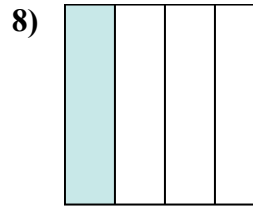
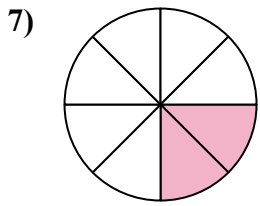
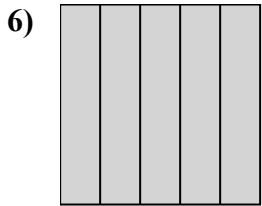
**Câu trả lời**



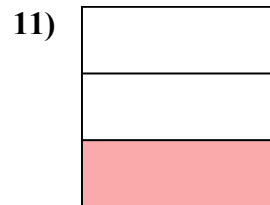
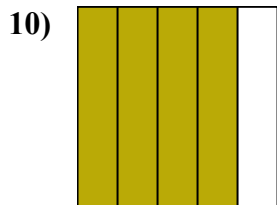
Vd.  $\frac{8}{8}$



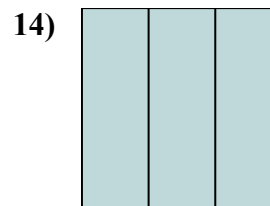
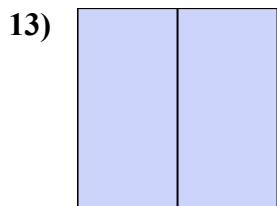
1. \_\_\_\_\_  
2. \_\_\_\_\_



3. \_\_\_\_\_  
4. \_\_\_\_\_



5. \_\_\_\_\_  
6. \_\_\_\_\_



7. \_\_\_\_\_  
8. \_\_\_\_\_

9. \_\_\_\_\_  
10. \_\_\_\_\_

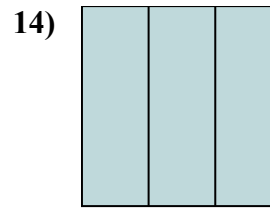
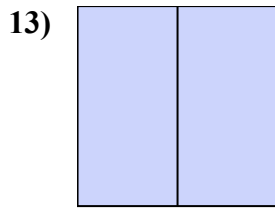
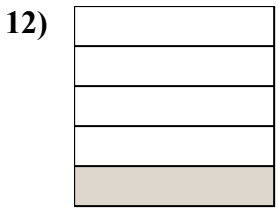
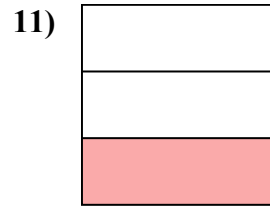
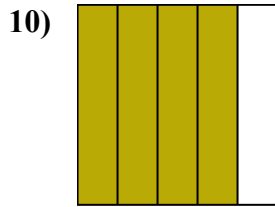
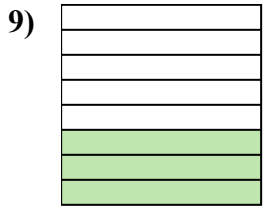
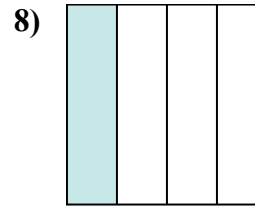
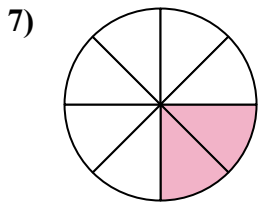
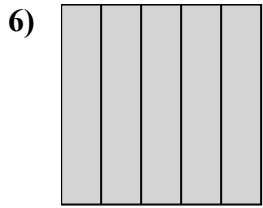
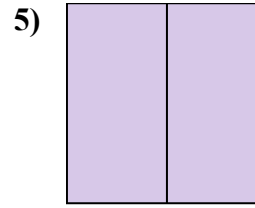
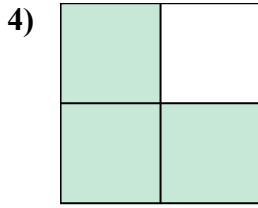
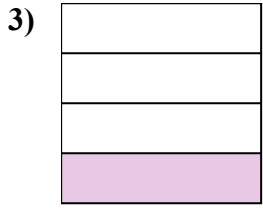
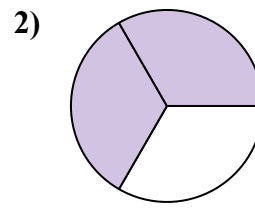
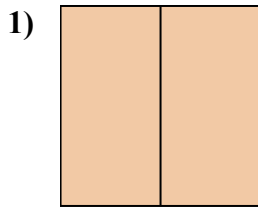
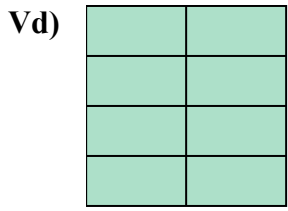
11. \_\_\_\_\_  
12. \_\_\_\_\_

13. \_\_\_\_\_  
14. \_\_\_\_\_



Viết số tiền được tô bóng dưới dạng phân số.

**Câu trả lời**



Vd.  $\frac{8}{8}$

1.  $\frac{2}{2}$

2.  $\frac{2}{3}$

3.  $\frac{1}{4}$

4.  $\frac{3}{4}$

5.  $\frac{2}{2}$

6.  $\frac{5}{5}$

7.  $\frac{2}{8}$

8.  $\frac{1}{4}$

9.  $\frac{3}{8}$

10.  $\frac{4}{5}$

11.  $\frac{1}{3}$

12.  $\frac{1}{5}$

13.  $\frac{2}{2}$

14.  $\frac{3}{3}$