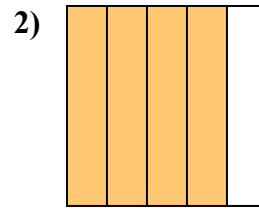
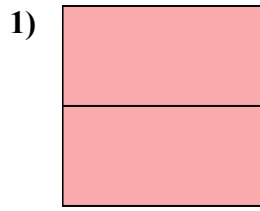
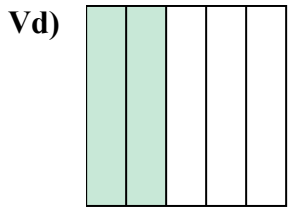


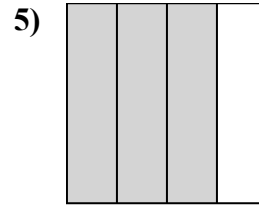
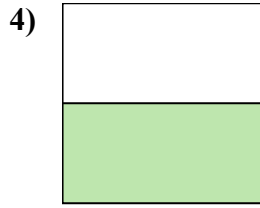
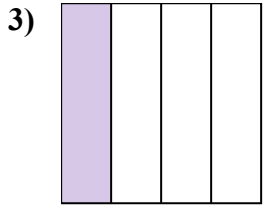


Viết số tiền được tô bóng dưới dạng phân số.

Câu trả lời



Vd. $\frac{2}{5}$



1. _____

2. _____

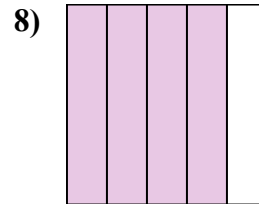
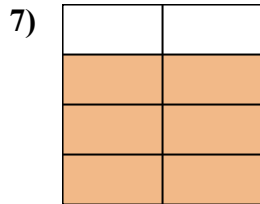
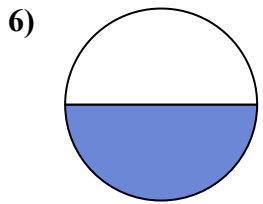
3. _____

4. _____

5. _____

6. _____

7. _____

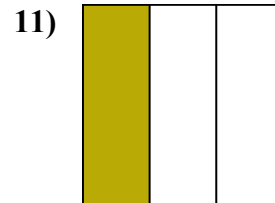
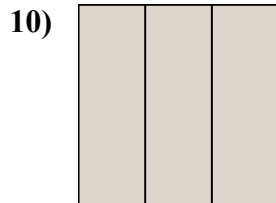
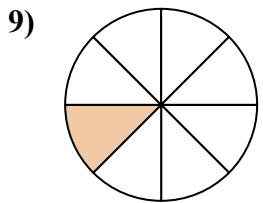


8. _____

9. _____

10. _____

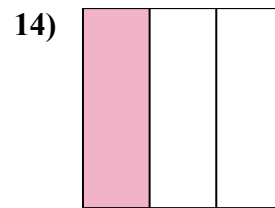
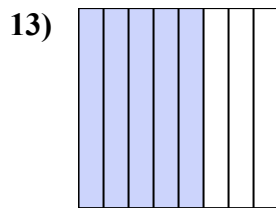
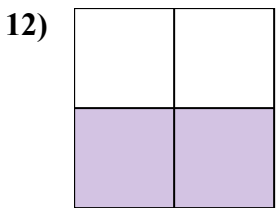
11. _____



12. _____

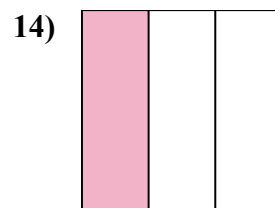
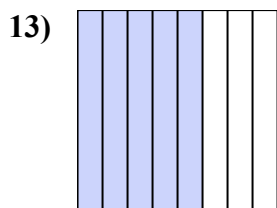
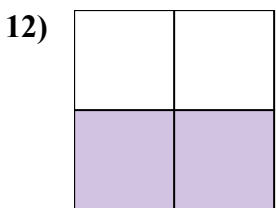
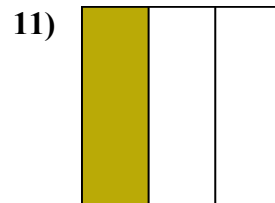
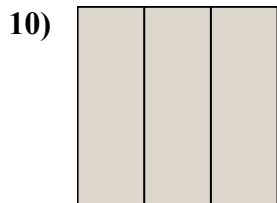
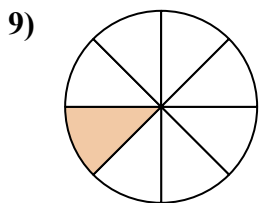
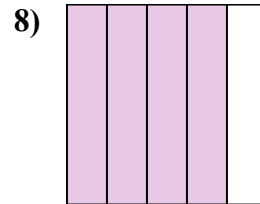
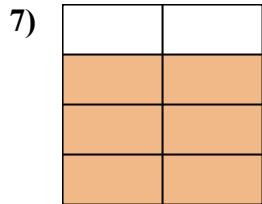
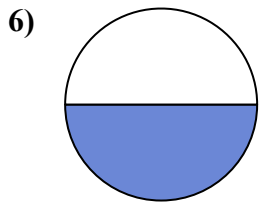
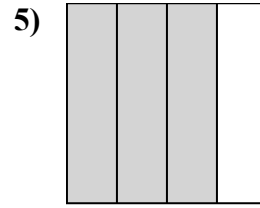
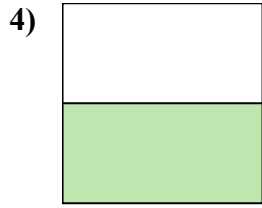
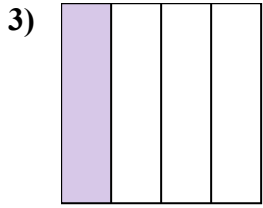
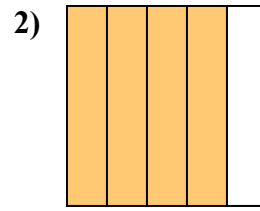
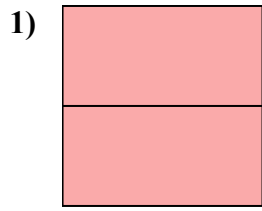
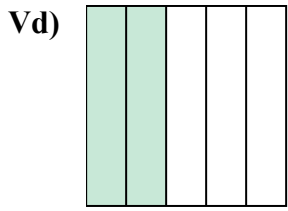
13. _____

14. _____





Viết số tiền được tô bóng dưới dạng phân số.



Câu trả lời

Vd. $\frac{2}{5}$

1. $\frac{2}{2}$

2. $\frac{4}{5}$

3. $\frac{1}{4}$

4. $\frac{1}{2}$

5. $\frac{3}{4}$

6. $\frac{1}{2}$

7. $\frac{6}{8}$

8. $\frac{4}{5}$

9. $\frac{1}{8}$

10. $\frac{3}{3}$

11. $\frac{1}{3}$

12. $\frac{2}{4}$

13. $\frac{5}{8}$

14. $\frac{1}{3}$