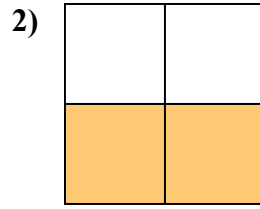
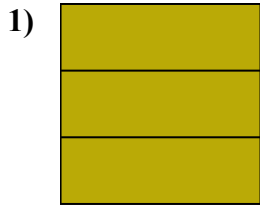
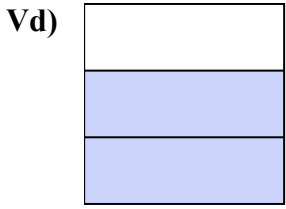


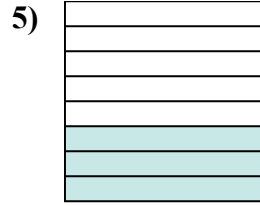
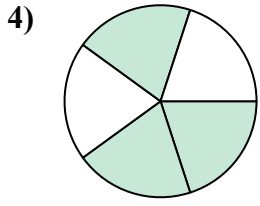
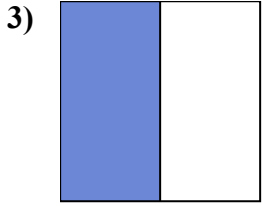


Viết số tiền được tô bóng dưới dạng phân số.

Câu trả lời



Vd. $\frac{2}{3}$



1. _____

2. _____

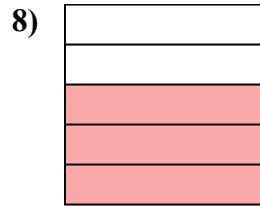
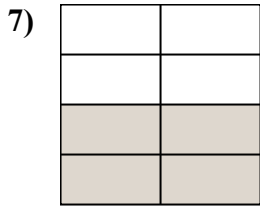
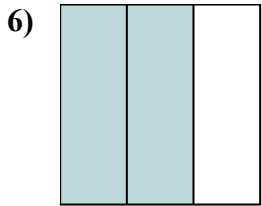
3. _____

4. _____

5. _____

6. _____

7. _____

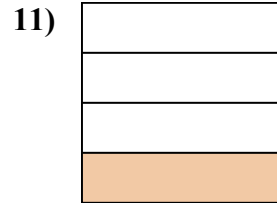
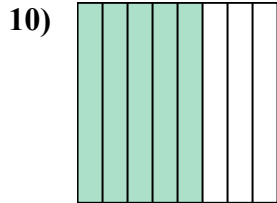
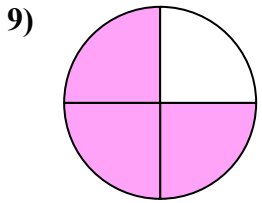


8. _____

9. _____

10. _____

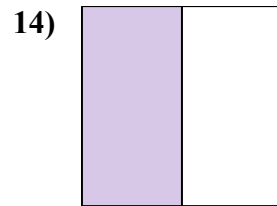
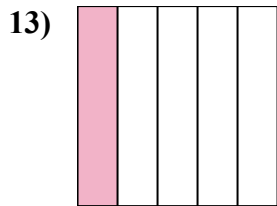
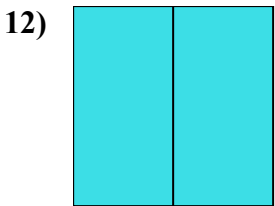
11. _____



12. _____

13. _____

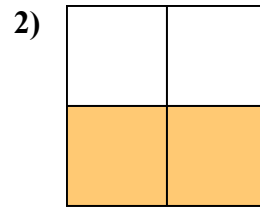
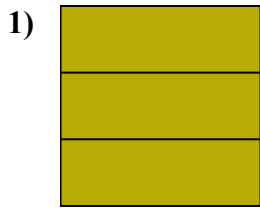
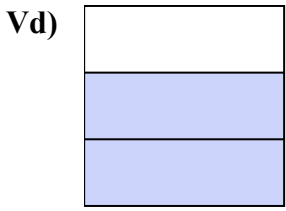
14. _____



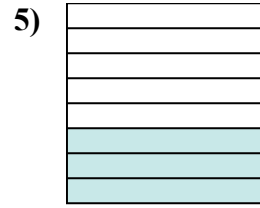
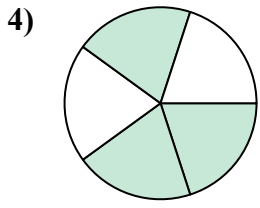
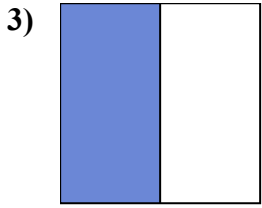


Viết số tiền được tô bóng dưới dạng phân số.

Câu trả lời



Vd. $\frac{2}{3}$



1. $\frac{3}{3}$

2. $\frac{2}{4}$

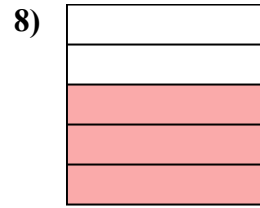
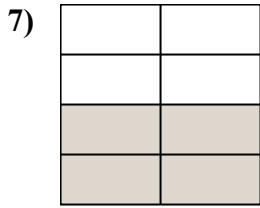
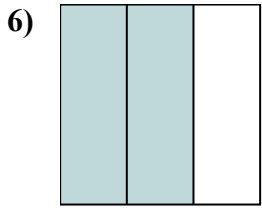
3. $\frac{1}{2}$

4. $\frac{3}{5}$

5. $\frac{3}{8}$

6. $\frac{2}{3}$

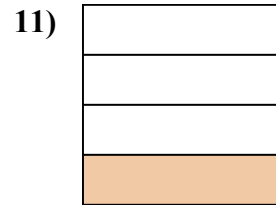
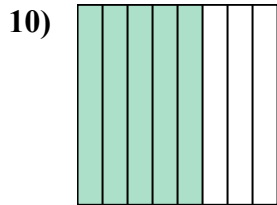
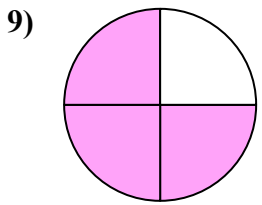
7. $\frac{4}{8}$



8. $\frac{3}{5}$

9. $\frac{3}{4}$

10. $\frac{5}{8}$



11. $\frac{1}{4}$

12. $\frac{2}{2}$

13. $\frac{1}{5}$

14. $\frac{1}{2}$

