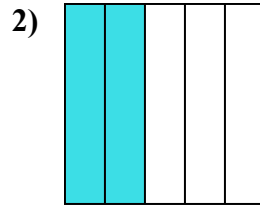
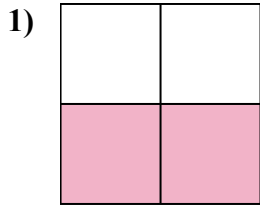
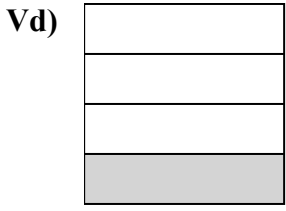


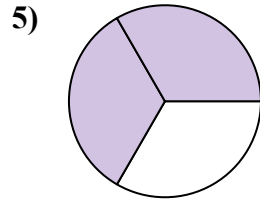
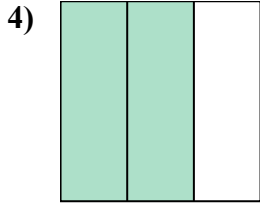
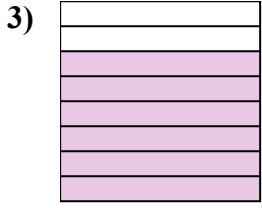


Viết số tiền được tô bóng dưới dạng phân số.

Câu trả lời



Vd. $\frac{1}{4}$



1. _____

2. _____

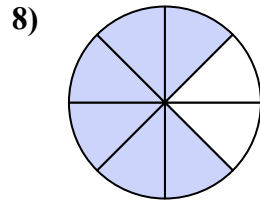
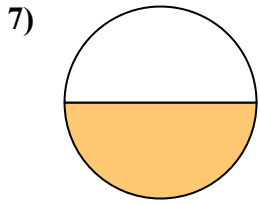
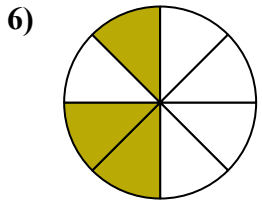
3. _____

4. _____

5. _____

6. _____

7. _____

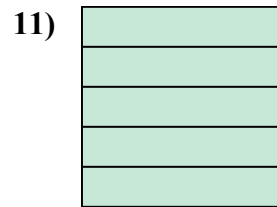
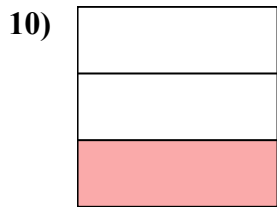
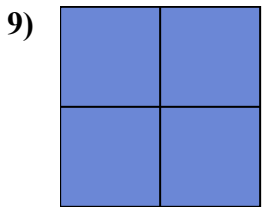


8. _____

9. _____

10. _____

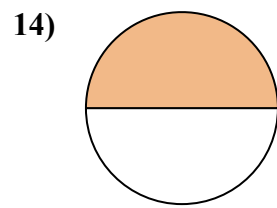
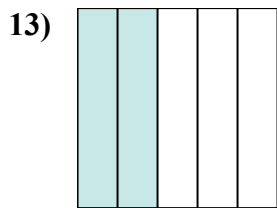
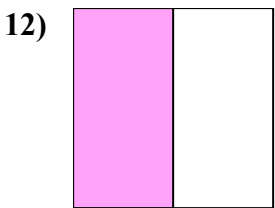
11. _____



12. _____

13. _____

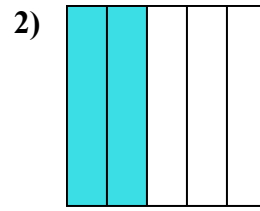
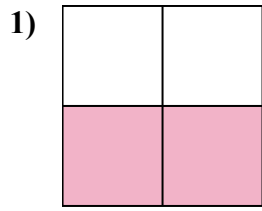
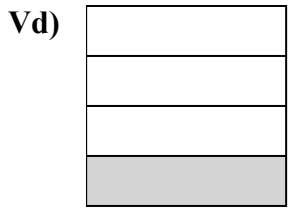
14. _____



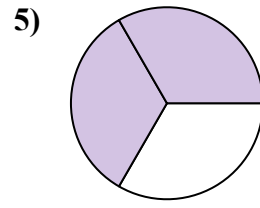
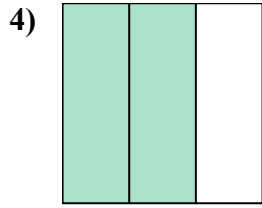


Viết số tiền được tô bóng dưới dạng phân số.

Câu trả lời



Vd. $\frac{1}{4}$



1. $\frac{2}{4}$

2. $\frac{2}{5}$

3. $\frac{6}{8}$

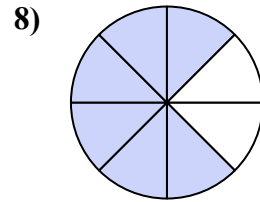
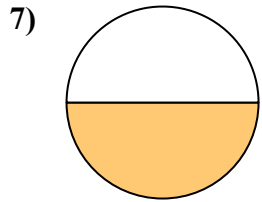
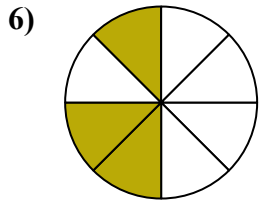
4. $\frac{2}{3}$

5. $\frac{2}{3}$

6. $\frac{3}{8}$

7. $\frac{1}{2}$


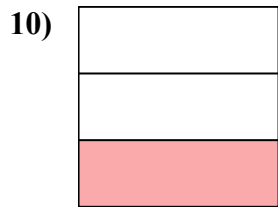
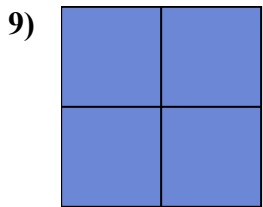
8. $\frac{6}{8}$



9. $\frac{4}{4}$

10. $\frac{1}{3}$

11. $\frac{5}{5}$



12. $\frac{1}{2}$

13. $\frac{2}{5}$

14. $\frac{1}{2}$

