




**Sử dụng đồ thị ảnh để giải từng bài toán**

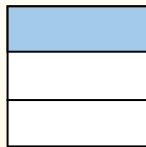
**Câu trả lời**

$\frac{1}{3} \div 4 = ?$



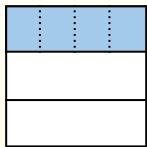
Para resolverlo, comience con un todo.

Divida el conjunto en 3 piezas y complete 1 sección.



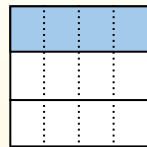
Ahora puedes ver el tamaño de  $\frac{1}{3}$

Em seguida, divida a  $\frac{1}{3}$  em 4 grupos.



Esto muestra el tamaño de cada pieza.

Para calcular el tamaño de cada pieza en comparación con el conjunto, divida el conjunto en 4 grupos.




Each piece is  $\frac{1}{12}$  of the whole.


Or:

$\frac{1}{3} \div 4 = \frac{1}{12}$


1)  $\frac{1}{3} : 3 =$




2)  $\frac{1}{6} : 7 =$




3)  $\frac{1}{8} : 6 =$




4)  $\frac{1}{4} : 4 =$



5)  $\frac{1}{6} : 5 =$




6)  $\frac{1}{2} : 4 =$



7)  $\frac{1}{2} : 3 =$




8)  $\frac{1}{9} : 4 =$




9)  $\frac{1}{9} : 3 =$




10)  $\frac{1}{3} : 2 =$



11)  $\frac{1}{3} : 5 =$



12)  $\frac{1}{8} : 9 =$



1. \_\_\_\_\_
2. \_\_\_\_\_
3. \_\_\_\_\_
4. \_\_\_\_\_
5. \_\_\_\_\_
6. \_\_\_\_\_
7. \_\_\_\_\_
8. \_\_\_\_\_
9. \_\_\_\_\_
10. \_\_\_\_\_
11. \_\_\_\_\_
12. \_\_\_\_\_



Sử dụng đồ thị ảnh để giải từng bài toán

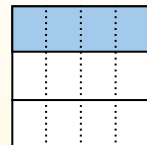
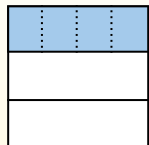
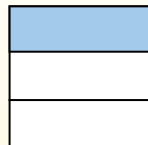
Câu trả lời

$\frac{1}{3} \div 4 = ?$

Divida el conjunto en 3 piezas y complete 1 sección.

Em seguida, divide a  $\frac{1}{3}$  em 4 grupos.

Para calcular el tamaño de cada pieza en comparación con el conjunto, divide el conjunto en 4 grupos.



Para resolverlo, comience con un todo.

Ahora puedes ver el tamaño de  $\frac{1}{3}$

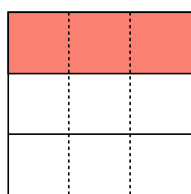
Esto muestra el tamaño de cada pieza.

Each piece is  $\frac{1}{12}$  of the whole.

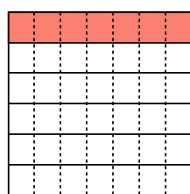
Or:

$\frac{1}{3} \div 4 = \frac{1}{12}$

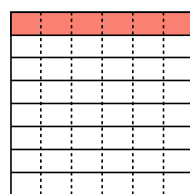
1)  $\frac{1}{3} : 3 =$



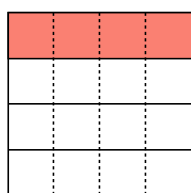
2)  $\frac{1}{6} : 7 =$



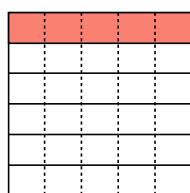
3)  $\frac{1}{8} : 6 =$



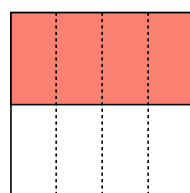
4)  $\frac{1}{4} : 4 =$



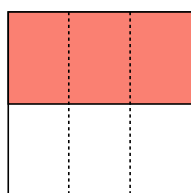
5)  $\frac{1}{6} : 5 =$



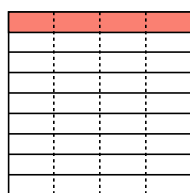
6)  $\frac{1}{2} : 4 =$



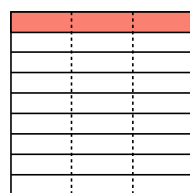
7)  $\frac{1}{2} : 3 =$



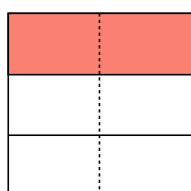
8)  $\frac{1}{9} : 4 =$



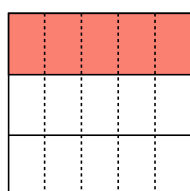
9)  $\frac{1}{9} : 3 =$



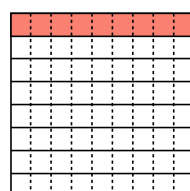
10)  $\frac{1}{3} : 2 =$



11)  $\frac{1}{3} : 5 =$



12)  $\frac{1}{8} : 9 =$



1.  $\frac{1}{9}$
2.  $\frac{1}{42}$
3.  $\frac{1}{48}$
4.  $\frac{1}{16}$
5.  $\frac{1}{30}$
6.  $\frac{1}{8}$
7.  $\frac{1}{6}$
8.  $\frac{1}{36}$
9.  $\frac{1}{27}$
10.  $\frac{1}{6}$
11.  $\frac{1}{15}$
12.  $\frac{1}{72}$