




Sử dụng đồ thị ảnh để giải từng bài toán

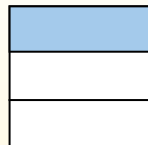
Câu trả lời

$\frac{1}{3} \div 4 = ?$



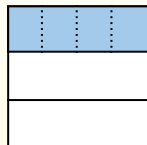
Para resolverlo, comience con un todo.

Divida el conjunto en 3 piezas y complete 1 sección.



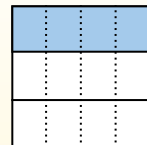
Ahora puedes ver el tamaño de $\frac{1}{3}$

Em seguida, divida a $\frac{1}{3}$ em 4 grupos.



Esto muestra el tamaño de cada pieza.

Para calcular el tamaño de cada pieza en comparación con el conjunto, divida el conjunto en 4 grupos.




Each piece is $\frac{1}{12}$ of the whole.


Or:

$\frac{1}{3} \div 4 = \frac{1}{12}$


1) $\frac{1}{7} : 3 =$




2) $\frac{1}{3} : 6 =$




3) $\frac{1}{6} : 2 =$




4) $\frac{1}{8} : 3 =$



5) $\frac{1}{8} : 2 =$



6) $\frac{1}{4} : 4 =$




7) $\frac{1}{7} : 9 =$




8) $\frac{1}{3} : 9 =$




9) $\frac{1}{2} : 8 =$




10) $\frac{1}{4} : 8 =$



11) $\frac{1}{7} : 2 =$



12) $\frac{1}{2} : 6 =$



1. _____
2. _____
3. _____
4. _____
5. _____
6. _____
7. _____
8. _____
9. _____
10. _____
11. _____
12. _____



Sử dụng đồ thị ảnh để giải từng bài toán

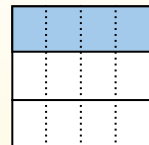
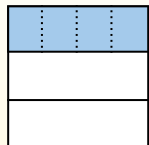
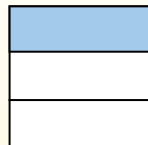
Câu trả lời

$\frac{1}{3} \div 4 = ?$

Divida el conjunto en 3 piezas y complete 1 sección.

Em seguida, divide a $\frac{1}{3}$ em 4 grupos.

Para calcular el tamaño de cada pieza en comparación con el conjunto, divide el conjunto en 4 grupos.



Para resolverlo, comience con un todo.

Ahora puedes ver el tamaño de $\frac{1}{3}$

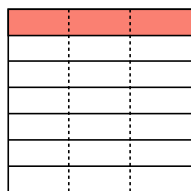
Esto muestra el tamaño de cada pieza.

Each piece is $\frac{1}{12}$ of the whole.

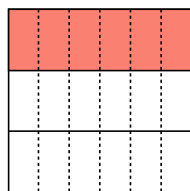
Or:

$\frac{1}{3} \div 4 = \frac{1}{12}$

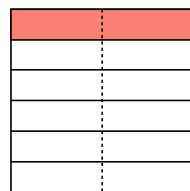
1) $\frac{1}{7} : 3 =$



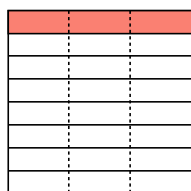
2) $\frac{1}{3} : 6 =$



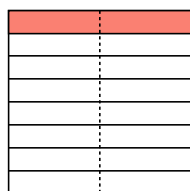
3) $\frac{1}{6} : 2 =$



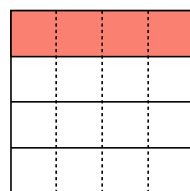
4) $\frac{1}{8} : 3 =$



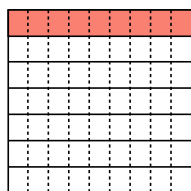
5) $\frac{1}{8} : 2 =$



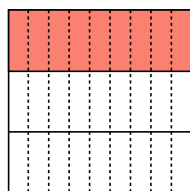
6) $\frac{1}{4} : 4 =$



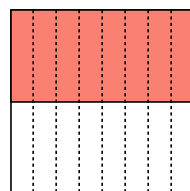
7) $\frac{1}{7} : 9 =$



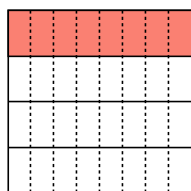
8) $\frac{1}{3} : 9 =$



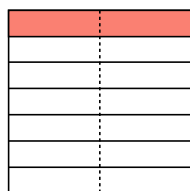
9) $\frac{1}{2} : 8 =$



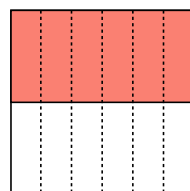
10) $\frac{1}{4} : 8 =$



11) $\frac{1}{7} : 2 =$



12) $\frac{1}{2} : 6 =$



1. $\frac{1}{21}$
2. $\frac{1}{18}$
3. $\frac{1}{12}$
4. $\frac{1}{24}$
5. $\frac{1}{16}$
6. $\frac{1}{16}$
7. $\frac{1}{63}$
8. $\frac{1}{27}$
9. $\frac{1}{16}$
10. $\frac{1}{32}$
11. $\frac{1}{14}$
12. $\frac{1}{12}$