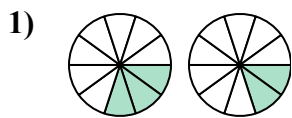




Xác định đáp án nào phù hợp nhất với các phân số trong hình.

Câu trả lời

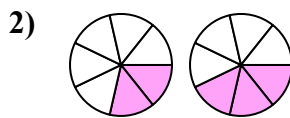


A. $\frac{7}{3} < \frac{8}{2}$

B. $\frac{7}{3} > \frac{8}{2}$

C. $\frac{3}{10} > \frac{2}{10}$

D. $\frac{3}{10} < \frac{2}{10}$

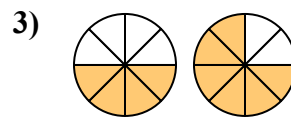


A. $\frac{2}{7} > \frac{3}{7}$

B. $\frac{5}{2} < \frac{4}{3}$

C. $\frac{7}{2} > \frac{7}{3}$

D. $\frac{2}{7} < \frac{3}{7}$

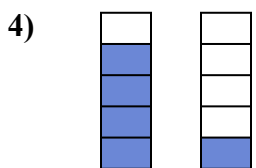


A. $\frac{4}{4} < \frac{2}{6}$

B. $\frac{4}{8} > \frac{6}{8}$

C. $\frac{4}{8} < \frac{6}{8}$

D. $\frac{4}{4} > \frac{2}{6}$

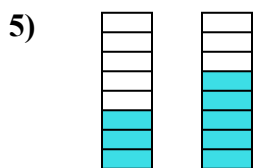


A. $\frac{1}{4} > \frac{4}{1}$

B. $\frac{4}{1} > \frac{1}{4}$

C. $\frac{4}{5} > \frac{1}{5}$

D. $\frac{5}{4} > \frac{5}{1}$



A. $\frac{5}{3} > \frac{3}{5}$

B. $\frac{3}{8} < \frac{5}{8}$

C. $\frac{3}{8} > \frac{5}{8}$

D. $\frac{8}{3} > \frac{8}{5}$

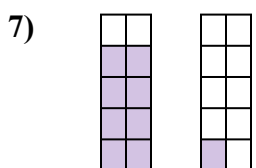


A. $\frac{6}{3} > \frac{6}{2}$

B. $\frac{3}{3} > \frac{4}{2}$

C. $\frac{3}{3} < \frac{2}{4}$

D. $\frac{3}{6} > \frac{2}{6}$

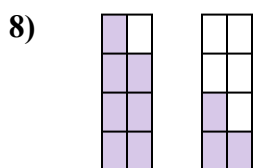


A. $\frac{8}{10} < \frac{1}{10}$

B. $\frac{8}{2} < \frac{1}{9}$

C. $\frac{8}{10} > \frac{1}{10}$

D. $\frac{8}{2} > \frac{1}{9}$

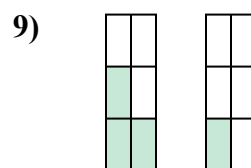


A. $\frac{7}{8} > \frac{3}{8}$

B. $\frac{8}{7} > \frac{8}{3}$

C. $\frac{1}{7} > \frac{5}{3}$

D. $\frac{7}{1} < \frac{3}{5}$



A. $\frac{3}{3} < \frac{1}{5}$

B. $\frac{3}{6} > \frac{1}{6}$

C. $\frac{3}{3} > \frac{5}{1}$

D. $\frac{3}{3} > \frac{1}{5}$

1. _____

2. _____

3. _____

4. _____

5. _____

6. _____

7. _____

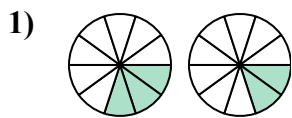
8. _____

9. _____



Xác định đáp án nào phù hợp nhất với các phân số trong hình.

Câu trả lời

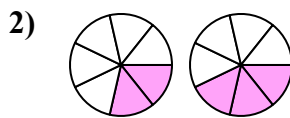


A. $\frac{7}{3} < \frac{8}{2}$

B. $\frac{7}{3} > \frac{8}{2}$

C. $\frac{3}{10} > \frac{2}{10}$

D. $\frac{3}{10} < \frac{2}{10}$

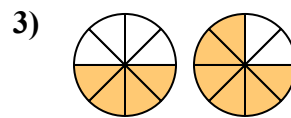


A. $\frac{2}{7} > \frac{3}{7}$

B. $\frac{5}{2} < \frac{4}{3}$

C. $\frac{7}{2} > \frac{7}{3}$

D. $\frac{2}{7} < \frac{3}{7}$

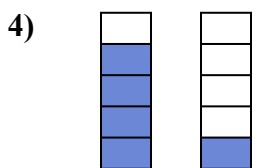


A. $\frac{4}{4} < \frac{2}{6}$

B. $\frac{4}{8} > \frac{6}{8}$

C. $\frac{4}{8} < \frac{6}{8}$

D. $\frac{4}{4} > \frac{2}{6}$

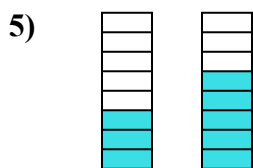


A. $\frac{1}{4} > \frac{4}{1}$

B. $\frac{4}{1} > \frac{1}{4}$

C. $\frac{4}{5} > \frac{1}{5}$

D. $\frac{5}{4} > \frac{5}{1}$



A. $\frac{5}{3} > \frac{3}{5}$

B. $\frac{3}{8} < \frac{5}{8}$

C. $\frac{3}{8} > \frac{5}{8}$

D. $\frac{8}{3} > \frac{8}{5}$

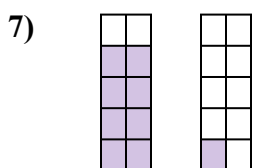


A. $\frac{6}{3} > \frac{6}{2}$

B. $\frac{3}{3} > \frac{4}{2}$

C. $\frac{3}{3} < \frac{2}{4}$

D. $\frac{3}{6} > \frac{2}{6}$

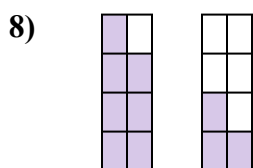


A. $\frac{8}{10} < \frac{1}{10}$

B. $\frac{8}{2} < \frac{1}{9}$

C. $\frac{8}{10} > \frac{1}{10}$

D. $\frac{8}{2} > \frac{1}{9}$

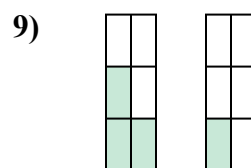


A. $\frac{7}{8} > \frac{3}{8}$

B. $\frac{8}{7} > \frac{8}{3}$

C. $\frac{1}{7} > \frac{5}{3}$

D. $\frac{7}{1} < \frac{3}{5}$



A. $\frac{3}{3} < \frac{1}{5}$

B. $\frac{3}{6} > \frac{1}{6}$

C. $\frac{3}{3} > \frac{5}{1}$

D. $\frac{3}{3} > \frac{1}{5}$

1. **C**2. **D**3. **C**4. **C**5. **B**6. **D**7. **C**8. **A**9. **B**