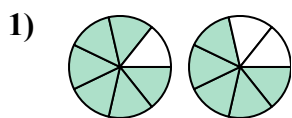




Xác định đáp án nào phù hợp nhất với các phân số trong hình.

Câu trả lời

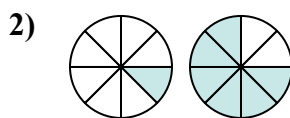


A. $\frac{6}{7} > \frac{5}{7}$

B. $\frac{6}{1} < \frac{5}{2}$

C. $\frac{7}{6} > \frac{7}{5}$

D. $\frac{1}{6} > \frac{2}{5}$

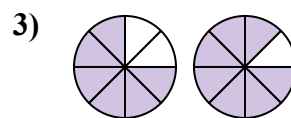


A. $\frac{1}{7} < \frac{6}{2}$

B. $\frac{1}{8} < \frac{6}{8}$

C. $\frac{7}{1} > \frac{2}{6}$

D. $\frac{1}{7} > \frac{6}{2}$

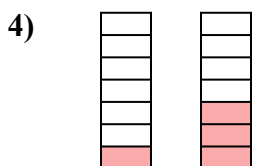


A. $\frac{6}{2} > \frac{7}{1}$

B. $\frac{6}{2} < \frac{7}{1}$

C. $\frac{6}{8} < \frac{7}{8}$

D. $\frac{6}{8} > \frac{7}{8}$

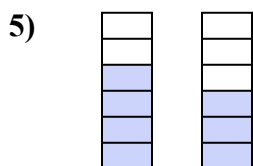


A. $\frac{1}{7} < \frac{3}{7}$

B. $\frac{1}{6} < \frac{3}{4}$

C. $\frac{6}{1} > \frac{4}{3}$

D. $\frac{1}{6} > \frac{3}{4}$

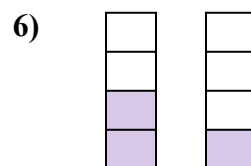


A. $\frac{6}{4} > \frac{6}{3}$

B. $\frac{4}{6} < \frac{3}{6}$

C. $\frac{2}{4} < \frac{3}{3}$

D. $\frac{4}{6} > \frac{3}{6}$

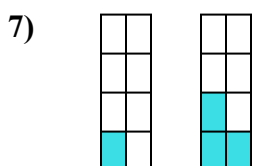


A. $\frac{2}{4} > \frac{1}{4}$

B. $\frac{4}{2} > \frac{4}{1}$

C. $\frac{2}{2} < \frac{1}{3}$

D. $\frac{2}{2} > \frac{3}{1}$

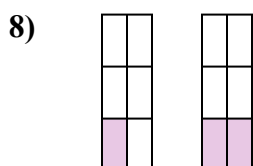


A. $\frac{7}{1} > \frac{5}{3}$

B. $\frac{8}{1} > \frac{8}{3}$

C. $\frac{1}{8} > \frac{3}{8}$

D. $\frac{1}{8} < \frac{3}{8}$

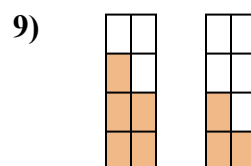


A. $\frac{5}{1} < \frac{4}{2}$

B. $\frac{1}{6} > \frac{2}{6}$

C. $\frac{1}{6} < \frac{2}{6}$

D. $\frac{5}{1} > \frac{4}{2}$



A. $\frac{5}{3} < \frac{3}{5}$

B. $\frac{5}{3} > \frac{3}{5}$

C. $\frac{5}{8} > \frac{3}{8}$

D. $\frac{3}{5} < \frac{5}{3}$

1. _____

2. _____

3. _____

4. _____

5. _____

6. _____

7. _____

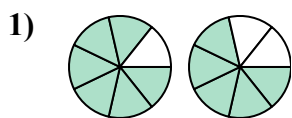
8. _____

9. _____



Xác định đáp án nào phù hợp nhất với các phân số trong hình.

Câu trả lời

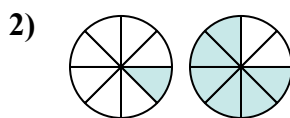


A. $\frac{6}{7} > \frac{5}{7}$

B. $\frac{6}{1} < \frac{5}{2}$

C. $\frac{7}{6} > \frac{7}{5}$

D. $\frac{1}{6} > \frac{2}{5}$

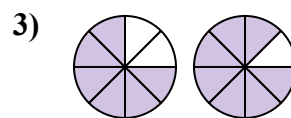


A. $\frac{1}{7} < \frac{6}{2}$

B. $\frac{1}{8} < \frac{6}{8}$

C. $\frac{7}{1} > \frac{2}{6}$

D. $\frac{1}{7} > \frac{6}{2}$

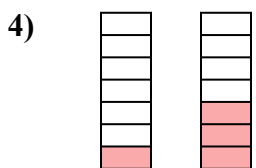


A. $\frac{6}{2} > \frac{7}{1}$

B. $\frac{6}{2} < \frac{7}{1}$

C. $\frac{6}{8} < \frac{7}{8}$

D. $\frac{6}{8} > \frac{7}{8}$

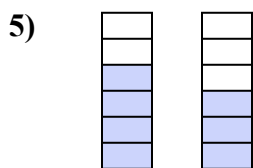


A. $\frac{1}{7} < \frac{3}{7}$

B. $\frac{1}{6} < \frac{3}{4}$

C. $\frac{6}{1} > \frac{4}{3}$

D. $\frac{1}{6} > \frac{3}{4}$

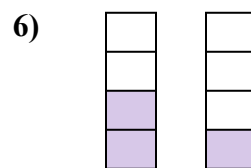


A. $\frac{6}{4} > \frac{6}{3}$

B. $\frac{4}{6} < \frac{3}{6}$

C. $\frac{2}{4} < \frac{3}{3}$

D. $\frac{4}{6} > \frac{3}{6}$

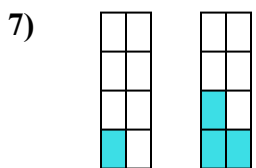


A. $\frac{2}{4} > \frac{1}{4}$

B. $\frac{4}{2} > \frac{4}{1}$

C. $\frac{2}{2} < \frac{1}{3}$

D. $\frac{2}{2} > \frac{3}{1}$

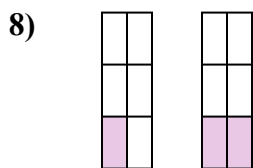


A. $\frac{7}{1} > \frac{5}{3}$

B. $\frac{8}{1} > \frac{8}{3}$

C. $\frac{1}{8} > \frac{3}{8}$

D. $\frac{1}{8} < \frac{3}{8}$

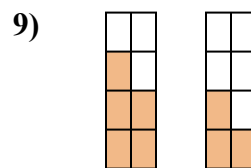


A. $\frac{5}{1} < \frac{4}{2}$

B. $\frac{1}{6} > \frac{2}{6}$

C. $\frac{1}{6} < \frac{2}{6}$

D. $\frac{5}{1} > \frac{4}{2}$



A. $\frac{5}{3} < \frac{3}{5}$

B. $\frac{5}{3} > \frac{3}{5}$

C. $\frac{5}{8} > \frac{3}{8}$

D. $\frac{3}{5} < \frac{5}{3}$

1. **A**2. **B**3. **C**4. **A**5. **D**6. **A**7. **D**8. **C**9. **C**