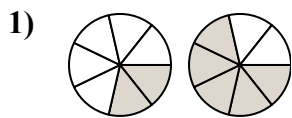




Xác định đáp án nào phù hợp nhất với các phân số trong hình.

Câu trả lời

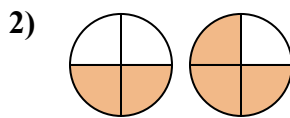


A.  $\frac{5}{2} < \frac{2}{5}$

B.  $\frac{2}{5} > \frac{5}{2}$

C.  $\frac{7}{2} > \frac{7}{5}$

D.  $\frac{2}{7} < \frac{5}{7}$

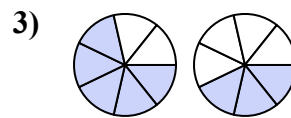


A.  $\frac{2}{2} < \frac{1}{3}$

B.  $\frac{2}{2} > \frac{3}{1}$

C.  $\frac{2}{4} < \frac{3}{4}$

D.  $\frac{2}{2} < \frac{3}{1}$

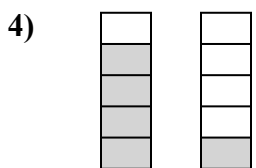


A.  $\frac{5}{7} > \frac{3}{7}$

B.  $\frac{5}{2} > \frac{3}{4}$

C.  $\frac{2}{5} > \frac{4}{3}$

D.  $\frac{5}{7} < \frac{3}{7}$

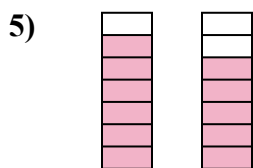


A.  $\frac{4}{1} > \frac{1}{4}$

B.  $\frac{1}{4} < \frac{4}{1}$

C.  $\frac{4}{5} > \frac{1}{5}$

D.  $\frac{5}{4} > \frac{5}{1}$

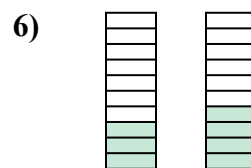


A.  $\frac{1}{6} < \frac{2}{5}$

B.  $\frac{6}{7} > \frac{5}{7}$

C.  $\frac{6}{1} < \frac{5}{2}$

D.  $\frac{6}{7} < \frac{5}{7}$

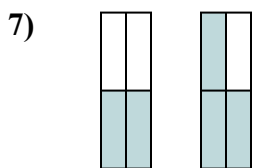


A.  $\frac{10}{3} > \frac{10}{4}$

B.  $\frac{3}{10} < \frac{4}{10}$

C.  $\frac{7}{3} > \frac{6}{4}$

D.  $\frac{3}{7} > \frac{4}{6}$

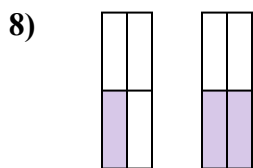


A.  $\frac{4}{2} > \frac{4}{3}$

B.  $\frac{2}{2} < \frac{3}{1}$

C.  $\frac{2}{4} < \frac{3}{4}$

D.  $\frac{2}{2} < \frac{1}{3}$

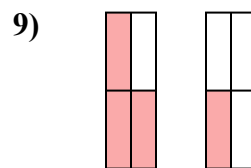


A.  $\frac{1}{3} > \frac{2}{2}$

B.  $\frac{1}{4} > \frac{2}{4}$

C.  $\frac{1}{4} < \frac{2}{4}$

D.  $\frac{1}{3} < \frac{2}{2}$



A.  $\frac{1}{3} > \frac{3}{1}$

B.  $\frac{3}{4} > \frac{1}{4}$

C.  $\frac{1}{3} < \frac{3}{1}$

D.  $\frac{3}{1} < \frac{1}{3}$

1. \_\_\_\_\_

2. \_\_\_\_\_

3. \_\_\_\_\_

4. \_\_\_\_\_

5. \_\_\_\_\_

6. \_\_\_\_\_

7. \_\_\_\_\_

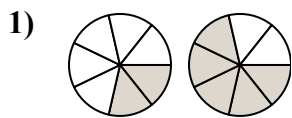
8. \_\_\_\_\_

9. \_\_\_\_\_



Xác định đáp án nào phù hợp nhất với các phân số trong hình.

Câu trả lời

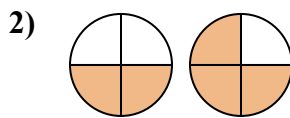


A.  $\frac{5}{2} < \frac{2}{5}$

B.  $\frac{2}{5} > \frac{5}{2}$

C.  $\frac{7}{2} > \frac{7}{5}$

D.  $\frac{2}{7} < \frac{5}{7}$

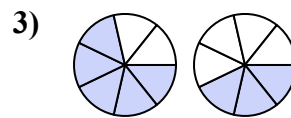


A.  $\frac{2}{2} < \frac{1}{3}$

B.  $\frac{2}{2} > \frac{3}{1}$

C.  $\frac{2}{4} < \frac{3}{4}$

D.  $\frac{2}{2} < \frac{3}{1}$

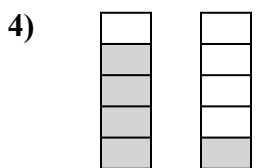


A.  $\frac{5}{7} > \frac{3}{7}$

B.  $\frac{5}{2} > \frac{3}{4}$

C.  $\frac{2}{5} > \frac{4}{3}$

D.  $\frac{5}{7} < \frac{3}{7}$

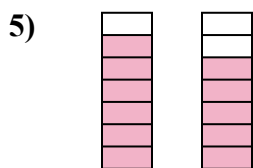


A.  $\frac{4}{1} > \frac{1}{4}$

B.  $\frac{1}{4} < \frac{4}{1}$

C.  $\frac{4}{5} > \frac{1}{5}$

D.  $\frac{5}{4} > \frac{5}{1}$



A.  $\frac{1}{6} < \frac{2}{5}$

B.  $\frac{6}{7} > \frac{5}{7}$

C.  $\frac{6}{1} < \frac{5}{2}$

D.  $\frac{6}{7} < \frac{5}{7}$

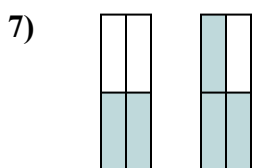


A.  $\frac{10}{3} > \frac{10}{4}$

B.  $\frac{3}{10} < \frac{4}{10}$

C.  $\frac{7}{3} > \frac{6}{4}$

D.  $\frac{3}{7} > \frac{4}{6}$

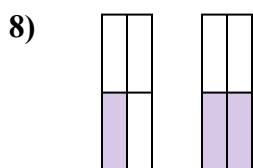


A.  $\frac{4}{2} > \frac{4}{3}$

B.  $\frac{2}{2} < \frac{3}{1}$

C.  $\frac{2}{4} < \frac{3}{4}$

D.  $\frac{2}{2} < \frac{1}{3}$

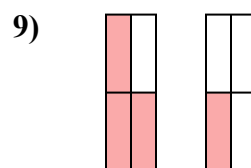


A.  $\frac{1}{3} > \frac{2}{2}$

B.  $\frac{1}{4} > \frac{2}{4}$

C.  $\frac{1}{4} < \frac{2}{4}$

D.  $\frac{1}{3} < \frac{2}{2}$



A.  $\frac{1}{3} > \frac{3}{1}$

B.  $\frac{3}{4} > \frac{1}{4}$

C.  $\frac{1}{3} < \frac{3}{1}$

D.  $\frac{3}{1} < \frac{1}{3}$

1. **D**2. **C**3. **A**4. **C**5. **B**6. **B**7. **C**8. **C**9. **B**