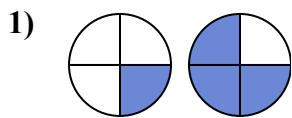




Xác định đáp án nào phù hợp nhất với các phân số trong hình.

Câu trả lời

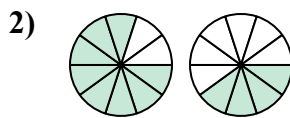


A. $\frac{1}{3} > \frac{3}{1}$

B. $\frac{1}{4} < \frac{3}{4}$

C. $\frac{1}{3} < \frac{3}{1}$

D. $\frac{3}{1} < \frac{1}{3}$

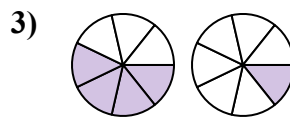


A. $\frac{8}{2} < \frac{4}{6}$

B. $\frac{2}{8} < \frac{6}{4}$

C. $\frac{8}{10} > \frac{4}{10}$

D. $\frac{2}{8} > \frac{6}{4}$

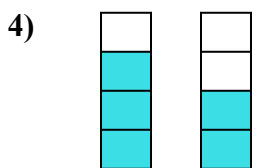


A. $\frac{4}{7} > \frac{1}{7}$

B. $\frac{4}{7} < \frac{1}{7}$

C. $\frac{4}{3} > \frac{1}{6}$

D. $\frac{3}{4} < \frac{6}{1}$

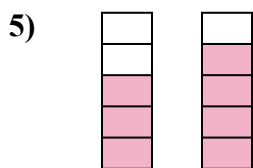


A. $\frac{4}{3} > \frac{4}{2}$

B. $\frac{3}{4} > \frac{2}{4}$

C. $\frac{3}{1} > \frac{2}{2}$

D. $\frac{3}{4} < \frac{2}{4}$

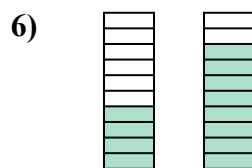


A. $\frac{5}{3} > \frac{5}{4}$

B. $\frac{3}{2} > \frac{4}{1}$

C. $\frac{3}{5} < \frac{4}{5}$

D. $\frac{3}{5} > \frac{4}{5}$

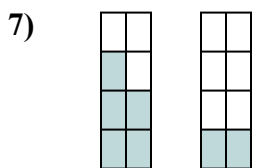


A. $\frac{4}{10} > \frac{8}{10}$

B. $\frac{6}{4} > \frac{2}{8}$

C. $\frac{4}{6} < \frac{8}{2}$

D. $\frac{4}{10} < \frac{8}{10}$

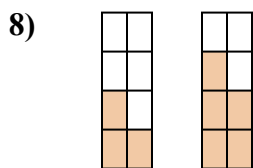


A. $\frac{5}{8} > \frac{2}{8}$

B. $\frac{3}{5} > \frac{6}{2}$

C. $\frac{5}{3} < \frac{2}{6}$

D. $\frac{3}{5} < \frac{6}{2}$

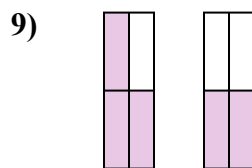


A. $\frac{5}{3} < \frac{3}{5}$

B. $\frac{3}{8} < \frac{5}{8}$

C. $\frac{5}{3} > \frac{3}{5}$

D. $\frac{3}{5} > \frac{5}{3}$



A. $\frac{4}{3} > \frac{4}{2}$

B. $\frac{3}{4} > \frac{2}{4}$

C. $\frac{1}{3} > \frac{2}{2}$

D. $\frac{3}{1} < \frac{2}{2}$

1. _____

2. _____

3. _____

4. _____

5. _____

6. _____

7. _____

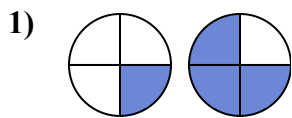
8. _____

9. _____



Xác định đáp án nào phù hợp nhất với các phân số trong hình.

Câu trả lời

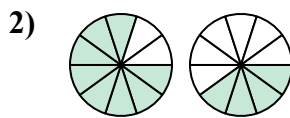


A. $\frac{1}{3} > \frac{3}{1}$

B. $\frac{1}{4} < \frac{3}{4}$

C. $\frac{1}{3} < \frac{3}{1}$

D. $\frac{3}{1} < \frac{1}{3}$

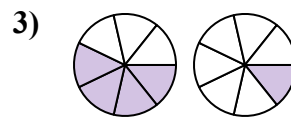


A. $\frac{8}{2} < \frac{4}{6}$

B. $\frac{2}{8} < \frac{6}{4}$

C. $\frac{8}{10} > \frac{4}{10}$

D. $\frac{2}{8} > \frac{6}{4}$

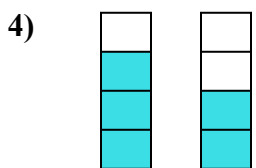


A. $\frac{4}{7} > \frac{1}{7}$

B. $\frac{4}{7} < \frac{1}{7}$

C. $\frac{4}{3} > \frac{1}{6}$

D. $\frac{3}{4} < \frac{6}{1}$

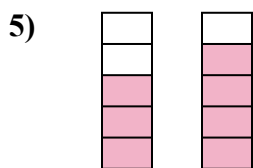


A. $\frac{4}{3} > \frac{4}{2}$

B. $\frac{3}{4} > \frac{2}{4}$

C. $\frac{3}{1} > \frac{2}{2}$

D. $\frac{3}{4} < \frac{2}{4}$

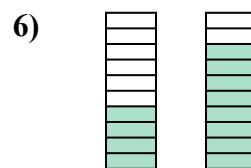


A. $\frac{5}{3} > \frac{5}{4}$

B. $\frac{3}{2} > \frac{4}{1}$

C. $\frac{3}{5} < \frac{4}{5}$

D. $\frac{3}{5} > \frac{4}{5}$

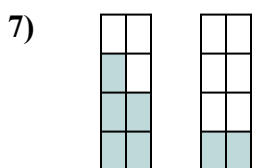


A. $\frac{4}{10} > \frac{8}{10}$

B. $\frac{6}{4} > \frac{2}{8}$

C. $\frac{4}{6} < \frac{8}{2}$

D. $\frac{4}{10} < \frac{8}{10}$

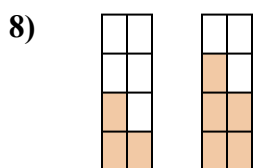


A. $\frac{5}{8} > \frac{2}{8}$

B. $\frac{3}{5} > \frac{6}{2}$

C. $\frac{5}{3} < \frac{2}{6}$

D. $\frac{3}{5} < \frac{6}{2}$

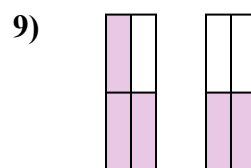


A. $\frac{5}{3} < \frac{3}{5}$

B. $\frac{3}{8} < \frac{5}{8}$

C. $\frac{5}{3} > \frac{3}{5}$

D. $\frac{3}{5} > \frac{5}{3}$



A. $\frac{4}{3} > \frac{4}{2}$

B. $\frac{3}{4} > \frac{2}{4}$

C. $\frac{1}{3} > \frac{2}{2}$

D. $\frac{3}{1} < \frac{2}{2}$

1. **B**2. **C**3. **A**4. **B**5. **C**6. **D**7. **A**8. **B**9. **B**