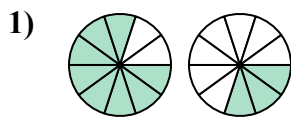




Xác định đáp án nào phù hợp nhất với các phân số trong hình.

Câu trả lời

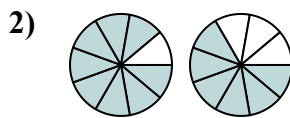


A.  $\frac{8}{10} > \frac{3}{10}$

B.  $\frac{8}{2} < \frac{3}{7}$

C.  $\frac{2}{8} < \frac{7}{3}$

D.  $\frac{8}{2} > \frac{3}{7}$

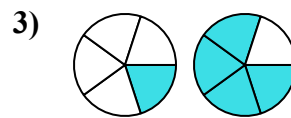


A.  $\frac{9}{8} > \frac{9}{6}$

B.  $\frac{1}{8} < \frac{3}{6}$

C.  $\frac{1}{8} > \frac{3}{6}$

D.  $\frac{8}{9} > \frac{6}{9}$

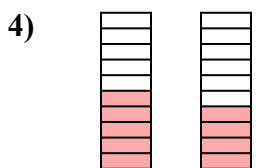


A.  $\frac{1}{5} < \frac{4}{5}$

B.  $\frac{1}{4} > \frac{4}{1}$

C.  $\frac{4}{1} < \frac{1}{4}$

D.  $\frac{1}{5} > \frac{4}{5}$

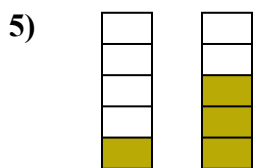


A.  $\frac{10}{5} > \frac{10}{4}$

B.  $\frac{5}{5} < \frac{6}{4}$

C.  $\frac{5}{10} > \frac{4}{10}$

D.  $\frac{5}{5} > \frac{4}{6}$

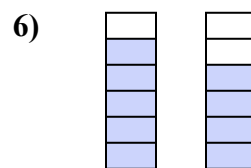


A.  $\frac{1}{4} > \frac{3}{2}$

B.  $\frac{1}{5} < \frac{3}{5}$

C.  $\frac{4}{1} > \frac{2}{3}$

D.  $\frac{4}{1} < \frac{2}{3}$

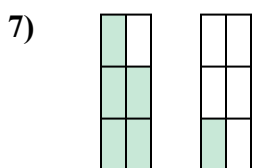


A.  $\frac{5}{6} < \frac{4}{6}$

B.  $\frac{1}{5} < \frac{2}{4}$

C.  $\frac{1}{5} > \frac{2}{4}$

D.  $\frac{5}{6} > \frac{4}{6}$

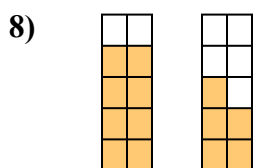


A.  $\frac{5}{1} > \frac{1}{5}$

B.  $\frac{1}{5} < \frac{5}{1}$

C.  $\frac{5}{1} < \frac{1}{5}$

D.  $\frac{5}{6} > \frac{1}{6}$

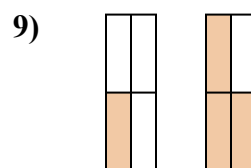


A.  $\frac{2}{8} < \frac{5}{5}$

B.  $\frac{2}{8} > \frac{5}{5}$

C.  $\frac{8}{2} < \frac{5}{5}$

D.  $\frac{8}{10} > \frac{5}{10}$



A.  $\frac{3}{1} < \frac{1}{3}$

B.  $\frac{1}{3} < \frac{3}{1}$

C.  $\frac{1}{4} > \frac{3}{4}$

D.  $\frac{1}{4} < \frac{3}{4}$

1. \_\_\_\_\_

2. \_\_\_\_\_

3. \_\_\_\_\_

4. \_\_\_\_\_

5. \_\_\_\_\_

6. \_\_\_\_\_

7. \_\_\_\_\_

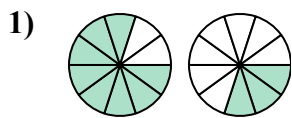
8. \_\_\_\_\_

9. \_\_\_\_\_



Xác định đáp án nào phù hợp nhất với các phân số trong hình.

Câu trả lời

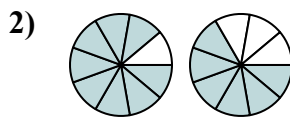


A.  $\frac{8}{10} > \frac{3}{10}$

B.  $\frac{8}{2} < \frac{3}{7}$

C.  $\frac{2}{8} < \frac{7}{3}$

D.  $\frac{8}{2} > \frac{3}{7}$

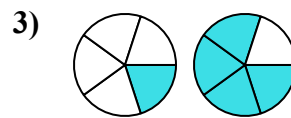


A.  $\frac{9}{8} > \frac{9}{6}$

B.  $\frac{1}{8} < \frac{3}{6}$

C.  $\frac{1}{8} > \frac{3}{6}$

D.  $\frac{8}{9} > \frac{6}{9}$

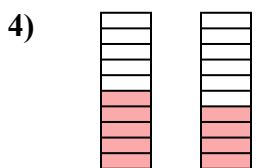


A.  $\frac{1}{5} < \frac{4}{5}$

B.  $\frac{1}{4} > \frac{4}{1}$

C.  $\frac{4}{1} < \frac{1}{4}$

D.  $\frac{1}{5} > \frac{4}{5}$

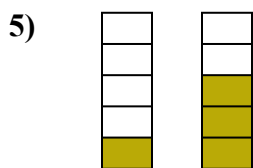


A.  $\frac{10}{5} > \frac{10}{4}$

B.  $\frac{5}{5} < \frac{6}{4}$

C.  $\frac{5}{10} > \frac{4}{10}$

D.  $\frac{5}{5} > \frac{4}{6}$

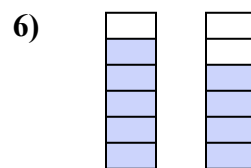


A.  $\frac{1}{4} > \frac{3}{2}$

B.  $\frac{1}{5} < \frac{3}{5}$

C.  $\frac{4}{1} > \frac{2}{3}$

D.  $\frac{4}{1} < \frac{2}{3}$

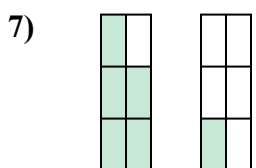


A.  $\frac{5}{6} < \frac{4}{6}$

B.  $\frac{1}{5} < \frac{2}{4}$

C.  $\frac{1}{5} > \frac{2}{4}$

D.  $\frac{5}{6} > \frac{4}{6}$

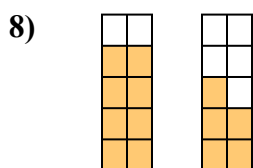


A.  $\frac{5}{1} > \frac{1}{5}$

B.  $\frac{1}{5} < \frac{5}{1}$

C.  $\frac{5}{1} < \frac{1}{5}$

D.  $\frac{5}{6} > \frac{1}{6}$

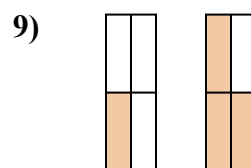


A.  $\frac{2}{8} < \frac{5}{5}$

B.  $\frac{2}{8} > \frac{5}{5}$

C.  $\frac{8}{2} < \frac{5}{5}$

D.  $\frac{8}{10} > \frac{5}{10}$



A.  $\frac{3}{1} < \frac{1}{3}$

B.  $\frac{1}{3} < \frac{3}{1}$

C.  $\frac{1}{4} > \frac{3}{4}$

D.  $\frac{1}{4} < \frac{3}{4}$

1. **A**2. **D**3. **A**4. **C**5. **B**6. **D**7. **D**8. **D**9. **D**