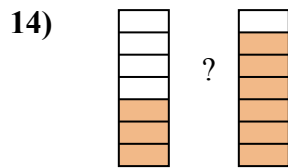
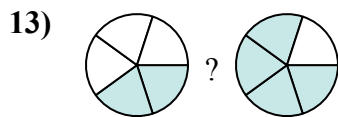
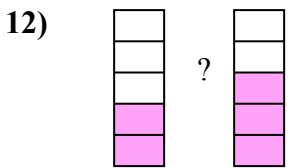
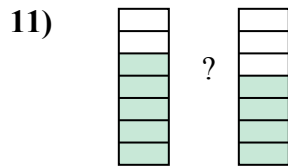
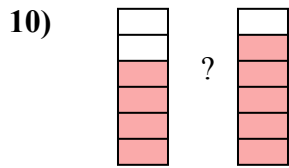
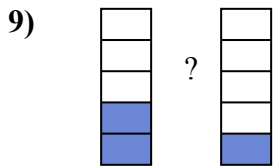
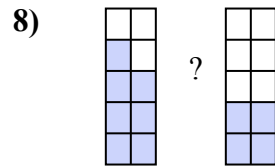
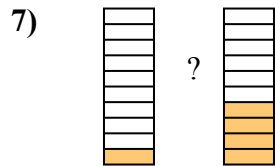
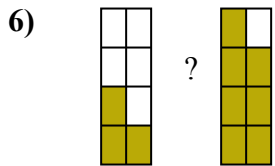
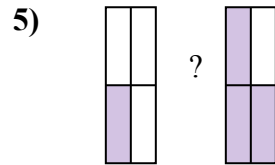
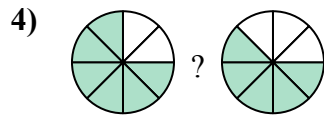
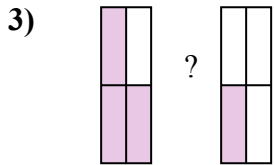
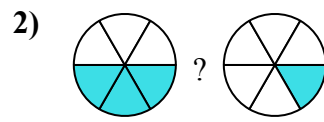
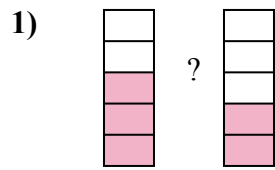





So sánh phân số dùng <, > hay =.



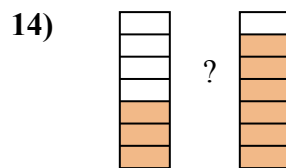
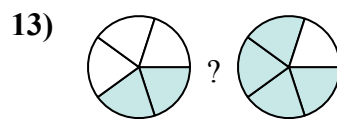
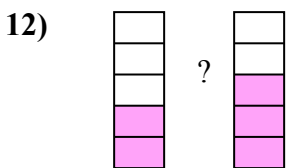
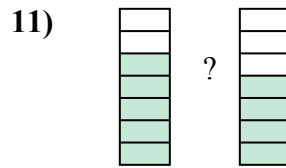
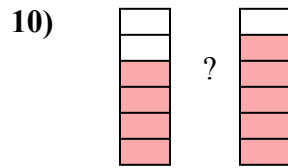
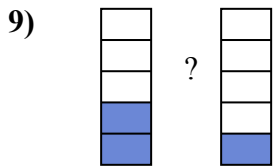
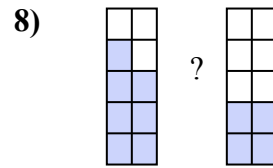
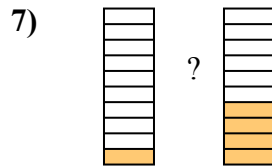
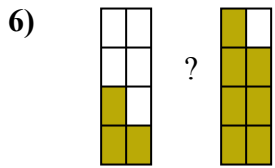
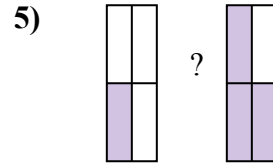
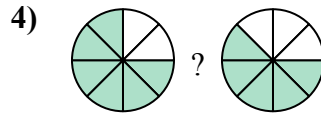
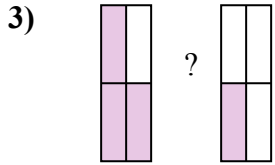
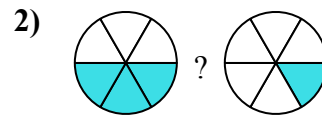
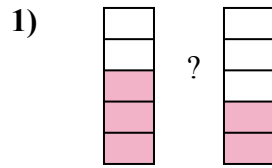
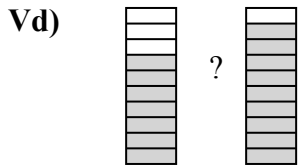
Câu trả lời

Vd. $\frac{7}{10} < \frac{9}{10}$

1. _____
2. _____
3. _____
4. _____
5. _____
6. _____
7. _____
8. _____
9. _____
10. _____
11. _____
12. _____
13. _____
14. _____



So sánh phân số dùng <, > hay =.

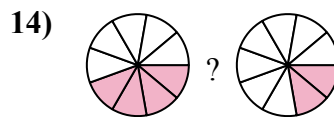
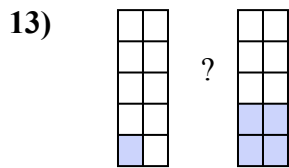
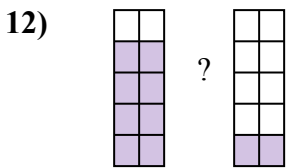
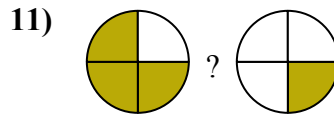
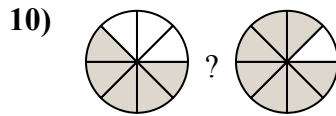
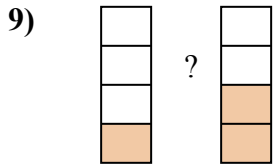
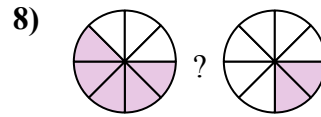
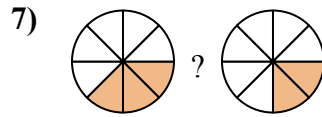
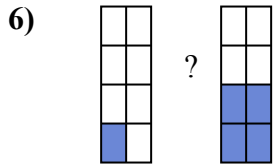
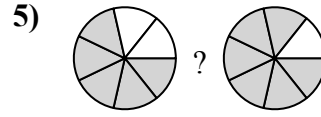
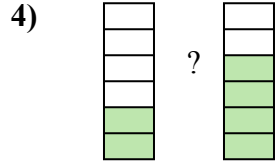
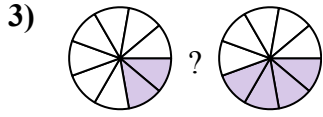
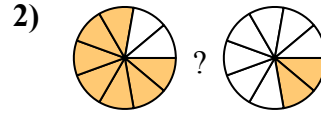
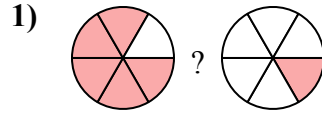
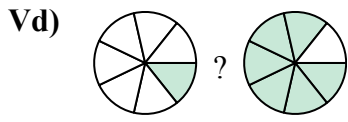


Câu trả lời

Vd.	$\frac{7}{10}$	<	$\frac{9}{10}$
1.	$\frac{3}{5}$	>	$\frac{2}{5}$
2.	$\frac{3}{6}$	>	$\frac{1}{6}$
3.	$\frac{3}{4}$	>	$\frac{1}{4}$
4.	$\frac{6}{8}$	>	$\frac{5}{8}$
5.	$\frac{1}{4}$	<	$\frac{3}{4}$
6.	$\frac{3}{8}$	<	$\frac{7}{8}$
7.	$\frac{1}{10}$	<	$\frac{4}{10}$
8.	$\frac{7}{10}$	>	$\frac{4}{10}$
9.	$\frac{2}{5}$	>	$\frac{1}{5}$
10.	$\frac{4}{6}$	<	$\frac{5}{6}$
11.	$\frac{5}{7}$	>	$\frac{4}{7}$
12.	$\frac{2}{5}$	<	$\frac{3}{5}$
13.	$\frac{2}{5}$	<	$\frac{4}{5}$
14.	$\frac{3}{7}$	<	$\frac{6}{7}$



So sánh phân số dùng <, > hay =.



Câu trả lời

Vd. $\frac{1}{7}$ < $\frac{6}{7}$

1. _____

2. _____

3. _____

4. _____

5. _____

6. _____

7. _____

8. _____

9. _____

10. _____

11. _____

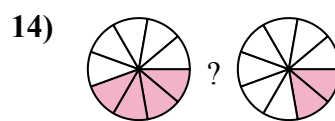
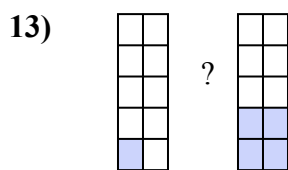
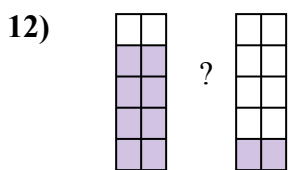
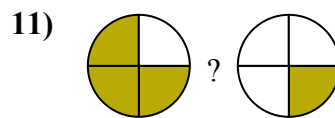
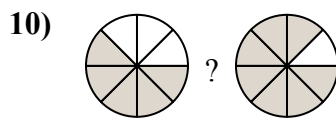
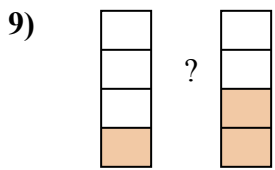
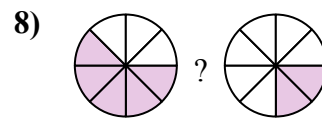
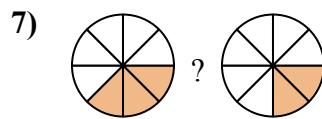
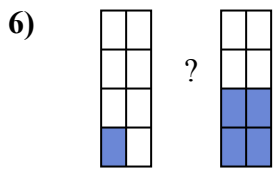
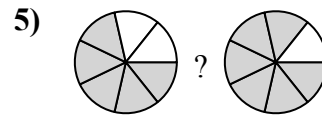
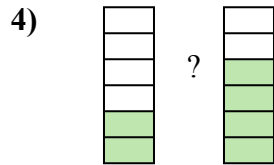
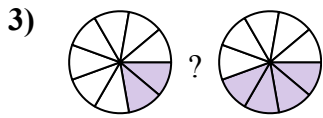
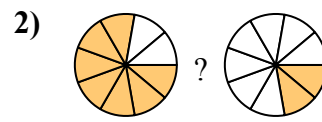
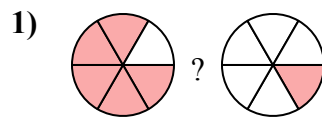
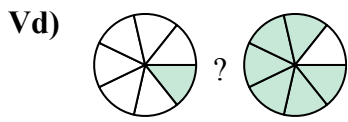
12. _____

13. _____

14. _____



So sánh phân số dùng <, > hay =.

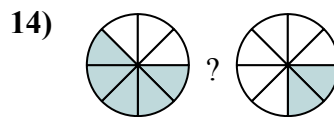
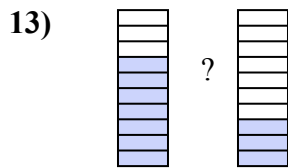
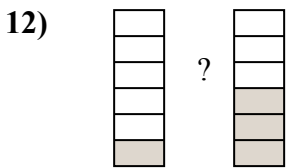
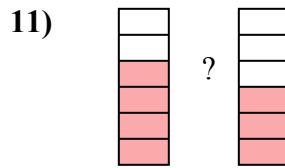
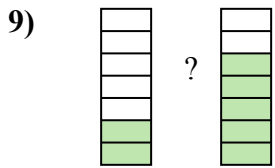
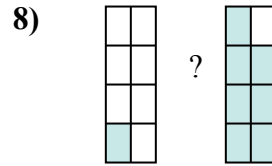
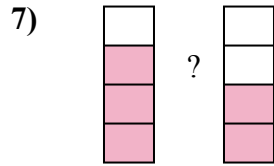
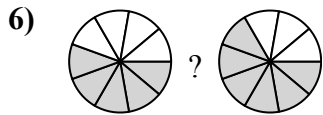
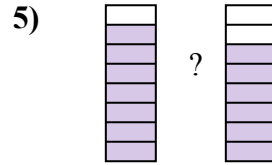
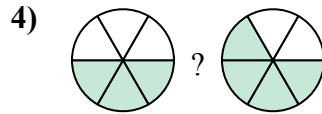
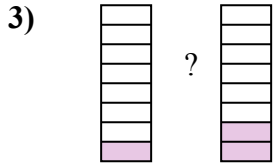
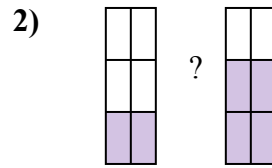
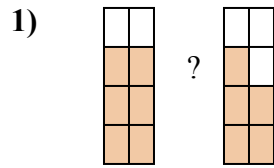
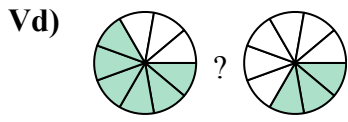


Câu trả lời

Vd.	$\frac{1}{7}$	<	$\frac{6}{7}$
1.	$\frac{5}{6}$	>	$\frac{1}{6}$
2.	$\frac{7}{9}$	>	$\frac{2}{9}$
3.	$\frac{2}{9}$	<	$\frac{4}{9}$
4.	$\frac{2}{6}$	<	$\frac{4}{6}$
5.	$\frac{5}{7}$	<	$\frac{6}{7}$
6.	$\frac{1}{8}$	<	$\frac{4}{8}$
7.	$\frac{3}{8}$	>	$\frac{2}{8}$
8.	$\frac{5}{8}$	>	$\frac{2}{8}$
9.	$\frac{1}{4}$	<	$\frac{2}{4}$
10.	$\frac{5}{8}$	<	$\frac{7}{8}$
11.	$\frac{3}{4}$	>	$\frac{1}{4}$
12.	$\frac{8}{10}$	>	$\frac{2}{10}$
13.	$\frac{1}{10}$	<	$\frac{4}{10}$
14.	$\frac{4}{9}$	>	$\frac{2}{9}$



So sánh phân số dùng <, > hay =.



Câu trả lời

Vd. $\frac{6}{9}$ $>$ $\frac{3}{9}$

1. _____

2. _____

3. _____

4. _____

5. _____

6. _____

7. _____

8. _____

9. _____

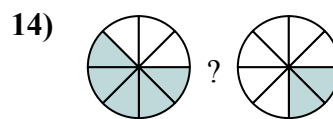
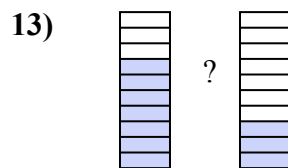
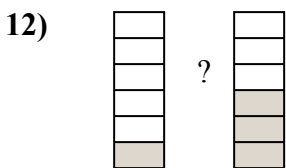
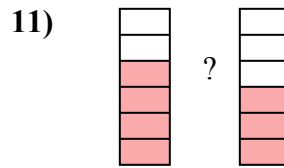
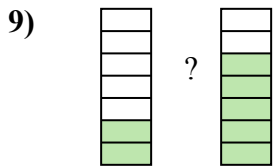
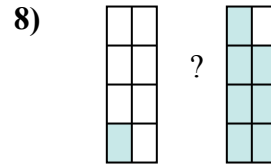
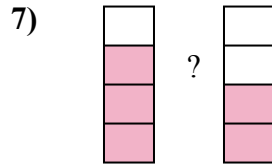
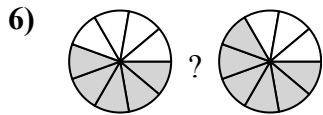
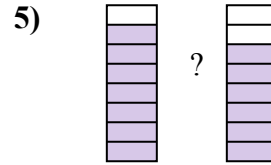
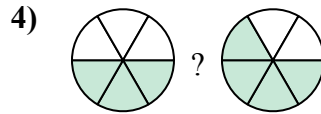
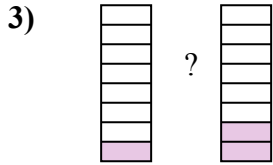
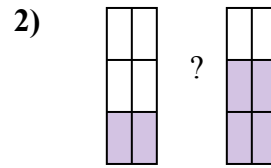
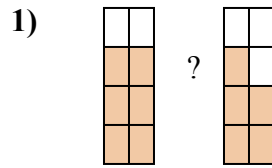
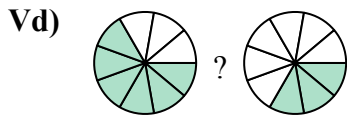
10. _____

11. _____

12. _____

13. _____

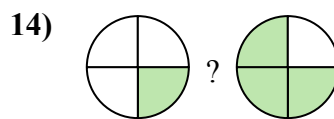
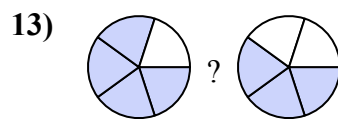
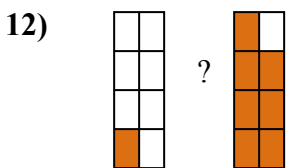
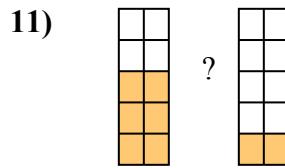
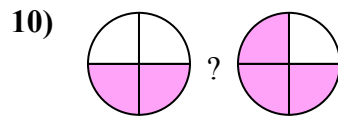
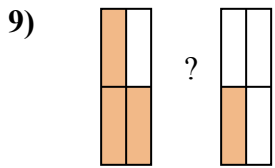
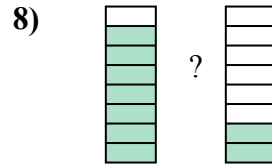
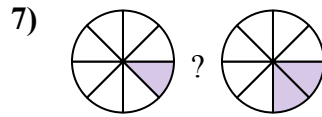
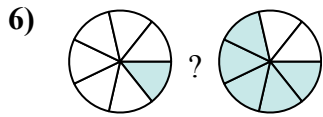
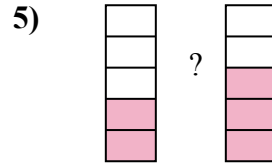
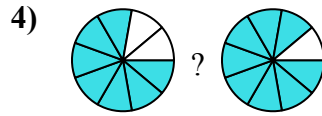
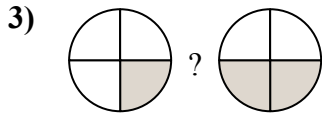
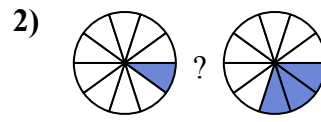

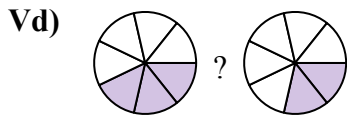
14. _____

So sánh phân số dùng $<$, $>$ hay $=$.**Câu trả lời**

Vd.	$\frac{6}{9}$	$>$	$\frac{3}{9}$
1.	$\frac{6}{8}$	$>$	$\frac{5}{8}$
2.	$\frac{2}{6}$	$<$	$\frac{4}{6}$
3.	$\frac{1}{8}$	$<$	$\frac{2}{8}$
4.	$\frac{3}{6}$	$<$	$\frac{4}{6}$
5.	$\frac{7}{8}$	$>$	$\frac{6}{8}$
6.	$\frac{5}{9}$	$<$	$\frac{6}{9}$
7.	$\frac{3}{4}$	$>$	$\frac{2}{4}$
8.	$\frac{1}{8}$	$<$	$\frac{7}{8}$
9.	$\frac{2}{7}$	$<$	$\frac{5}{7}$
10.	$\frac{2}{5}$	$<$	$\frac{4}{5}$
11.	$\frac{4}{6}$	$>$	$\frac{3}{6}$
12.	$\frac{1}{6}$	$<$	$\frac{3}{6}$
13.	$\frac{7}{10}$	$>$	$\frac{3}{10}$
14.	$\frac{5}{8}$	$>$	$\frac{2}{8}$



So sánh phân số dùng <, > hay =.



Câu trả lời

Vd. $\frac{3}{7} > \frac{2}{7}$

1. _____

2. _____

3. _____

4. _____

5. _____

6. _____

7. _____

8. _____

9. _____

10. _____

11. _____

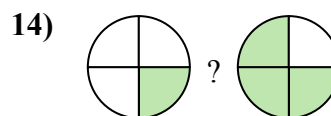
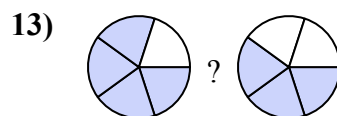
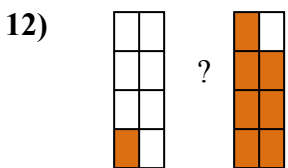
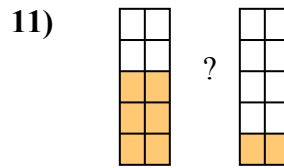
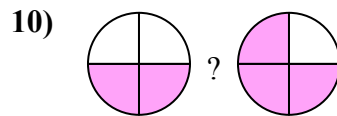
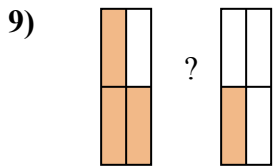
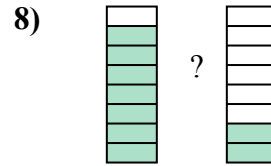
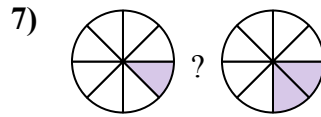
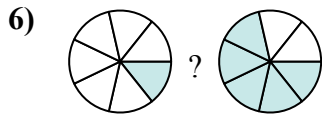
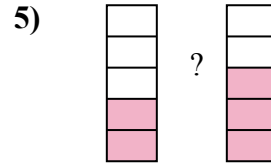
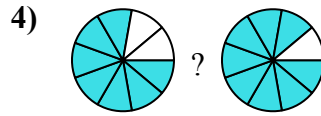
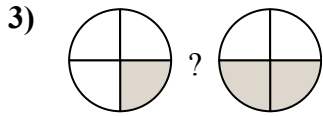
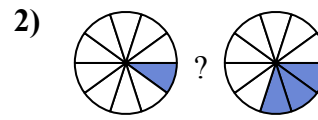

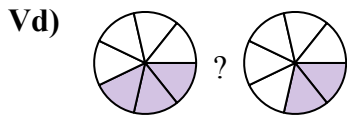
12. _____

13. _____

14. _____



So sánh phân số dùng <, > hay =.

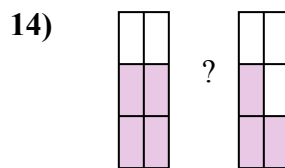
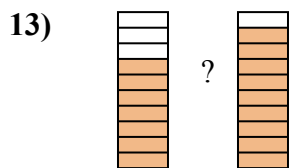
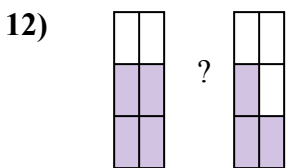
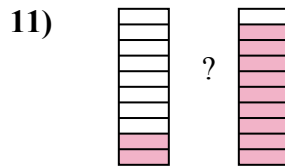
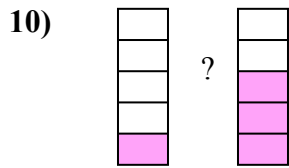
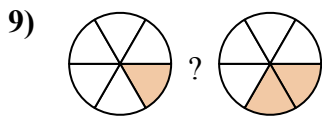
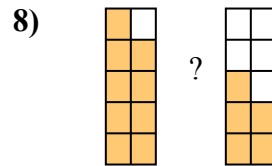
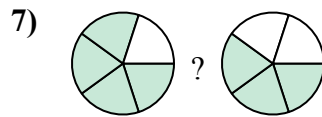
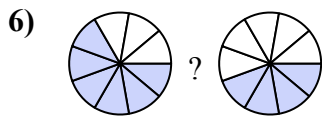

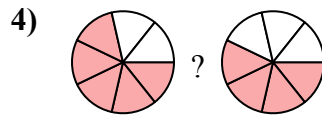
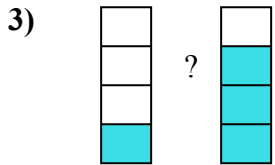
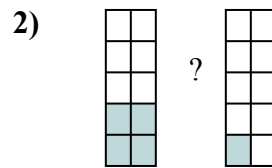
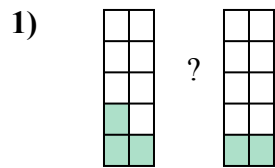
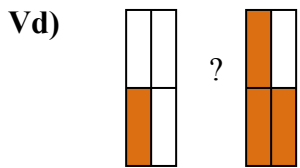


Câu trả lời

Vd.	$\frac{3}{7}$	>	$\frac{2}{7}$
1.	$\frac{4}{5}$	>	$\frac{3}{5}$
2.	$\frac{1}{10}$	<	$\frac{3}{10}$
3.	$\frac{1}{4}$	<	$\frac{2}{4}$
4.	$\frac{7}{9}$	<	$\frac{8}{9}$
5.	$\frac{2}{5}$	<	$\frac{3}{5}$
6.	$\frac{1}{7}$	<	$\frac{5}{7}$
7.	$\frac{1}{8}$	<	$\frac{2}{8}$
8.	$\frac{7}{8}$	>	$\frac{2}{8}$
9.	$\frac{3}{4}$	>	$\frac{1}{4}$
10.	$\frac{2}{4}$	<	$\frac{3}{4}$
11.	$\frac{6}{10}$	>	$\frac{2}{10}$
12.	$\frac{1}{8}$	<	$\frac{7}{8}$
13.	$\frac{4}{5}$	>	$\frac{3}{5}$
14.	$\frac{1}{4}$	<	$\frac{3}{4}$



So sánh phân số dùng <, > hay =.



Câu trả lời

Vd. $\frac{1}{4}$ < $\frac{3}{4}$

1. _____

2. _____

3. _____

4. _____

5. _____

6. _____

7. _____

8. _____

9. _____

10. _____

11. _____

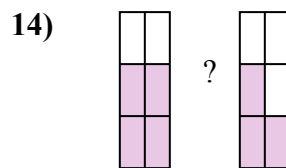
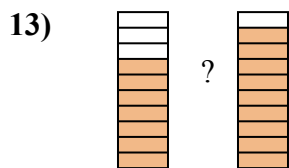
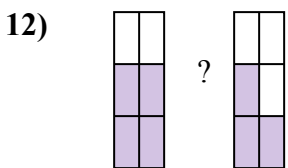
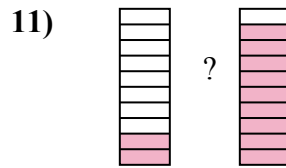
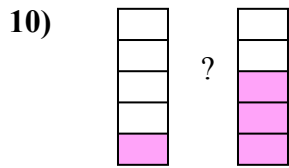
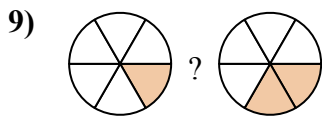
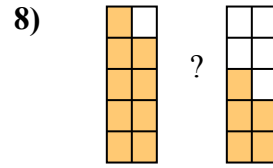
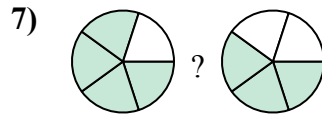
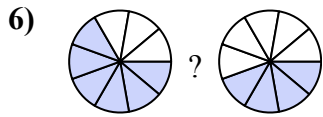
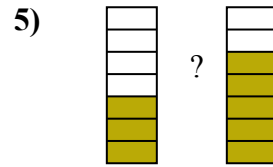
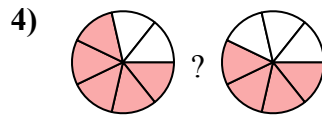
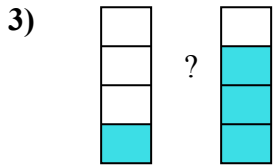
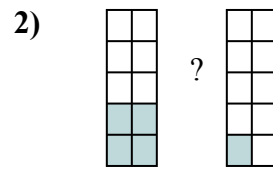
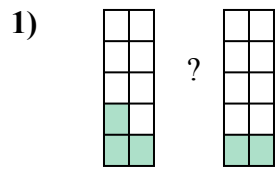
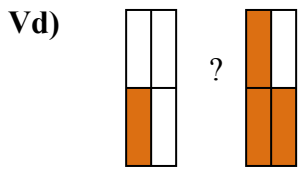
12. _____

13. _____

14. _____



So sánh phân số dùng <, > hay =.

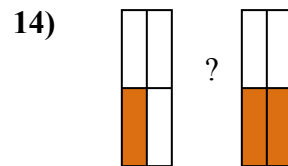
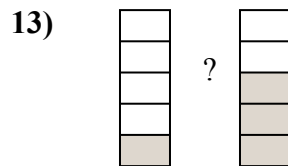
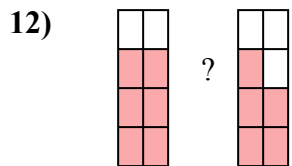

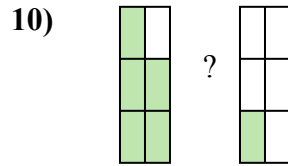
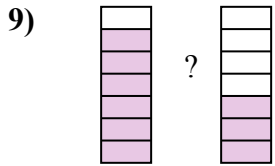
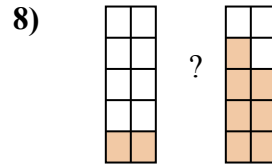
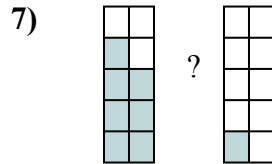
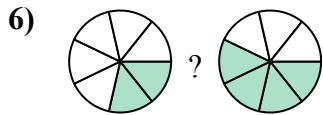
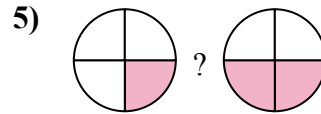
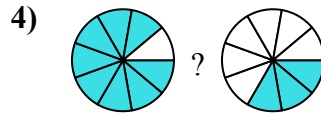
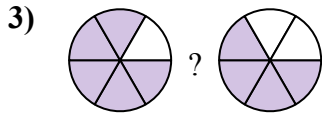
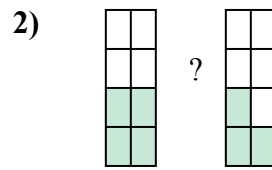
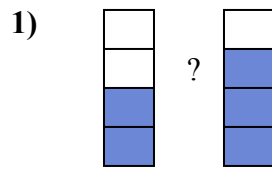
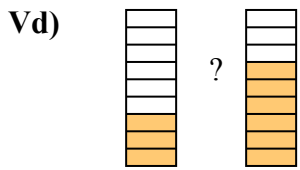


Câu trả lời

Vd.	$\frac{1}{4}$	<	$\frac{3}{4}$
1.	$\frac{3}{10}$	>	$\frac{2}{10}$
2.	$\frac{4}{10}$	>	$\frac{1}{10}$
3.	$\frac{1}{4}$	<	$\frac{3}{4}$
4.	$\frac{5}{7}$	>	$\frac{4}{7}$
5.	$\frac{3}{7}$	<	$\frac{5}{7}$
6.	$\frac{6}{9}$	>	$\frac{4}{9}$
7.	$\frac{4}{5}$	>	$\frac{3}{5}$
8.	$\frac{9}{10}$	>	$\frac{5}{10}$
9.	$\frac{1}{6}$	<	$\frac{2}{6}$
10.	$\frac{1}{5}$	<	$\frac{3}{5}$
11.	$\frac{2}{10}$	<	$\frac{9}{10}$
12.	$\frac{4}{6}$	>	$\frac{3}{6}$
13.	$\frac{7}{10}$	<	$\frac{9}{10}$
14.	$\frac{4}{6}$	>	$\frac{3}{6}$



So sánh phân số dùng <, > hay =.



Câu trả lời

Vd. $\frac{3}{6}$ < $\frac{4}{6}$

1. _____

2. _____

3. _____

4. _____

5. _____

6. _____

7. _____

8. _____

9. _____

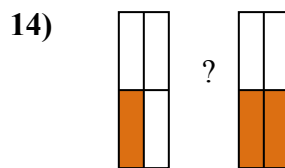
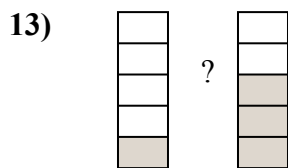
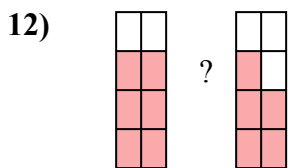
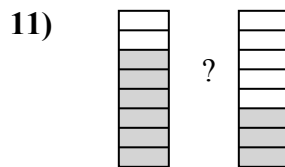
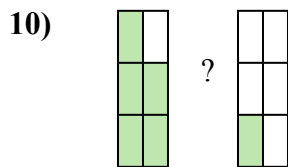
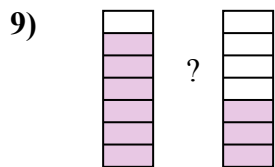
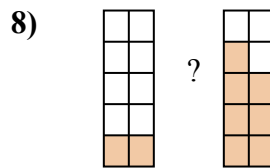
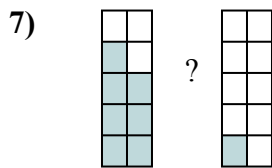
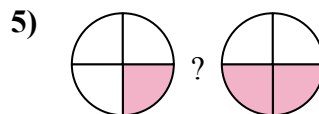
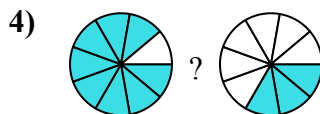
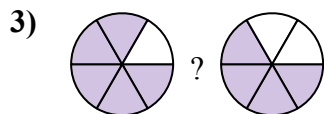
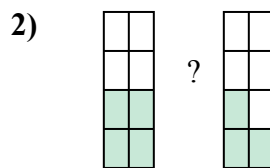
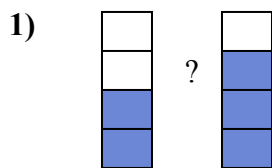
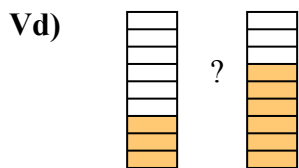
10. _____

11. _____

12. _____

13. _____

14. _____

So sánh phân số dùng $<$, $>$ hay $=$.**Câu trả lời**

Vd. $\frac{3}{9} < \frac{6}{9}$

1. $\frac{2}{4} < \frac{3}{4}$

2. $\frac{4}{8} > \frac{3}{8}$

3. $\frac{5}{6} > \frac{4}{6}$

4. $\frac{8}{9} > \frac{3}{9}$

5. $\frac{1}{4} < \frac{2}{4}$

6. $\frac{2}{7} < \frac{4}{7}$

7. $\frac{7}{10} > \frac{1}{10}$

8. $\frac{2}{10} < \frac{7}{10}$

9. $\frac{6}{7} > \frac{3}{7}$

10. $\frac{5}{6} > \frac{1}{6}$

11. $\frac{6}{8} > \frac{3}{8}$

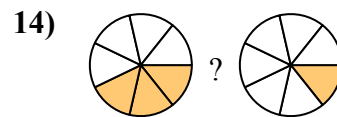
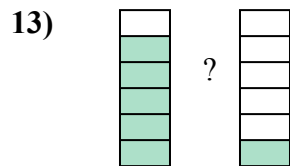
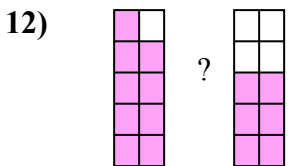
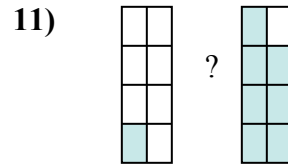
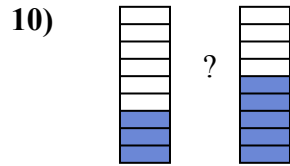
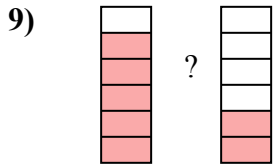
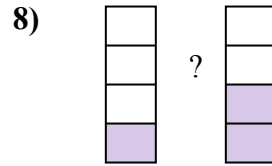
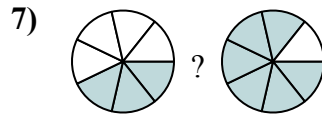
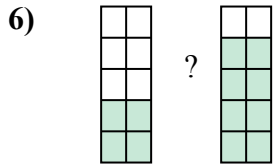
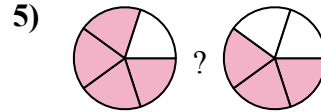
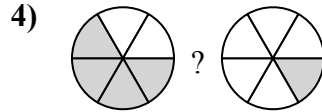
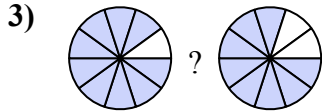
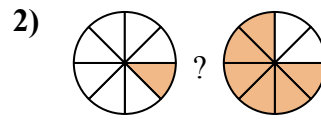

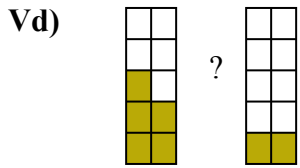
12. $\frac{6}{8} > \frac{5}{8}$

13. $\frac{1}{5} < \frac{3}{5}$

14. $\frac{1}{4} < \frac{2}{4}$



So sánh phân số dùng <, > hay =.



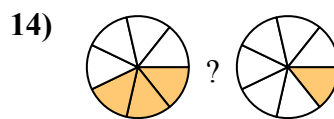
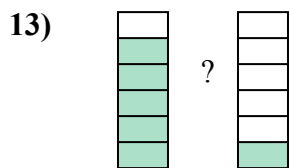
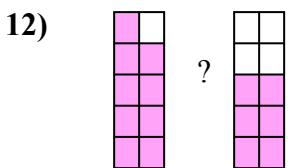
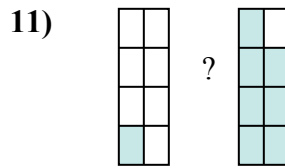
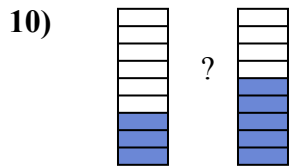
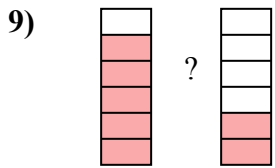
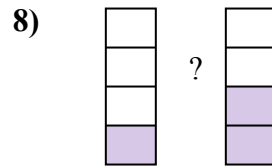
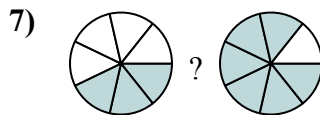
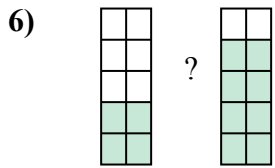
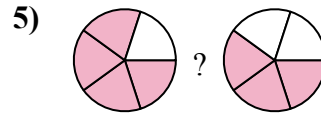
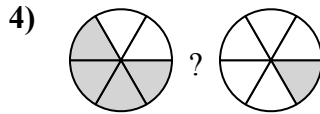
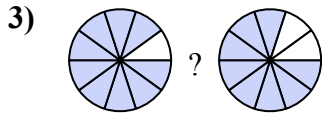
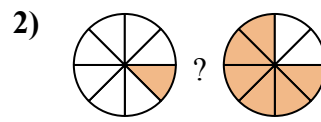
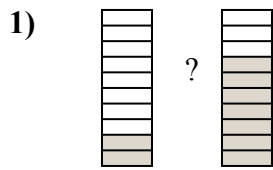
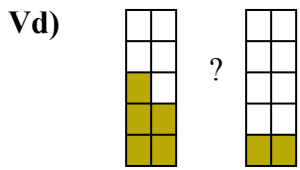
Câu trả lời

Vd. $\frac{5}{10} > \frac{2}{10}$

1. _____
2. _____
3. _____
4. _____
5. _____
6. _____
7. _____
8. _____
9. _____
10. _____
11. _____
12. _____
13. _____
14. _____



So sánh phân số dùng <, > hay =.

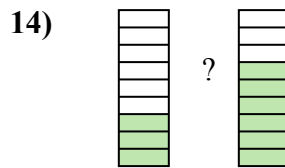
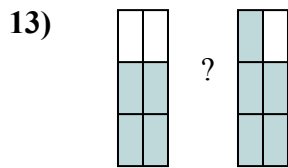
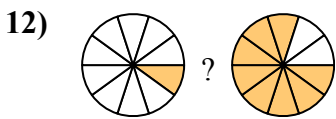
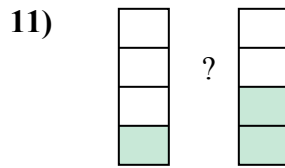
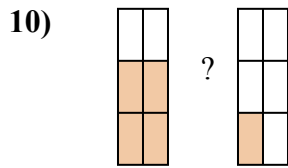
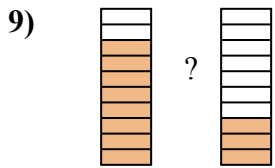
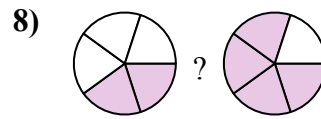
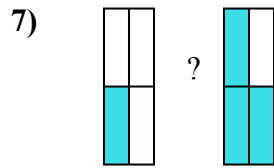
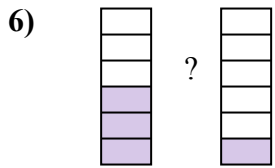
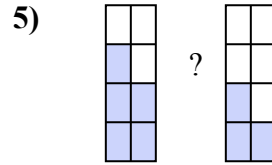
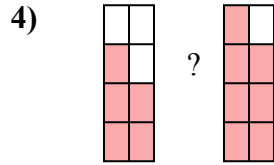
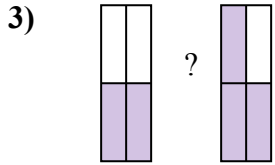
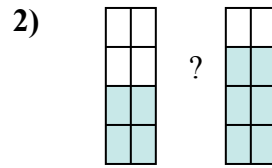
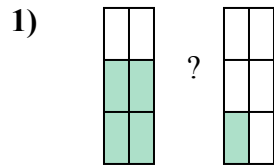
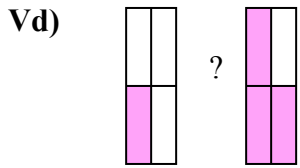


Câu trả lời

Vd.	$\frac{5}{10}$	>	$\frac{2}{10}$
1.	$\frac{2}{10}$	<	$\frac{7}{10}$
2.	$\frac{1}{8}$	<	$\frac{6}{8}$
3.	$\frac{9}{10}$	>	$\frac{8}{10}$
4.	$\frac{4}{6}$	>	$\frac{1}{6}$
5.	$\frac{4}{5}$	>	$\frac{3}{5}$
6.	$\frac{4}{10}$	<	$\frac{8}{10}$
7.	$\frac{3}{7}$	<	$\frac{6}{7}$
8.	$\frac{1}{4}$	<	$\frac{2}{4}$
9.	$\frac{5}{6}$	>	$\frac{2}{6}$
10.	$\frac{3}{9}$	<	$\frac{5}{9}$
11.	$\frac{1}{8}$	<	$\frac{7}{8}$
12.	$\frac{9}{10}$	>	$\frac{6}{10}$
13.	$\frac{5}{6}$	>	$\frac{1}{6}$
14.	$\frac{3}{7}$	>	$\frac{1}{7}$



So sánh phân số dùng <, > hay =.



Câu trả lời

Vd. $\frac{1}{4}$ < $\frac{3}{4}$

1. _____

2. _____

3. _____

4. _____

5. _____

6. _____

7. _____

8. _____

9. _____

10. _____

11. _____

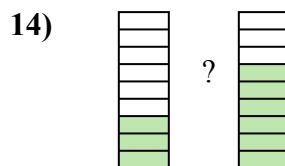
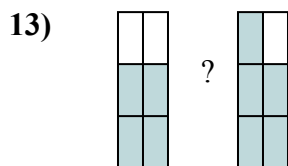
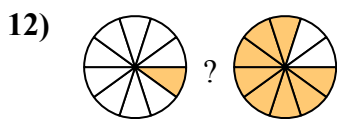
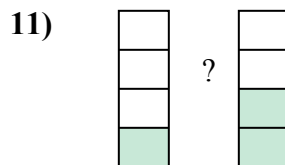
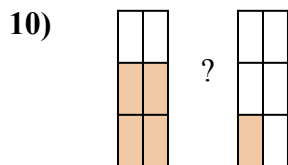
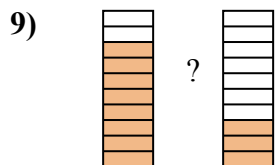
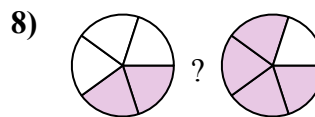
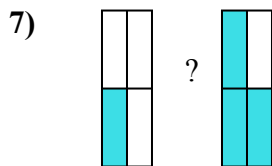
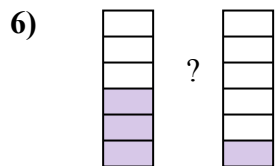
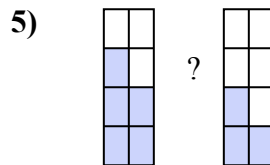
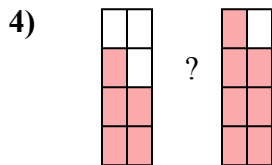
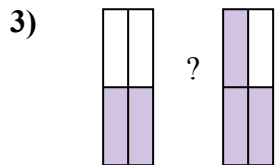
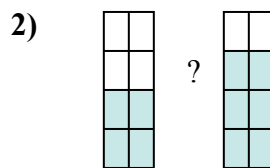
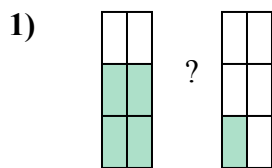
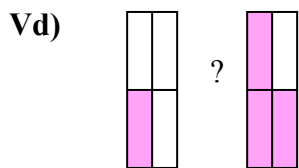
12. _____

13. _____

14. _____



So sánh phân số dùng <, > hay =.



Câu trả lời

Vd. $\frac{1}{4} < \frac{3}{4}$

1. $\frac{4}{6} > \frac{1}{6}$

2. $\frac{4}{8} < \frac{6}{8}$

3. $\frac{2}{4} < \frac{3}{4}$

4. $\frac{5}{8} < \frac{7}{8}$

5. $\frac{5}{8} > \frac{3}{8}$

6. $\frac{3}{6} > \frac{1}{6}$

7. $\frac{1}{4} < \frac{3}{4}$

8. $\frac{2}{5} < \frac{4}{5}$

9. $\frac{8}{10} > \frac{3}{10}$

10. $\frac{4}{6} > \frac{1}{6}$

11. $\frac{1}{4} < \frac{2}{4}$

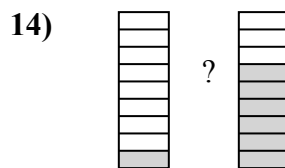
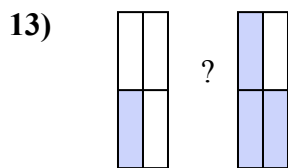
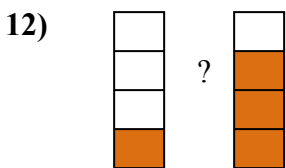
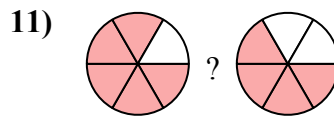
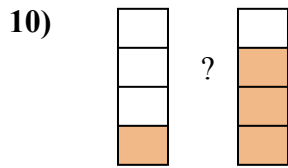
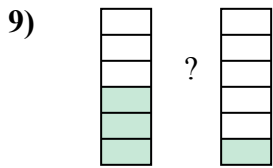
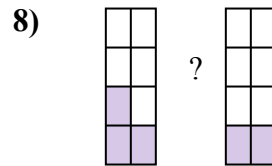
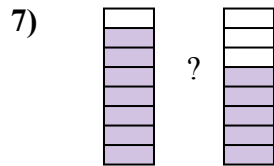
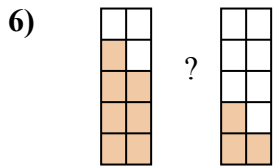
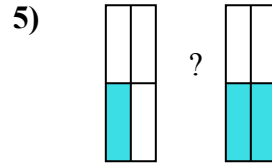

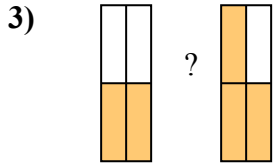
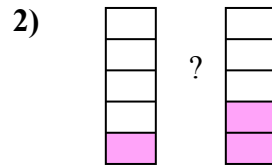
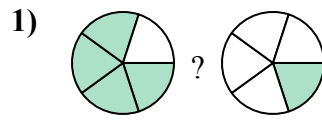
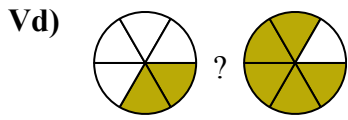
12. $\frac{1}{10} < \frac{8}{10}$

13. $\frac{4}{6} < \frac{5}{6}$

14. $\frac{3}{9} < \frac{6}{9}$



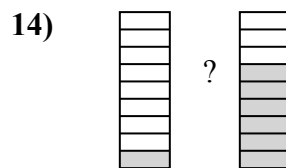
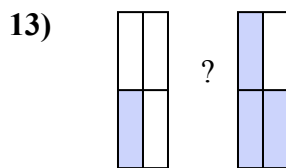
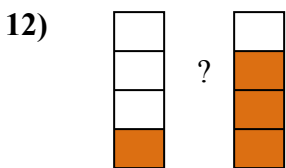
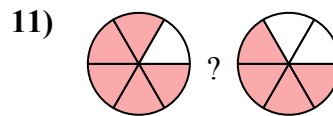
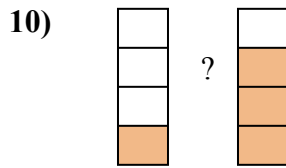
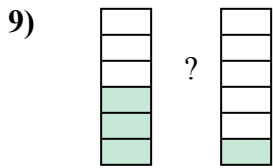
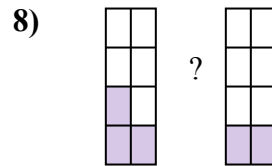
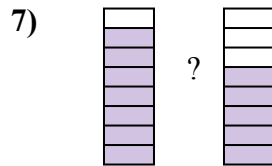
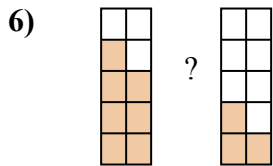
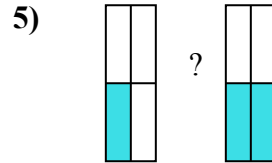
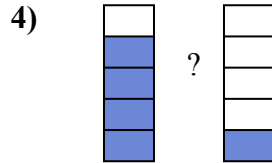
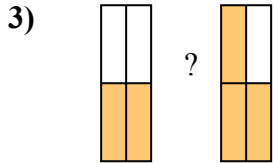
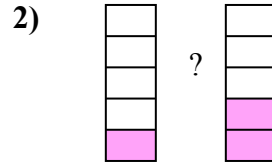
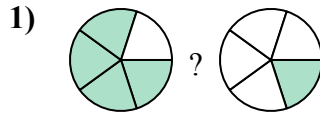
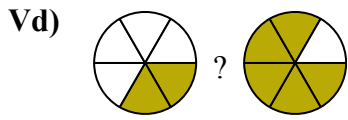
So sánh phân số dùng <, > hay =.



Câu trả lời

Vd. $\frac{2}{6}$ < $\frac{5}{6}$

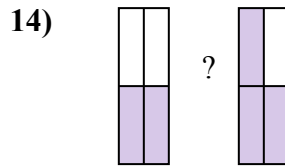
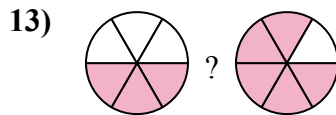
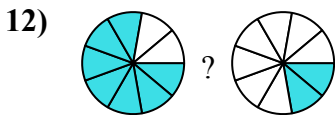
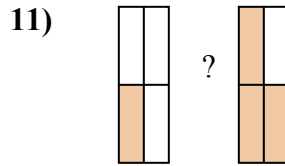
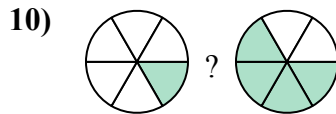
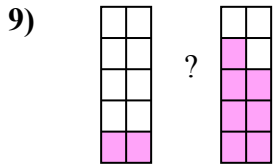
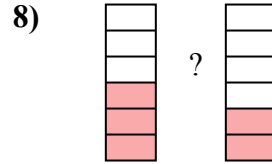

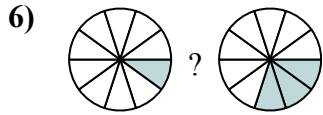
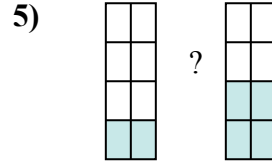
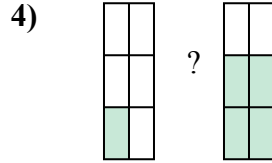
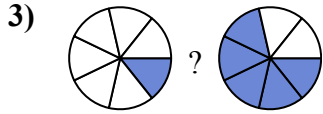
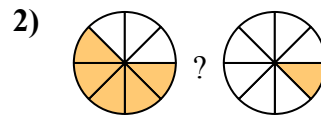

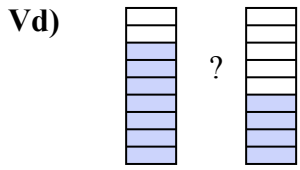
1. _____
2. _____
3. _____
4. _____
5. _____
6. _____
7. _____
8. _____
9. _____
10. _____
11. _____
12. _____
13. _____
14. _____

So sánh phân số dùng $<$, $>$ hay $=$.**Câu trả lời**

Vd.	$\frac{2}{6}$	$<$	$\frac{5}{6}$
1.	$\frac{4}{5}$	$>$	$\frac{1}{5}$
2.	$\frac{1}{5}$	$<$	$\frac{2}{5}$
3.	$\frac{2}{4}$	$<$	$\frac{3}{4}$
4.	$\frac{4}{5}$	$>$	$\frac{1}{5}$
5.	$\frac{1}{4}$	$<$	$\frac{2}{4}$
6.	$\frac{7}{10}$	$>$	$\frac{3}{10}$
7.	$\frac{7}{8}$	$>$	$\frac{5}{8}$
8.	$\frac{3}{8}$	$>$	$\frac{2}{8}$
9.	$\frac{3}{6}$	$>$	$\frac{1}{6}$
10.	$\frac{1}{4}$	$<$	$\frac{3}{4}$
11.	$\frac{5}{6}$	$>$	$\frac{4}{6}$
12.	$\frac{1}{4}$	$<$	$\frac{3}{4}$
13.	$\frac{1}{4}$	$<$	$\frac{3}{4}$
14.	$\frac{1}{9}$	$<$	$\frac{6}{9}$



So sánh phân số dùng <, > hay =.



Câu trả lời

Vd. $\frac{7}{10}$ > $\frac{4}{10}$

1. _____

2. _____

3. _____

4. _____

5. _____

6. _____

7. _____

8. _____

9. _____

10. _____

11. _____

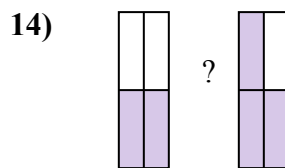
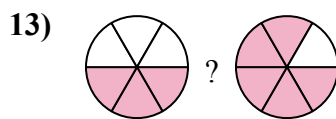
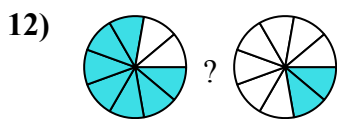
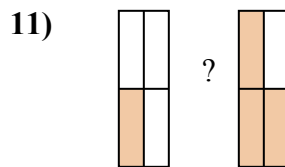
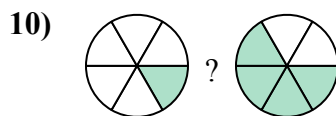
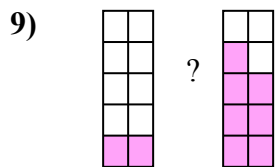
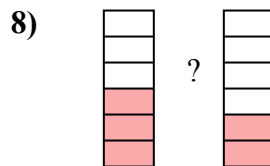

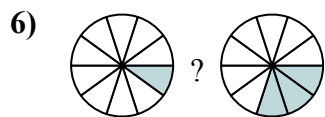
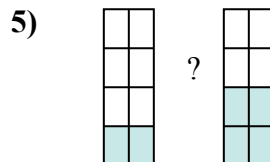
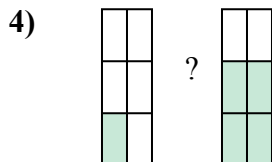
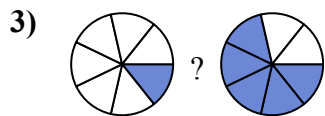
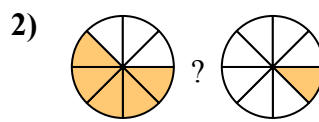

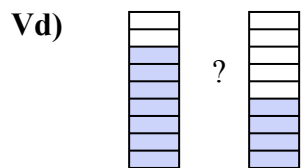
12. _____

13. _____

14. _____



So sánh phân số dùng <, > hay =.



Câu trả lời

Vd.	$\frac{7}{9}$	>	$\frac{4}{9}$
1.	$\frac{5}{9}$	<	$\frac{8}{9}$
2.	$\frac{5}{8}$	>	$\frac{1}{8}$
3.	$\frac{1}{7}$	<	$\frac{5}{7}$
4.	$\frac{1}{6}$	<	$\frac{4}{6}$
5.	$\frac{2}{8}$	<	$\frac{4}{8}$
6.	$\frac{1}{10}$	<	$\frac{3}{10}$
7.	$\frac{4}{5}$	>	$\frac{3}{5}$
8.	$\frac{3}{6}$	>	$\frac{2}{6}$
9.	$\frac{2}{10}$	<	$\frac{7}{10}$
10.	$\frac{1}{6}$	<	$\frac{4}{6}$
11.	$\frac{1}{4}$	<	$\frac{3}{4}$
12.	$\frac{7}{9}$	>	$\frac{2}{9}$
13.	$\frac{3}{6}$	<	$\frac{5}{6}$
14.	$\frac{2}{4}$	<	$\frac{3}{4}$