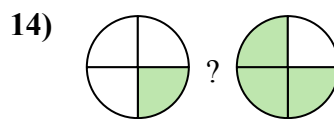
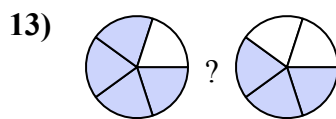
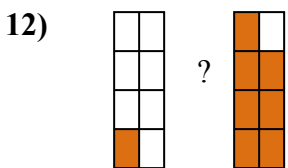
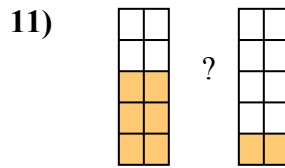
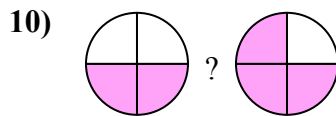
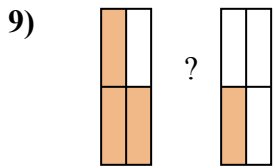
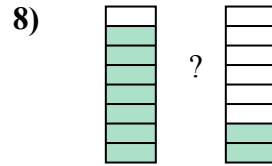
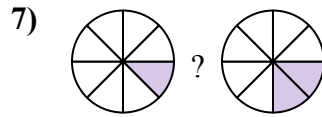
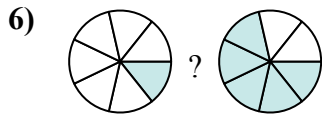
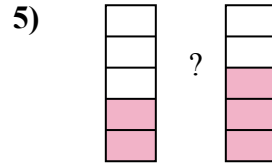
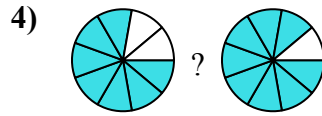
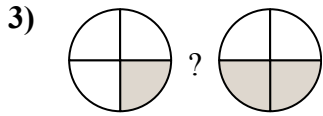
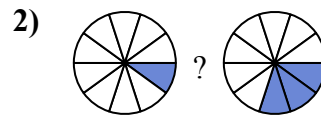

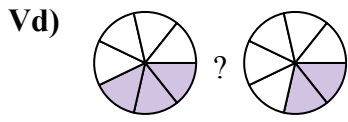




So sánh phân số dùng <, > hay =.



Câu trả lời

Vd. $\frac{3}{7} > \frac{2}{7}$

1. _____

2. _____

3. _____

4. _____

5. _____

6. _____

7. _____

8. _____

9. _____

10. _____

11. _____

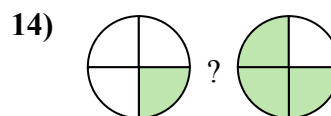
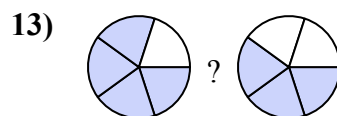
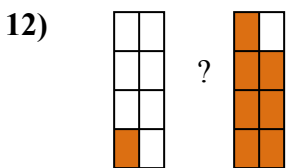
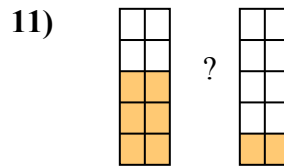
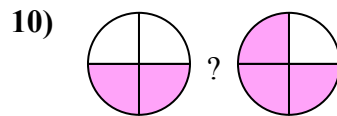
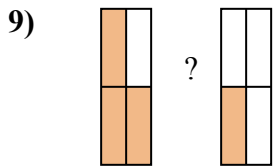
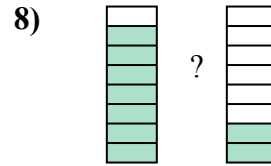
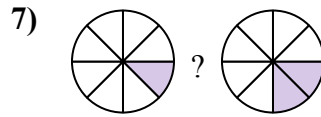
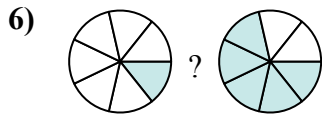
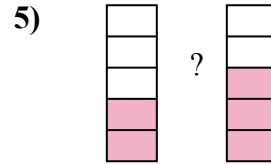
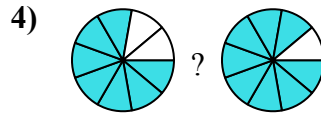
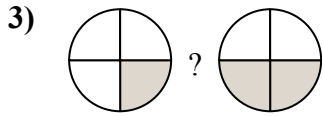
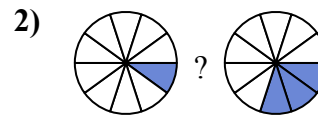

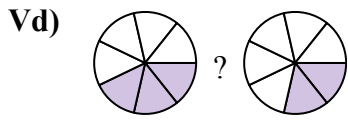
12. _____

13. _____

14. _____



So sánh phân số dùng <, > hay =.



Câu trả lời

Vd.	$\frac{3}{7}$	>	$\frac{2}{7}$
1.	$\frac{4}{5}$	>	$\frac{3}{5}$
2.	$\frac{1}{10}$	<	$\frac{3}{10}$
3.	$\frac{1}{4}$	<	$\frac{2}{4}$
4.	$\frac{7}{9}$	<	$\frac{8}{9}$
5.	$\frac{2}{5}$	<	$\frac{3}{5}$
6.	$\frac{1}{7}$	<	$\frac{5}{7}$
7.	$\frac{1}{8}$	<	$\frac{2}{8}$
8.	$\frac{7}{8}$	>	$\frac{2}{8}$
9.	$\frac{3}{4}$	>	$\frac{1}{4}$
10.	$\frac{2}{4}$	<	$\frac{3}{4}$
11.	$\frac{6}{10}$	>	$\frac{2}{10}$
12.	$\frac{1}{8}$	<	$\frac{7}{8}$
13.	$\frac{4}{5}$	>	$\frac{3}{5}$
14.	$\frac{1}{4}$	<	$\frac{3}{4}$