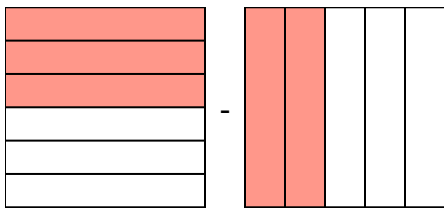


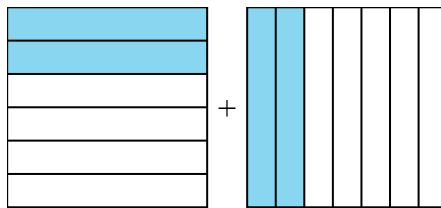


**Giải các câu hỏi.**

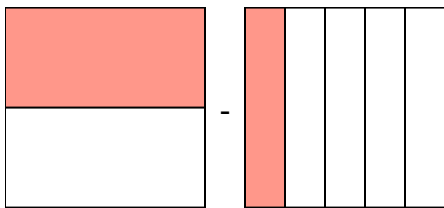
1)  $\frac{3}{6} - \frac{2}{5} =$



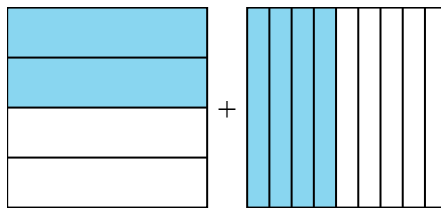
2)  $\frac{2}{6} + \frac{2}{7} =$



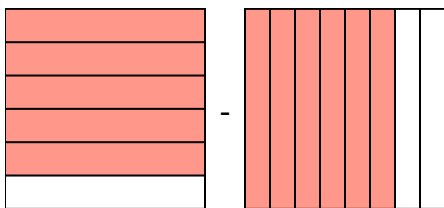
3)  $\frac{1}{2} - \frac{1}{5} =$



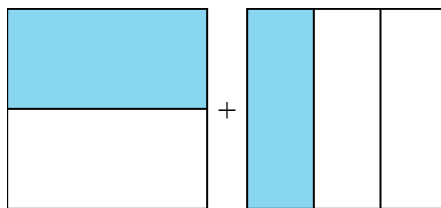
4)  $\frac{2}{4} + \frac{4}{9} =$



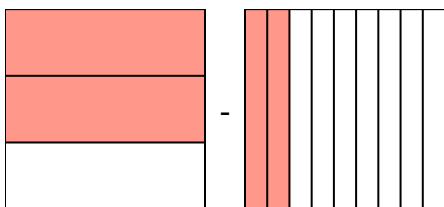
5)  $\frac{5}{6} - \frac{6}{8} =$



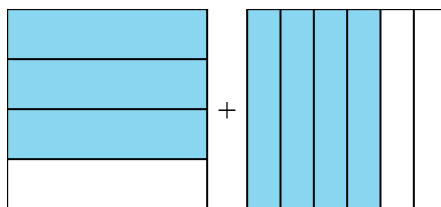
6)  $\frac{1}{2} + \frac{1}{3} =$



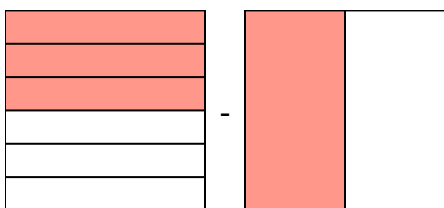
7)  $\frac{2}{3} - \frac{2}{9} =$



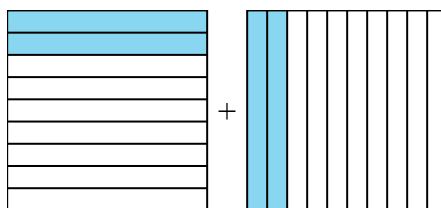
8)  $\frac{3}{4} + \frac{4}{6} =$



9)  $\frac{3}{6} - \frac{1}{2} =$



10)  $\frac{2}{9} + \frac{2}{10} =$



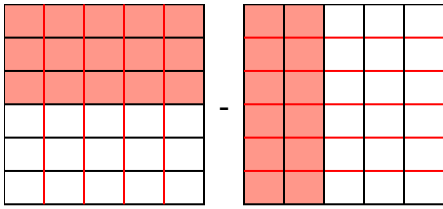
**Câu trả lời**

1. \_\_\_\_\_
2. \_\_\_\_\_
3. \_\_\_\_\_
4. \_\_\_\_\_
5. \_\_\_\_\_
6. \_\_\_\_\_
7. \_\_\_\_\_
8. \_\_\_\_\_
9. \_\_\_\_\_
10. \_\_\_\_\_

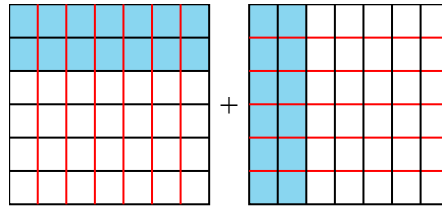


**Giải các câu hỏi.**

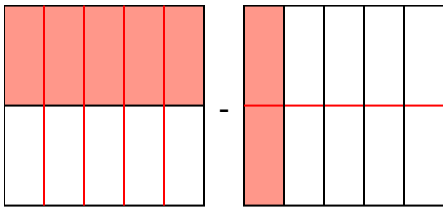
1)  $\frac{3}{6} - \frac{2}{5} = \frac{15}{30} - \frac{12}{30} = \frac{3}{30}$



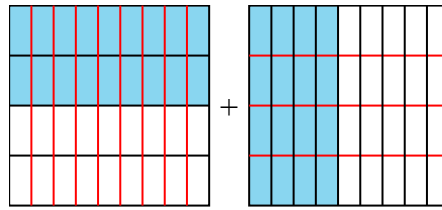
2)  $\frac{2}{6} + \frac{2}{7} = \frac{14}{42} + \frac{12}{42} = \frac{26}{42}$



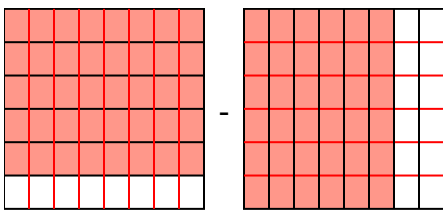
3)  $\frac{1}{2} - \frac{1}{5} = \frac{5}{10} - \frac{2}{10} = \frac{3}{10}$



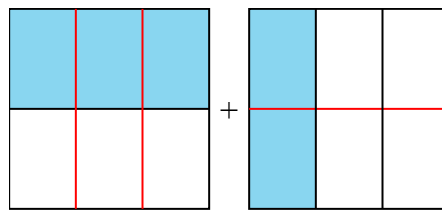
4)  $\frac{2}{4} + \frac{4}{9} = \frac{18}{36} + \frac{16}{36} = \frac{34}{36}$



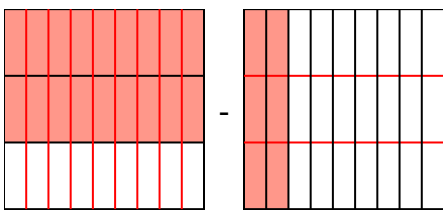
5)  $\frac{5}{6} - \frac{6}{8} = \frac{20}{24} - \frac{18}{24} = \frac{2}{24}$



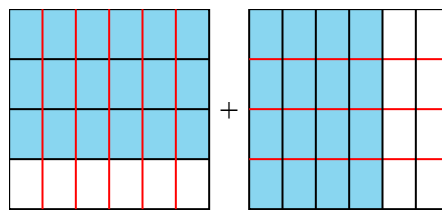
6)  $\frac{1}{2} + \frac{1}{3} = \frac{3}{6} + \frac{2}{6} = \frac{5}{6}$



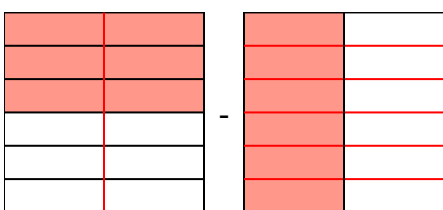
7)  $\frac{2}{3} - \frac{2}{9} = \frac{6}{9} - \frac{2}{9} = \frac{4}{9}$



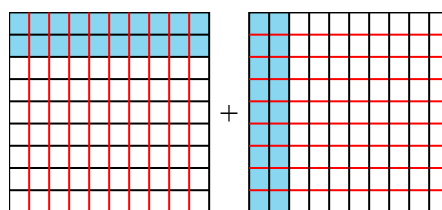
8)  $\frac{3}{4} + \frac{4}{6} = \frac{9}{12} + \frac{8}{12} = 1\frac{5}{12}$



9)  $\frac{3}{6} - \frac{1}{2} = \frac{3}{6} - \frac{3}{6} = \frac{0}{6}$



10)  $\frac{2}{9} + \frac{2}{10} = \frac{20}{90} + \frac{18}{90} = \frac{38}{90}$



**Câu trả lời**

1.  $\frac{3}{30}$
2.  $\frac{26}{42}$
3.  $\frac{3}{10}$
4.  $\frac{34}{36}$
5.  $\frac{2}{24}$
6.  $\frac{5}{6}$
7.  $\frac{4}{9}$
8.  $1\frac{5}{12}$
9.  $\frac{0}{6}$
10.  $\frac{38}{90}$