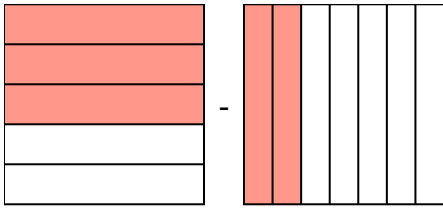


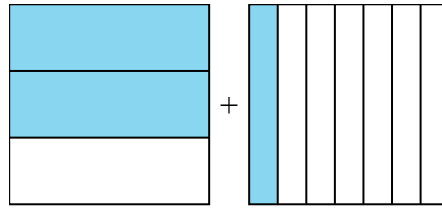


**Giải các câu hỏi.**

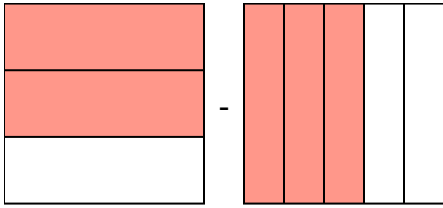
1)  $\frac{3}{5} - \frac{2}{7} =$



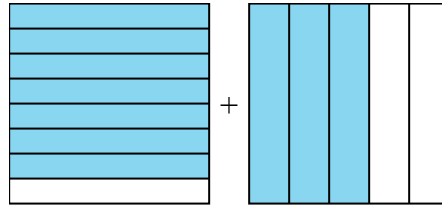
2)  $\frac{2}{3} + \frac{1}{7} =$



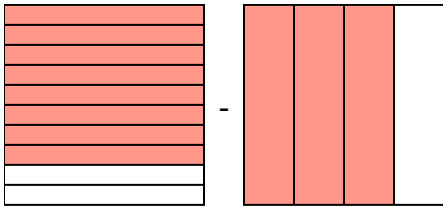
3)  $\frac{2}{3} - \frac{3}{5} =$



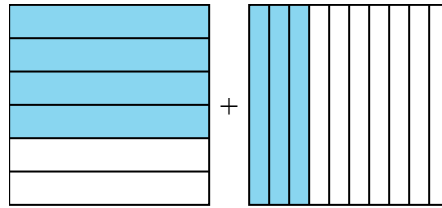
4)  $\frac{7}{8} + \frac{3}{5} =$



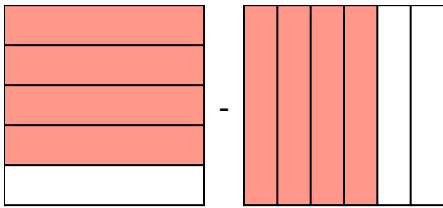
5)  $\frac{8}{10} - \frac{3}{4} =$



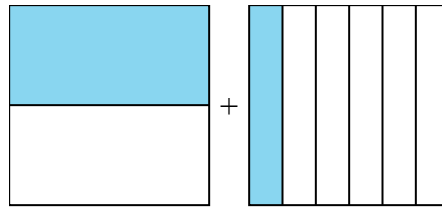
6)  $\frac{4}{6} + \frac{3}{10} =$



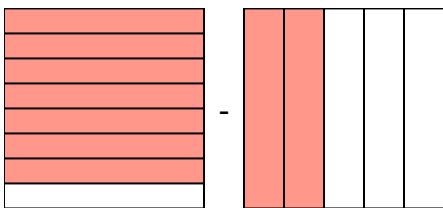
7)  $\frac{4}{5} - \frac{4}{6} =$



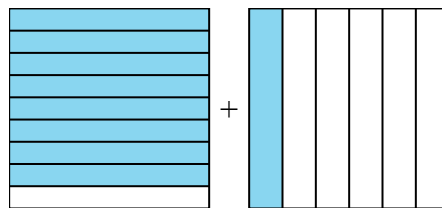
8)  $\frac{1}{2} + \frac{1}{6} =$



9)  $\frac{7}{8} - \frac{2}{5} =$



10)  $\frac{8}{9} + \frac{1}{6} =$



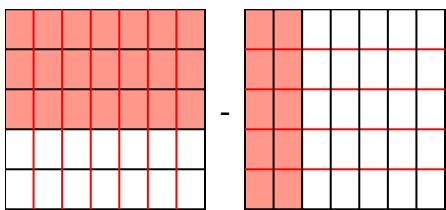
**Câu trả lời**

1. \_\_\_\_\_
2. \_\_\_\_\_
3. \_\_\_\_\_
4. \_\_\_\_\_
5. \_\_\_\_\_
6. \_\_\_\_\_
7. \_\_\_\_\_
8. \_\_\_\_\_
9. \_\_\_\_\_
10. \_\_\_\_\_

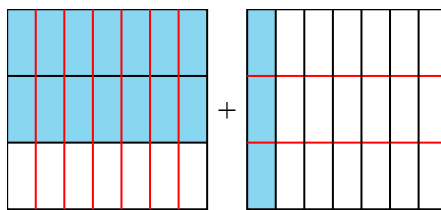


**Giải các câu hỏi.**

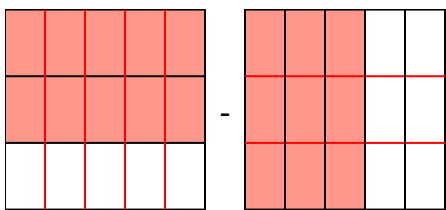
1)  $\frac{3}{5} - \frac{2}{7} = \frac{21}{35} - \frac{10}{35} = \frac{11}{35}$



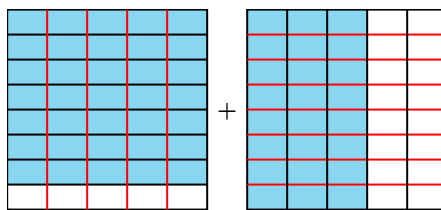
2)  $\frac{2}{3} + \frac{1}{7} = \frac{14}{21} + \frac{3}{21} = \frac{17}{21}$



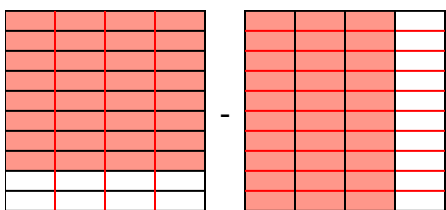
3)  $\frac{2}{3} - \frac{3}{5} = \frac{10}{15} - \frac{9}{15} = \frac{1}{15}$



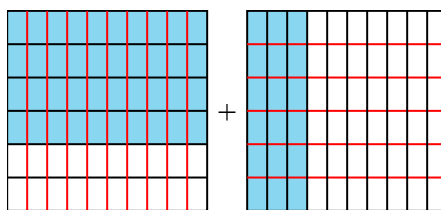
4)  $\frac{7}{8} + \frac{3}{5} = \frac{35}{40} + \frac{24}{40} = 1\frac{19}{40}$



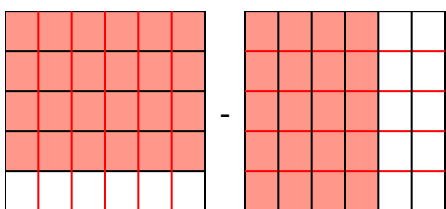
5)  $\frac{8}{10} - \frac{3}{4} = \frac{16}{20} - \frac{15}{20} = \frac{1}{20}$



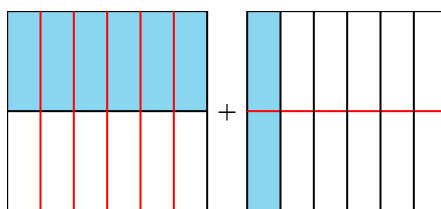
6)  $\frac{4}{6} + \frac{3}{10} = \frac{20}{30} + \frac{9}{30} = \frac{29}{30}$



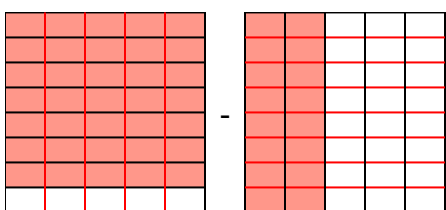
7)  $\frac{4}{5} - \frac{4}{6} = \frac{24}{30} - \frac{20}{30} = \frac{4}{30}$



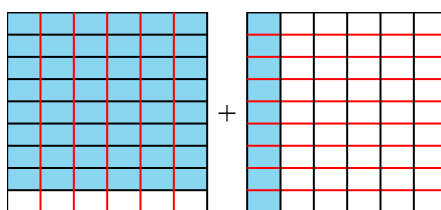
8)  $\frac{1}{2} + \frac{1}{6} = \frac{3}{6} + \frac{1}{6} = \frac{4}{6}$



9)  $\frac{7}{8} - \frac{2}{5} = \frac{35}{40} - \frac{16}{40} = \frac{19}{40}$



10)  $\frac{8}{9} + \frac{1}{6} = \frac{16}{18} + \frac{3}{18} = 1\frac{1}{18}$



**Câu trả lời**

1.  $\frac{11}{35}$
2.  $\frac{17}{21}$
3.  $\frac{1}{15}$
4.  $1\frac{19}{40}$
5.  $\frac{1}{20}$
6.  $\frac{29}{30}$
7.  $\frac{4}{30}$
8.  $\frac{4}{6}$
9.  $\frac{19}{40}$
10.  $1\frac{1}{18}$