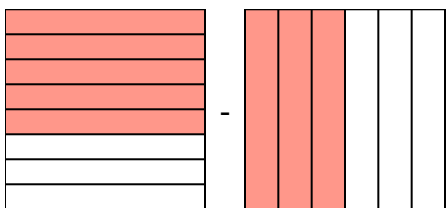


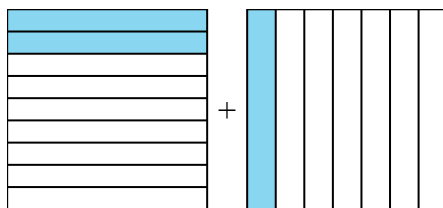


**Giải các câu hỏi.**

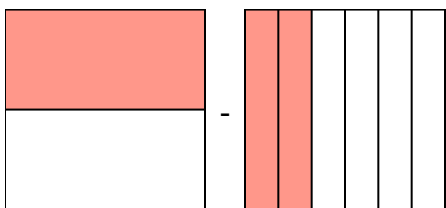
1)  $\frac{5}{8} - \frac{3}{6} =$



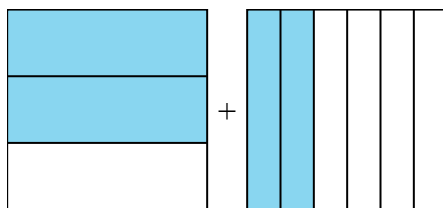
2)  $\frac{2}{9} + \frac{1}{7} =$



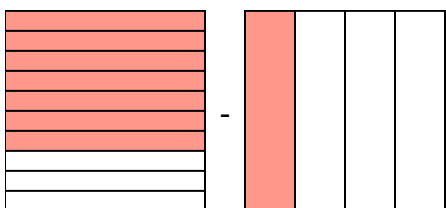
3)  $\frac{1}{2} - \frac{2}{6} =$



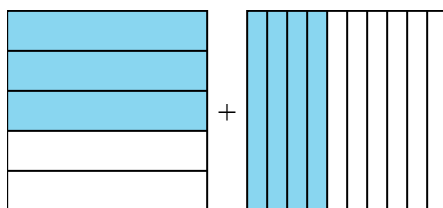
4)  $\frac{2}{3} + \frac{2}{6} =$



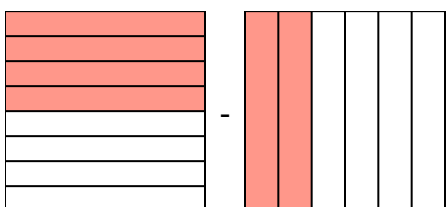
5)  $\frac{7}{10} - \frac{1}{4} =$



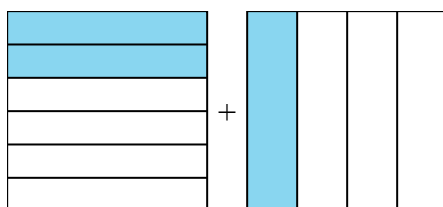
6)  $\frac{3}{5} + \frac{4}{10} =$



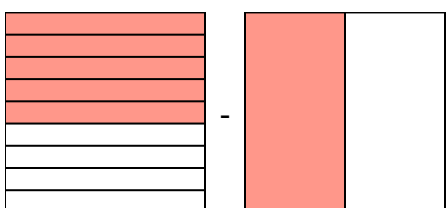
7)  $\frac{4}{8} - \frac{2}{6} =$



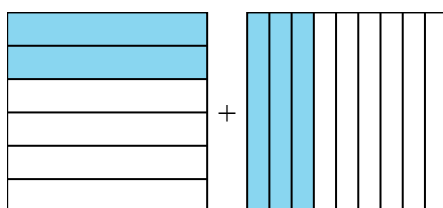
8)  $\frac{2}{6} + \frac{1}{4} =$



9)  $\frac{5}{9} - \frac{1}{2} =$



10)  $\frac{2}{6} + \frac{3}{9} =$



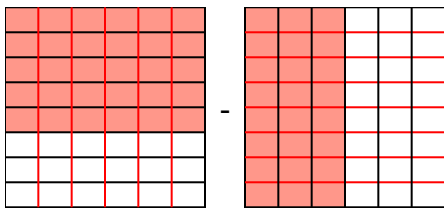
**Câu trả lời**

1. \_\_\_\_\_
2. \_\_\_\_\_
3. \_\_\_\_\_
4. \_\_\_\_\_
5. \_\_\_\_\_
6. \_\_\_\_\_
7. \_\_\_\_\_
8. \_\_\_\_\_
9. \_\_\_\_\_
10. \_\_\_\_\_

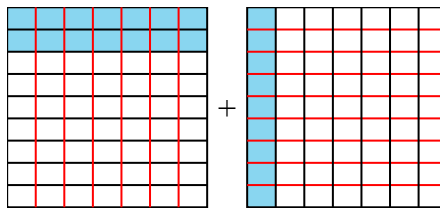


**Giải các câu hỏi.**

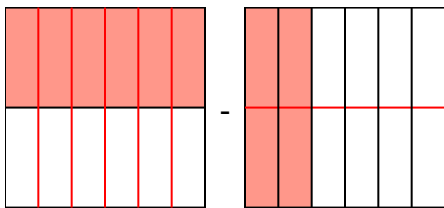
1)  $\frac{5}{8} - \frac{3}{6} = \frac{15}{24} - \frac{12}{24} = \frac{3}{24}$



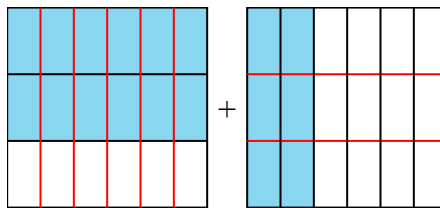
2)  $\frac{2}{9} + \frac{1}{7} = \frac{14}{63} + \frac{9}{63} = \frac{23}{63}$



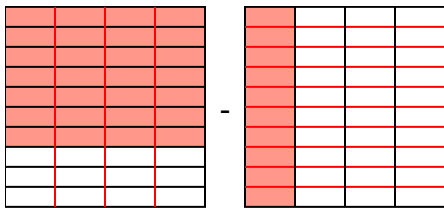
3)  $\frac{1}{2} - \frac{2}{6} = \frac{3}{6} - \frac{2}{6} = \frac{1}{6}$



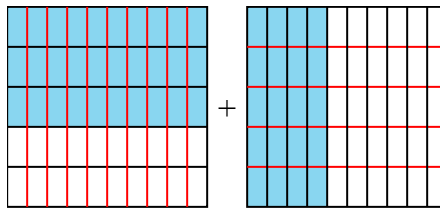
4)  $\frac{2}{3} + \frac{2}{6} = \frac{4}{6} + \frac{2}{6} = \frac{6}{6} = 1$



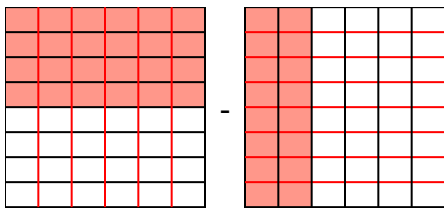
5)  $\frac{7}{10} - \frac{1}{4} = \frac{14}{20} - \frac{5}{20} = \frac{9}{20}$



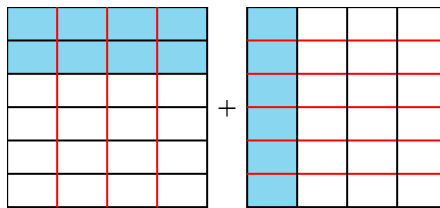
6)  $\frac{3}{5} + \frac{4}{10} = \frac{6}{10} + \frac{4}{10} = \frac{10}{10} = 1$



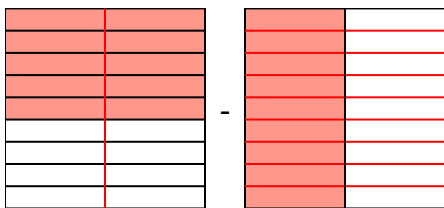
7)  $\frac{4}{8} - \frac{2}{6} = \frac{12}{24} - \frac{8}{24} = \frac{4}{24}$



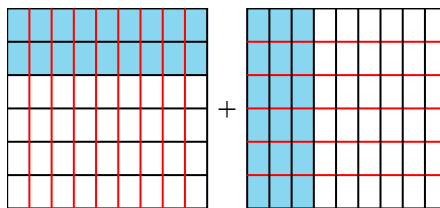
8)  $\frac{2}{6} + \frac{1}{4} = \frac{4}{12} + \frac{3}{12} = \frac{7}{12}$



9)  $\frac{5}{9} - \frac{1}{2} = \frac{10}{18} - \frac{9}{18} = \frac{1}{18}$



10)  $\frac{2}{6} + \frac{3}{9} = \frac{6}{18} + \frac{6}{18} = \frac{12}{18}$



**Câu trả lời**

1.  $\frac{3}{24}$
2.  $\frac{23}{63}$
3.  $\frac{1}{6}$
4.  $1\frac{0}{6}$
5.  $\frac{9}{20}$
6.  $1\frac{0}{10}$
7.  $\frac{4}{24}$
8.  $\frac{7}{12}$
9.  $\frac{1}{18}$
10.  $\frac{12}{18}$