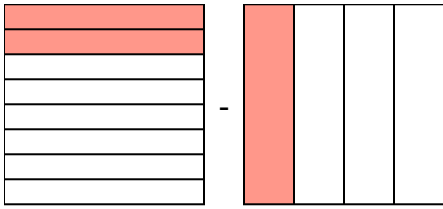


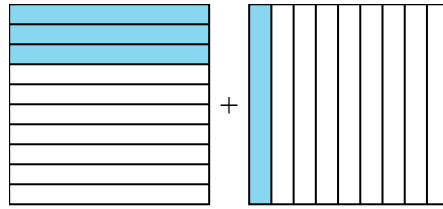


**Giải các câu hỏi.**

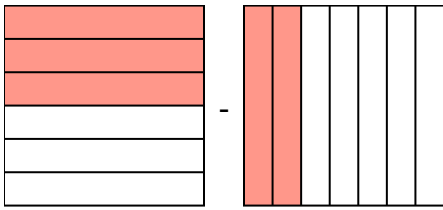
1)  $\frac{2}{8} - \frac{1}{4} =$



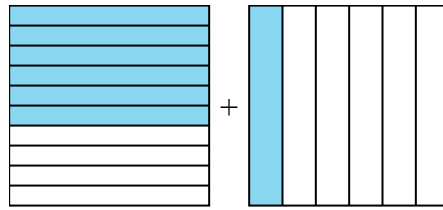
2)  $\frac{3}{10} + \frac{1}{9} =$



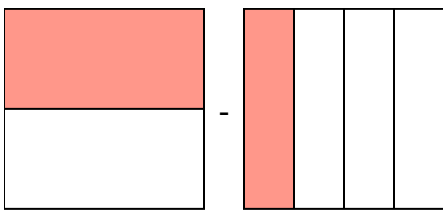
3)  $\frac{3}{6} - \frac{2}{7} =$



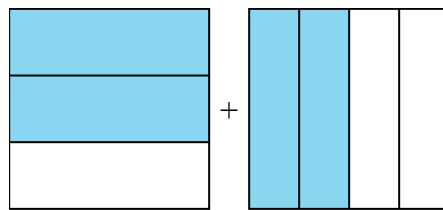
4)  $\frac{6}{10} + \frac{1}{6} =$



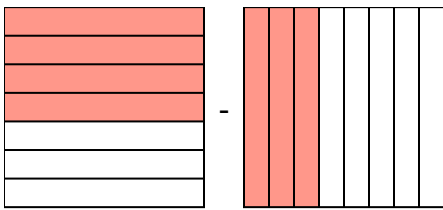
5)  $\frac{1}{2} - \frac{1}{4} =$



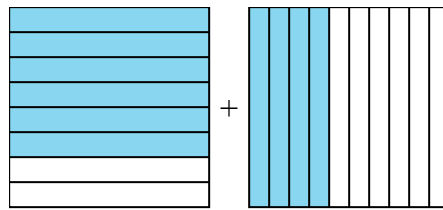
6)  $\frac{2}{3} + \frac{2}{4} =$



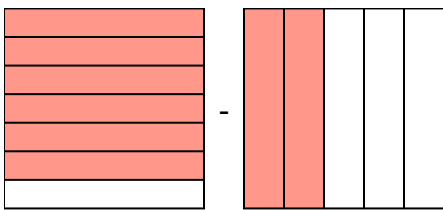
7)  $\frac{4}{7} - \frac{3}{8} =$



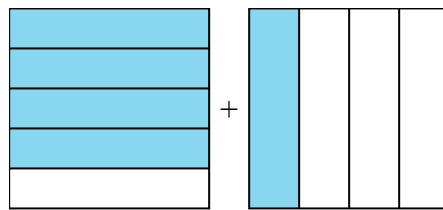
8)  $\frac{6}{8} + \frac{4}{10} =$



9)  $\frac{6}{7} - \frac{2}{5} =$



10)  $\frac{4}{5} + \frac{1}{4} =$



**Câu trả lời**

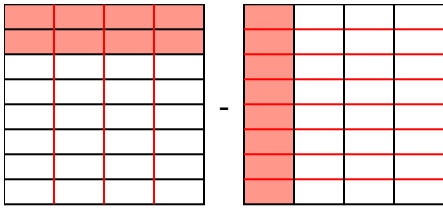
1. \_\_\_\_\_
2. \_\_\_\_\_
3. \_\_\_\_\_
4. \_\_\_\_\_
5. \_\_\_\_\_
6. \_\_\_\_\_
7. \_\_\_\_\_
8. \_\_\_\_\_
9. \_\_\_\_\_
10. \_\_\_\_\_



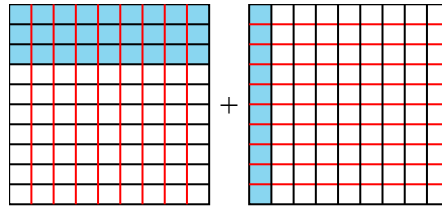
**Giải các câu hỏi.**

**Câu trả lời**

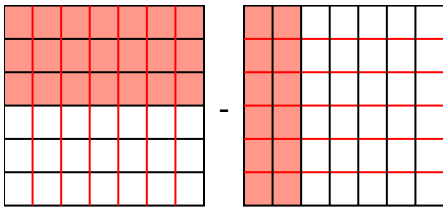
1)  $\frac{2}{8} - \frac{1}{4} = \frac{2}{8} - \frac{2}{8} = \frac{0}{8}$



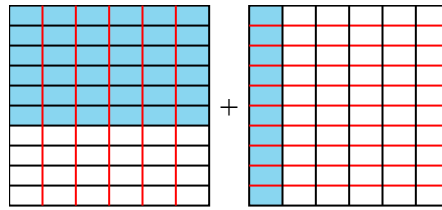
2)  $\frac{3}{10} + \frac{1}{9} = \frac{27}{90} + \frac{10}{90} = \frac{37}{90}$



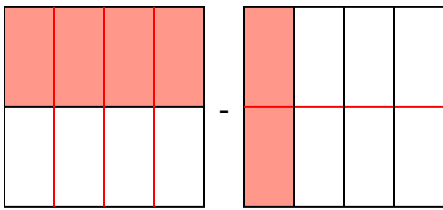
3)  $\frac{3}{6} - \frac{2}{7} = \frac{21}{42} - \frac{12}{42} = \frac{9}{42}$



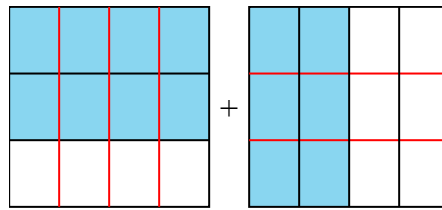
4)  $\frac{6}{10} + \frac{1}{6} = \frac{18}{30} + \frac{5}{30} = \frac{23}{30}$



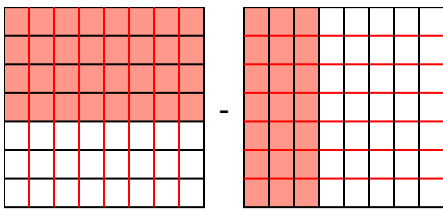
5)  $\frac{1}{2} - \frac{1}{4} = \frac{2}{4} - \frac{1}{4} = \frac{1}{4}$



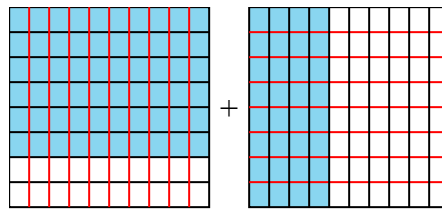
6)  $\frac{2}{3} + \frac{2}{4} = \frac{8}{12} + \frac{6}{12} = \frac{14}{12}$



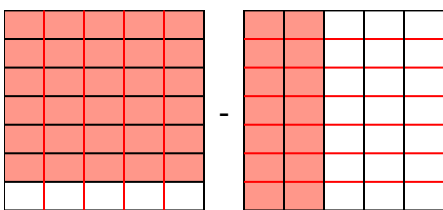
7)  $\frac{4}{7} - \frac{3}{8} = \frac{32}{56} - \frac{21}{56} = \frac{11}{56}$



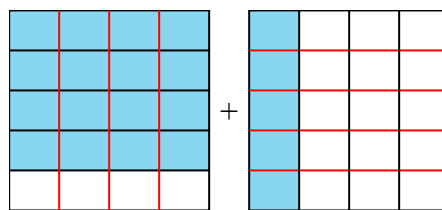
8)  $\frac{6}{8} + \frac{4}{10} = \frac{30}{40} + \frac{16}{40} = \frac{46}{40}$



9)  $\frac{6}{7} - \frac{2}{5} = \frac{30}{35} - \frac{14}{35} = \frac{16}{35}$



10)  $\frac{4}{5} + \frac{1}{4} = \frac{16}{20} + \frac{5}{20} = \frac{21}{20}$



1.  $\frac{0}{8}$
2.  $\frac{37}{90}$
3.  $\frac{9}{42}$
4.  $\frac{23}{30}$
5.  $\frac{1}{4}$
6.  $1\frac{2}{12}$
7.  $\frac{11}{56}$
8.  $1\frac{6}{40}$
9.  $\frac{16}{35}$
10.  $1\frac{1}{20}$