



Xác định đáp án nào phù hợp với mỗi câu.

1)  $\frac{5}{10} + \frac{2}{10}$

2)  $\frac{3}{10} + \frac{5}{10}$

3)  $\frac{1}{2} + \frac{1}{2}$

4)  $\frac{3}{5} + \frac{3}{5}$

5)  $\frac{1}{8} + \frac{5}{8}$

6)  $\frac{1}{3} + \frac{2}{3}$

7)  $\frac{1}{8} + \frac{6}{8}$

8)  $\frac{1}{6} + \frac{4}{6}$

9)  $\frac{6}{10} + \frac{9}{10}$

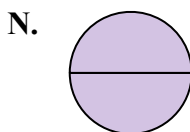
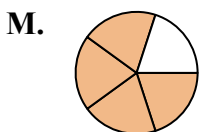
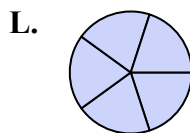
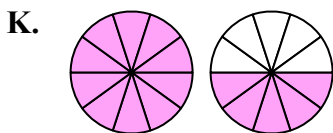
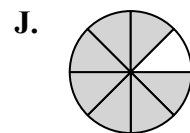
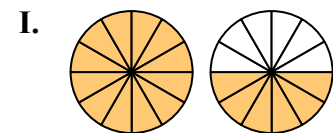
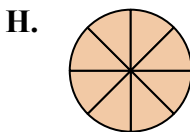
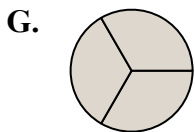
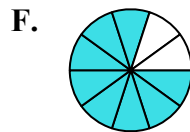
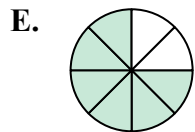
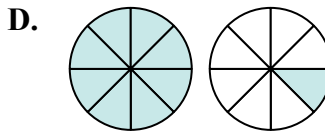
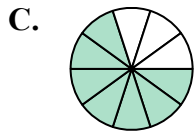
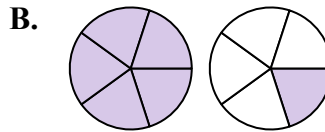
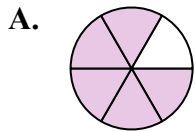
10)  $\frac{8}{12} + \frac{10}{12}$

11)  $\frac{2}{5} + \frac{2}{5}$

12)  $\frac{2}{5} + \frac{3}{5}$

13)  $\frac{4}{8} + \frac{4}{8}$

14)  $\frac{4}{8} + \frac{5}{8}$



**Câu trả lời**

1. \_\_\_\_\_

2. \_\_\_\_\_

3. \_\_\_\_\_

4. \_\_\_\_\_

5. \_\_\_\_\_

6. \_\_\_\_\_

7. \_\_\_\_\_

8. \_\_\_\_\_

9. \_\_\_\_\_

10. \_\_\_\_\_

11. \_\_\_\_\_

12. \_\_\_\_\_

13. \_\_\_\_\_

14. \_\_\_\_\_



Xác định đáp án nào phù hợp với mỗi câu.

1)  $\frac{5}{10} + \frac{2}{10}$

2)  $\frac{3}{10} + \frac{5}{10}$

3)  $\frac{1}{2} + \frac{1}{2}$

4)  $\frac{3}{5} + \frac{3}{5}$

5)  $\frac{1}{8} + \frac{5}{8}$

6)  $\frac{1}{3} + \frac{2}{3}$

7)  $\frac{1}{8} + \frac{6}{8}$

8)  $\frac{1}{6} + \frac{4}{6}$

9)  $\frac{6}{10} + \frac{9}{10}$

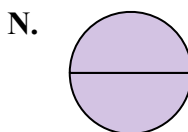
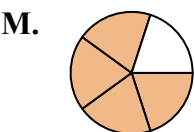
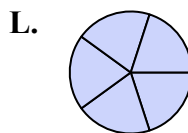
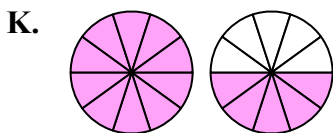
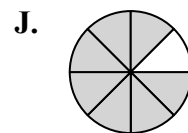
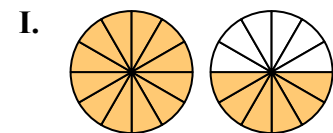
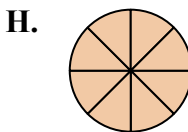
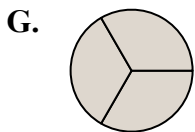
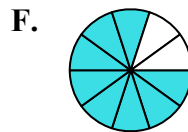
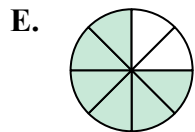
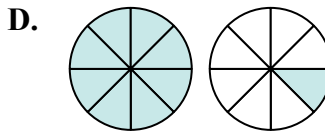
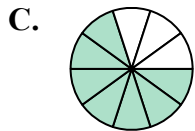
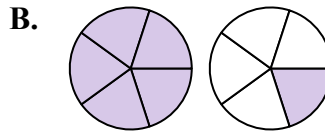
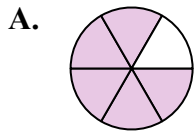
10)  $\frac{8}{12} + \frac{10}{12}$

11)  $\frac{2}{5} + \frac{2}{5}$

12)  $\frac{2}{5} + \frac{3}{5}$

13)  $\frac{4}{8} + \frac{4}{8}$

14)  $\frac{4}{8} + \frac{5}{8}$



**Câu trả lời**

1. **C**  $\frac{7}{10}$

2. **F**  $\frac{8}{10}$

3. **N**  $\frac{2}{2}$

4. **B**  $1\frac{1}{5}$

5. **E**  $\frac{6}{8}$

6. **G**  $\frac{3}{3}$

7. **J**  $\frac{7}{8}$

8. **A**  $\frac{5}{6}$

9. **K**  $1\frac{5}{10}$

10. **I**  $1\frac{6}{12}$

11. **M**  $\frac{4}{5}$

12. **L**  $\frac{5}{5}$

13. **H**  $\frac{8}{8}$

14. **D**  $1\frac{1}{8}$



Xác định đáp án nào phù hợp với mỗi câu.

**Câu trả lời**

1)  $\frac{2}{3} + \frac{1}{3}$

2)  $\frac{1}{2} + \frac{1}{2}$

3)  $\frac{3}{6} + \frac{1}{6}$

4)  $\frac{3}{5} + \frac{2}{5}$

5)  $\frac{5}{6} + \frac{4}{6}$

6)  $\frac{4}{12} + \frac{8}{12}$

7)  $\frac{5}{12} + \frac{1}{12}$

8)  $\frac{4}{6} + \frac{2}{6}$

9)  $\frac{4}{8} + \frac{1}{8}$

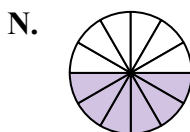
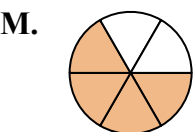
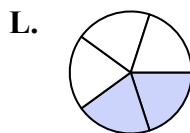
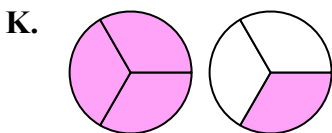
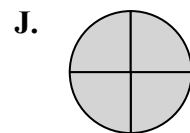
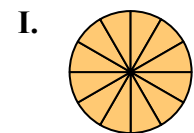
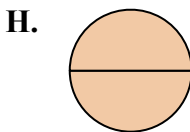
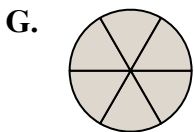
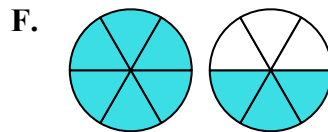
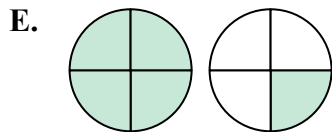
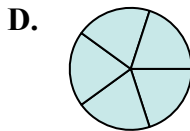
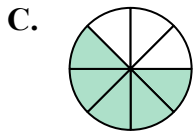
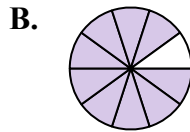
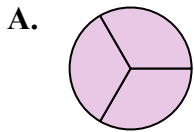
10)  $\frac{2}{3} + \frac{2}{3}$

11)  $\frac{1}{5} + \frac{1}{5}$

12)  $\frac{2}{10} + \frac{7}{10}$

13)  $\frac{1}{4} + \frac{3}{4}$

14)  $\frac{3}{4} + \frac{2}{4}$



1. \_\_\_\_\_
2. \_\_\_\_\_
3. \_\_\_\_\_
4. \_\_\_\_\_
5. \_\_\_\_\_
6. \_\_\_\_\_
7. \_\_\_\_\_
8. \_\_\_\_\_
9. \_\_\_\_\_
10. \_\_\_\_\_
11. \_\_\_\_\_
12. \_\_\_\_\_
13. \_\_\_\_\_
14. \_\_\_\_\_



Xác định đáp án nào phù hợp với mỗi câu.

1)  $\frac{2}{3} + \frac{1}{3}$

3)  $\frac{3}{6} + \frac{1}{6}$

5)  $\frac{5}{6} + \frac{4}{6}$

7)  $\frac{5}{12} + \frac{1}{12}$

9)  $\frac{4}{8} + \frac{1}{8}$

11)  $\frac{1}{5} + \frac{1}{5}$

13)  $\frac{1}{4} + \frac{3}{4}$

2)  $\frac{1}{2} + \frac{1}{2}$

4)  $\frac{3}{5} + \frac{2}{5}$

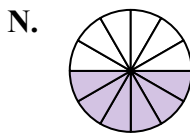
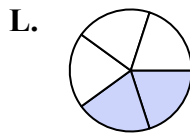
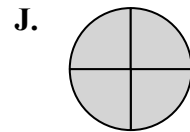
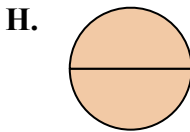
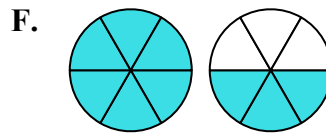
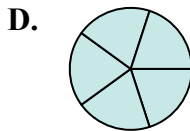
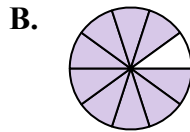
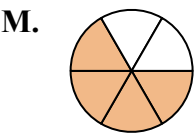
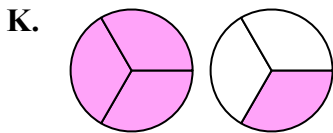
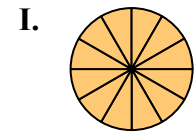
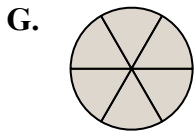
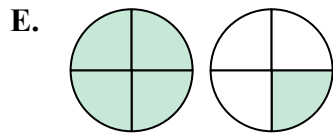
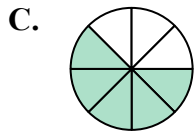
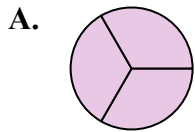
6)  $\frac{4}{12} + \frac{8}{12}$

8)  $\frac{4}{6} + \frac{2}{6}$

10)  $\frac{2}{3} + \frac{2}{3}$

12)  $\frac{2}{10} + \frac{7}{10}$

14)  $\frac{3}{4} + \frac{2}{4}$



**Câu trả lời**

1. **A**  $\frac{3}{3}$

2. **H**  $\frac{2}{2}$

3. **M**  $\frac{4}{6}$

4. **D**  $\frac{5}{5}$

5. **F**  $1\frac{3}{6}$

6. **I**  $\frac{12}{12}$

7. **N**  $\frac{6}{12}$

8. **G**  $\frac{6}{6}$

9. **C**  $\frac{5}{8}$

10. **K**  $1\frac{1}{3}$

11. **L**  $\frac{2}{5}$

12. **B**  $\frac{9}{10}$

13. **J**  $\frac{4}{4}$

14. **E**  $1\frac{1}{4}$



Xác định đáp án nào phù hợp với mỗi câu.

1)  $\frac{2}{4} + \frac{3}{4}$

2)  $\frac{1}{12} + \frac{3}{12}$

3)  $\frac{6}{10} + \frac{3}{10}$

4)  $\frac{4}{10} + \frac{4}{10}$

5)  $\frac{3}{12} + \frac{5}{12}$

6)  $\frac{1}{2} + \frac{1}{2}$

7)  $\frac{1}{6} + \frac{5}{6}$

8)  $\frac{1}{3} + \frac{2}{3}$

9)  $\frac{2}{5} + \frac{2}{5}$

10)  $\frac{3}{4} + \frac{3}{4}$

11)  $\frac{2}{4} + \frac{2}{4}$

12)  $\frac{2}{4} + \frac{1}{4}$

13)  $\frac{4}{5} + \frac{2}{5}$

14)  $\frac{1}{6} + \frac{2}{6}$

**Câu trả lời**

1. \_\_\_\_\_

2. \_\_\_\_\_

3. \_\_\_\_\_

4. \_\_\_\_\_

5. \_\_\_\_\_

6. \_\_\_\_\_

7. \_\_\_\_\_

8. \_\_\_\_\_

9. \_\_\_\_\_

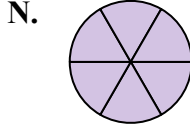
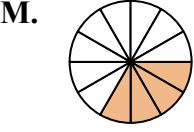
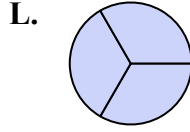
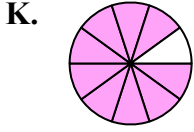
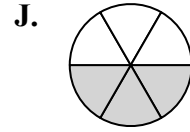
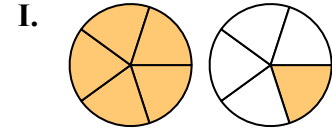
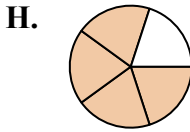
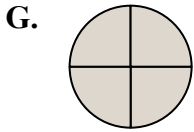
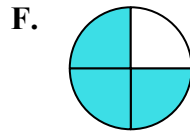
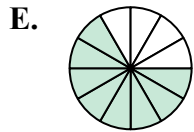
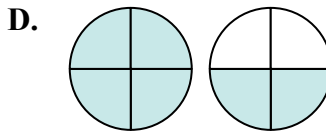
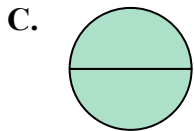
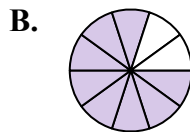
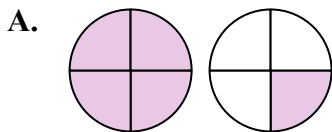
10. \_\_\_\_\_

11. \_\_\_\_\_

12. \_\_\_\_\_

13. \_\_\_\_\_

14. \_\_\_\_\_





Xác định đáp án nào phù hợp với mỗi câu.

1)  $\frac{2}{4} + \frac{3}{4}$

3)  $\frac{6}{10} + \frac{3}{10}$

5)  $\frac{3}{12} + \frac{5}{12}$

7)  $\frac{1}{6} + \frac{5}{6}$

9)  $\frac{2}{5} + \frac{2}{5}$

11)  $\frac{2}{4} + \frac{2}{4}$

13)  $\frac{4}{5} + \frac{2}{5}$

2)  $\frac{1}{12} + \frac{3}{12}$

4)  $\frac{4}{10} + \frac{4}{10}$

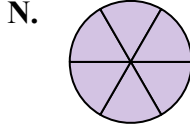
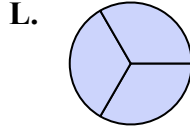
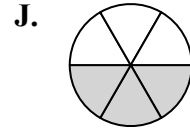
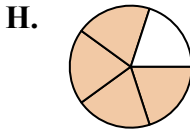
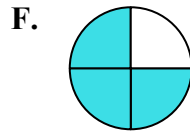
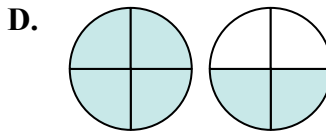
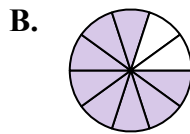
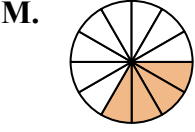
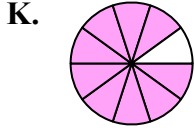
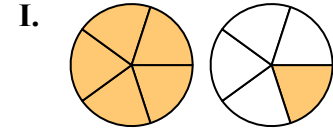
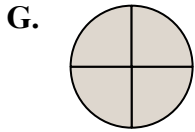
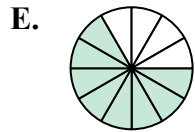
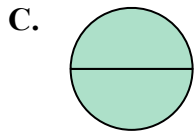
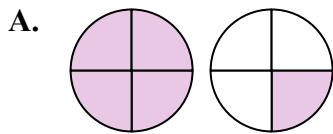
6)  $\frac{1}{2} + \frac{1}{2}$

8)  $\frac{1}{3} + \frac{2}{3}$

10)  $\frac{3}{4} + \frac{3}{4}$

12)  $\frac{2}{4} + \frac{1}{4}$

14)  $\frac{1}{6} + \frac{2}{6}$



**Câu trả lời**

1. **A**  $1\frac{1}{4}$

2. **M**  $\frac{4}{12}$

3. **K**  $\frac{9}{10}$

4. **B**  $\frac{8}{10}$

5. **E**  $\frac{8}{12}$

6. **C**  $\frac{2}{2}$

7. **N**  $\frac{6}{6}$

8. **L**  $\frac{3}{3}$

9. **H**  $\frac{4}{5}$

10. **D**  $1\frac{2}{4}$

11. **G**  $\frac{4}{4}$

12. **F**  $\frac{3}{4}$

13. **I**  $1\frac{1}{5}$

14. **J**  $\frac{3}{6}$



Xác định đáp án nào phù hợp với mỗi câu.

1)  $\frac{2}{3} + \frac{1}{3}$

2)  $\frac{2}{5} + \frac{1}{5}$

3)  $\frac{5}{8} + \frac{4}{8}$

4)  $\frac{6}{8} + \frac{4}{8}$

5)  $\frac{8}{10} + \frac{5}{10}$

6)  $\frac{1}{6} + \frac{4}{6}$

7)  $\frac{5}{8} + \frac{6}{8}$

8)  $\frac{3}{4} + \frac{3}{4}$

9)  $\frac{7}{10} + \frac{3}{10}$

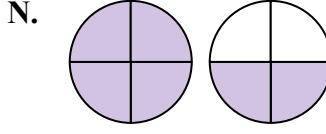
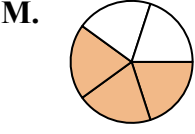
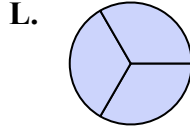
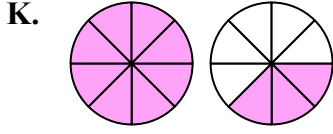
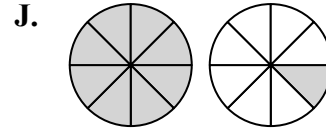
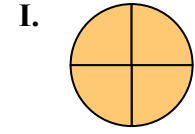
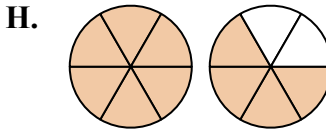
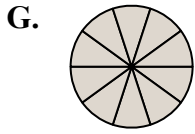
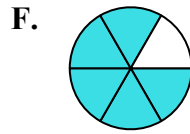
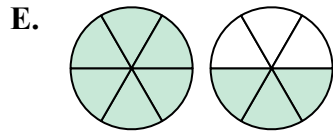
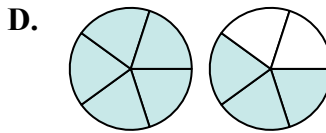
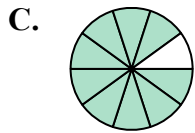
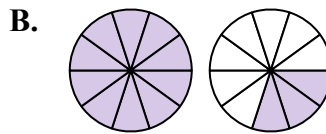
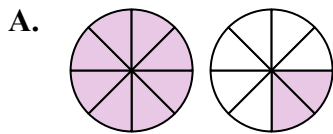
10)  $\frac{2}{4} + \frac{2}{4}$

11)  $\frac{4}{6} + \frac{5}{6}$

12)  $\frac{5}{6} + \frac{5}{6}$

13)  $\frac{4}{10} + \frac{5}{10}$

14)  $\frac{4}{5} + \frac{4}{5}$



**Câu trả lời**

1. \_\_\_\_\_

2. \_\_\_\_\_

3. \_\_\_\_\_

4. \_\_\_\_\_

5. \_\_\_\_\_

6. \_\_\_\_\_

7. \_\_\_\_\_

8. \_\_\_\_\_

9. \_\_\_\_\_

10. \_\_\_\_\_

11. \_\_\_\_\_

12. \_\_\_\_\_

13. \_\_\_\_\_

14. \_\_\_\_\_



Xác định đáp án nào phù hợp với mỗi câu.

1)  $\frac{2}{3} + \frac{1}{3}$

2)  $\frac{2}{5} + \frac{1}{5}$

3)  $\frac{5}{8} + \frac{4}{8}$

4)  $\frac{6}{8} + \frac{4}{8}$

5)  $\frac{8}{10} + \frac{5}{10}$

6)  $1 + \frac{4}{6}$

7)  $\frac{5}{8} + \frac{6}{8}$

8)  $\frac{3}{4} + \frac{3}{4}$

9)  $\frac{7}{10} + \frac{3}{10}$

10)  $\frac{2}{4} + \frac{2}{4}$

11)  $\frac{4}{6} + \frac{5}{6}$

12)  $\frac{5}{6} + \frac{5}{6}$

13)  $\frac{4}{10} + \frac{5}{10}$

14)  $\frac{4}{5} + \frac{4}{5}$

**Câu trả lời**

1.     **L**  $\frac{3}{3}$     

2.     **M**  $\frac{3}{5}$     

3.     **J**  $1\frac{1}{8}$     

4.     **A**  $1\frac{2}{8}$     

5.     **B**  $1\frac{3}{10}$     

6.     **F**  $\frac{5}{6}$     

7.     **K**  $1\frac{3}{8}$     

8.     **N**  $1\frac{2}{4}$     

9.     **G**  $\frac{10}{10}$     

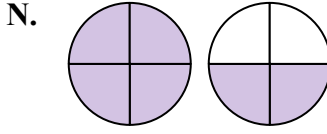
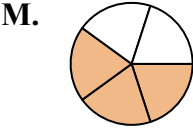
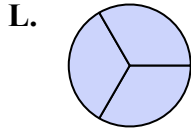
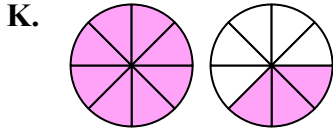
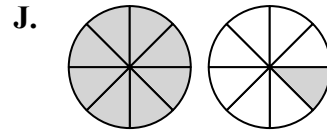
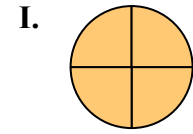
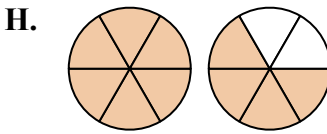
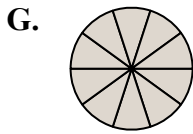
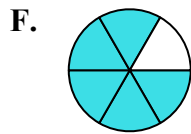
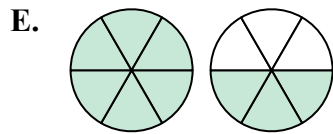
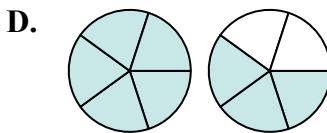
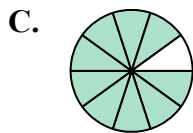
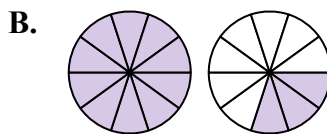
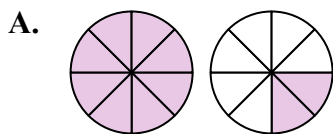
10.     **I**  $\frac{4}{4}$     

11.     **E**  $1\frac{3}{6}$     

12.     **H**  $1\frac{4}{6}$     

13.     **C**  $\frac{9}{10}$     

14.     **D**  $1\frac{3}{5}$     







Xác định đáp án nào phù hợp với mỗi câu.

**Câu trả lời**

1)  $\frac{7}{10} + \frac{3}{10}$

2)  $\frac{2}{3} + \frac{1}{3}$

3)  $\frac{2}{4} + \frac{1}{4}$

4)  $\frac{3}{6} + \frac{4}{6}$

5)  $\frac{8}{12} + \frac{6}{12}$

6)  $\frac{7}{8} + \frac{4}{8}$

7)  $\frac{5}{12} + \frac{3}{12}$

8)  $\frac{1}{12} + \frac{2}{12}$

9)  $\frac{1}{3} + \frac{1}{3}$

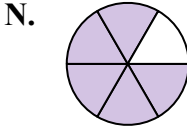
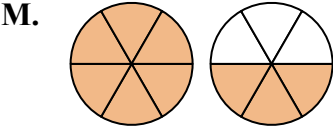
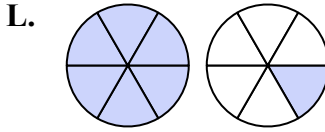
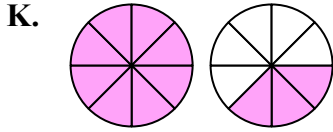
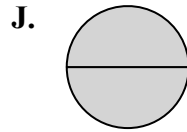
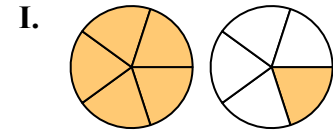
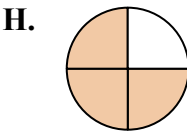
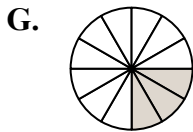
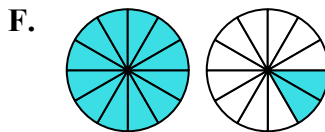
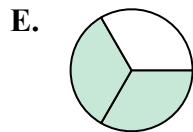
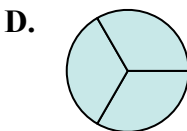
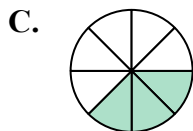
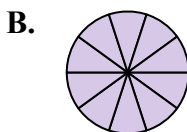
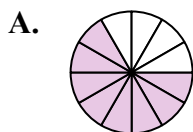
10)  $\frac{1}{2} + \frac{1}{2}$

11)  $\frac{3}{6} + \frac{2}{6}$

12)  $\frac{1}{8} + \frac{2}{8}$

13)  $\frac{2}{5} + \frac{4}{5}$

14)  $\frac{5}{6} + \frac{4}{6}$



1. \_\_\_\_\_

2. \_\_\_\_\_

3. \_\_\_\_\_

4. \_\_\_\_\_

5. \_\_\_\_\_

6. \_\_\_\_\_

7. \_\_\_\_\_

8. \_\_\_\_\_

9. \_\_\_\_\_

10. \_\_\_\_\_

11. \_\_\_\_\_

12. \_\_\_\_\_

13. \_\_\_\_\_

14. \_\_\_\_\_



Xác định đáp án nào phù hợp với mỗi câu.

1)  $\frac{7}{10} + \frac{3}{10}$

3)  $\frac{2}{4} + \frac{1}{4}$

5)  $\frac{8}{12} + \frac{6}{12}$

7)  $\frac{5}{12} + \frac{3}{12}$

9)  $\frac{1}{3} + \frac{1}{3}$

11)  $\frac{3}{6} + \frac{2}{6}$

13)  $\frac{2}{5} + \frac{4}{5}$

2)  $\frac{2}{3} + \frac{1}{3}$

4)  $\frac{3}{6} + \frac{4}{6}$

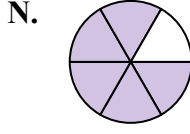
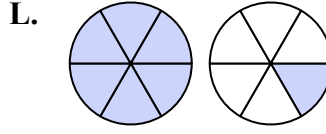
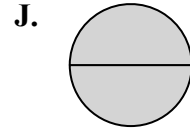
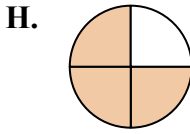
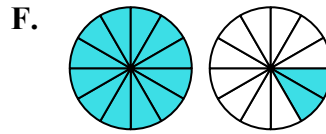
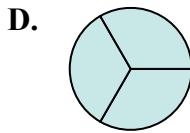
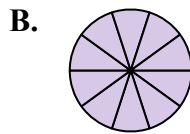
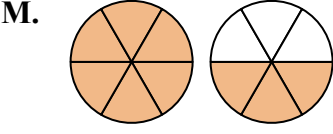
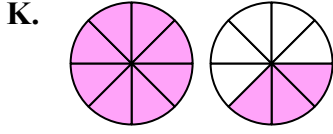
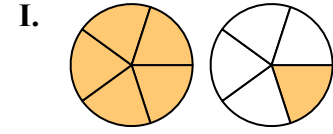
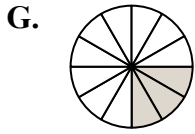
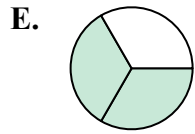
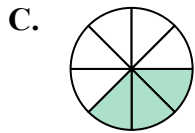
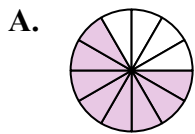
6)  $\frac{7}{8} + \frac{4}{8}$

8)  $\frac{1}{12} + \frac{2}{12}$

10)  $\frac{1}{2} + \frac{1}{2}$

12)  $\frac{1}{8} + \frac{2}{8}$

14)  $\frac{5}{6} + \frac{4}{6}$



**Câu trả lời**

1. **B**  $\frac{10}{10}$

2. **D**  $\frac{3}{3}$

3. **H**  $\frac{3}{4}$

4. **L**  $1\frac{1}{6}$

5. **F**  $1\frac{2}{12}$

6. **K**  $1\frac{3}{8}$

7. **A**  $\frac{8}{12}$

8. **G**  $\frac{3}{12}$

9. **E**  $\frac{2}{3}$

10. **J**  $\frac{2}{2}$

11. **N**  $\frac{5}{6}$

12. **C**  $\frac{3}{8}$

13. **I**  $1\frac{1}{5}$

14. **M**  $1\frac{3}{6}$



Xác định đáp án nào phù hợp với mỗi câu.

**Câu trả lời**

1)  $\frac{4}{6} + \frac{5}{6}$

2)  $\frac{8}{12} + \frac{10}{12}$

3)  $\frac{3}{6} + \frac{2}{6}$

4)  $\frac{3}{6} + \frac{5}{6}$

5)  $\frac{5}{10} + \frac{2}{10}$

6)  $\frac{2}{10} + \frac{7}{10}$

7)  $\frac{4}{5} + \frac{3}{5}$

8)  $\frac{1}{3} + \frac{1}{3}$

9)  $\frac{7}{12} + \frac{6}{12}$

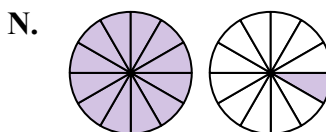
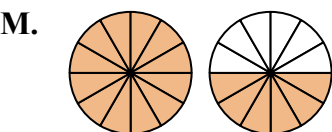
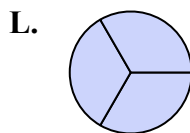
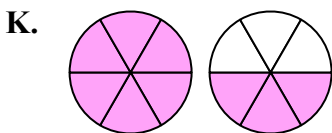
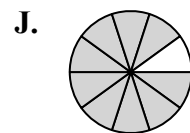
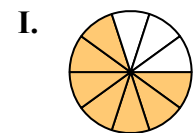
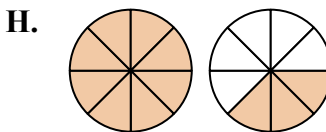
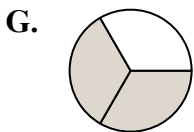
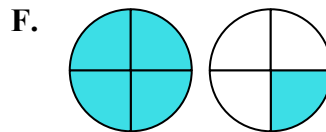
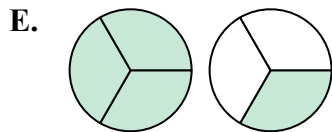
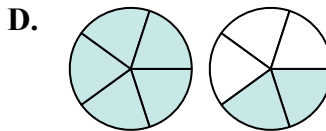
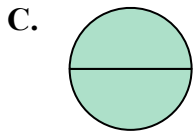
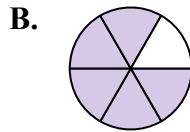
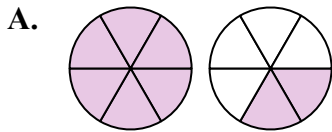
10)  $\frac{1}{3} + \frac{2}{3}$

11)  $\frac{2}{4} + \frac{3}{4}$

12)  $\frac{2}{3} + \frac{2}{3}$

13)  $\frac{7}{8} + \frac{4}{8}$

14)  $\frac{1}{2} + \frac{1}{2}$



1. \_\_\_\_\_
2. \_\_\_\_\_
3. \_\_\_\_\_
4. \_\_\_\_\_
5. \_\_\_\_\_
6. \_\_\_\_\_
7. \_\_\_\_\_
8. \_\_\_\_\_
9. \_\_\_\_\_
10. \_\_\_\_\_
11. \_\_\_\_\_
12. \_\_\_\_\_
13. \_\_\_\_\_
14. \_\_\_\_\_



Xác định đáp án nào phù hợp với mỗi câu.

1)  $\frac{4}{6} + \frac{5}{6}$

3)  $\frac{3}{6} + \frac{2}{6}$

5)  $\frac{5}{10} + \frac{2}{10}$

7)  $\frac{4}{5} + \frac{3}{5}$

9)  $\frac{7}{12} + \frac{6}{12}$

11)  $\frac{2}{4} + \frac{3}{4}$

13)  $\frac{7}{8} + \frac{4}{8}$

2)  $\frac{8}{12} + \frac{10}{12}$

4)  $\frac{3}{6} + \frac{5}{6}$

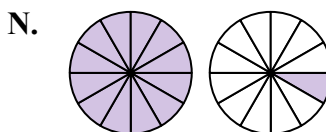
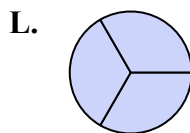
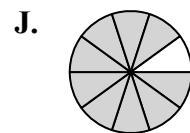
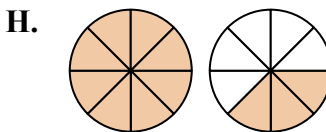
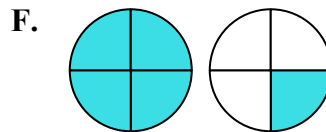
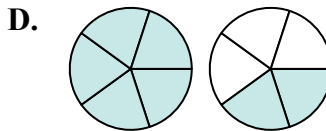
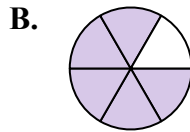
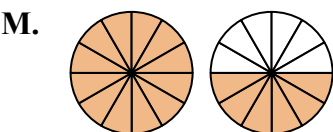
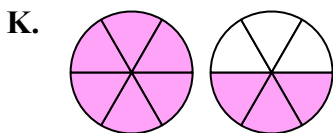
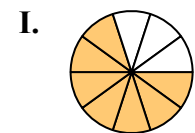
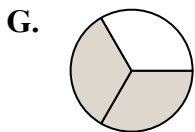
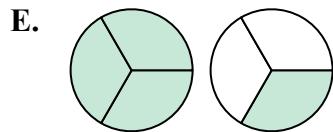
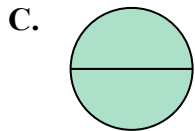
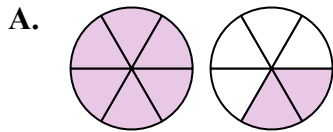
6)  $\frac{2}{10} + \frac{7}{10}$

8)  $\frac{1}{3} + \frac{1}{3}$

10)  $\frac{1}{3} + \frac{2}{3}$

12)  $\frac{2}{3} + \frac{2}{3}$

14)  $\frac{1}{2} + \frac{1}{2}$



**Câu trả lời**

1. **K**  $1\frac{3}{6}$

2. **M**  $1\frac{6}{12}$

3. **B**  $\frac{5}{6}$

4. **A**  $1\frac{2}{6}$

5. **I**  $\frac{7}{10}$

6. **J**  $\frac{9}{10}$

7. **D**  $1\frac{2}{5}$

8. **G**  $\frac{2}{3}$

9. **N**  $1\frac{1}{12}$

10. **L**  $\frac{3}{3}$

11. **F**  $1\frac{1}{4}$

12. **E**  $1\frac{1}{3}$

13. **H**  $1\frac{3}{8}$

14. **C**  $\frac{2}{2}$



Xác định đáp án nào phù hợp với mỗi câu.

**Câu trả lời**

1)  $\frac{9}{10} + \frac{7}{10}$

2)  $\frac{9}{10} + \frac{1}{10}$

3)  $\frac{4}{6} + \frac{1}{6}$

4)  $\frac{6}{8} + \frac{3}{8}$

5)  $\frac{2}{6} + \frac{1}{6}$

6)  $\frac{3}{10} + \frac{3}{10}$

7)  $\frac{2}{5} + \frac{1}{5}$

8)  $\frac{7}{8} + \frac{1}{8}$

9)  $\frac{1}{2} + \frac{1}{2}$

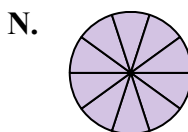
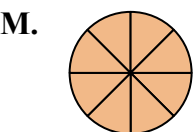
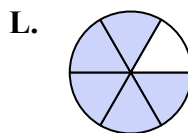
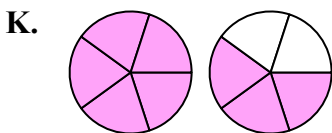
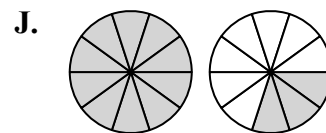
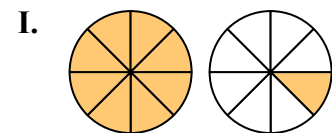
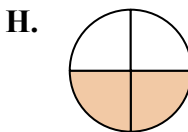
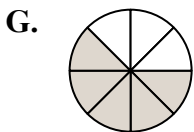

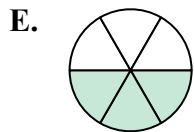
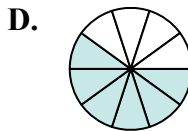
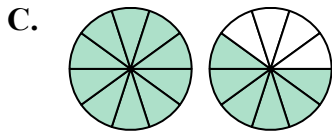
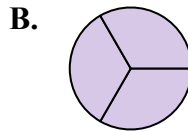
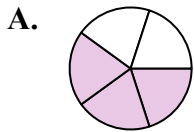
10)  $\frac{4}{5} + \frac{4}{5}$

11)  $\frac{8}{10} + \frac{5}{10}$

12)  $\frac{1}{3} + \frac{2}{3}$

13)  $\frac{2}{8} + \frac{3}{8}$

14)  $\frac{1}{4} + \frac{1}{4}$



1. \_\_\_\_\_
2. \_\_\_\_\_
3. \_\_\_\_\_
4. \_\_\_\_\_
5. \_\_\_\_\_
6. \_\_\_\_\_
7. \_\_\_\_\_
8. \_\_\_\_\_
9. \_\_\_\_\_
10. \_\_\_\_\_
11. \_\_\_\_\_
12. \_\_\_\_\_
13. \_\_\_\_\_
14. \_\_\_\_\_



Xác định đáp án nào phù hợp với mỗi câu.

1)  $\frac{9}{10} + \frac{7}{10}$

3)  $\frac{4}{6} + \frac{1}{6}$

5)  $\frac{2}{6} + \frac{1}{6}$

7)  $\frac{2}{5} + \frac{1}{5}$

9)  $\frac{1}{2} + \frac{1}{2}$

11)  $\frac{8}{10} + \frac{5}{10}$

13)  $\frac{2}{8} + \frac{3}{8}$

2)  $\frac{9}{10} + \frac{1}{10}$

4)  $\frac{6}{8} + \frac{3}{8}$

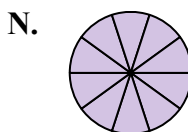
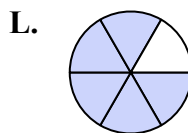
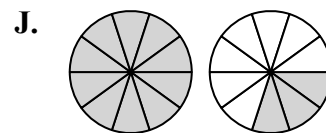
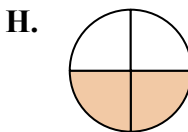

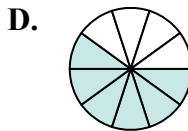
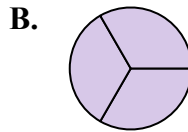
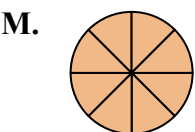
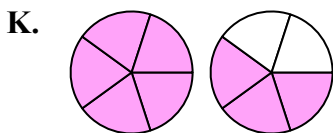
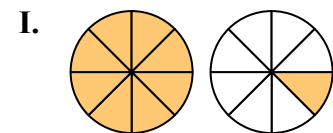
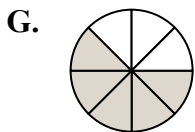
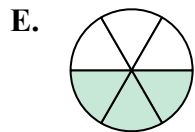
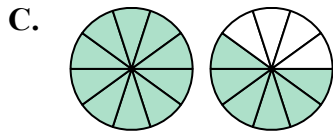
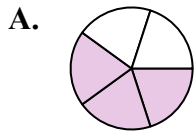
6)  $\frac{3}{10} + \frac{3}{10}$

8)  $\frac{7}{8} + \frac{1}{8}$

10)  $\frac{4}{5} + \frac{4}{5}$

12)  $\frac{1}{3} + \frac{2}{3}$

14)  $\frac{1}{4} + \frac{1}{4}$



**Câu trả lời**

1. **C**  $1\frac{6}{10}$

2. **N**  $1\frac{10}{10}$

3. **L**  $\frac{5}{6}$

4. **I**  $1\frac{1}{8}$

5. **E**  $\frac{3}{6}$

6. **D**  $\frac{6}{10}$

7. **A**  $\frac{3}{5}$

8. **M**  $\frac{8}{8}$

9. **F**  $\frac{2}{2}$

10. **K**  $1\frac{3}{5}$

11. **J**  $1\frac{3}{10}$

12. **B**  $\frac{3}{3}$

13. **G**  $\frac{5}{8}$

14. **H**  $\frac{2}{4}$



Xác định đáp án nào phù hợp với mỗi câu.

**Câu trả lời**

1)  $\frac{1}{8} + \frac{2}{8}$

2)  $\frac{4}{6} + \frac{3}{6}$

3)  $\frac{2}{6} + \frac{3}{6}$

4)  $\frac{4}{6} + \frac{2}{6}$

5)  $\frac{3}{5} + \frac{1}{5}$

6)  $\frac{3}{4} + \frac{3}{4}$

7)  $\frac{1}{2} + \frac{1}{2}$

8)  $\frac{4}{5} + \frac{4}{5}$

9)  $\frac{3}{6} + \frac{5}{6}$

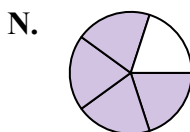
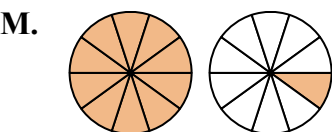
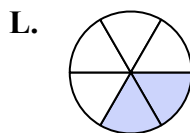
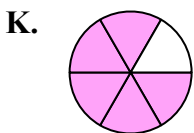
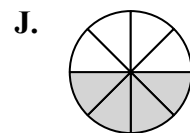
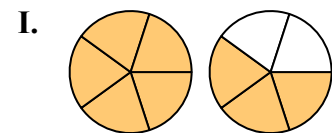
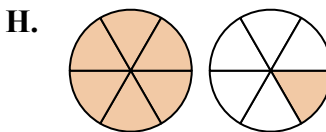
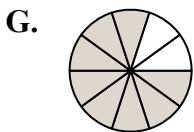
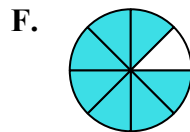
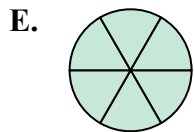
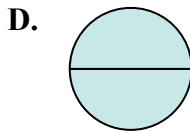
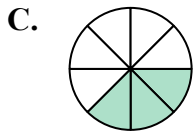
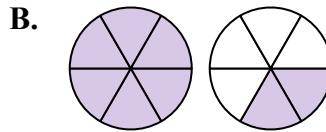
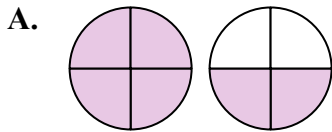
10)  $\frac{2}{10} + \frac{9}{10}$

11)  $\frac{3}{10} + \frac{5}{10}$

12)  $\frac{1}{6} + \frac{1}{6}$

13)  $\frac{5}{8} + \frac{2}{8}$

14)  $\frac{2}{8} + \frac{2}{8}$



1. \_\_\_\_\_
2. \_\_\_\_\_
3. \_\_\_\_\_
4. \_\_\_\_\_
5. \_\_\_\_\_
6. \_\_\_\_\_
7. \_\_\_\_\_
8. \_\_\_\_\_
9. \_\_\_\_\_
10. \_\_\_\_\_
11. \_\_\_\_\_
12. \_\_\_\_\_
13. \_\_\_\_\_
14. \_\_\_\_\_



Xác định đáp án nào phù hợp với mỗi câu.

1)  $\frac{1}{8} + \frac{2}{8}$

3)  $\frac{2}{6} + \frac{3}{6}$

5)  $\frac{3}{5} + \frac{1}{5}$

7)  $\frac{1}{2} + \frac{1}{2}$

9)  $\frac{3}{6} + \frac{5}{6}$

11)  $\frac{3}{10} + \frac{5}{10}$

13)  $\frac{5}{8} + \frac{2}{8}$

2)  $\frac{4}{6} + \frac{3}{6}$

4)  $\frac{4}{6} + \frac{2}{6}$

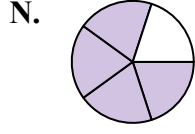
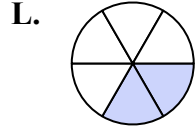
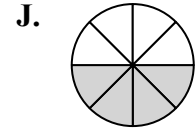
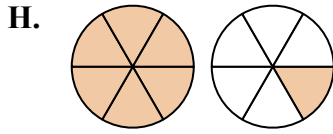
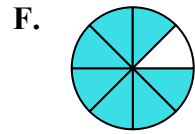
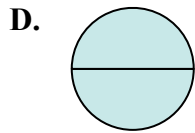
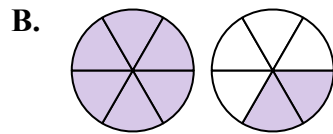
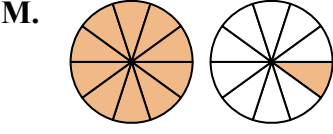
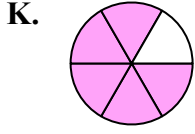
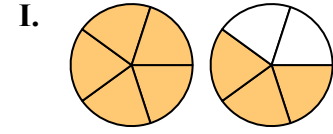
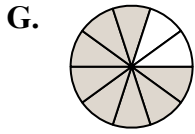
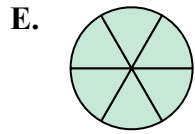
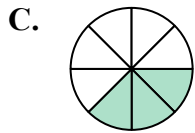
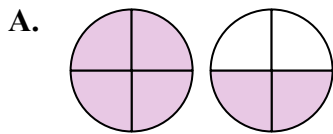
6)  $\frac{3}{4} + \frac{3}{4}$

8)  $\frac{4}{5} + \frac{4}{5}$

10)  $\frac{2}{10} + \frac{9}{10}$

12)  $\frac{1}{6} + \frac{1}{6}$

14)  $\frac{2}{8} + \frac{2}{8}$



**Câu trả lời**

1. **C**  $\frac{3}{8}$

2. **H**  $1\frac{1}{6}$

3. **K**  $\frac{5}{6}$

4. **E**  $\frac{6}{6}$

5. **N**  $\frac{4}{5}$

6. **A**  $1\frac{2}{4}$

7. **D**  $\frac{2}{2}$

8. **I**  $1\frac{3}{5}$

9. **B**  $1\frac{2}{6}$

10. **M**  $1\frac{1}{10}$

11. **G**  $\frac{8}{10}$

12. **L**  $\frac{2}{6}$

13. **F**  $\frac{7}{8}$

14. **J**  $\frac{4}{8}$





Xác định đáp án nào phù hợp với mỗi câu.

1)  $\frac{2}{3} + \frac{2}{3}$

2)  $\frac{2}{8} + \frac{2}{8}$

3)  $\frac{4}{12} + \frac{8}{12}$

4)  $\frac{4}{12} + \frac{7}{12}$

5)  $\frac{1}{2} + \frac{1}{2}$

6)  $\frac{3}{5} + \frac{3}{5}$

7)  $\frac{2}{6} + \frac{4}{6}$

8)  $\frac{1}{5} + \frac{2}{5}$

9)  $\frac{6}{10} + \frac{8}{10}$

10)  $\frac{1}{3} + \frac{1}{3}$

11)  $\frac{9}{10} + \frac{4}{10}$

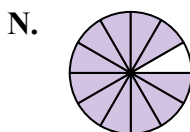
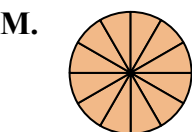
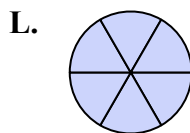
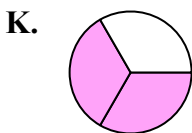
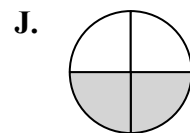
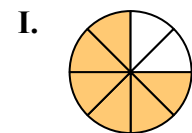
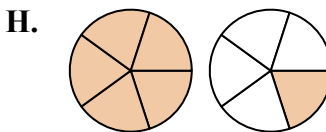
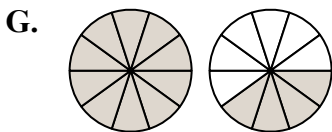
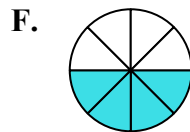
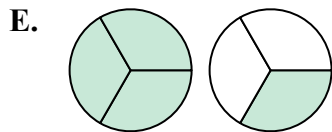
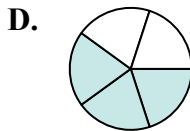
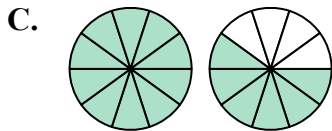
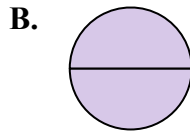
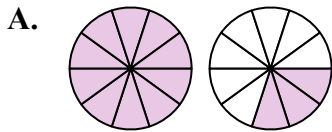
12)  $\frac{1}{8} + \frac{5}{8}$

13)  $\frac{1}{4} + \frac{1}{4}$

14)  $\frac{9}{10} + \frac{7}{10}$

**Câu trả lời**

1. \_\_\_\_\_
2. \_\_\_\_\_
3. \_\_\_\_\_
4. \_\_\_\_\_
5. \_\_\_\_\_
6. \_\_\_\_\_
7. \_\_\_\_\_
8. \_\_\_\_\_
9. \_\_\_\_\_
10. \_\_\_\_\_
11. \_\_\_\_\_
12. \_\_\_\_\_
13. \_\_\_\_\_
14. \_\_\_\_\_





Xác định đáp án nào phù hợp với mỗi câu.

1)  $\frac{2}{3} + \frac{2}{3}$

3)  $\frac{4}{12} + \frac{8}{12}$

5)  $\frac{1}{2} + \frac{1}{2}$

7)  $\frac{2}{6} + \frac{4}{6}$

9)  $\frac{6}{10} + \frac{8}{10}$

11)  $\frac{9}{10} + \frac{4}{10}$

13)  $\frac{1}{4} + \frac{1}{4}$

2)  $\frac{2}{8} + \frac{2}{8}$

4)  $\frac{4}{12} + \frac{7}{12}$

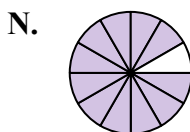
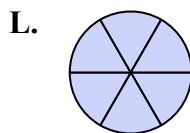
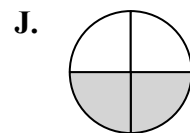
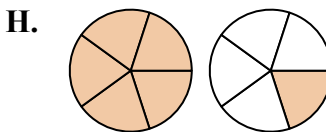
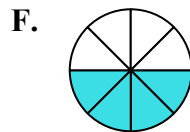
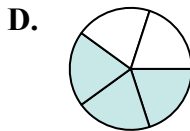
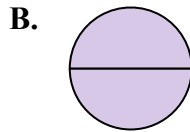
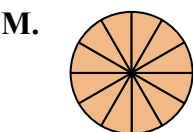
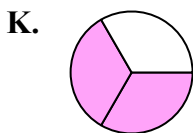
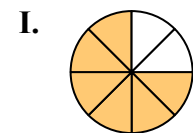
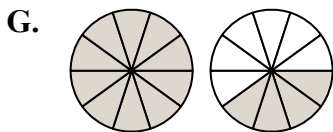
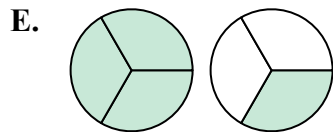
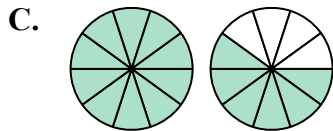
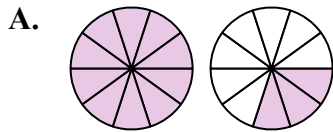
6)  $\frac{3}{5} + \frac{3}{5}$

8)  $\frac{1}{5} + \frac{2}{5}$

10)  $\frac{1}{3} + \frac{1}{3}$

12)  $\frac{1}{8} + \frac{5}{8}$

14)  $\frac{9}{10} + \frac{7}{10}$



**Câu trả lời**

1. **E**  $1\frac{1}{3}$

2. **F**  $\frac{4}{8}$

3. **M**  $1\frac{12}{12}$

4. **N**  $1\frac{11}{12}$

5. **B**  $\frac{2}{2}$

6. **H**  $1\frac{1}{5}$

7. **L**  $\frac{6}{6}$

8. **D**  $\frac{3}{5}$

9. **G**  $1\frac{4}{10}$

10. **K**  $\frac{2}{3}$

11. **A**  $1\frac{3}{10}$

12. **I**  $\frac{6}{8}$

13. **J**  $\frac{2}{4}$

14. **C**  $1\frac{6}{10}$



Xác định đáp án nào phù hợp với mỗi câu.

**Câu trả lời**

1)  $\frac{2}{3} + \frac{2}{3}$

2)  $\frac{3}{5} + \frac{3}{5}$

3)  $\frac{1}{2} + \frac{1}{2}$

4)  $\frac{2}{4} + \frac{3}{4}$

5)  $\frac{1}{4} + \frac{2}{4}$

6)  $\frac{4}{12} + \frac{6}{12}$

7)  $\frac{4}{8} + \frac{1}{8}$

8)  $\frac{2}{5} + \frac{1}{5}$

9)  $\frac{6}{10} + \frac{9}{10}$

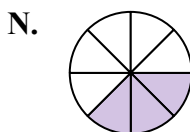
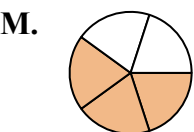
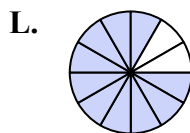
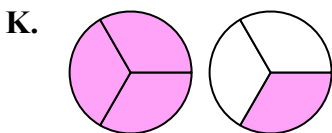
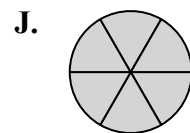
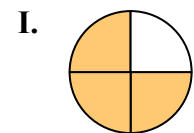
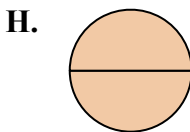
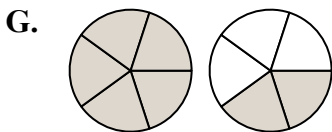
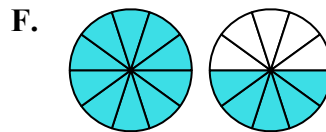
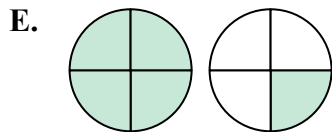
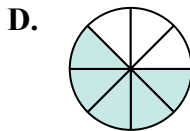
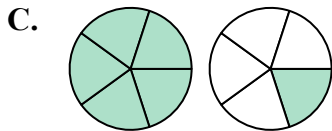
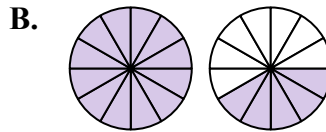
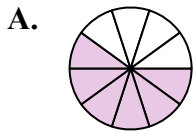
10)  $\frac{6}{12} + \frac{11}{12}$

11)  $\frac{3}{10} + \frac{3}{10}$

12)  $\frac{2}{8} + \frac{1}{8}$

13)  $\frac{2}{6} + \frac{4}{6}$

14)  $\frac{3}{5} + \frac{4}{5}$



1. \_\_\_\_\_

2. \_\_\_\_\_

3. \_\_\_\_\_

4. \_\_\_\_\_

5. \_\_\_\_\_

6. \_\_\_\_\_

7. \_\_\_\_\_

8. \_\_\_\_\_

9. \_\_\_\_\_

10. \_\_\_\_\_

11. \_\_\_\_\_

12. \_\_\_\_\_

13. \_\_\_\_\_

14. \_\_\_\_\_



Xác định đáp án nào phù hợp với mỗi câu.

1)  $\frac{2}{3} + \frac{2}{3}$

3)  $\frac{1}{2} + \frac{1}{2}$

5)  $\frac{1}{4} + \frac{2}{4}$

7)  $\frac{4}{8} + \frac{1}{8}$

9)  $\frac{6}{10} + \frac{9}{10}$

11)  $\frac{3}{10} + \frac{3}{10}$

13)  $\frac{2}{6} + \frac{4}{6}$

2)  $\frac{3}{5} + \frac{3}{5}$

4)  $\frac{2}{4} + \frac{3}{4}$

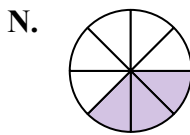
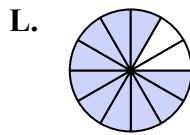
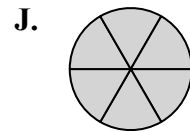
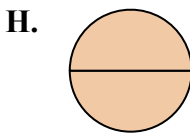
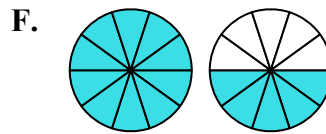
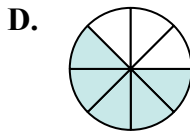
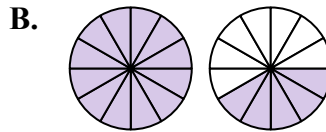
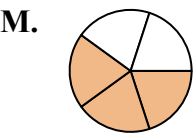
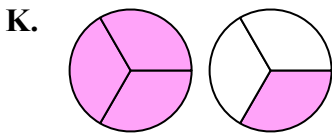
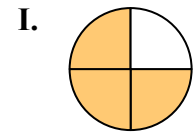
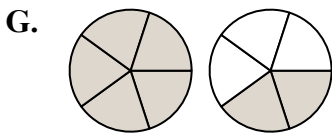
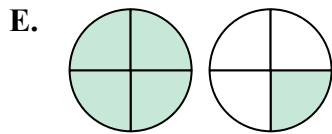
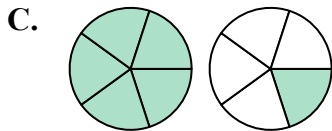
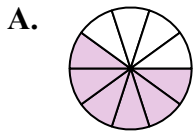
6)  $\frac{4}{12} + \frac{6}{12}$

8)  $\frac{2}{5} + \frac{1}{5}$

10)  $\frac{6}{12} + \frac{11}{12}$

12)  $\frac{2}{8} + \frac{1}{8}$

14)  $\frac{3}{5} + \frac{4}{5}$



**Câu trả lời**

1. **K**  $1\frac{1}{3}$

2. **C**  $1\frac{1}{5}$

3. **H**  $\frac{2}{2}$

4. **E**  $1\frac{1}{4}$

5. **I**  $\frac{3}{4}$

6. **L**  $\frac{10}{12}$

7. **D**  $\frac{5}{8}$

8. **M**  $\frac{3}{5}$

9. **F**  $1\frac{5}{10}$

10. **B**  $1\frac{5}{12}$

11. **A**  $\frac{6}{10}$

12. **N**  $\frac{3}{8}$

13. **J**  $\frac{6}{6}$

14. **G**  $1\frac{2}{5}$