



Xác định đáp án nào phù hợp với mỗi câu.

1) $\frac{2}{3} + \frac{2}{3}$

2) $\frac{2}{8} + \frac{2}{8}$

3) $\frac{4}{12} + \frac{8}{12}$

4) $\frac{4}{12} + \frac{7}{12}$

5) $\frac{1}{2} + \frac{1}{2}$

6) $\frac{3}{5} + \frac{3}{5}$

7) $\frac{2}{6} + \frac{4}{6}$

8) $\frac{1}{5} + \frac{2}{5}$

9) $\frac{6}{10} + \frac{8}{10}$

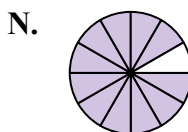
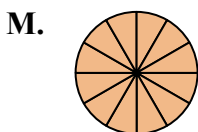
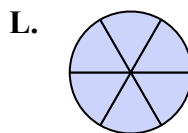
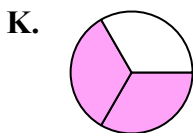
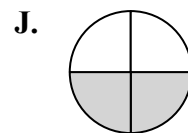
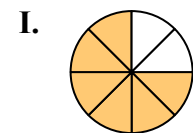
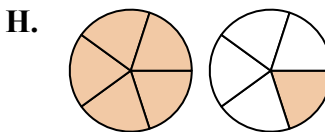
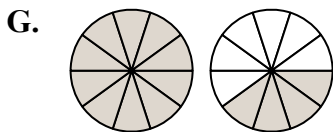
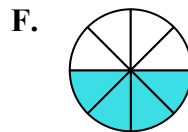
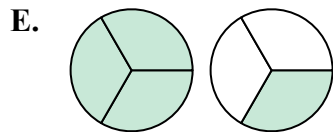
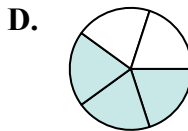
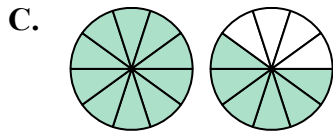
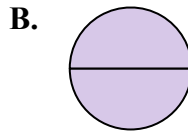
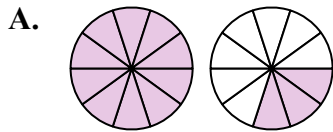
10) $\frac{1}{3} + \frac{1}{3}$

11) $\frac{9}{10} + \frac{4}{10}$

12) $\frac{1}{8} + \frac{5}{8}$

13) $\frac{1}{4} + \frac{1}{4}$

14) $\frac{9}{10} + \frac{7}{10}$



Câu trả lời

1. _____

2. _____

3. _____

4. _____

5. _____

6. _____

7. _____

8. _____

9. _____

10. _____

11. _____

12. _____

13. _____

14. _____



Xác định đáp án nào phù hợp với mỗi câu.

1) $\frac{2}{3} + \frac{2}{3}$

3) $\frac{4}{12} + \frac{8}{12}$

5) $\frac{1}{2} + \frac{1}{2}$

7) $\frac{2}{6} + \frac{4}{6}$

9) $\frac{6}{10} + \frac{8}{10}$

11) $\frac{9}{10} + \frac{4}{10}$

13) $\frac{1}{4} + \frac{1}{4}$

2) $\frac{2}{8} + \frac{2}{8}$

4) $\frac{4}{12} + \frac{7}{12}$

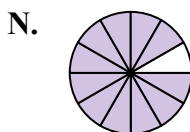
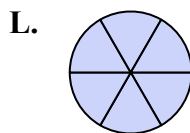
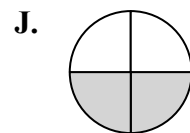
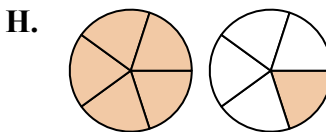
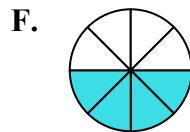
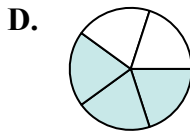
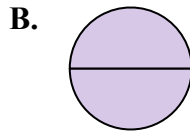
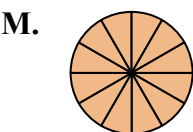
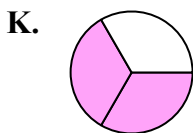
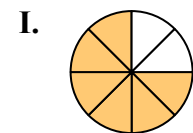
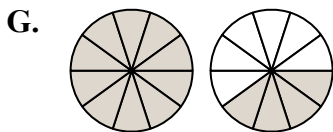
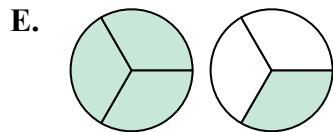
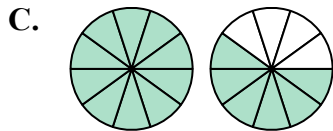
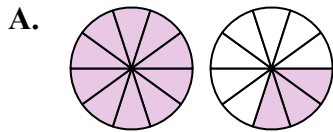
6) $\frac{3}{5} + \frac{3}{5}$

8) $\frac{1}{5} + \frac{2}{5}$

10) $\frac{1}{3} + \frac{1}{3}$

12) $\frac{1}{8} + \frac{5}{8}$

14) $\frac{9}{10} + \frac{7}{10}$



Câu trả lời

1. **E** $1\frac{1}{3}$

2. **F** $\frac{4}{8}$

3. **M** $\frac{12}{12}$

4. **N** $1\frac{11}{12}$

5. **B** $\frac{2}{2}$

6. **H** $1\frac{1}{5}$

7. **L** $\frac{6}{6}$

8. **D** $\frac{3}{5}$

9. **G** $1\frac{4}{10}$

10. **K** $\frac{2}{3}$

11. **A** $1\frac{3}{10}$

12. **I** $\frac{6}{8}$

13. **J** $\frac{2}{4}$

14. **C** $1\frac{6}{10}$