



Xác định đáp án nào phù hợp với mỗi câu.

Câu trả lời

1) $\frac{5}{10} + \frac{2}{10}$

2) $\frac{3}{10} + \frac{5}{10}$

3) $\frac{1}{2} + \frac{1}{2}$

4) $\frac{3}{5} + \frac{3}{5}$

5) $\frac{1}{8} + \frac{5}{8}$

6) $\frac{1}{3} + \frac{2}{3}$

7) $\frac{1}{8} + \frac{6}{8}$

8) $\frac{1}{6} + \frac{4}{6}$

9) $\frac{6}{10} + \frac{9}{10}$

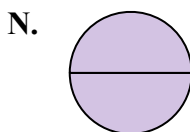
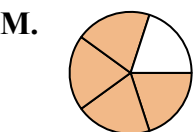
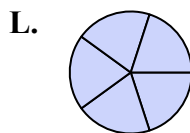
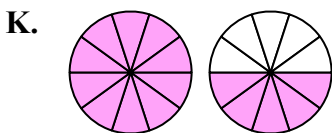
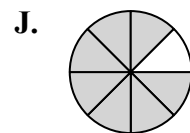
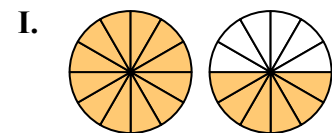
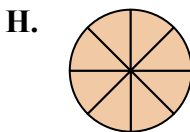
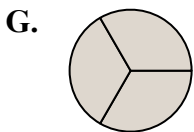
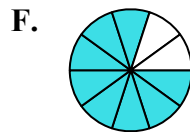
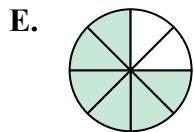
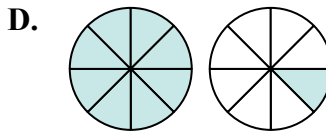
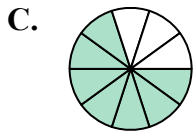
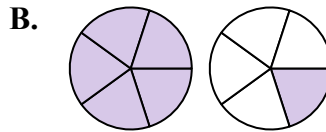
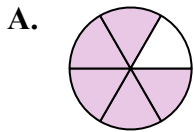
10) $\frac{8}{12} + \frac{10}{12}$

11) $\frac{2}{5} + \frac{2}{5}$

12) $\frac{2}{5} + \frac{3}{5}$

13) $\frac{4}{8} + \frac{4}{8}$

14) $\frac{4}{8} + \frac{5}{8}$



1. _____
2. _____
3. _____
4. _____
5. _____
6. _____
7. _____
8. _____
9. _____
10. _____
11. _____
12. _____
13. _____
14. _____



Xác định đáp án nào phù hợp với mỗi câu.

1) $\frac{5}{10} + \frac{2}{10}$

2) $\frac{3}{10} + \frac{5}{10}$

3) $\frac{1}{2} + \frac{1}{2}$

4) $\frac{3}{5} + \frac{3}{5}$

5) $\frac{1}{8} + \frac{5}{8}$

6) $\frac{1}{3} + \frac{2}{3}$

7) $\frac{1}{8} + \frac{6}{8}$

8) $\frac{1}{6} + \frac{4}{6}$

9) $\frac{6}{10} + \frac{9}{10}$

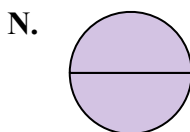
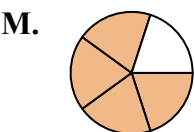
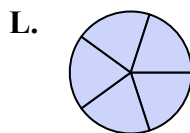
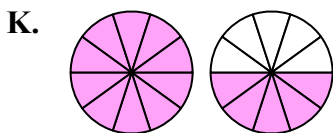
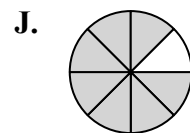
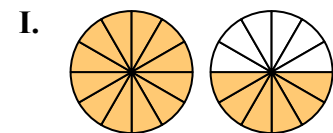
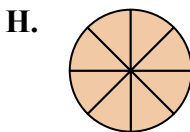
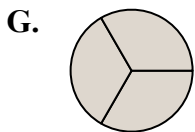
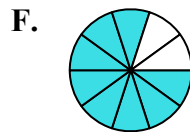
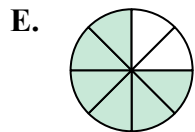
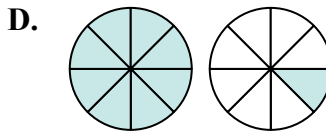
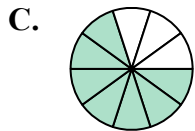
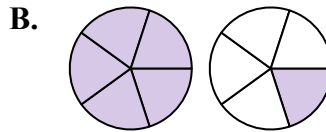
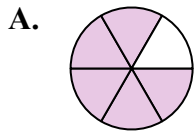
10) $\frac{8}{12} + \frac{10}{12}$

11) $\frac{2}{5} + \frac{2}{5}$

12) $\frac{2}{5} + \frac{3}{5}$

13) $\frac{4}{8} + \frac{4}{8}$

14) $\frac{4}{8} + \frac{5}{8}$



Câu trả lời

1. **C** $\frac{7}{10}$

2. **F** $\frac{8}{10}$

3. **N** $\frac{2}{2}$

4. **B** $1\frac{1}{5}$

5. **E** $\frac{6}{8}$

6. **G** $\frac{3}{3}$

7. **J** $\frac{7}{8}$

8. **A** $\frac{5}{6}$

9. **K** $1\frac{5}{10}$

10. **I** $1\frac{6}{12}$

11. **M** $\frac{4}{5}$

12. **L** $\frac{5}{5}$

13. **H** $\frac{8}{8}$

14. **D** $1\frac{1}{8}$