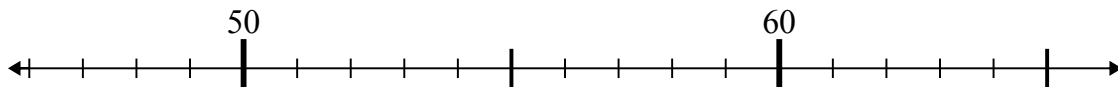


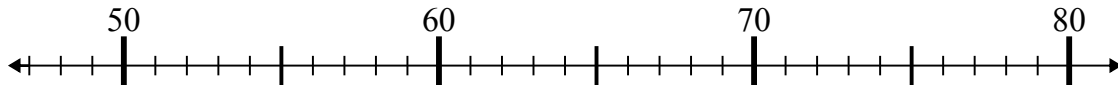


Dùng trục số để giải phép tính.

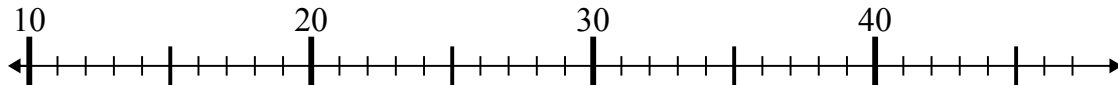
1)  $51 + 0 =$



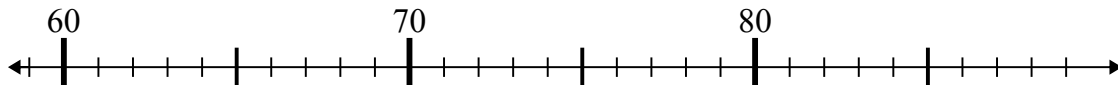
2)  $63 + 1 =$



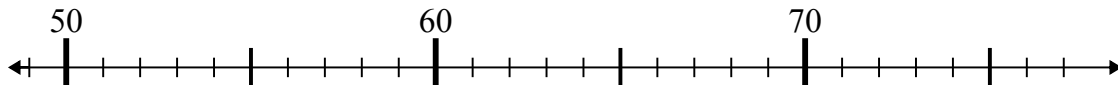
3)  $20 - 1 =$



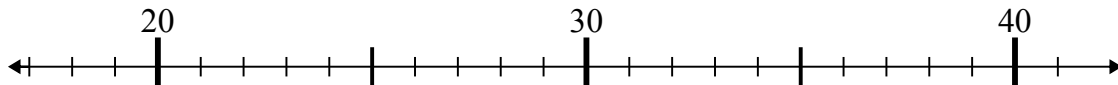
4)  $85 - 19 =$



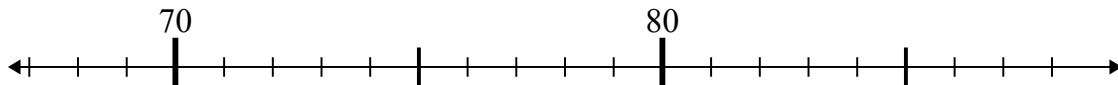
5)  $63 + 1 =$



6)  $24 - 5 =$



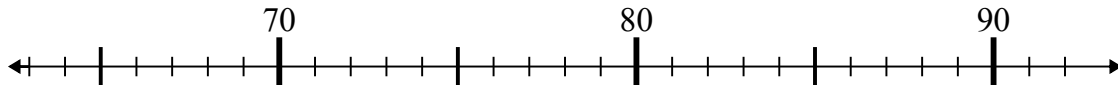
7)  $73 - 0 =$



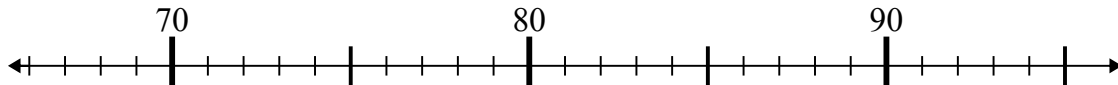
8)  $3 + 6 =$



9)  $69 + 17 =$



10)  $86 + 0 =$



**Câu trả lời**

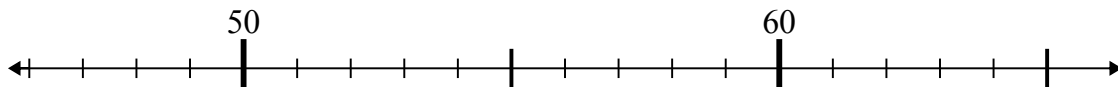
1. \_\_\_\_\_
2. \_\_\_\_\_
3. \_\_\_\_\_
4. \_\_\_\_\_
5. \_\_\_\_\_
6. \_\_\_\_\_
7. \_\_\_\_\_
8. \_\_\_\_\_
9. \_\_\_\_\_
10. \_\_\_\_\_



Dùng trục số để giải phép tính.

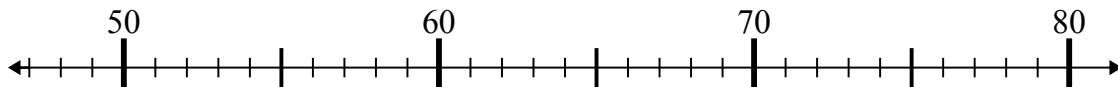
**Câu trả lời**

1)  $51 + 0 =$



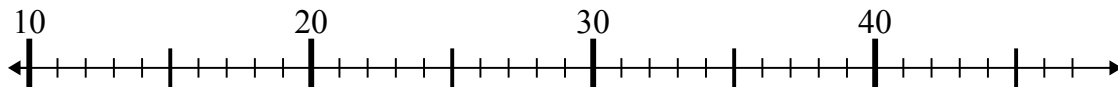
1. 51

2)  $63 + 1 =$



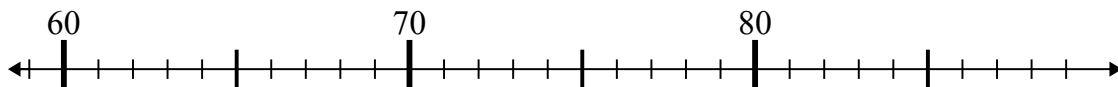
2. 64

3)  $20 - 1 =$



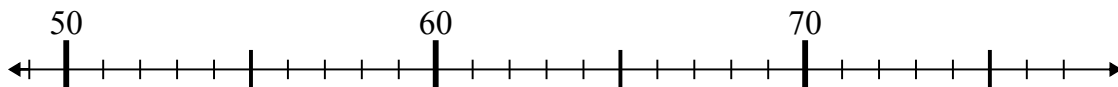
3. 19

4)  $85 - 19 =$



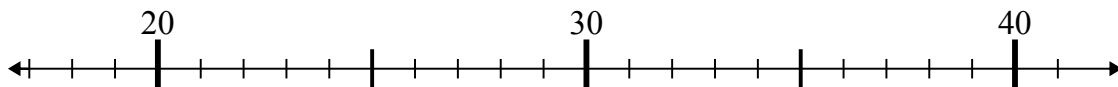
4. 66

5)  $63 + 1 =$



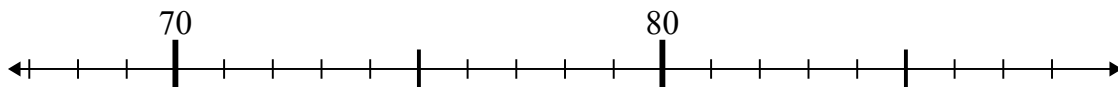
5. 64

6)  $24 - 5 =$



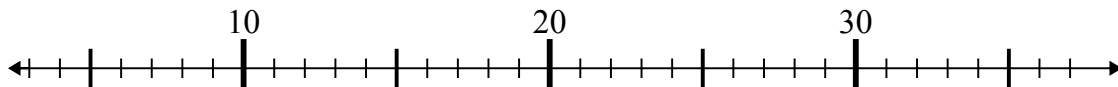
6. 19

7)  $73 - 0 =$



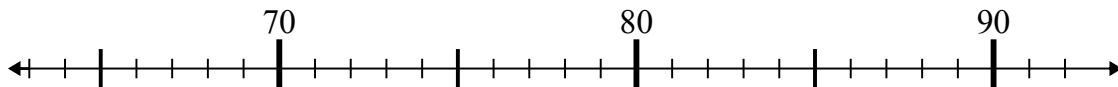
7. 73

8)  $3 + 6 =$



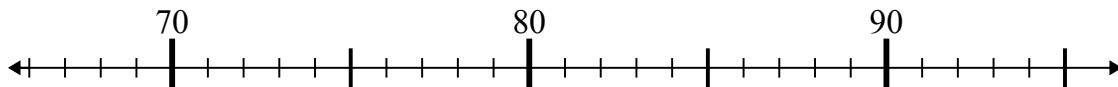
8. 9

9)  $69 + 17 =$



9. 86

10)  $86 + 0 =$



10. 86